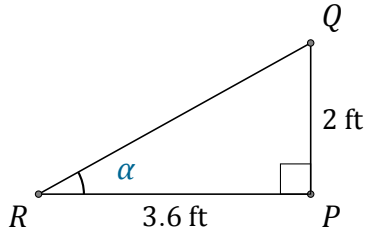


# Funciones Trigonómicas (F)

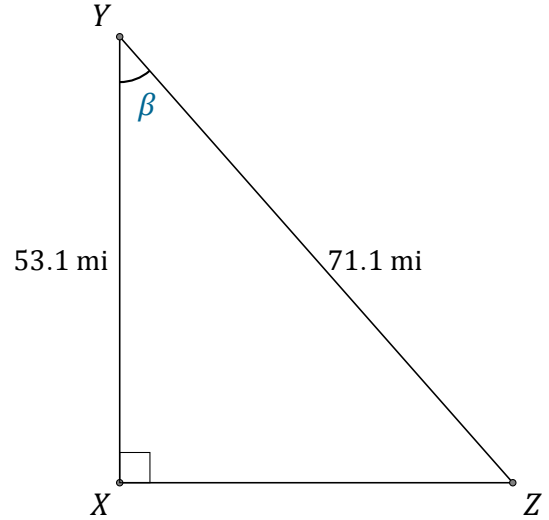
Nombre: \_\_\_\_\_

Fecha: \_\_\_\_\_

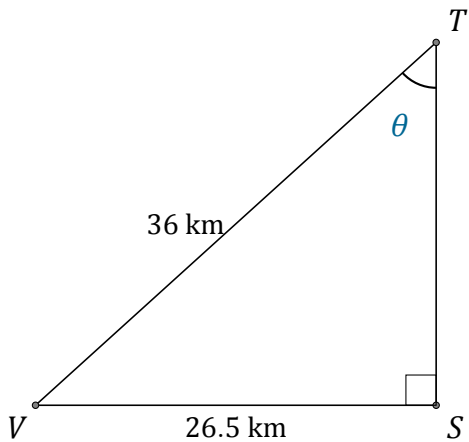
Calcule los valores de los ángulos usando funciones trigonométricas



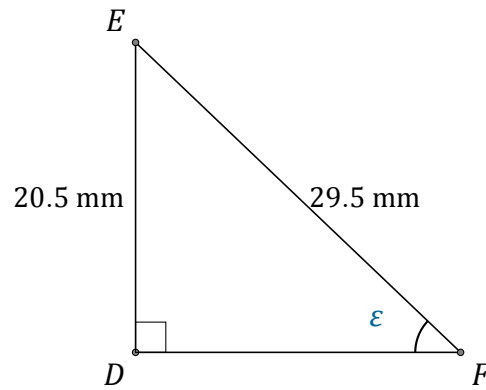
$$\alpha = \angle PRQ = \underline{\hspace{2cm}}$$



$$\beta = \angle XYZ = \underline{\hspace{2cm}}$$



$$\theta = \angle STV = \underline{\hspace{2cm}}$$



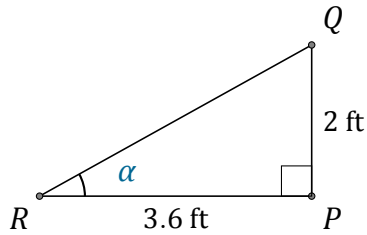
$$\epsilon = \angle DFE = \underline{\hspace{2cm}}$$

# Funciones Trigonómicas (F) Respuestas

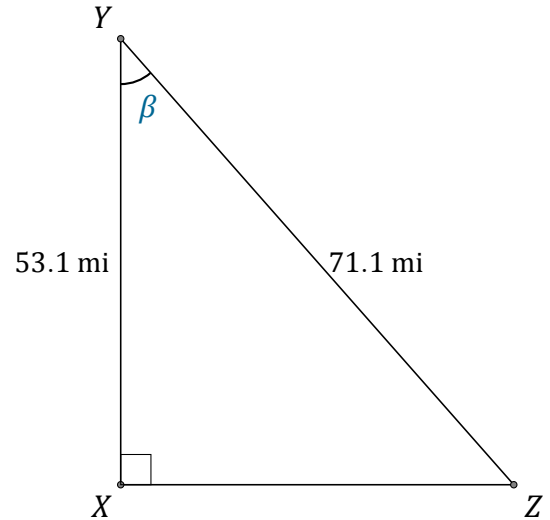
Nombre: \_\_\_\_\_

Fecha: \_\_\_\_\_

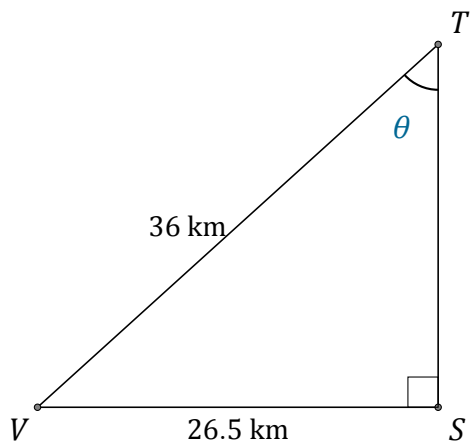
Calcule los valores de los ángulos usando funciones trigonométricas



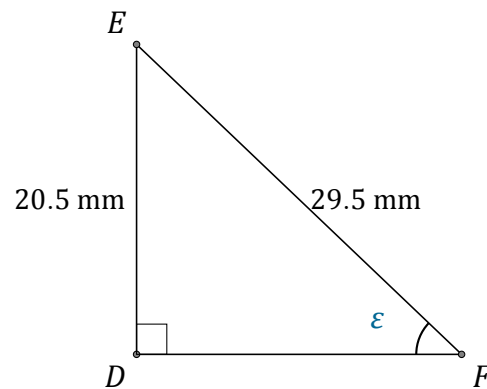
$$\alpha = \angle PRQ = \underline{29.1^\circ}$$



$$\beta = \angle XYZ = \underline{41.7^\circ}$$



$$\theta = \angle STV = \underline{47.4^\circ}$$



$$\epsilon = \angle DFE = \underline{44^\circ}$$