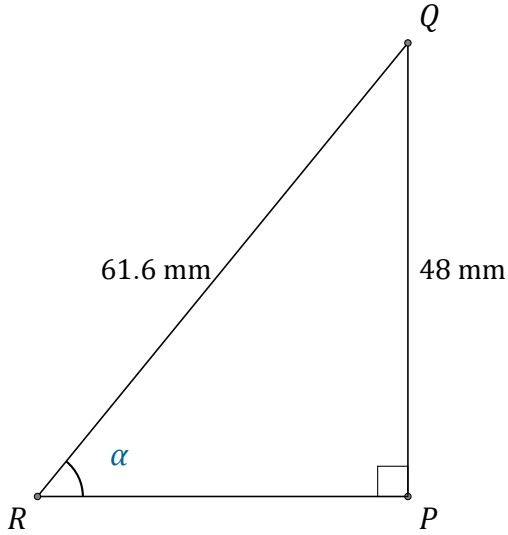


Funciones Trigonométricas (G)

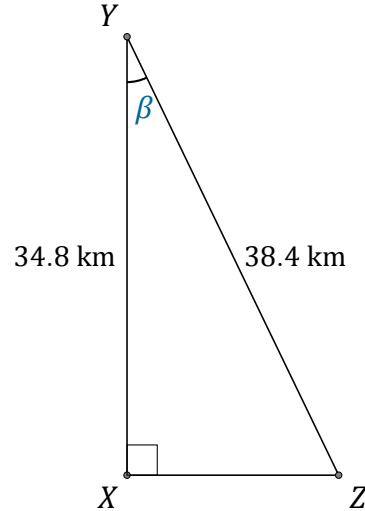
Nombre: _____

Fecha: _____

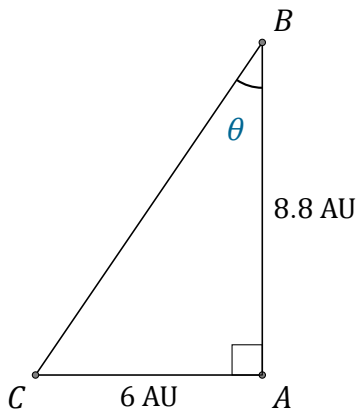
Calcule los valores de los ángulos usando funciones trigonométricas



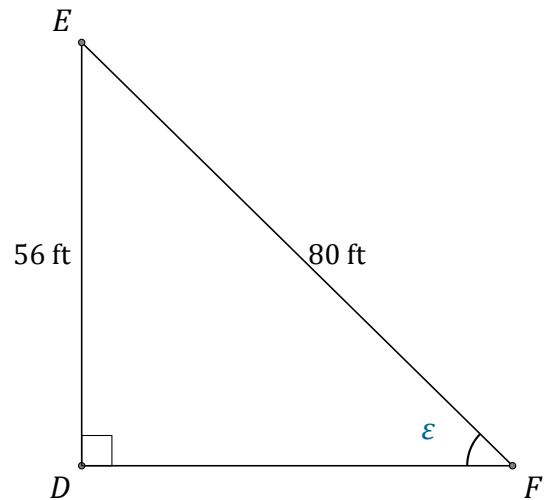
$$\alpha = \angle PRQ = \underline{\hspace{2cm}}$$



$$\beta = \angle XYZ = \underline{\hspace{2cm}}$$



$$\theta = \angle ABC = \underline{\hspace{2cm}}$$



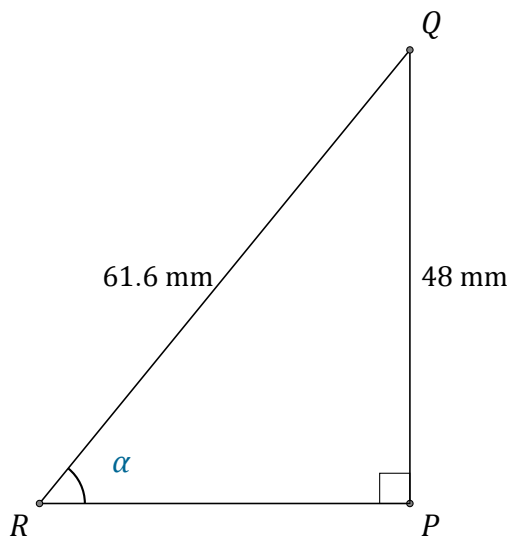
$$\epsilon = \angle DFE = \underline{\hspace{2cm}}$$

Funciones Trigonómicas (G) Respuestas

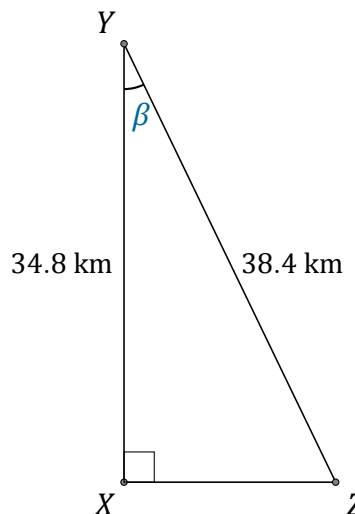
Nombre: _____

Fecha: _____

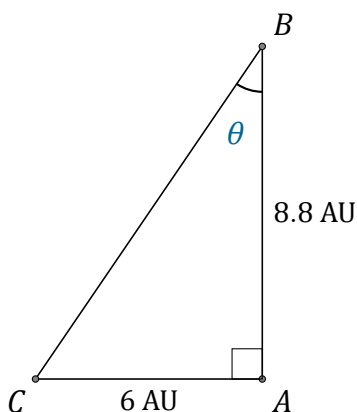
Calcule los valores de los ángulos usando funciones trigonométricas



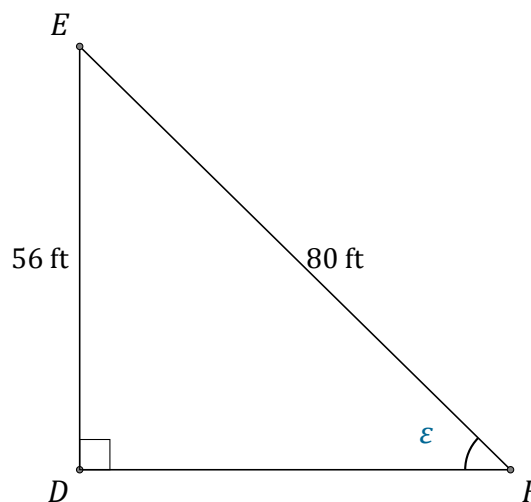
$$\alpha = \angle PRQ = \underline{51.2^\circ}$$



$$\beta = \angle XYZ = \underline{25^\circ}$$



$$\theta = \angle ABC = \underline{34.3^\circ}$$



$$\epsilon = \angle DFE = \underline{44.4^\circ}$$