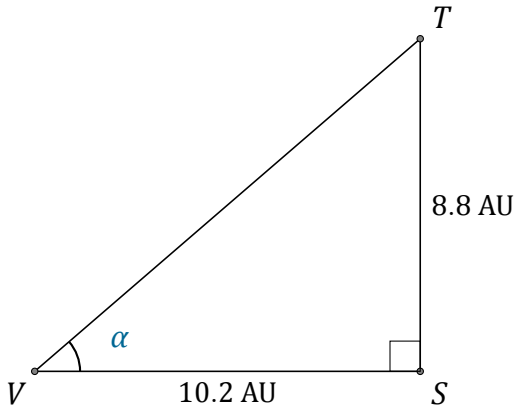


Funciones Trigonométricas (H)

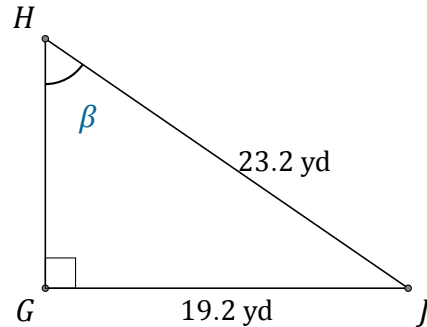
Nombre: _____

Fecha: _____

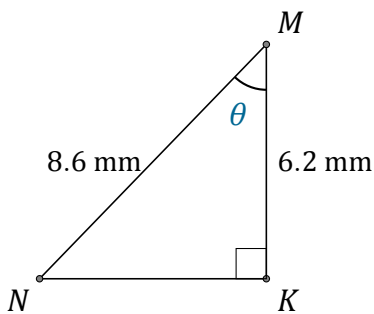
Calcule los valores de los ángulos usando funciones trigonométricas



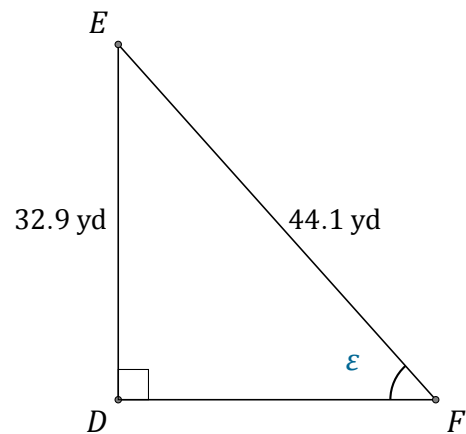
$$\alpha = \angle SVT = \underline{\hspace{2cm}}$$



$$\beta = \angle GHJ = \underline{\hspace{2cm}}$$



$$\theta = \angle KMN = \underline{\hspace{2cm}}$$



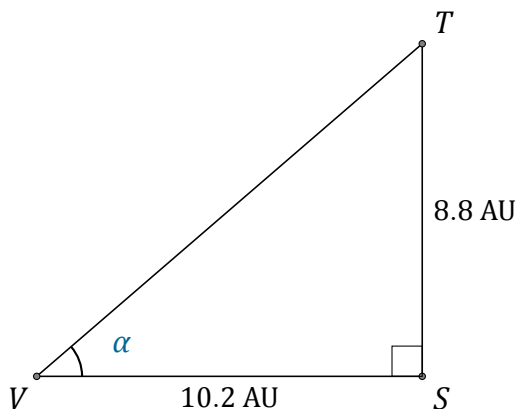
$$\epsilon = \angle DFE = \underline{\hspace{2cm}}$$

Funciones Trigonométricas (H) Respuestas

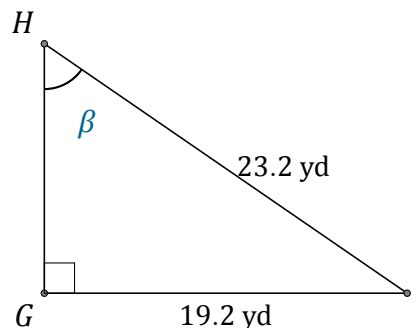
Nombre: _____

Fecha: _____

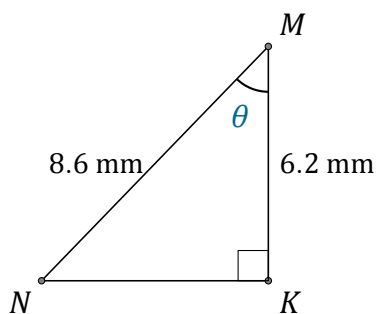
Calcule los valores de los ángulos usando funciones trigonométricas



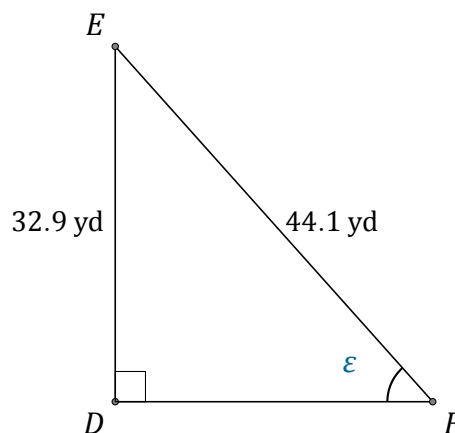
$$\alpha = \angle SVT = \underline{40.8^\circ}$$



$$\beta = \angle GHJ = \underline{55.9^\circ}$$



$$\theta = \angle KMN = \underline{43.9^\circ}$$



$$\epsilon = \angle DFE = \underline{48.2^\circ}$$