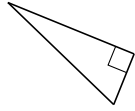
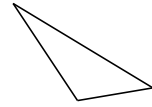
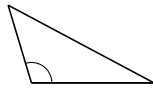


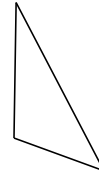
Clasificar Triángulos (B)

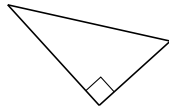
Clasifique cada triángulo de acuerdo a la medida de sus ángulos.

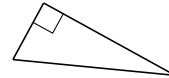


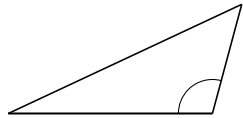


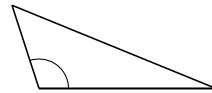


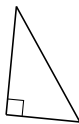


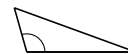






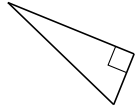




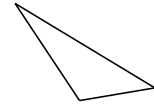


Clasificar Triángulos (B) Respuestas

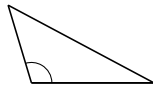
Clasifique cada triángulo de acuerdo a la medida de sus ángulos.



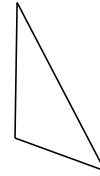
rectángulo



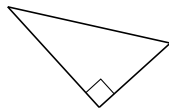
acutángulo



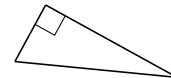
obtusángulo



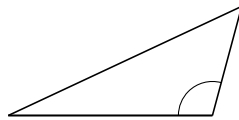
acutángulo



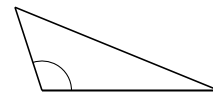
rectángulo



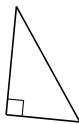
rectángulo



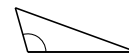
obtusángulo



obtusángulo



rectángulo



obtusángulo