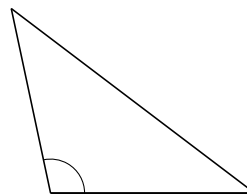


# Clasificar Triángulos (G)

Clasifique cada triángulo de acuerdo a la medida de sus ángulos.



\_\_\_\_\_



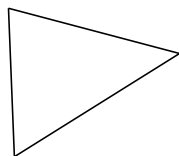
\_\_\_\_\_



\_\_\_\_\_



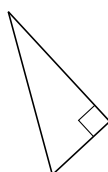
\_\_\_\_\_




\_\_\_\_\_



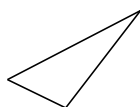
\_\_\_\_\_



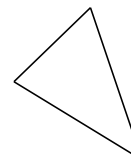
\_\_\_\_\_



\_\_\_\_\_



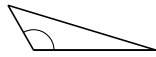
\_\_\_\_\_



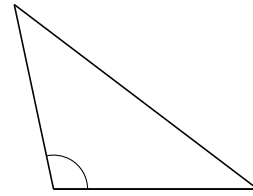
\_\_\_\_\_

# Clasificar Triángulos (G) Respuestas

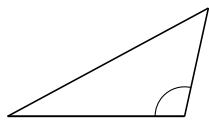
Clasifique cada triángulo de acuerdo a la medida de sus ángulos.



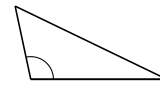
obtusángulo



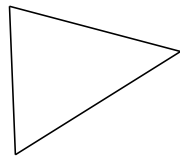
obtusángulo



obtusángulo



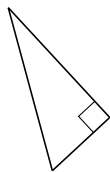
obtusángulo



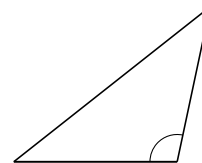
acutángulo



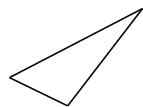
rectángulo



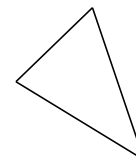
rectángulo



obtusángulo



acutángulo



acutángulo