
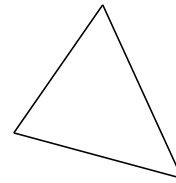
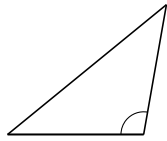


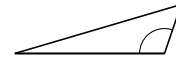
Clasificar Triángulos (H)

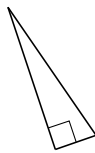
Clasifique cada triángulo de acuerdo a la medida de sus ángulos.

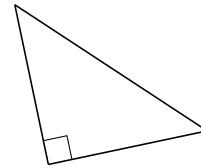


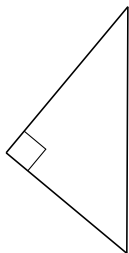


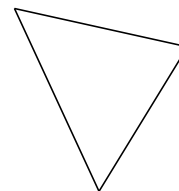


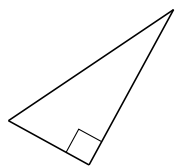













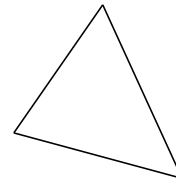


Clasificar Triángulos (H) Respuestas

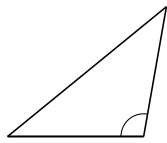
Clasifique cada triángulo de acuerdo a la medida de sus ángulos.



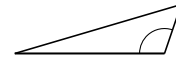
acutángulo



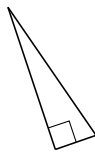
acutángulo



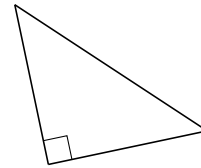
obtusángulo



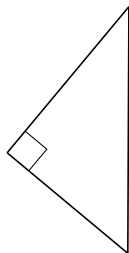
obtusángulo



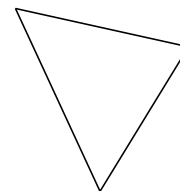
rectángulo



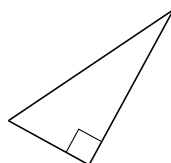
rectángulo



rectángulo



acutángulo



rectángulo



acutángulo