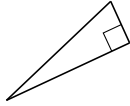
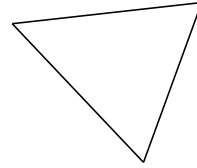


# Clasificar Triángulos (I)

Clasifique cada triángulo de acuerdo a la medida de sus ángulos.



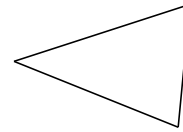
\_\_\_\_\_



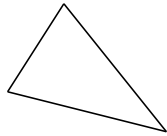
\_\_\_\_\_



\_\_\_\_\_



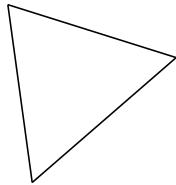
\_\_\_\_\_



\_\_\_\_\_



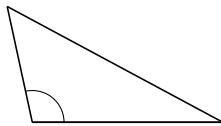
\_\_\_\_\_



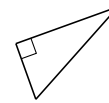
\_\_\_\_\_



\_\_\_\_\_



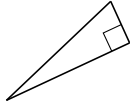
\_\_\_\_\_



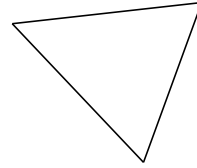
\_\_\_\_\_

# Clasificar Triángulos (I) Respuestas

Clasifique cada triángulo de acuerdo a la medida de sus ángulos.



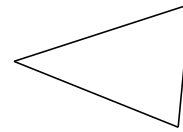
rectángulo



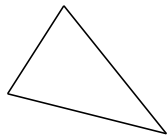
acutángulo



obtusángulo



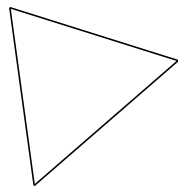
acutángulo



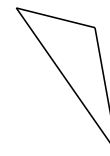
acutángulo



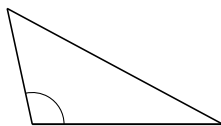
rectángulo



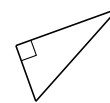
acutángulo



acutángulo



obtusángulo



rectángulo