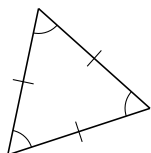
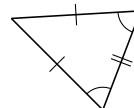
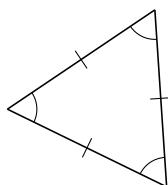


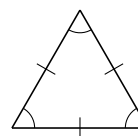
Clasificar Triángulos (A)

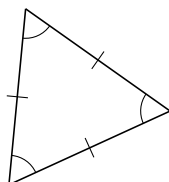
Clasifique cada triángulo de acuerdo a la medida de sus lados.

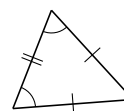


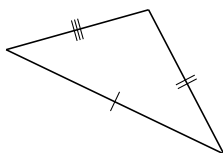


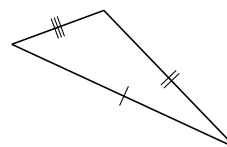


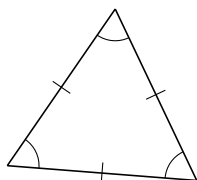


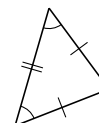






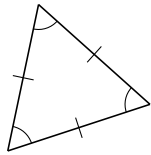




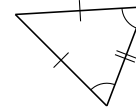


Clasificar Triángulos (A) Respuestas

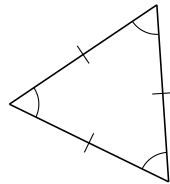
Clasifique cada triángulo de acuerdo a la medida de sus lados.



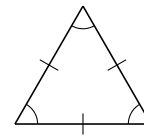
equilátero



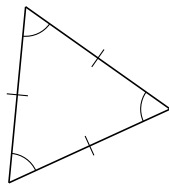
isósceles



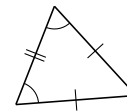
equilátero



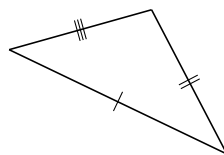
equilátero



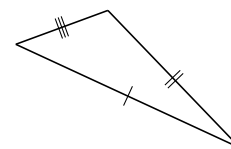
equilátero



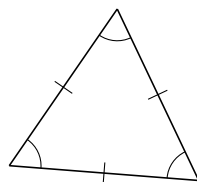
isósceles



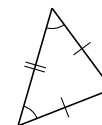
escaleno



escaleno



equilátero



isósceles