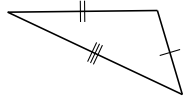
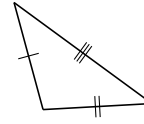


## Clasificar Triángulos (B)

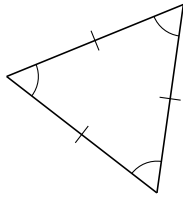
Clasifique cada triángulo de acuerdo a la medida de sus lados.



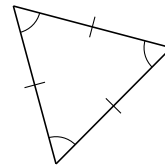
\_\_\_\_\_



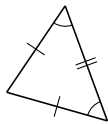
\_\_\_\_\_



\_\_\_\_\_



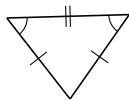
\_\_\_\_\_



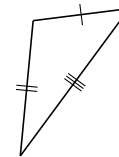
\_\_\_\_\_



\_\_\_\_\_



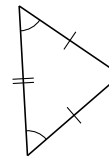
\_\_\_\_\_



\_\_\_\_\_



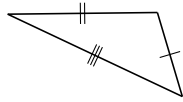
\_\_\_\_\_



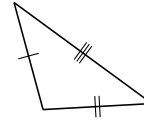
\_\_\_\_\_

## Clasificar Triángulos (B) Respuestas

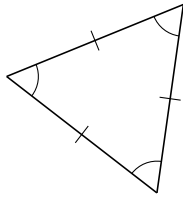
Clasifique cada triángulo de acuerdo a la medida de sus lados.



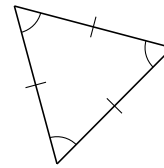
escaleno



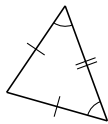
escaleno



equilátero



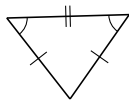
equilátero



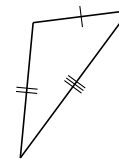
isósceles



isósceles



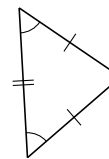
isósceles



escaleno



escaleno



isósceles