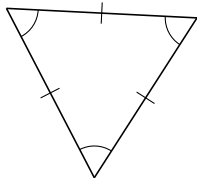
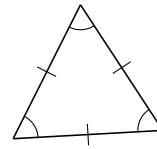
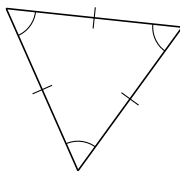


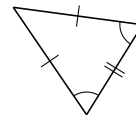
Clasificar Triángulos (C)

Clasifique cada triángulo de acuerdo a la medida de sus lados.

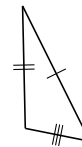


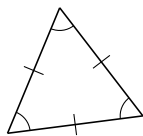


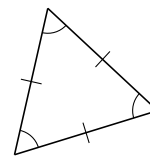


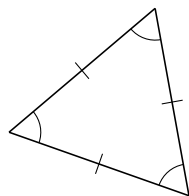


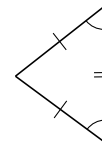






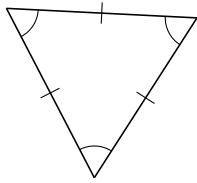




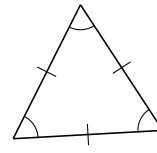


Clasificar Triángulos (C) Respuestas

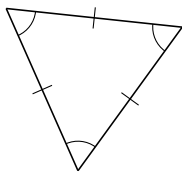
Clasifique cada triángulo de acuerdo a la medida de sus lados.



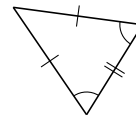
equilátero



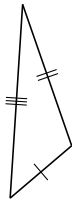
equilátero



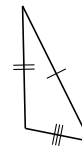
equilátero



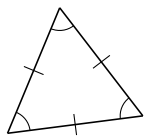
isósceles



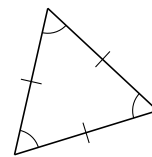
escaleno



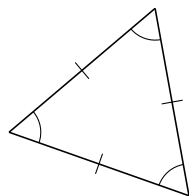
escaleno



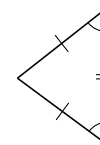
equilátero



equilátero



equilátero



isósceles