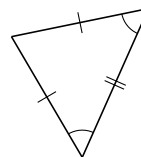
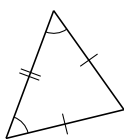


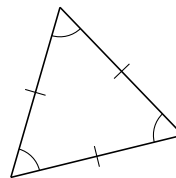
Clasificar Triángulos (D)

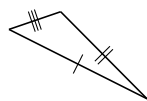
Clasifique cada triángulo de acuerdo a la medida de sus lados.

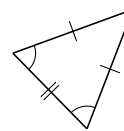


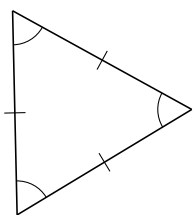


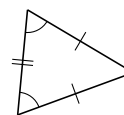


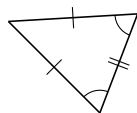


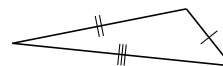






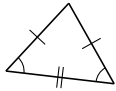




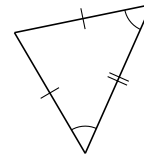


Clasificar Triángulos (D) Respuestas

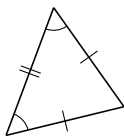
Clasifique cada triángulo de acuerdo a la medida de sus lados.



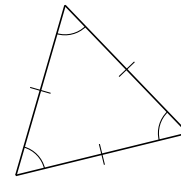
isósceles



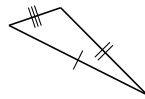
isósceles



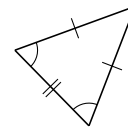
isósceles



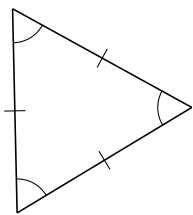
equilátero



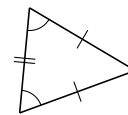
escaleno



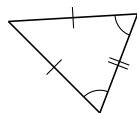
isósceles



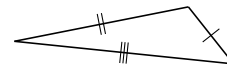
equilátero



isósceles



isósceles



escaleno