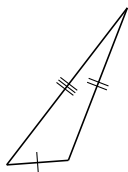
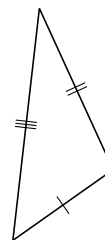
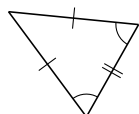


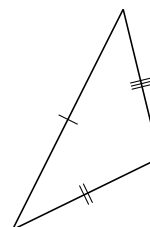
Clasificar Triángulos (E)

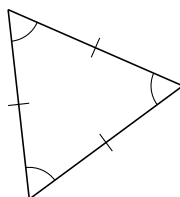
Clasifique cada triángulo de acuerdo a la medida de sus lados.





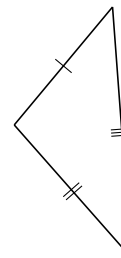


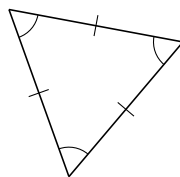








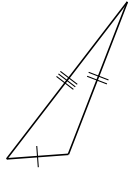




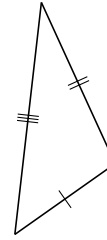


Clasificar Triángulos (E) Respuestas

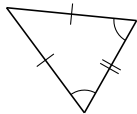
Clasifique cada triángulo de acuerdo a la medida de sus lados.



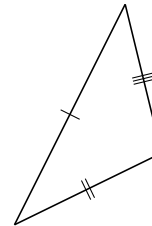
escaleno



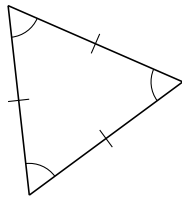
escaleno



isósceles



escaleno



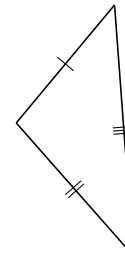
equilátero



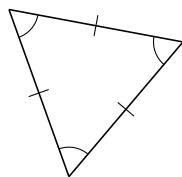
isósceles



equilátero



escaleno



equilátero



isósceles