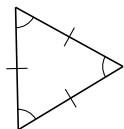
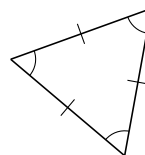
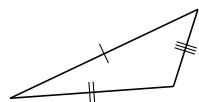


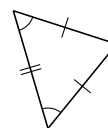
Clasificar Triángulos (F)

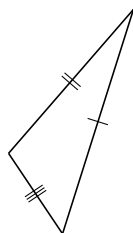
Clasifique cada triángulo de acuerdo a la medida de sus lados.

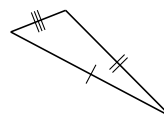


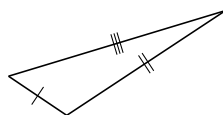


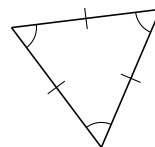


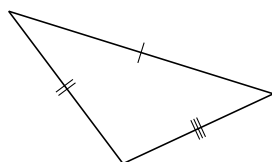


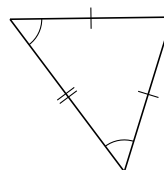






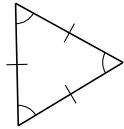




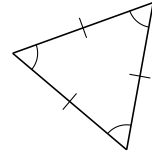


Clasificar Triángulos (F) Respuestas

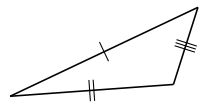
Clasifique cada triángulo de acuerdo a la medida de sus lados.



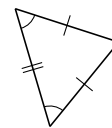
equilátero



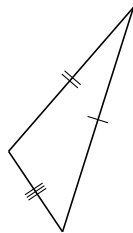
equilátero



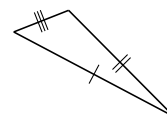
escaleno



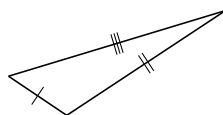
isósceles



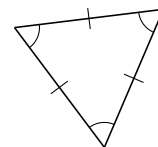
escaleno



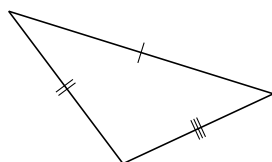
escaleno



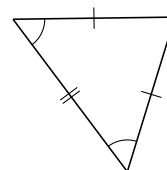
escaleno



equilátero



escaleno



isósceles