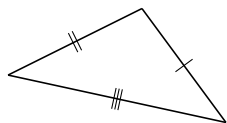
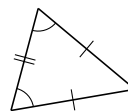
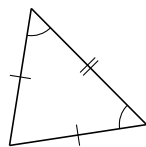


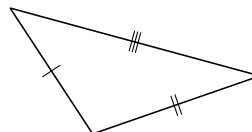
Clasificar Triángulos (G)

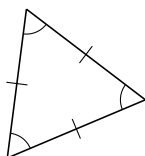
Clasifique cada triángulo de acuerdo a la medida de sus lados.

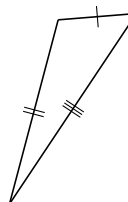


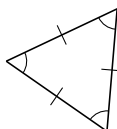


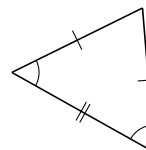


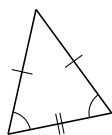


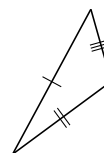






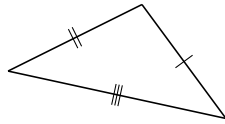




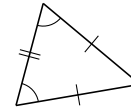


Clasificar Triángulos (G) Respuestas

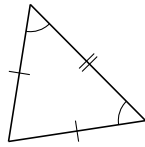
Clasifique cada triángulo de acuerdo a la medida de sus lados.



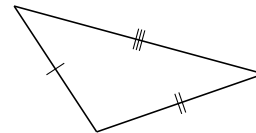
escaleno



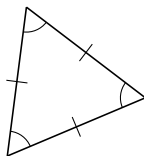
isósceles



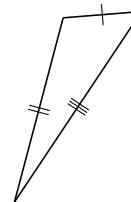
isósceles



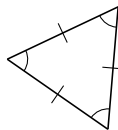
escaleno



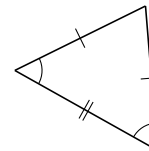
equilátero



escaleno



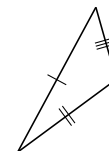
equilátero



isósceles



isósceles



escaleno