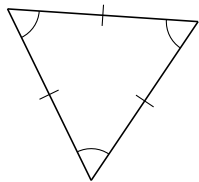
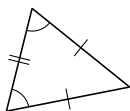


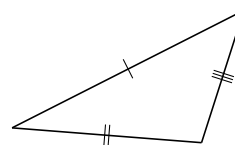
Clasificar Triángulos (I)

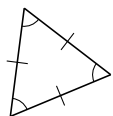
Clasifique cada triángulo de acuerdo a la medida de sus lados.

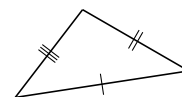


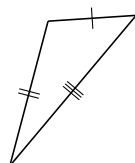


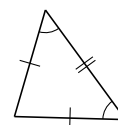


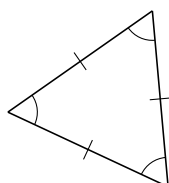


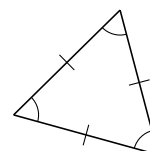






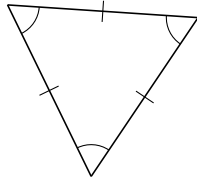




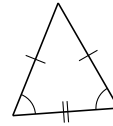


Clasificar Triángulos (I) Respuestas

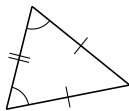
Clasifique cada triángulo de acuerdo a la medida de sus lados.



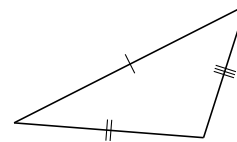
equilátero



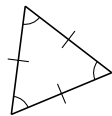
isósceles



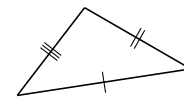
isósceles



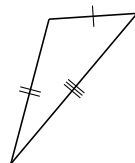
escaleno



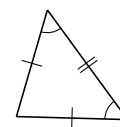
equilátero



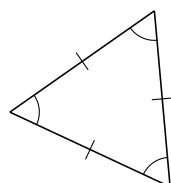
escaleno



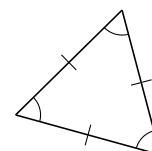
escaleno



isósceles



equilátero



equilátero