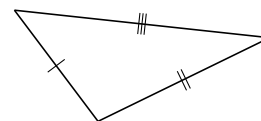
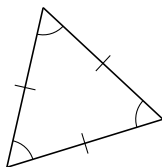
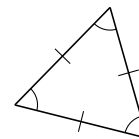
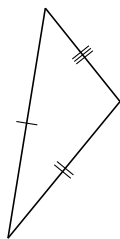
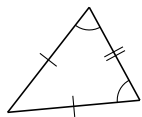
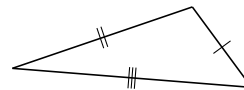
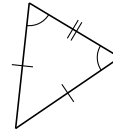
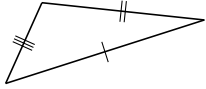


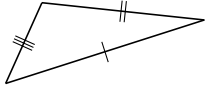
Clasificar Triángulos (J)

Clasifique cada triángulo de acuerdo a la medida de sus lados.

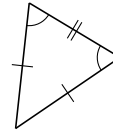


Clasificar Triángulos (J) Respuestas

Clasifique cada triángulo de acuerdo a la medida de sus lados.



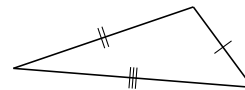
escaleno



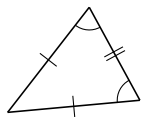
isósceles



escaleno



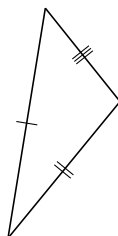
escaleno



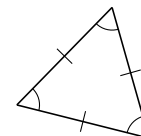
isósceles



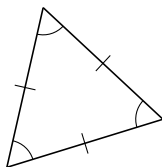
escaleno



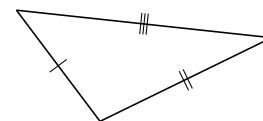
escaleno



equilátero



equilátero



escaleno