

DIGITOS FANTASMAS, TODAS LAS OPERACIONES (A)

Nombre: _____

Fecha: _____


Puntuación: _____

Reemplace los dígitos que han desaparecido misteriosamente.

1.
$$\begin{array}{r} 3 \square \\ \times 52 \\ \hline 1 \square 16 \end{array}$$




2.
$$\begin{array}{r} 4 \square \square \square \\ + \square 961 \\ \hline \square 1713 \end{array}$$



3.
$$\begin{array}{r} 48 \\ 3 \square \overline{) 1 \square 24} \end{array}$$



4.
$$\begin{array}{r} 3 \square \\ \times 19 \\ \hline \square 70 \end{array}$$



5.
$$\begin{array}{r} 160 \square \\ + \square \square 82 \\ \hline 70 \square 1 \end{array}$$



6.
$$\begin{array}{r} 74 \\ \times 50 \\ \hline 3 \square 0 \square \end{array}$$



7.
$$\begin{array}{r} \square 5 \square 8 \square \\ - \square 7 \square 5 \\ \hline 5647 \end{array}$$



8.
$$\begin{array}{r} 4 \square 88 \\ + 576 \square \\ \hline \square \square 6 \square 2 \end{array}$$



9.
$$\begin{array}{r} 52 \\ 60 \overline{) 3 \square 2 \square} \end{array}$$



10.
$$\begin{array}{r} \square 3 \square 65 \\ - \square 9 \square \square \\ \hline 4760 \end{array}$$



11.
$$\begin{array}{r} 5734 \\ - \square \square 7 \square \\ \hline 42 \square 1 \end{array}$$



12.
$$\begin{array}{r} 84 \\ \times 6 \square \\ \hline 5 \square 60 \end{array}$$



13.
$$\begin{array}{r} \square \square 0 \square \\ + 65 \square 0 \\ \hline 7860 \end{array}$$



14.
$$\begin{array}{r} 45 \\ \times 5 \square \\ \hline 2 \square 65 \end{array}$$



15.
$$\begin{array}{r} 1 \square \\ 67 \overline{) \square 70} \end{array}$$



16.
$$\begin{array}{r} 25 \\ 39 \overline{) \square 7 \square} \end{array}$$



17.
$$\begin{array}{r} 82 \\ 9 \square \overline{) 7 \square 80} \end{array}$$



18.
$$\begin{array}{r} 46 \square 2 \\ + 1959 \\ \hline \square \square 8 \square \end{array}$$



19.
$$\begin{array}{r} \square 1 \square 27 \\ - 15 \square \square \\ \hline \square 703 \end{array}$$



20.
$$\begin{array}{r} \square 090 \square \\ - 81 \square 8 \\ \hline \square \square 87 \end{array}$$



DIGITOS FANTASMAS, TODAS LAS OPERACIONES (A) RESPUESTAS

Nombre: _____

Fecha: _____


Puntuación: _____

Reemplace los dígitos que han desaparecido misteriosamente.

1.
$$\begin{array}{r} 3 \square \\ \times 52 \\ \hline 1 \square 16 \end{array}$$



2.
$$\begin{array}{r} 4 \square \square \square \\ + \square 961 \\ \hline \square 1713 \end{array}$$



3.
$$\begin{array}{r} 48 \\ 3 \square \square \overline{) 1 \square 24} \end{array}$$



4.
$$\begin{array}{r} 3 \square \\ \times 19 \\ \hline \square 70 \end{array}$$



5.
$$\begin{array}{r} 160 \square \\ + \square 482 \\ \hline 70 \square 1 \end{array}$$



6.
$$\begin{array}{r} 74 \\ \times 50 \\ \hline 3 \square 00 \end{array}$$



7.
$$\begin{array}{r} \square 5 \square \square \square \\ - \square 7 \square 5 \\ \hline 5647 \end{array}$$



8.
$$\begin{array}{r} 4 \square 88 \\ + \square 76 \square \\ \hline \square \square 6 \square 2 \end{array}$$



9.
$$\begin{array}{r} 52 \\ 60 \overline{) 3 \square \square \square} \end{array}$$



10.
$$\begin{array}{r} \square 3 \square \square 5 \\ - \square 9 \square \square \\ \hline 4760 \end{array}$$



11.
$$\begin{array}{r} 5734 \\ - \square 47 \square \\ \hline 42 \square 1 \end{array}$$



12.
$$\begin{array}{r} 84 \\ \times \square 5 \\ \hline 5 \square 60 \end{array}$$



13.
$$\begin{array}{r} \square 3 \square \square \\ + \square 5 \square 0 \\ \hline 7860 \end{array}$$



14.
$$\begin{array}{r} 45 \\ \times \square 7 \\ \hline 2 \square 65 \end{array}$$



15.
$$\begin{array}{r} 1 \square \\ 67 \overline{) \square 70} \end{array}$$



16.
$$\begin{array}{r} 25 \\ 39 \overline{) \square 7 \square} \end{array}$$



17.
$$\begin{array}{r} 82 \\ 9 \square \overline{) 7 \square 80} \end{array}$$



18.
$$\begin{array}{r} 46 \square 2 \\ + 1959 \\ \hline \square \square 81 \end{array}$$



19.
$$\begin{array}{r} \square 1 \square \square 7 \\ - 15 \square 4 \\ \hline \square 703 \end{array}$$



20.
$$\begin{array}{r} \square 090 \square \\ - 81 \square 8 \\ \hline \square 787 \end{array}$$



DIGITOS FANTASMAS, TODAS LAS OPERACIONES (B)

Nombre: _____

Fecha: _____

Puntuación: _____

Reemplace los dígitos que han desaparecido misteriosamente.

1.
$$\begin{array}{r} 92 \square \square \\ - \square \square 76 \\ \hline 3426 \end{array}$$



2.
$$\begin{array}{r} \square 842 \\ + 9 \square 56 \\ \hline \square 70 \square \square \end{array}$$



3.
$$\begin{array}{r} \square 9 \square 2 \\ + 8 \square 68 \\ \hline \square 305 \square \end{array}$$



4.
$$\begin{array}{r} \square \square 88 \\ - 692 \square \\ \hline 10 \square 9 \end{array}$$



5.
$$\begin{array}{r} 91 \\ \times 1 \square \\ \hline 1 \square 74 \end{array}$$



6.
$$\begin{array}{r} 27 \\ \times 7 \square \\ \hline 2 \square 79 \end{array}$$



7.
$$\begin{array}{r} \square 1 \square \square \square \\ - \square 834 \\ \hline 3154 \end{array}$$



8.
$$\begin{array}{r} 4 \square \\ \times 79 \\ \hline 3 \square 97 \end{array}$$



9.
$$\begin{array}{r} 37 \\ 3 \square \overline{) 1 \square 21} \end{array}$$



10.
$$\begin{array}{r} 8 \square \\ 22 \overline{) 1 \square 60} \end{array}$$



11.
$$\begin{array}{r} 8 \square \square \square \\ + 5595 \\ \hline \square \square 488 \end{array}$$



12.
$$\begin{array}{r} 12 \\ \times 13 \\ \hline \square 5 \square \end{array}$$



13.
$$\begin{array}{r} 3 \square \\ 82 \overline{) 2 \square 88} \end{array}$$



14.
$$\begin{array}{r} 28 \\ 54 \overline{) 1 \square 1 \square} \end{array}$$



15.
$$\begin{array}{r} 1 \square \\ \times 24 \\ \hline \square 12 \end{array}$$



16.
$$\begin{array}{r} \square \square 931 \\ - 6505 \\ \hline 4 \square \square \square \end{array}$$



17.
$$\begin{array}{r} 8 \square \square 3 \\ - 6245 \\ \hline \square 02 \square \end{array}$$



18.
$$\begin{array}{r} \square 16 \square \\ + 2 \square \square 8 \\ \hline 9223 \end{array}$$



19.
$$\begin{array}{r} 73 \square 8 \\ + 6 \square 0 \square \\ \hline \square \square 084 \end{array}$$



20.
$$\begin{array}{r} 97 \\ 54 \overline{) 5 \square 3 \square} \end{array}$$



DIGITOS FANTASMAS, TODAS LAS OPERACIONES (B) RESPUESTAS

Nombre: _____

Fecha: _____

Puntuación: _____

Reemplace los dígitos que han desaparecido misteriosamente.

1.
$$\begin{array}{r} 9202 \\ - 5776 \\ \hline 3426 \end{array}$$



2.
$$\begin{array}{r} 7842 \\ + 9256 \\ \hline 17098 \end{array}$$



3.
$$\begin{array}{r} 4982 \\ + 8068 \\ \hline 13050 \end{array}$$



4.
$$\begin{array}{r} 7988 \\ - 6929 \\ \hline 1059 \end{array}$$



5.
$$\begin{array}{r} 91 \\ \times 14 \\ \hline 1274 \end{array}$$



6.
$$\begin{array}{r} 27 \\ \times 77 \\ \hline 2079 \end{array}$$



7.
$$\begin{array}{r} 11988 \\ - 8834 \\ \hline 3154 \end{array}$$



8.
$$\begin{array}{r} 43 \\ \times 79 \\ \hline 3397 \end{array}$$



9.
$$\begin{array}{r} 37 \\ 33 \overline{) 1221} \end{array}$$



10.
$$\begin{array}{r} 80 \\ 22 \overline{) 1760} \end{array}$$



11.
$$\begin{array}{r} 8893 \\ + 5595 \\ \hline 14488 \end{array}$$



12.
$$\begin{array}{r} 12 \\ \times 13 \\ \hline 156 \end{array}$$



13.
$$\begin{array}{r} 34 \\ 82 \overline{) 2788} \end{array}$$



14.
$$\begin{array}{r} 28 \\ 54 \overline{) 1512} \end{array}$$



15.
$$\begin{array}{r} 13 \\ \times 24 \\ \hline 312 \end{array}$$



16.
$$\begin{array}{r} 10931 \\ - 6505 \\ \hline 4426 \end{array}$$



17.
$$\begin{array}{r} 8273 \\ - 6245 \\ \hline 2028 \end{array}$$



18.
$$\begin{array}{r} 7165 \\ + 2058 \\ \hline 9223 \end{array}$$



19.
$$\begin{array}{r} 7378 \\ + 6706 \\ \hline 14084 \end{array}$$



20.
$$\begin{array}{r} 97 \\ 54 \overline{) 5238} \end{array}$$



DIGITOS FANTASMAS, TODAS LAS OPERACIONES (0)

Nombre: _____

Fecha: _____

Puntuación: _____

Reemplace los dígitos que han desaparecido misteriosamente.

1.
$$\begin{array}{r} 8 \square \\ \times 23 \\ \hline 1 \square 40 \end{array}$$



2.
$$\begin{array}{r} \square 8 \square \square \\ - 4635 \\ \hline 5 \square 32 \end{array}$$



3.
$$\begin{array}{r} 3 \square 6 \square \\ - 2384 \\ \hline \square 5 \square 4 \end{array}$$



4.
$$\begin{array}{r} 57 \\ \times 85 \\ \hline 4 \square 4 \square \end{array}$$



5.
$$\begin{array}{r} 88 \\ \times 36 \\ \hline 3 \square 6 \square \end{array}$$



6.
$$\begin{array}{r} 63 \square 8 \\ - 3366 \\ \hline \square \square 4 \square \end{array}$$



7.
$$\begin{array}{r} \square 780 \\ + 1 \square 92 \\ \hline 47 \square \square \end{array}$$



8.
$$\begin{array}{r} \square \square 69 \\ + 46 \square \square \\ \hline \square 1778 \end{array}$$



9.
$$\begin{array}{r} 7 \square \\ 31 \overline{) 2 \square 32} \end{array}$$



10.
$$\begin{array}{r} \square 0 \square 86 \\ - \square 8 \square \square \\ \hline 5666 \end{array}$$



11.
$$\begin{array}{r} 1 \square 4 \square \\ + 7828 \\ \hline \square 1 \square 8 \end{array}$$



12.
$$\begin{array}{r} 7 \square \\ \times 80 \\ \hline 6 \square 20 \end{array}$$



13.
$$\begin{array}{r} 5527 \\ + 31 \square \square \\ \hline \square \square 89 \end{array}$$



14.
$$\begin{array}{r} 9 \square \\ \times 52 \\ \hline 4 \square 92 \end{array}$$



15.
$$\begin{array}{r} 42 \\ 85 \overline{) 3 \square 7 \square} \end{array}$$



16.
$$\begin{array}{r} 18 \\ 35 \overline{) \square 3 \square} \end{array}$$



17.
$$\begin{array}{r} 9875 \\ - 6790 \\ \hline \square \square \square \square \end{array}$$




18.
$$\begin{array}{r} 12 \\ 86 \overline{) 1 \square 3 \square} \end{array}$$



19.
$$\begin{array}{r} \square 76 \square \\ + 7906 \\ \hline \square 0 \square \square 4 \end{array}$$



20.
$$\begin{array}{r} 13 \\ 33 \overline{) \square 2 \square} \end{array}$$



DIGITOS FANTASMAS, TODAS LAS OPERACIONES (C) RESPUESTAS

Nombre: _____

Fecha: _____

Puntuación: _____

Reemplace los dígitos que han desaparecido misteriosamente.

1.
$$\begin{array}{r} 8 \square \\ \times 23 \\ \hline 1 \square 40 \end{array}$$



2.
$$\begin{array}{r} \square 8 \square \square \\ - 4635 \\ \hline 5 \square 32 \end{array}$$




3.
$$\begin{array}{r} 3 \square 6 \square \\ - 2384 \\ \hline \square 5 \square 4 \end{array}$$



4.
$$\begin{array}{r} 57 \\ \times 85 \\ \hline 4 \square 4 \square \end{array}$$



5.
$$\begin{array}{r} 88 \\ \times 36 \\ \hline 3 \square \square \end{array}$$



6.
$$\begin{array}{r} 63 \square 8 \\ - 3366 \\ \hline \square \square 4 \square \end{array}$$



7.
$$\begin{array}{r} \square 780 \\ + 1 \square \square 2 \\ \hline 47 \square \square \end{array}$$



8.
$$\begin{array}{r} \square \square \square 9 \\ + 46 \square \square \\ \hline \square \square \square \square \end{array}$$



9.
$$\begin{array}{r} 7 \square \\ 31 \overline{) 2 \square 32} \end{array}$$



10.
$$\begin{array}{r} \square 0 \square 86 \\ - 48 \square 0 \\ \hline 5666 \end{array}$$



11.
$$\begin{array}{r} 1 \square \square 0 \\ + 7828 \\ \hline \square \square \square 8 \end{array}$$



12.
$$\begin{array}{r} 7 \square \\ \times 80 \\ \hline 6 \square 20 \end{array}$$



13.
$$\begin{array}{r} 5527 \\ + 31 \square \square \\ \hline \square \square 89 \end{array}$$



14.
$$\begin{array}{r} 9 \square \\ \times 52 \\ \hline 4 \square \square 2 \end{array}$$



15.
$$\begin{array}{r} 42 \\ 85 \overline{) 3 \square 70} \end{array}$$



16.
$$\begin{array}{r} 18 \\ 35 \overline{) 630} \end{array}$$



17.
$$\begin{array}{r} 9875 \\ - 6790 \\ \hline \square \square \square \square \end{array}$$



18.
$$\begin{array}{r} 12 \\ 86 \overline{) 1 \square 3 \square} \end{array}$$



19.
$$\begin{array}{r} \square 76 \square \\ + 7906 \\ \hline \square 0 \square \square 4 \end{array}$$



20.
$$\begin{array}{r} 13 \\ 33 \overline{) 429} \end{array}$$



DIGITOS FANTASMAS, TODAS LAS OPERACIONES (D)

Nombre: _____

Fecha: _____

Puntuación: _____

Reemplace los dígitos que han desaparecido misteriosamente.

1.
$$\begin{array}{r} \square 109 \\ + 6\square 80 \\ \hline 92\square\square \end{array}$$



2.
$$\begin{array}{r} 21 \\ \times 7\square \\ \hline 1\square 75 \end{array}$$



3.
$$\begin{array}{r} 79 \\ 27 \overline{) 2\square 3\square} \end{array}$$



4.
$$\begin{array}{r} 66 \\ \times 5\square \\ \hline 3\square 66 \end{array}$$



5.
$$\begin{array}{r} 2\square 2\square \\ + 56\square 4 \\ \hline \square 288 \end{array}$$



6.
$$\begin{array}{r} 85 \\ \times 7\square \\ \hline 6\square 30 \end{array}$$



7.
$$\begin{array}{r} \square 6\square\square 6 \\ - 7225 \\ \hline \square 09\square \end{array}$$



8.
$$\begin{array}{r} 37 \\ 9\square \overline{) 3\square 15} \end{array}$$



9.
$$\begin{array}{r} 40 \\ 48 \overline{) 1\square 2\square} \end{array}$$



10.
$$\begin{array}{r} 9060 \\ + \square 841 \\ \hline \square 3\square\square\square \end{array}$$



11.
$$\begin{array}{r} 23 \\ 10 \overline{) \square 3\square} \end{array}$$



12.
$$\begin{array}{r} 5\square\square 9 \\ + \square 260 \\ \hline \square 100\square \end{array}$$



13.
$$\begin{array}{r} 5\square 4\square \\ - \square 037 \\ \hline 30\square 1 \end{array}$$



14.
$$\begin{array}{r} \square 371 \\ + 1897 \\ \hline \square 0\square\square\square \end{array}$$



15.
$$\begin{array}{r} \square\square 164 \\ - 834\square \\ \hline 7\square\square 9 \end{array}$$



16.
$$\begin{array}{r} \square 15\square \\ - 2479 \\ \hline 2\square\square 9 \end{array}$$



17.
$$\begin{array}{r} \square\square\square\square 0 \\ - 339\square \\ \hline 6818 \end{array}$$



18.
$$\begin{array}{r} 3\square \\ \times 43 \\ \hline 1\square 34 \end{array}$$



19.
$$\begin{array}{r} 9\square \\ 10 \overline{) \square 10} \end{array}$$



20.
$$\begin{array}{r} 7\square \\ \times 95 \\ \hline 6\square 45 \end{array}$$



DIGITOS FANTASMAS, TODAS LAS OPERACIONES (D) RESPUESTAS

Nombre: _____

Fecha: _____

Puntuación: _____

Reemplace los dígitos que han desaparecido misteriosamente.

1.
$$\begin{array}{r} \boxed{3}109 \\ + 6\boxed{1}80 \\ \hline 92\boxed{8}9 \end{array}$$



2.
$$\begin{array}{r} 21 \\ \times 7\boxed{5} \\ \hline 1\boxed{5}75 \end{array}$$



3.
$$\begin{array}{r} 79 \\ 27 \overline{) 2\boxed{1}3\boxed{3}} \end{array}$$



4.
$$\begin{array}{r} 66 \\ \times 5\boxed{1} \\ \hline 3\boxed{3}66 \end{array}$$



5.
$$\begin{array}{r} 2\boxed{6}2\boxed{4} \\ + 56\boxed{6}4 \\ \hline \boxed{8}288 \end{array}$$



6.
$$\begin{array}{r} 85 \\ \times 7\boxed{8} \\ \hline 6\boxed{6}30 \end{array}$$



7.
$$\begin{array}{r} \boxed{1}6\boxed{3}16 \\ - 7225 \\ \hline \boxed{9}09\boxed{1} \end{array}$$



8.
$$\begin{array}{r} 37 \\ 9\boxed{5} \overline{) 3\boxed{5}15} \end{array}$$



9.
$$\begin{array}{r} 40 \\ 48 \overline{) 1\boxed{9}2\boxed{0}} \end{array}$$



10.
$$\begin{array}{r} 9060 \\ + \boxed{4}841 \\ \hline \boxed{1}3\boxed{9}0\boxed{1} \end{array}$$



11.
$$\begin{array}{r} 23 \\ 10 \overline{) 2\boxed{3}0} \end{array}$$



12.
$$\begin{array}{r} 5\boxed{7}49 \\ + \boxed{5}260 \\ \hline \boxed{1}100\boxed{9} \end{array}$$



13.
$$\begin{array}{r} 5\boxed{0}4\boxed{8} \\ - \boxed{2}037 \\ \hline 30\boxed{1}1 \end{array}$$



14.
$$\begin{array}{r} \boxed{8}371 \\ + 1897 \\ \hline \boxed{1}0\boxed{2}68 \end{array}$$



15.
$$\begin{array}{r} \boxed{1}6164 \\ - 834\boxed{5} \\ \hline 7\boxed{8}19 \end{array}$$



16.
$$\begin{array}{r} \boxed{5}15\boxed{8} \\ - 2479 \\ \hline 2\boxed{6}79 \end{array}$$



17.
$$\begin{array}{r} \boxed{1}0\boxed{2}10 \\ - 339\boxed{2} \\ \hline 6818 \end{array}$$



18.
$$\begin{array}{r} 3\boxed{8} \\ \times 43 \\ \hline 1\boxed{6}34 \end{array}$$



19.
$$\begin{array}{r} 9\boxed{1} \\ 10 \overline{) 9\boxed{1}0} \end{array}$$



20.
$$\begin{array}{r} 7\boxed{1} \\ \times 95 \\ \hline 6\boxed{7}45 \end{array}$$



DIGITOS FANTASMAS, TODAS LAS OPERACIONES (E)

Nombre: _____

Fecha: _____

Puntuación: _____

Reemplace los dígitos que han desaparecido misteriosamente.

1.
$$\begin{array}{r} 13 \\ 96 \overline{) 1 \square 4 \square} \end{array}$$



2.
$$\begin{array}{r} 86 \\ \times 5 \square \\ \hline 4 \square 86 \end{array}$$



3.
$$\begin{array}{r} 3333 \\ + \square \square 37 \\ \hline 52 \square \square \end{array}$$



4.
$$\begin{array}{r} \square 46 \square \square \\ - \square \square 42 \\ \hline 5553 \end{array}$$



5.
$$\begin{array}{r} \square 11 \square 4 \\ - 9 \square 66 \\ \hline \square 55 \square \end{array}$$



6.
$$\begin{array}{r} 35 \\ 73 \overline{) 2 \square 5 \square} \end{array}$$



7.
$$\begin{array}{r} 9477 \\ - 5992 \\ \hline \square \square \square \square \end{array}$$



8.
$$\begin{array}{r} 52 \\ 9 \square \overline{) 4 \square 88} \end{array}$$



9.
$$\begin{array}{r} 1 \square \\ \times 50 \\ \hline \square 00 \end{array}$$



10.
$$\begin{array}{r} 79 \\ \times 5 \square \\ \hline 3 \square 50 \end{array}$$



11.
$$\begin{array}{r} \square 9 \square 3 \\ + 2 \square 3 \square \\ \hline \square 2125 \end{array}$$



12.
$$\begin{array}{r} \square \square 09 \\ - 71 \square \square \\ \hline 2546 \end{array}$$



13.
$$\begin{array}{r} 6 \square 4 \square \\ + \square 837 \\ \hline 81 \square 6 \end{array}$$



14.
$$\begin{array}{r} 97 \\ 2 \square \overline{) 1 \square 40} \end{array}$$



15.
$$\begin{array}{r} 6 \square 5 \square \\ - 13 \square 8 \\ \hline \square 623 \end{array}$$



16.
$$\begin{array}{r} 69 \\ 16 \overline{) 1 \square 0 \square} \end{array}$$



17.
$$\begin{array}{r} 40 \\ \times 7 \square \\ \hline 2 \square 20 \end{array}$$



18.
$$\begin{array}{r} \square 87 \square \\ + 13 \square 9 \\ \hline 5 \square 82 \end{array}$$



19.
$$\begin{array}{r} \square 458 \\ + 47 \square 8 \\ \hline 7 \square 3 \square \end{array}$$



20.
$$\begin{array}{r} 6 \square \\ \times 92 \\ \hline 6 \square 48 \end{array}$$



DIGITOS FANTASMAS, TODAS LAS OPERACIONES (E) RESPUESTAS

Nombre: _____

Fecha: _____

Puntuación: _____

Reemplace los dígitos que han desaparecido misteriosamente.

1.
$$\begin{array}{r} 13 \\ 96 \overline{) 1248} \end{array}$$



2.
$$\begin{array}{r} 86 \\ \times 51 \\ \hline 4386 \end{array}$$



3.
$$\begin{array}{r} 3333 \\ + 1937 \\ \hline 5270 \end{array}$$



4.
$$\begin{array}{r} 14695 \\ - 9142 \\ \hline 5553 \end{array}$$



5.
$$\begin{array}{r} 11124 \\ - 9566 \\ \hline 1558 \end{array}$$



6.
$$\begin{array}{r} 35 \\ 73 \overline{) 2555} \end{array}$$



7.
$$\begin{array}{r} 9477 \\ - 5992 \\ \hline 3485 \end{array}$$



8.
$$\begin{array}{r} 52 \\ 94 \overline{) 4888} \end{array}$$



9.
$$\begin{array}{r} 14 \\ \times 50 \\ \hline 700 \end{array}$$



10.
$$\begin{array}{r} 79 \\ \times 50 \\ \hline 3950 \end{array}$$



11.
$$\begin{array}{r} 9993 \\ + 2132 \\ \hline 12125 \end{array}$$



12.
$$\begin{array}{r} 9709 \\ - 7163 \\ \hline 2546 \end{array}$$



13.
$$\begin{array}{r} 6349 \\ + 1837 \\ \hline 8186 \end{array}$$



14.
$$\begin{array}{r} 97 \\ 20 \overline{) 1940} \end{array}$$



15.
$$\begin{array}{r} 6951 \\ - 1328 \\ \hline 5623 \end{array}$$



16.
$$\begin{array}{r} 69 \\ 16 \overline{) 1104} \end{array}$$



17.
$$\begin{array}{r} 40 \\ \times 73 \\ \hline 2920 \end{array}$$



18.
$$\begin{array}{r} 3873 \\ + 1309 \\ \hline 5182 \end{array}$$



19.
$$\begin{array}{r} 2458 \\ + 4778 \\ \hline 7236 \end{array}$$



20.
$$\begin{array}{r} 69 \\ \times 92 \\ \hline 6348 \end{array}$$



DIGITOS FANTASMAS, TODAS LAS OPERACIONES (F)

Nombre: _____

Fecha: _____

Puntuación: _____

Reemplace los dígitos que han desaparecido misteriosamente.

1.
$$\begin{array}{r} 8503 \\ - \square 7\square\square \\ \hline 6\square 49 \end{array}$$



2.
$$\begin{array}{r} 96 \\ \times 1\square \\ \hline 1\square 40 \end{array}$$



3.
$$\begin{array}{r} 9\square 8\square \\ - 1341 \\ \hline \square 0\square 3 \end{array}$$



4.
$$\begin{array}{r} \square\square 93 \\ + 54\square 4 \\ \hline \square 240\square \end{array}$$



5.
$$\begin{array}{r} 27 \\ 4\square \overline{) 1\square 88} \end{array}$$



6.
$$\begin{array}{r} 78 \\ \times 2\square \\ \hline 2\square 28 \end{array}$$



7.
$$\begin{array}{r} 45 \\ \times 3\square \\ \hline 1\square 65 \end{array}$$



8.
$$\begin{array}{r} \square 18\square\square \\ - \square 266 \\ \hline 3\square 32 \end{array}$$



9.
$$\begin{array}{r} 99 \\ 8\square \overline{) 7\square 20} \end{array}$$



10.
$$\begin{array}{r} 3873 \\ + \square 6\square\square \\ \hline 5\square 14 \end{array}$$



11.
$$\begin{array}{r} \square\square\square 14 \\ - 56\square 3 \\ \hline 885\square \end{array}$$



12.
$$\begin{array}{r} 7\square 41 \\ + \square 176 \\ \hline 84\square\square \end{array}$$



13.
$$\begin{array}{r} 76 \\ 4\square \overline{) 3\square 40} \end{array}$$



14.
$$\begin{array}{r} \square 1560 \\ - \square 4\square\square \\ \hline 3\square 44 \end{array}$$



15.
$$\begin{array}{r} 9\square \\ 23 \overline{) 2\square 93} \end{array}$$



16.
$$\begin{array}{r} 88 \\ 7\square \overline{) 6\square 12} \end{array}$$



17.
$$\begin{array}{r} 42 \\ \times 3\square \\ \hline 1\square 54 \end{array}$$



18.
$$\begin{array}{r} 19 \\ \times 99 \\ \hline 1\square 8\square \end{array}$$



19.
$$\begin{array}{r} \square 798 \\ + 3\square\square 0 \\ \hline 985\square \end{array}$$



20.
$$\begin{array}{r} 7100 \\ + \square 212 \\ \hline 8\square\square\square \end{array}$$



DIGITOS FANTASMAS, TODAS LAS OPERACIONES (F) RESPUESTAS

Nombre: _____

Fecha: _____

Puntuación: _____

Reemplace los dígitos que han desaparecido misteriosamente.

1.
$$\begin{array}{r} 8503 \\ - 1754 \\ \hline 6749 \end{array}$$



2.
$$\begin{array}{r} 96 \\ \times 15 \\ \hline 1440 \end{array}$$



3.
$$\begin{array}{r} 9384 \\ - 1341 \\ \hline 8043 \end{array}$$



4.
$$\begin{array}{r} 6993 \\ + 5414 \\ \hline 12407 \end{array}$$



5.
$$\begin{array}{r} 27 \\ 44 \overline{) 1188} \end{array}$$



6.
$$\begin{array}{r} 78 \\ \times 26 \\ \hline 2028 \end{array}$$



7.
$$\begin{array}{r} 45 \\ \times 37 \\ \hline 1665 \end{array}$$



8.
$$\begin{array}{r} 11898 \\ - 8266 \\ \hline 3632 \end{array}$$



9.
$$\begin{array}{r} 99 \\ 80 \overline{) 7920} \end{array}$$



10.
$$\begin{array}{r} 3873 \\ + 1641 \\ \hline 5514 \end{array}$$



11.
$$\begin{array}{r} 14514 \\ - 5663 \\ \hline 8851 \end{array}$$



12.
$$\begin{array}{r} 7241 \\ + 1176 \\ \hline 8417 \end{array}$$



13.
$$\begin{array}{r} 76 \\ 40 \overline{) 3040} \end{array}$$



14.
$$\begin{array}{r} 11560 \\ - 8416 \\ \hline 3144 \end{array}$$



15.
$$\begin{array}{r} 91 \\ 23 \overline{) 2093} \end{array}$$



16.
$$\begin{array}{r} 88 \\ 74 \overline{) 6512} \end{array}$$



17.
$$\begin{array}{r} 42 \\ \times 37 \\ \hline 1554 \end{array}$$



18.
$$\begin{array}{r} 19 \\ \times 99 \\ \hline 1881 \end{array}$$



19.
$$\begin{array}{r} 6798 \\ + 3060 \\ \hline 9858 \end{array}$$



20.
$$\begin{array}{r} 7100 \\ + 1212 \\ \hline 8312 \end{array}$$



DIGITOS FANTASMAS, TODAS LAS OPERACIONES (Q)

Nombre: _____

Fecha: _____

Puntuación: _____

Reemplace los dígitos que han desaparecido misteriosamente.

1.
$$\begin{array}{r} 32 \\ 10 \overline{) \square 2 \square} \end{array}$$



2.
$$\begin{array}{r} 46 \\ \times 9 \square \\ \hline 4 \square 70 \end{array}$$



3.
$$\begin{array}{r} 9831 \\ + 140 \square \\ \hline \square \square \square \square 6 \end{array}$$



4.
$$\begin{array}{r} 4 \square \\ \times 38 \\ \hline 1 \square 72 \end{array}$$



5.
$$\begin{array}{r} 6902 \\ + 6 \square \square 6 \\ \hline \square \square 23 \square \end{array}$$



6.
$$\begin{array}{r} 6 \square 94 \\ + \square 6 \square \square \\ \hline \square 4876 \end{array}$$



7.
$$\begin{array}{r} 8013 \\ + 7610 \\ \hline \square \square \square \square \end{array}$$



8.
$$\begin{array}{r} 77 \\ 4 \square \overline{) 3 \square 34} \end{array}$$



9.
$$\begin{array}{r} 7 \square \\ 35 \overline{) 2 \square 90} \end{array}$$



10.
$$\begin{array}{r} \square 5 \square 65 \\ - \square 0 \square \square \\ \hline 9116 \end{array}$$



11.
$$\begin{array}{r} \square 3 \square \square 7 \\ - 4479 \\ \hline \square 67 \square \end{array}$$



12.
$$\begin{array}{r} 33 \\ \times 3 \square \\ \hline 1 \square 21 \end{array}$$



13.
$$\begin{array}{r} 5 \square \square 1 \\ + \square 169 \\ \hline 883 \square \end{array}$$



14.
$$\begin{array}{r} 1 \square \\ 23 \overline{) \square 37} \end{array}$$



15.
$$\begin{array}{r} 5 \square \\ \times 18 \\ \hline 1 \square 26 \end{array}$$



16.
$$\begin{array}{r} 84 \\ 5 \square \overline{) 4 \square 52} \end{array}$$



17.
$$\begin{array}{r} 3 \square \\ \times 26 \\ \hline 1 \square 14 \end{array}$$



18.
$$\begin{array}{r} \square \square 433 \\ - 728 \square \\ \hline 6 \square \square 3 \end{array}$$



19.
$$\begin{array}{r} \square \square 340 \\ - 1 \square 7 \square \\ \hline 88 \square 3 \end{array}$$



20.
$$\begin{array}{r} 6633 \\ - \square \square \square 7 \\ \hline 300 \square \end{array}$$



DIGITOS FANTASMAS, TODAS LAS OPERACIONES (Q) RESPUESTAS

Nombre: _____

Fecha: _____

Puntuación: _____

Reemplace los dígitos que han desaparecido misteriosamente.

1.
$$\begin{array}{r} 32 \\ 10 \overline{) 320} \end{array}$$



2.
$$\begin{array}{r} 46 \\ \times 95 \\ \hline 4370 \end{array}$$



3.
$$\begin{array}{r} 9831 \\ + 1405 \\ \hline 11236 \end{array}$$



4.
$$\begin{array}{r} 44 \\ \times 38 \\ \hline 1672 \end{array}$$



5.
$$\begin{array}{r} 6902 \\ + 6336 \\ \hline 13238 \end{array}$$



6.
$$\begin{array}{r} 6194 \\ + 8682 \\ \hline 14876 \end{array}$$



7.
$$\begin{array}{r} 8013 \\ + 7610 \\ \hline 15623 \end{array}$$



8.
$$\begin{array}{r} 77 \\ 42 \overline{) 3234} \end{array}$$



9.
$$\begin{array}{r} 74 \\ 35 \overline{) 2590} \end{array}$$



10.
$$\begin{array}{r} 15165 \\ - 6049 \\ \hline 9116 \end{array}$$



11.
$$\begin{array}{r} 13157 \\ - 4479 \\ \hline 8678 \end{array}$$



12.
$$\begin{array}{r} 33 \\ \times 37 \\ \hline 1221 \end{array}$$



13.
$$\begin{array}{r} 5661 \\ + 3169 \\ \hline 8830 \end{array}$$



14.
$$\begin{array}{r} 19 \\ 23 \overline{) 437} \end{array}$$



15.
$$\begin{array}{r} 57 \\ \times 18 \\ \hline 1026 \end{array}$$



16.
$$\begin{array}{r} 84 \\ 53 \overline{) 4452} \end{array}$$



17.
$$\begin{array}{r} 39 \\ \times 26 \\ \hline 1014 \end{array}$$



18.
$$\begin{array}{r} 13433 \\ - 7280 \\ \hline 6153 \end{array}$$



19.
$$\begin{array}{r} 10340 \\ - 1477 \\ \hline 8863 \end{array}$$



20.
$$\begin{array}{r} 6633 \\ - 3627 \\ \hline 3006 \end{array}$$



DIGITOS FANTASMAS, TODAS LAS OPERACIONES (H)

Nombre: _____

Fecha: _____

Puntuación: _____

Reemplace los dígitos que han desaparecido misteriosamente.

1.
$$\begin{array}{r} 6775 \\ - 2\ \square\square\square \\ \hline \square106 \end{array}$$



2.
$$\begin{array}{r} 9\square\square\square \\ - 3462 \\ \hline \square546 \end{array}$$



3.
$$\begin{array}{r} 3\square \\ \times 14 \\ \hline \square34 \end{array}$$



4.
$$\begin{array}{r} 978\square \\ + 2\square\square3 \\ \hline \square\square763 \end{array}$$



5.
$$\begin{array}{r} 82 \\ 8\square)6\square88 \end{array}$$



6.
$$\begin{array}{r} 63 \\ 25)1\square7\square \end{array}$$



7.
$$\begin{array}{r} 2\square\square5 \\ + 536\square \\ \hline \square785 \end{array}$$



8.
$$\begin{array}{r} \square\square50 \\ + 53\square6 \\ \hline 754\square \end{array}$$



9.
$$\begin{array}{r} 87 \\ \times 3\square \\ \hline 3\square19 \end{array}$$



10.
$$\begin{array}{r} 11 \\ 5\square) \square38 \end{array}$$



11.
$$\begin{array}{r} \square0\square31 \\ - \square49\square \\ \hline 22\square2 \end{array}$$



12.
$$\begin{array}{r} 619\square \\ + 42\square6 \\ \hline \square\square\square45 \end{array}$$



13.
$$\begin{array}{r} \square\square936 \\ - 6\square9\square \\ \hline 71\square9 \end{array}$$



14.
$$\begin{array}{r} 7\square \\ \times 51 \\ \hline 3\square74 \end{array}$$



15.
$$\begin{array}{r} 7\square \\ 53)4\square81 \end{array}$$



16.
$$\begin{array}{r} 4\square \\ 76)3\square40 \end{array}$$



17.
$$\begin{array}{r} 70 \\ \times 6\square \\ \hline 4\square30 \end{array}$$



18.
$$\begin{array}{r} \square02\square\square \\ - 4576 \\ \hline \square\square50 \end{array}$$



19.
$$\begin{array}{r} 44 \\ \times 6\square \\ \hline 2\square92 \end{array}$$



20.
$$\begin{array}{r} 8\square04 \\ + \square9\square6 \\ \hline \square348\square \end{array}$$



DIGITOS FANTASMAS, TODAS LAS OPERACIONES (H) RESPUESTAS

Nombre: _____

Fecha: _____

Puntuación: _____

Reemplace los dígitos que han desaparecido misteriosamente.

1.
$$\begin{array}{r} 6775 \\ - 2\boxed{6}\boxed{6}\boxed{9} \\ \hline 4106 \end{array}$$



2.
$$\begin{array}{r} 9\boxed{0}\boxed{0}\boxed{8} \\ - 3462 \\ \hline 5546 \end{array}$$



3.
$$\begin{array}{r} 3\boxed{1} \\ \times 14 \\ \hline 434 \end{array}$$



4.
$$\begin{array}{r} 978\boxed{0} \\ + 2\boxed{9}\boxed{8}\boxed{3} \\ \hline 1\boxed{2}\boxed{7}\boxed{6}\boxed{3} \end{array}$$



5.
$$\begin{array}{r} 82 \\ 8\boxed{4} \overline{)6\boxed{8}\boxed{8}\boxed{8}} \end{array}$$



6.
$$\begin{array}{r} 63 \\ 25 \overline{)1\boxed{5}\boxed{7}\boxed{5}} \end{array}$$



7.
$$\begin{array}{r} 2\boxed{4}\boxed{2}\boxed{5} \\ + 536\boxed{0} \\ \hline 7785 \end{array}$$



8.
$$\begin{array}{r} \boxed{2}\boxed{1}\boxed{5}\boxed{0} \\ + 53\boxed{9}\boxed{6} \\ \hline 754\boxed{6} \end{array}$$



9.
$$\begin{array}{r} 87 \\ \times 3\boxed{7} \\ \hline 3\boxed{2}\boxed{1}\boxed{9} \end{array}$$



10.
$$\begin{array}{r} 11 \\ 5\boxed{8} \overline{)6\boxed{3}\boxed{8}} \end{array}$$



11.
$$\begin{array}{r} \boxed{1}\boxed{0}\boxed{7}\boxed{3}\boxed{1} \\ - \boxed{8}\boxed{4}\boxed{9}\boxed{9} \\ \hline 22\boxed{3}\boxed{2} \end{array}$$



12.
$$\begin{array}{r} 619\boxed{9} \\ + 42\boxed{4}\boxed{6} \\ \hline 1\boxed{0}\boxed{4}\boxed{4}\boxed{5} \end{array}$$



13.
$$\begin{array}{r} \boxed{1}\boxed{3}\boxed{9}\boxed{3}\boxed{6} \\ - 6\boxed{7}\boxed{9}\boxed{7} \\ \hline 71\boxed{3}\boxed{9} \end{array}$$



14.
$$\begin{array}{r} 7\boxed{4} \\ \times 51 \\ \hline 3\boxed{7}\boxed{7}\boxed{4} \end{array}$$



15.
$$\begin{array}{r} 7\boxed{7} \\ 53 \overline{)4\boxed{0}\boxed{8}\boxed{1}} \end{array}$$



16.
$$\begin{array}{r} 4\boxed{0} \\ 76 \overline{)3\boxed{0}\boxed{4}\boxed{0}} \end{array}$$



17.
$$\begin{array}{r} 70 \\ \times 6\boxed{9} \\ \hline 4\boxed{8}\boxed{3}\boxed{0} \end{array}$$



18.
$$\begin{array}{r} \boxed{1}\boxed{0}\boxed{2}\boxed{2}\boxed{6} \\ - 4576 \\ \hline 5\boxed{6}\boxed{5}\boxed{0} \end{array}$$



19.
$$\begin{array}{r} 44 \\ \times 6\boxed{8} \\ \hline 2\boxed{9}\boxed{9}\boxed{2} \end{array}$$



20.
$$\begin{array}{r} 8\boxed{5}\boxed{0}\boxed{4} \\ + \boxed{4}\boxed{9}\boxed{7}\boxed{6} \\ \hline 1\boxed{3}\boxed{4}\boxed{8}\boxed{0} \end{array}$$



DIGITOS FANTASMAS, TODAS LAS OPERACIONES (1)

Nombre: _____

Fecha: _____

Puntuación: _____

Reemplace los dígitos que han desaparecido misteriosamente.

1.
$$\begin{array}{r} 60 \\ \times 3\Box \\ \hline 2\Box40 \end{array}$$



2.
$$\begin{array}{r} 52 \\ 78 \overline{) 4\Box5\Box} \end{array}$$



3.
$$\begin{array}{r} 71 \\ 63 \overline{) 4\Box7\Box} \end{array}$$



4.
$$\begin{array}{r} \Box8\Box76 \\ - 95\Box4 \\ \hline \Box81\Box \end{array}$$



5.
$$\begin{array}{r} \Box33\Box\Box \\ - \Box965 \\ \hline 5\Box71 \end{array}$$



6.
$$\begin{array}{r} \Box\Box29 \\ + 1643 \\ \hline 81\Box\Box \end{array}$$



7.
$$\begin{array}{r} 24 \\ \times 3\Box \\ \hline \Box12 \end{array}$$



8.
$$\begin{array}{r} 9\Box \\ 53 \overline{) 4\Box82} \end{array}$$



9.
$$\begin{array}{r} 4\Box\Box\Box \\ + \Box109 \\ \hline \Box1409 \end{array}$$



10.
$$\begin{array}{r} 60 \\ 27 \overline{) 1\Box2\Box} \end{array}$$



11.
$$\begin{array}{r} \Box3086 \\ - 5\Box3\Box \\ \hline \Box7\Box7 \end{array}$$



12.
$$\begin{array}{r} 2\Box \\ \times 97 \\ \hline 2\Box25 \end{array}$$



13.
$$\begin{array}{r} 836\Box \\ + \Box\Box78 \\ \hline \Box74\Box7 \end{array}$$



14.
$$\begin{array}{r} 3\Box49 \\ - \Box05\Box \\ \hline 14\Box0 \end{array}$$



15.
$$\begin{array}{r} 67\Box\Box \\ + 6\Box95 \\ \hline \Box\Box618 \end{array}$$



16.
$$\begin{array}{r} 32 \\ 1\Box \overline{) \Box80} \end{array}$$



17.
$$\begin{array}{r} \Box\Box61\Box \\ - 59\Box7 \\ \hline 9\Box69 \end{array}$$



18.
$$\begin{array}{r} 96 \\ \times 2\Box \\ \hline 2\Box12 \end{array}$$



19.
$$\begin{array}{r} 5961 \\ + \Box\Box\Box8 \\ \hline 766\Box \end{array}$$



20.
$$\begin{array}{r} 8\Box \\ \times 48 \\ \hline 4\Box24 \end{array}$$



DIGITOS FANTASMAS, TODAS LAS OPERACIONES (1) RESPUESTAS

Nombre: _____

Fecha: _____

Puntuación: _____

Reemplace los dígitos que han desaparecido misteriosamente.

1.
$$\begin{array}{r} 60 \\ \times 39 \\ \hline 2340 \end{array}$$



2.
$$\begin{array}{r} 52 \\ 78 \overline{) 4056} \end{array}$$



3.
$$\begin{array}{r} 71 \\ 63 \overline{) 4473} \end{array}$$



4.
$$\begin{array}{r} 18376 \\ - 9564 \\ \hline 8812 \end{array}$$



5.
$$\begin{array}{r} 13336 \\ - 7965 \\ \hline 5371 \end{array}$$



6.
$$\begin{array}{r} 6529 \\ + 1643 \\ \hline 8172 \end{array}$$



7.
$$\begin{array}{r} 24 \\ \times 38 \\ \hline 912 \end{array}$$



8.
$$\begin{array}{r} 94 \\ 53 \overline{) 4982} \end{array}$$



9.
$$\begin{array}{r} 4300 \\ + 7109 \\ \hline 11409 \end{array}$$



10.
$$\begin{array}{r} 60 \\ 27 \overline{) 1620} \end{array}$$



11.
$$\begin{array}{r} 13086 \\ - 5339 \\ \hline 7747 \end{array}$$



12.
$$\begin{array}{r} 25 \\ \times 97 \\ \hline 2425 \end{array}$$



13.
$$\begin{array}{r} 8369 \\ + 9078 \\ \hline 17447 \end{array}$$



14.
$$\begin{array}{r} 3549 \\ - 2059 \\ \hline 1490 \end{array}$$



15.
$$\begin{array}{r} 6723 \\ + 6895 \\ \hline 13618 \end{array}$$



16.
$$\begin{array}{r} 32 \\ 15 \overline{) 480} \end{array}$$



17.
$$\begin{array}{r} 15616 \\ - 5947 \\ \hline 9669 \end{array}$$



18.
$$\begin{array}{r} 96 \\ \times 22 \\ \hline 2112 \end{array}$$



19.
$$\begin{array}{r} 5961 \\ + 1708 \\ \hline 7669 \end{array}$$



20.
$$\begin{array}{r} 88 \\ \times 48 \\ \hline 4224 \end{array}$$



DIGITOS FANTASMAS, TODAS LAS OPERACIONES (J)

Nombre: _____

Fecha: _____

Puntuación: _____

Reemplace los dígitos que han desaparecido misteriosamente.

1.
$$\begin{array}{r} 68 \\ \times 5\Box \\ \hline 3\Box44 \end{array}$$



2.
$$\begin{array}{r} 1147 \\ + \Box\Box7\Box \\ \hline 29\Box1 \end{array}$$



3.
$$\begin{array}{r} 94 \\ \times 4\Box \\ \hline 3\Box48 \end{array}$$



4.
$$\begin{array}{r} 7\Box29 \\ - 59\Box\Box \\ \hline \Box234 \end{array}$$



5.
$$\begin{array}{r} 78\Box\Box \\ + \Box830 \\ \hline \Box0\Box61 \end{array}$$



6.
$$\begin{array}{r} \Box\Box\Box90 \\ - 68\Box0 \\ \hline 813\Box \end{array}$$



7.
$$\begin{array}{r} 62 \\ \times 56 \\ \hline 3\Box7\Box \end{array}$$



8.
$$\begin{array}{r} 74 \\ \times 95 \\ \hline 7\Box3\Box \end{array}$$



9.
$$\begin{array}{r} 4\Box \\ 48 \overline{) 2\Box04} \end{array}$$



10.
$$\begin{array}{r} 1\Box \\ 72 \overline{) 1\Box52} \end{array}$$



11.
$$\begin{array}{r} 6\Box43 \\ + \Box5\Box\Box \\ \hline \Box3472 \end{array}$$



12.
$$\begin{array}{r} \Box\Box\Box8\Box \\ - 8053 \\ \hline 62\Box1 \end{array}$$



13.
$$\begin{array}{r} 6240 \\ + \Box028 \\ \hline \Box3\Box\Box\Box \end{array}$$



14.
$$\begin{array}{r} 4\Box \\ 36 \overline{) 1\Box20} \end{array}$$



15.
$$\begin{array}{r} 9\Box\Box\Box \\ - \Box340 \\ \hline 5402 \end{array}$$



16.
$$\begin{array}{r} 2264 \\ + 143\Box \\ \hline \Box\Box\Box2 \end{array}$$



17.
$$\begin{array}{r} 69 \\ \times 28 \\ \hline 1\Box3\Box \end{array}$$



18.
$$\begin{array}{r} 7\Box \\ 41 \overline{) 3\Box39} \end{array}$$



19.
$$\begin{array}{r} 7\Box \\ 19 \overline{) 1\Box87} \end{array}$$



20.
$$\begin{array}{r} \Box1514 \\ - 8\Box\Box\Box \\ \hline \Box245 \end{array}$$



DIGITOS FANTASMAS, TODAS LAS OPERACIONES (J) RESPUESTAS

Nombre: _____

Fecha: _____


Puntuación: _____

Reemplace los dígitos que han desaparecido misteriosamente.

1.
$$\begin{array}{r} 68 \\ \times 5\boxed{8} \\ \hline 3\boxed{9}44 \end{array}$$



2.
$$\begin{array}{r} 1147 \\ + \boxed{1}\boxed{7}\boxed{7}\boxed{4} \\ \hline 29\boxed{2}1 \end{array}$$



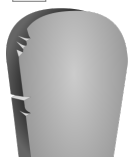
3.
$$\begin{array}{r} 94 \\ \times 4\boxed{2} \\ \hline 3\boxed{9}48 \end{array}$$




4.
$$\begin{array}{r} 7\boxed{2}29 \\ - 59\boxed{9}\boxed{5} \\ \hline \boxed{1}234 \end{array}$$



5.
$$\begin{array}{r} 78\boxed{3}\boxed{1} \\ + \boxed{2}830 \\ \hline \boxed{1}0\boxed{6}61 \end{array}$$



6.
$$\begin{array}{r} \boxed{1}4\boxed{9}90 \\ - 68\boxed{6}0 \\ \hline 813\boxed{0} \end{array}$$



7.
$$\begin{array}{r} 62 \\ \times 56 \\ \hline 3\boxed{4}7\boxed{2} \end{array}$$



8.
$$\begin{array}{r} 74 \\ \times 95 \\ \hline 7\boxed{0}3\boxed{0} \end{array}$$



9.
$$\begin{array}{r} 4\boxed{8} \\ 48 \overline{) 2\boxed{3}04} \end{array}$$



10.
$$\begin{array}{r} 1\boxed{6} \\ 72 \overline{) 1\boxed{1}52} \end{array}$$



11.
$$\begin{array}{r} 6\boxed{9}43 \\ + \boxed{6}5\boxed{2}\boxed{9} \\ \hline \boxed{1}3472 \end{array}$$



12.
$$\begin{array}{r} \boxed{1}4\boxed{2}84 \\ - 8053 \\ \hline 62\boxed{3}1 \end{array}$$



13.
$$\begin{array}{r} 6240 \\ + \boxed{7}028 \\ \hline \boxed{1}3\boxed{2}68 \end{array}$$



14.
$$\begin{array}{r} 4\boxed{5} \\ 36 \overline{) 1\boxed{6}20} \end{array}$$



15.
$$\begin{array}{r} 9\boxed{7}42 \\ - \boxed{4}340 \\ \hline 5402 \end{array}$$



16.
$$\begin{array}{r} 2264 \\ + 143\boxed{8} \\ \hline \boxed{3}7\boxed{0}2 \end{array}$$



17.
$$\begin{array}{r} 69 \\ \times 28 \\ \hline 1\boxed{9}3\boxed{2} \end{array}$$



18.
$$\begin{array}{r} 7\boxed{9} \\ 41 \overline{) 3\boxed{2}39} \end{array}$$



19.
$$\begin{array}{r} 7\boxed{3} \\ 19 \overline{) 1\boxed{3}87} \end{array}$$



20.
$$\begin{array}{r} \boxed{1}1514 \\ - 8\boxed{2}6\boxed{9} \\ \hline \boxed{3}245 \end{array}$$

