

DIGITOS FANTASMAS, SUMA Y RESTA (A)

Nombre: _____

Fecha: _____

Puntuación: _____

Reemplace los dígitos que han desaparecido misteriosamente.

1.
$$\begin{array}{r} \square 29 \square \\ - \square \square 6 \\ \hline 350 \end{array}$$



2.
$$\begin{array}{r} 90 \square \\ + 834 \\ \hline \square \square \square 1 \end{array}$$



3.
$$\begin{array}{r} 40 \\ + 622 \\ \hline \square \square \square \end{array}$$



4.
$$\begin{array}{r} 997 \\ + \square 75 \\ \hline \square 1 \square \square \end{array}$$



5.
$$\begin{array}{r} \square \square 8 \\ + 90 \square \\ \hline \square 100 \end{array}$$



6.
$$\begin{array}{r} 793 \\ - \square 10 \\ \hline \square \square \end{array}$$



7.
$$\begin{array}{r} 62 \square \\ + 815 \\ \hline \square \square \square 0 \end{array}$$



8.
$$\begin{array}{r} \square 3 \square 3 \\ - 60 \square \\ \hline \square 49 \end{array}$$



9.
$$\begin{array}{r} 528 \\ - \square \square 4 \\ \hline 4 \square \end{array}$$



10.
$$\begin{array}{r} \square 12 \square \\ - \square 97 \\ \hline 3 \square 4 \end{array}$$



11.
$$\begin{array}{r} \square 75 \square \\ - \square \square 6 \\ \hline 970 \end{array}$$



12.
$$\begin{array}{r} \square \square \square 6 \\ - 60 \square \\ \hline 900 \end{array}$$



13.
$$\begin{array}{r} 74 \square \\ - 3 \square 2 \\ \hline \square 46 \end{array}$$



14.
$$\begin{array}{r} \square 12 \\ - \square \square \\ \hline 670 \end{array}$$



15.
$$\begin{array}{r} \square \square 1 \\ + 95 \square \\ \hline \square 353 \end{array}$$



16.
$$\begin{array}{r} 8 \square \\ + 136 \\ \hline \square \square 7 \end{array}$$



17.
$$\begin{array}{r} \square \square \square \square \\ - 496 \\ \hline 780 \end{array}$$



18.
$$\begin{array}{r} \square 39 \\ + 3 \square \\ \hline 1 \square 2 \end{array}$$



19.
$$\begin{array}{r} 507 \\ + \square \square \square \\ \hline \square 464 \end{array}$$



20.
$$\begin{array}{r} 67 \\ + \square \square 1 \\ \hline 72 \square \end{array}$$



DIGITOS FANTASMAS, SUMA Y RESTA (A) RESPUESTAS

Nombre: _____

Fecha: _____

Puntuación: _____

Reemplace los dígitos que han desaparecido misteriosamente.

1.
$$\begin{array}{r} 1296 \\ - 946 \\ \hline 350 \end{array}$$



2.
$$\begin{array}{r} 907 \\ + 834 \\ \hline 1741 \end{array}$$



3.
$$\begin{array}{r} 40 \\ + 622 \\ \hline 662 \end{array}$$



4.
$$\begin{array}{r} 997 \\ + 175 \\ \hline 1172 \end{array}$$



5.
$$\begin{array}{r} 198 \\ + 902 \\ \hline 1100 \end{array}$$



6.
$$\begin{array}{r} 793 \\ - 710 \\ \hline 83 \end{array}$$



7.
$$\begin{array}{r} 625 \\ + 815 \\ \hline 1440 \end{array}$$



8.
$$\begin{array}{r} 1353 \\ - 604 \\ \hline 749 \end{array}$$



9.
$$\begin{array}{r} 528 \\ - 484 \\ \hline 44 \end{array}$$



10.
$$\begin{array}{r} 1121 \\ - 797 \\ \hline 324 \end{array}$$



11.
$$\begin{array}{r} 1756 \\ - 786 \\ \hline 970 \end{array}$$



12.
$$\begin{array}{r} 1506 \\ - 606 \\ \hline 900 \end{array}$$



13.
$$\begin{array}{r} 748 \\ - 302 \\ \hline 446 \end{array}$$



14.
$$\begin{array}{r} 712 \\ - 42 \\ \hline 670 \end{array}$$



15.
$$\begin{array}{r} 401 \\ + 952 \\ \hline 1353 \end{array}$$



16.
$$\begin{array}{r} 81 \\ + 136 \\ \hline 217 \end{array}$$



17.
$$\begin{array}{r} 1276 \\ - 496 \\ \hline 780 \end{array}$$



18.
$$\begin{array}{r} 139 \\ + 33 \\ \hline 172 \end{array}$$



19.
$$\begin{array}{r} 507 \\ + 957 \\ \hline 1464 \end{array}$$



20.
$$\begin{array}{r} 67 \\ + 661 \\ \hline 728 \end{array}$$



DIGITOS FANTASMAS, SUMA Y RESTA (B)

Nombre: _____

Fecha: _____

Puntuación: _____

Reemplace los dígitos que han desaparecido misteriosamente.

1.
$$\begin{array}{r} \square 6 \square \square \\ - \square 84 \\ \hline 795 \end{array}$$



2.
$$\begin{array}{r} \square \square 1 \\ + 966 \\ \hline \square 89 \square \end{array}$$



3.
$$\begin{array}{r} \square \square 63 \\ - 4 \square \square \\ \hline 630 \end{array}$$



4.
$$\begin{array}{r} 904 \\ - \square 9 \square \\ \hline 1 \square 7 \end{array}$$



5.
$$\begin{array}{r} 198 \\ + 9 \square \square \\ \hline \square \square 77 \end{array}$$



6.
$$\begin{array}{r} \square 378 \\ - \square \square 6 \\ \hline 95 \square \end{array}$$



7.
$$\begin{array}{r} 6 \square 3 \\ + 148 \\ \hline \square 6 \square \end{array}$$



8.
$$\begin{array}{r} \square 04 \\ + 9 \square 7 \\ \hline \square 18 \square \end{array}$$



9.
$$\begin{array}{r} 5 \square \square \\ + 460 \\ \hline \square \square 14 \end{array}$$



10.
$$\begin{array}{r} 194 \\ + 30 \square \\ \hline \square \square 4 \end{array}$$



11.
$$\begin{array}{r} 6 \square 6 \\ - \square 71 \\ \hline 3 \square \end{array}$$



12.
$$\begin{array}{r} 38 \\ + 1 \square 7 \\ \hline \square 4 \square \end{array}$$



13.
$$\begin{array}{r} 953 \\ + 201 \\ \hline \square \square \square \square \end{array}$$



14.
$$\begin{array}{r} 861 \\ + 478 \\ \hline \square \square \square \square \end{array}$$



15.
$$\begin{array}{r} \square \square 6 \square \\ - 4 \square 8 \\ \hline 972 \end{array}$$



16.
$$\begin{array}{r} \square \square 8 \square \\ - 2 \square 5 \\ \hline 909 \end{array}$$



17.
$$\begin{array}{r} 836 \\ + 108 \\ \hline \square \square \square \end{array}$$



18.
$$\begin{array}{r} \square 4 \square 2 \\ - 521 \\ \hline \square 3 \square \end{array}$$



19.
$$\begin{array}{r} 527 \\ - \square \square \square \\ \hline 69 \end{array}$$



20.
$$\begin{array}{r} 44 \square \\ - \square 78 \\ \hline \square 1 \end{array}$$



DIGITOS FANTASMAS, SUMA Y RESTA (B) RESPUESTAS

Nombre: _____

Fecha: _____

Puntuación: _____

Reemplace los dígitos que han desaparecido misteriosamente.

1.
$$\begin{array}{r} 1679 \\ - 884 \\ \hline 795 \end{array}$$



2.
$$\begin{array}{r} 931 \\ + 966 \\ \hline 1897 \end{array}$$



3.
$$\begin{array}{r} 1063 \\ - 433 \\ \hline 630 \end{array}$$



4.
$$\begin{array}{r} 904 \\ - 797 \\ \hline 107 \end{array}$$



5.
$$\begin{array}{r} 198 \\ + 979 \\ \hline 1177 \end{array}$$



6.
$$\begin{array}{r} 1378 \\ - 426 \\ \hline 952 \end{array}$$



7.
$$\begin{array}{r} 613 \\ + 148 \\ \hline 761 \end{array}$$



8.
$$\begin{array}{r} 204 \\ + 977 \\ \hline 1181 \end{array}$$



9.
$$\begin{array}{r} 554 \\ + 460 \\ \hline 1014 \end{array}$$



10.
$$\begin{array}{r} 194 \\ + 300 \\ \hline 494 \end{array}$$



11.
$$\begin{array}{r} 606 \\ - 571 \\ \hline 35 \end{array}$$



12.
$$\begin{array}{r} 38 \\ + 107 \\ \hline 145 \end{array}$$



13.
$$\begin{array}{r} 953 \\ + 201 \\ \hline 1154 \end{array}$$



14.
$$\begin{array}{r} 861 \\ + 478 \\ \hline 1339 \end{array}$$



15.
$$\begin{array}{r} 1460 \\ - 488 \\ \hline 972 \end{array}$$



16.
$$\begin{array}{r} 1184 \\ - 275 \\ \hline 909 \end{array}$$



17.
$$\begin{array}{r} 836 \\ + 108 \\ \hline 944 \end{array}$$



18.
$$\begin{array}{r} 1452 \\ - 521 \\ \hline 931 \end{array}$$



19.
$$\begin{array}{r} 527 \\ - 458 \\ \hline 69 \end{array}$$



20.
$$\begin{array}{r} 449 \\ - 378 \\ \hline 71 \end{array}$$



DIGITOS FANTASMAS, SUMA Y RESTA (C)

Nombre: _____

Fecha: _____

Puntuación: _____

Reemplace los dígitos que han desaparecido misteriosamente.

1.
$$\begin{array}{r} 914 \\ - \square\square\square \\ \hline 121 \end{array}$$



2.
$$\begin{array}{r} 573 \\ + 399 \\ \hline \square\square\square \end{array}$$



3.
$$\begin{array}{r} 6\square3 \\ + 97\square \\ \hline \square\square97 \end{array}$$



4.
$$\begin{array}{r} 2\square1 \\ + 68\square \\ \hline \square69 \end{array}$$



5.
$$\begin{array}{r} \square1\square6 \\ - \square88 \\ \hline 81\square \end{array}$$



6.
$$\begin{array}{r} \square\square\square3 \\ - 716 \\ \hline 52\square \end{array}$$



7.
$$\begin{array}{r} \square\square62 \\ - 8\square\square \\ \hline 724 \end{array}$$



8.
$$\begin{array}{r} 9\square\square \\ - \square86 \\ \hline 577 \end{array}$$



9.
$$\begin{array}{r} 391 \\ + \square4\square \\ \hline \square3\square9 \end{array}$$



10.
$$\begin{array}{r} \square\square48 \\ - 85\square \\ \hline 7\square0 \end{array}$$



11.
$$\begin{array}{r} \square59 \\ - 1\square5 \\ \hline 7\square \end{array}$$



12.
$$\begin{array}{r} 810 \\ + 29\square \\ \hline \square\square\square7 \end{array}$$



13.
$$\begin{array}{r} \square92 \\ + 1\square2 \\ \hline \square00\square \end{array}$$



14.
$$\begin{array}{r} 582 \\ + \square\square\square \\ \hline \square392 \end{array}$$



15.
$$\begin{array}{r} 73\square \\ + 5\square1 \\ \hline \square\square82 \end{array}$$



16.
$$\begin{array}{r} \square\square8 \\ + 55\square \\ \hline \square451 \end{array}$$



17.
$$\begin{array}{r} 9\square4 \\ - \square7\square \\ \hline 596 \end{array}$$



18.
$$\begin{array}{r} \square\square5 \\ - 85 \\ \hline 86\square \end{array}$$



19.
$$\begin{array}{r} \square\square2 \\ + 160 \\ \hline \square04\square \end{array}$$



20.
$$\begin{array}{r} \square80\square \\ - 936 \\ \hline \square\square6 \end{array}$$



DIGITOS FANTASMAS, SUMA Y RESTA (O) RESPUESTAS

Nombre: _____

Fecha: _____

Puntuación: _____

Reemplace los dígitos que han desaparecido misteriosamente.

1.
$$\begin{array}{r} 914 \\ - \boxed{7}\boxed{9}\boxed{3} \\ \hline 121 \end{array}$$



2.
$$\begin{array}{r} 573 \\ + 399 \\ \hline \boxed{9}\boxed{7}\boxed{2} \end{array}$$



3.
$$\begin{array}{r} 6\boxed{2}3 \\ + 97\boxed{4} \\ \hline \boxed{1}\boxed{5}97 \end{array}$$



4.
$$\begin{array}{r} 2\boxed{8}1 \\ + 68\boxed{8} \\ \hline \boxed{9}69 \end{array}$$



5.
$$\begin{array}{r} \boxed{1}\boxed{1}\boxed{0}6 \\ - \boxed{2}88 \\ \hline 81\boxed{8} \end{array}$$



6.
$$\begin{array}{r} \boxed{1}\boxed{2}\boxed{4}3 \\ - 716 \\ \hline 52\boxed{7} \end{array}$$



7.
$$\begin{array}{r} \boxed{1}\boxed{5}62 \\ - 8\boxed{3}\boxed{8} \\ \hline 724 \end{array}$$



8.
$$\begin{array}{r} 9\boxed{6}3 \\ - \boxed{3}86 \\ \hline 577 \end{array}$$



9.
$$\begin{array}{r} 391 \\ + \boxed{9}\boxed{4}\boxed{8} \\ \hline \boxed{1}\boxed{3}\boxed{3}9 \end{array}$$



10.
$$\begin{array}{r} \boxed{1}\boxed{6}48 \\ - 85\boxed{8} \\ \hline 7\boxed{9}0 \end{array}$$



11.
$$\begin{array}{r} \boxed{2}59 \\ - 1\boxed{8}5 \\ \hline 7\boxed{4} \end{array}$$



12.
$$\begin{array}{r} 810 \\ + 29\boxed{7} \\ \hline \boxed{1}\boxed{1}\boxed{0}7 \end{array}$$



13.
$$\begin{array}{r} \boxed{8}92 \\ + 1\boxed{1}2 \\ \hline \boxed{1}00\boxed{4} \end{array}$$



14.
$$\begin{array}{r} 582 \\ + \boxed{8}\boxed{1}0 \\ \hline \boxed{1}392 \end{array}$$



15.
$$\begin{array}{r} 73\boxed{1} \\ + 5\boxed{5}1 \\ \hline \boxed{1}\boxed{2}82 \end{array}$$



16.
$$\begin{array}{r} \boxed{8}98 \\ + 55\boxed{3} \\ \hline \boxed{1}451 \end{array}$$



17.
$$\begin{array}{r} 9\boxed{7}4 \\ - \boxed{3}\boxed{7}\boxed{8} \\ \hline 596 \end{array}$$



18.
$$\begin{array}{r} \boxed{9}\boxed{4}5 \\ - 85 \\ \hline 86\boxed{0} \end{array}$$



19.
$$\begin{array}{r} \boxed{8}\boxed{8}2 \\ + 160 \\ \hline \boxed{1}04\boxed{2} \end{array}$$



20.
$$\begin{array}{r} \boxed{1}80\boxed{2} \\ - 936 \\ \hline \boxed{8}\boxed{6}6 \end{array}$$



DIGITOS FANTASMAS, SUMA Y RESTA (D)

Nombre: _____

Fecha: _____

Puntuación: _____

Reemplace los dígitos que han desaparecido misteriosamente.

1.
$$\begin{array}{r} 2 \square 2 \\ + 48 \square \\ \hline \square 55 \end{array}$$



2.
$$\begin{array}{r} 580 \\ + \square 1 \square \\ \hline 7 \square 6 \end{array}$$



3.
$$\begin{array}{r} \square 712 \\ - \square 08 \\ \hline 9 \square \square \end{array}$$



4.
$$\begin{array}{r} 746 \\ - \square \square 6 \\ \hline 8 \square \end{array}$$



5.
$$\begin{array}{r} 104 \\ + 3 \square \square \\ \hline \square 91 \end{array}$$



6.
$$\begin{array}{r} 908 \\ + 4 \square 4 \\ \hline \square \square 0 \square \end{array}$$



7.
$$\begin{array}{r} 15 \\ + \square \square \square \\ \hline 380 \end{array}$$



8.
$$\begin{array}{r} \square 235 \\ - 353 \\ \hline \square \square \square \end{array}$$



9.
$$\begin{array}{r} 2 \square 3 \\ + 1 \square \\ \hline \square 63 \end{array}$$




10.
$$\begin{array}{r} \square 66 \\ - 1 \square 2 \\ \hline 80 \square \end{array}$$



11.
$$\begin{array}{r} 897 \\ + \square 1 \square \\ \hline \square 0 \square 2 \end{array}$$



12.
$$\begin{array}{r} \square 25 \\ - 83 \square \\ \hline \square 6 \end{array}$$



13.
$$\begin{array}{r} \square 9 \square \\ + 642 \\ \hline 9 \square 5 \end{array}$$



14.
$$\begin{array}{r} \square 2 \square \square \\ - \square 09 \\ \hline 962 \end{array}$$



15.
$$\begin{array}{r} \square \square 6 \square \\ - 198 \\ \hline 8 \square 7 \end{array}$$



16.
$$\begin{array}{r} \square 85 \\ - 745 \\ \hline \square \square \end{array}$$



17.
$$\begin{array}{r} \square 559 \\ - \square 45 \\ \hline 6 \square \square \end{array}$$



18.
$$\begin{array}{r} 655 \\ + \square \square 4 \\ \hline \square 63 \square \end{array}$$



19.
$$\begin{array}{r} \square 4 \square \\ + 5 \square 5 \\ \hline \square 094 \end{array}$$



20.
$$\begin{array}{r} \square \square 46 \\ - 4 \square 8 \\ \hline 93 \square \end{array}$$



DIGITOS FANTASMAS, SUMA Y RESTA (D) RESPUESTAS

Nombre: _____

Fecha: _____

Puntuación: _____

Reemplace los dígitos que han desaparecido misteriosamente.

1.
$$\begin{array}{r} 2 \boxed{7} 2 \\ + 4 8 \boxed{3} \\ \hline \boxed{7} 5 5 \end{array}$$



2.
$$\begin{array}{r} 5 8 0 \\ + \boxed{2} \boxed{1} \boxed{6} \\ \hline 7 \boxed{9} 6 \end{array}$$



3.
$$\begin{array}{r} \boxed{1} 7 1 2 \\ - \boxed{8} 0 8 \\ \hline 9 \boxed{0} \boxed{4} \end{array}$$



4.
$$\begin{array}{r} 7 4 6 \\ - \boxed{6} \boxed{6} \boxed{6} \\ \hline 8 \boxed{0} \end{array}$$



5.
$$\begin{array}{r} 1 0 4 \\ + 3 \boxed{8} \boxed{7} \\ \hline \boxed{4} 9 1 \end{array}$$



6.
$$\begin{array}{r} 9 0 8 \\ + 4 \boxed{9} 4 \\ \hline \boxed{1} \boxed{4} \boxed{0} \boxed{2} \end{array}$$



7.
$$\begin{array}{r} 1 5 \\ + \boxed{3} \boxed{6} \boxed{5} \\ \hline 3 8 0 \end{array}$$



8.
$$\begin{array}{r} \boxed{1} 2 3 5 \\ - 3 5 3 \\ \hline \boxed{8} \boxed{8} \boxed{2} \end{array}$$



9.
$$\begin{array}{r} 2 \boxed{5} 3 \\ + 1 \boxed{0} \\ \hline \boxed{2} 6 3 \end{array}$$



10.
$$\begin{array}{r} \boxed{9} 6 6 \\ - 1 \boxed{6} 2 \\ \hline 8 0 \boxed{4} \end{array}$$



11.
$$\begin{array}{r} 8 9 7 \\ + \boxed{1} \boxed{1} \boxed{5} \\ \hline \boxed{1} 0 \boxed{1} 2 \end{array}$$



12.
$$\begin{array}{r} \boxed{9} 2 5 \\ - 8 3 9 \\ \hline \boxed{8} 6 \end{array}$$



13.
$$\begin{array}{r} \boxed{2} 9 \boxed{3} \\ + 6 4 2 \\ \hline 9 \boxed{3} 5 \end{array}$$



14.
$$\begin{array}{r} \boxed{1} 2 \boxed{7} \boxed{1} \\ - \boxed{3} 0 9 \\ \hline 9 6 2 \end{array}$$



15.
$$\begin{array}{r} \boxed{1} 0 6 \boxed{5} \\ - 1 9 8 \\ \hline 8 \boxed{6} 7 \end{array}$$



16.
$$\begin{array}{r} \boxed{7} 8 5 \\ - 7 4 5 \\ \hline \boxed{4} \boxed{0} \end{array}$$



17.
$$\begin{array}{r} \boxed{1} 5 5 9 \\ - \boxed{9} 4 5 \\ \hline 6 \boxed{1} \boxed{4} \end{array}$$



18.
$$\begin{array}{r} 6 5 5 \\ + \boxed{9} \boxed{8} 4 \\ \hline \boxed{1} 6 3 \boxed{9} \end{array}$$



19.
$$\begin{array}{r} \boxed{5} 4 \boxed{9} \\ + 5 4 5 \\ \hline \boxed{1} 0 9 4 \end{array}$$



20.
$$\begin{array}{r} \boxed{1} \boxed{3} 4 6 \\ - 4 \boxed{0} 8 \\ \hline 9 3 \boxed{8} \end{array}$$



DIGITOS FANTASMAS, SUMA Y RESTA (E)

Nombre: _____

Fecha: _____

Puntuación: _____

Reemplace los dígitos que han desaparecido misteriosamente.

1.
$$\begin{array}{r} 9 \square 6 \\ - \square 1 \square \\ \hline 8 5 5 \end{array}$$



2.
$$\begin{array}{r} \square \square 4 \\ + 3 9 \square \\ \hline \square 2 8 5 \end{array}$$



3.
$$\begin{array}{r} 7 5 9 \\ - 9 6 \\ \hline \square \square \square \end{array}$$



4.
$$\begin{array}{r} 7 \square \square \\ + \square 6 2 \\ \hline \square 1 4 4 \end{array}$$



5.
$$\begin{array}{r} \square 0 \square 8 \\ - \square 1 \square \\ \hline 6 4 3 \end{array}$$



6.
$$\begin{array}{r} \square 1 1 \\ + 2 \square 6 \\ \hline 5 7 \square \end{array}$$



7.
$$\begin{array}{r} \square \square \square \\ - 6 3 2 \\ \hline 1 9 6 \end{array}$$



8.
$$\begin{array}{r} \square 3 2 \\ + 6 5 \square \\ \hline \square 4 \square 2 \end{array}$$



9.
$$\begin{array}{r} \square 8 \square \square \\ - \square 4 4 \\ \hline 9 3 1 \end{array}$$



10.
$$\begin{array}{r} 1 4 \square \\ + \square 9 1 \\ \hline 5 \square 7 \end{array}$$



11.
$$\begin{array}{r} \square \square 8 \\ + 7 2 \square \\ \hline \square 4 7 7 \end{array}$$



12.
$$\begin{array}{r} 7 5 \square \\ - \square 9 3 \\ \hline \square 8 \end{array}$$



13.
$$\begin{array}{r} \square \square 8 \\ + 1 7 2 \\ \hline 6 6 \square \end{array}$$



14.
$$\begin{array}{r} 3 4 \square \\ + \square \square 8 \\ \hline 7 3 4 \end{array}$$



15.
$$\begin{array}{r} 5 5 6 \\ + \square 4 \\ \hline \square 8 \square \end{array}$$



16.
$$\begin{array}{r} \square 9 9 \\ - 5 7 \square \\ \hline \square 7 \end{array}$$



17.
$$\begin{array}{r} 4 5 2 \\ - \square 0 1 \\ \hline 1 \square \square \end{array}$$



18.
$$\begin{array}{r} 8 7 \square \\ + \square 2 0 \\ \hline \square 5 \square 6 \end{array}$$



19.
$$\begin{array}{r} \square 1 8 5 \\ - 5 8 1 \\ \hline \square \square \square \end{array}$$



20.
$$\begin{array}{r} \square 7 6 \\ - 8 \square \square \\ \hline 1 5 9 \end{array}$$



DIGITOS FANTASMAS, SUMA Y RESTA (E) RESPUESTAS

Nombre: _____

Fecha: _____

Puntuación: _____

Reemplace los dígitos que han desaparecido misteriosamente.

$$\begin{array}{r} 1. \quad 9 \boxed{6} 6 \\ - \quad \boxed{1} \boxed{1} \boxed{1} \\ \hline 8 \ 5 \ 5 \end{array}$$



$$\begin{array}{r} 2. \quad \boxed{8} \boxed{9} 4 \\ + \quad 3 \ 9 \ \boxed{1} \\ \hline \boxed{1} 2 \ 8 \ 5 \end{array}$$



$$\begin{array}{r} 3. \quad 7 \ 5 \ 9 \\ - \quad 9 \ 6 \\ \hline \boxed{6} \boxed{6} \boxed{3} \end{array}$$



$$\begin{array}{r} 4. \quad 7 \ \boxed{8} \ \boxed{2} \\ + \quad \boxed{3} \ \boxed{6} \ 2 \\ \hline \boxed{1} 1 \ 4 \ 4 \end{array}$$



$$\begin{array}{r} 5. \quad \boxed{1} \ 0 \ \boxed{5} \ 8 \\ - \quad \boxed{4} \ \boxed{1} \ \boxed{5} \\ \hline 6 \ 4 \ 3 \end{array}$$



$$\begin{array}{r} 6. \quad \boxed{3} \ 1 \ 1 \\ + \quad 2 \ \boxed{6} \ 6 \\ \hline 5 \ 7 \ \boxed{7} \end{array}$$



$$\begin{array}{r} 7. \quad \boxed{8} \ \boxed{2} \ \boxed{8} \\ - \quad 6 \ 3 \ 2 \\ \hline 1 \ 9 \ 6 \end{array}$$



$$\begin{array}{r} 8. \quad \boxed{8} \ 3 \ 2 \\ + \quad 6 \ 5 \ \boxed{0} \\ \hline \boxed{1} \ \boxed{4} \ \boxed{8} \ 2 \end{array}$$



$$\begin{array}{r} 9. \quad \boxed{1} \ \boxed{8} \ \boxed{7} \ \boxed{5} \\ - \quad \boxed{9} \ 4 \ 4 \\ \hline 9 \ 3 \ 1 \end{array}$$



$$\begin{array}{r} 10. \quad 1 \ 4 \ \boxed{6} \\ + \quad \boxed{3} \ 9 \ 1 \\ \hline 5 \ \boxed{3} \ 7 \end{array}$$



$$\begin{array}{r} 11. \quad \boxed{7} \ \boxed{4} \ 8 \\ + \quad 7 \ 2 \ \boxed{9} \\ \hline \boxed{1} \ 4 \ 7 \ 7 \end{array}$$



$$\begin{array}{r} 12. \quad 7 \ 5 \ \boxed{1} \\ - \quad \boxed{6} \ 9 \ 3 \\ \hline \quad \boxed{5} \ 8 \end{array}$$



$$\begin{array}{r} 13. \quad \boxed{4} \ \boxed{8} \ 8 \\ + \quad 1 \ 7 \ 2 \\ \hline 6 \ 6 \ \boxed{0} \end{array}$$



$$\begin{array}{r} 14. \quad 3 \ 4 \ \boxed{6} \\ + \quad \boxed{3} \ \boxed{8} \ 8 \\ \hline 7 \ 3 \ 4 \end{array}$$



$$\begin{array}{r} 15. \quad 5 \ 5 \ 6 \\ + \quad \boxed{2} \ 4 \\ \hline \boxed{5} \ \boxed{8} \ \boxed{0} \end{array}$$



$$\begin{array}{r} 16. \quad \boxed{5} \ 9 \ 9 \\ - \quad 5 \ 7 \ \boxed{2} \\ \hline \quad \boxed{2} \ 7 \end{array}$$



$$\begin{array}{r} 17. \quad 4 \ 5 \ 2 \\ - \quad \boxed{3} \ 0 \ 1 \\ \hline 1 \ \boxed{5} \ \boxed{1} \end{array}$$



$$\begin{array}{r} 18. \quad 8 \ 7 \ \boxed{6} \\ + \quad \boxed{7} \ 2 \ 0 \\ \hline \boxed{1} \ \boxed{5} \ \boxed{9} \ 6 \end{array}$$



$$\begin{array}{r} 19. \quad \boxed{1} \ 1 \ 8 \ 5 \\ - \quad 5 \ 8 \ 1 \\ \hline \boxed{6} \ \boxed{0} \ \boxed{4} \end{array}$$



$$\begin{array}{r} 20. \quad \boxed{9} \ 7 \ 6 \\ - \quad 8 \ \boxed{1} \ \boxed{7} \\ \hline 1 \ 5 \ 9 \end{array}$$



DIGITOS FANTASMAS, SUMA Y RESTA (F)

Nombre: _____

Fecha: _____

Puntuación: _____

Reemplace los dígitos que han desaparecido misteriosamente.

1.
$$\begin{array}{r} \square 0 5 \\ - 6 \square 1 \\ \hline 2 2 \square \end{array}$$



2.
$$\begin{array}{r} \square \square \square \\ + 1 4 7 \\ \hline 4 0 2 \end{array}$$



3.
$$\begin{array}{r} \square 6 3 \square \\ - 9 \square 6 \\ \hline \square 2 7 \end{array}$$



4.
$$\begin{array}{r} 7 \square 4 \\ + \square 1 \square \\ \hline \square 6 7 3 \end{array}$$



5.
$$\begin{array}{r} 7 3 \square \\ + \square 8 8 \\ \hline \square 6 \square 5 \end{array}$$



6.
$$\begin{array}{r} 8 \square 6 \\ + \square 1 9 \\ \hline \square 7 4 \square \end{array}$$



7.
$$\begin{array}{r} \square \square \square \\ - 7 0 0 \\ \hline 2 9 4 \end{array}$$



8.
$$\begin{array}{r} \square \square 5 \\ + 7 9 \\ \hline 4 1 \square \end{array}$$



9.
$$\begin{array}{r} 2 3 8 \\ + \square 5 \square \\ \hline 9 \square 7 \end{array}$$



10.
$$\begin{array}{r} \square 9 \square \\ - \square 4 \\ \hline 9 8 0 \end{array}$$



11.
$$\begin{array}{r} 4 7 0 \\ - 2 3 \square \\ \hline \square \square 0 \end{array}$$



12.
$$\begin{array}{r} \square \square 1 \\ + 7 4 \square \\ \hline \square 3 6 8 \end{array}$$



13.
$$\begin{array}{r} 8 6 \square \\ - 3 8 6 \\ \hline \square \square 6 \end{array}$$



14.
$$\begin{array}{r} 8 \square 6 \\ - 4 \square \\ \hline \square 1 2 \end{array}$$



15.
$$\begin{array}{r} 2 \square 7 \\ + 9 3 \square \\ \hline \square \square 3 1 \end{array}$$



16.
$$\begin{array}{r} \square 3 4 \\ + 3 \square \square \\ \hline 9 1 0 \end{array}$$



17.
$$\begin{array}{r} \square \square 2 7 \\ - 2 \square \square \\ \hline 8 8 5 \end{array}$$



18.
$$\begin{array}{r} 4 \square 9 \\ + \square 7 0 \\ \hline 6 0 \square \end{array}$$



19.
$$\begin{array}{r} \square 5 6 \square \\ - \square 7 1 \\ \hline 8 \square 5 \end{array}$$



20.
$$\begin{array}{r} \square 7 \square \\ - 1 4 7 \\ \hline \square 1 \end{array}$$



DIGITOS FANTASMAS, SUMA Y RESTA (F) RESPUESTAS

Nombre: _____

Fecha: _____

Puntuación: _____

Reemplace los dígitos que han desaparecido misteriosamente.

1.
$$\begin{array}{r} \boxed{9} \boxed{0} \boxed{5} \\ - \quad \boxed{6} \boxed{8} \boxed{1} \\ \hline \quad \boxed{2} \boxed{2} \boxed{4} \end{array}$$



2.
$$\begin{array}{r} \boxed{2} \boxed{5} \boxed{5} \\ + \quad \boxed{1} \boxed{4} \boxed{7} \\ \hline \quad \boxed{4} \boxed{0} \boxed{2} \end{array}$$



3.
$$\begin{array}{r} \boxed{1} \boxed{6} \boxed{3} \boxed{3} \\ - \quad \boxed{9} \boxed{0} \boxed{6} \\ \hline \quad \boxed{7} \boxed{2} \boxed{7} \end{array}$$



4.
$$\begin{array}{r} \quad \boxed{7} \boxed{5} \boxed{4} \\ + \quad \boxed{9} \boxed{1} \boxed{9} \\ \hline \boxed{1} \boxed{6} \boxed{7} \boxed{3} \end{array}$$



5.
$$\begin{array}{r} \quad \boxed{7} \boxed{3} \boxed{7} \\ + \quad \boxed{8} \boxed{8} \boxed{8} \\ \hline \boxed{1} \boxed{6} \boxed{2} \boxed{5} \end{array}$$



6.
$$\begin{array}{r} \quad \boxed{8} \boxed{2} \boxed{6} \\ + \quad \boxed{9} \boxed{1} \boxed{9} \\ \hline \boxed{1} \boxed{7} \boxed{4} \boxed{5} \end{array}$$



7.
$$\begin{array}{r} \boxed{9} \boxed{9} \boxed{4} \\ - \quad \boxed{7} \boxed{0} \boxed{0} \\ \hline \quad \boxed{2} \boxed{9} \boxed{4} \end{array}$$



8.
$$\begin{array}{r} \quad \boxed{3} \boxed{3} \boxed{5} \\ + \quad \quad \boxed{7} \boxed{9} \\ \hline \quad \boxed{4} \boxed{1} \boxed{4} \end{array}$$



9.
$$\begin{array}{r} \quad \boxed{2} \boxed{3} \boxed{8} \\ + \quad \boxed{7} \boxed{5} \boxed{9} \\ \hline \quad \boxed{9} \boxed{9} \boxed{7} \end{array}$$



10.
$$\begin{array}{r} \boxed{9} \boxed{9} \boxed{4} \\ - \quad \quad \boxed{1} \boxed{4} \\ \hline \quad \boxed{9} \boxed{8} \boxed{0} \end{array}$$



11.
$$\begin{array}{r} \quad \boxed{4} \boxed{7} \boxed{0} \\ - \quad \quad \boxed{2} \boxed{3} \boxed{0} \\ \hline \quad \boxed{2} \boxed{4} \boxed{0} \end{array}$$



12.
$$\begin{array}{r} \quad \boxed{6} \boxed{2} \boxed{1} \\ + \quad \quad \boxed{7} \boxed{4} \boxed{7} \\ \hline \boxed{1} \boxed{3} \boxed{6} \boxed{8} \end{array}$$



13.
$$\begin{array}{r} \quad \boxed{8} \boxed{6} \boxed{2} \\ - \quad \quad \boxed{3} \boxed{8} \boxed{6} \\ \hline \quad \boxed{4} \boxed{7} \boxed{6} \end{array}$$



14.
$$\begin{array}{r} \quad \boxed{8} \boxed{5} \boxed{6} \\ - \quad \quad \boxed{4} \boxed{4} \\ \hline \quad \boxed{8} \boxed{1} \boxed{2} \end{array}$$



15.
$$\begin{array}{r} \quad \boxed{2} \boxed{9} \boxed{7} \\ + \quad \quad \boxed{9} \boxed{3} \boxed{4} \\ \hline \boxed{1} \boxed{2} \boxed{3} \boxed{1} \end{array}$$



16.
$$\begin{array}{r} \quad \boxed{5} \boxed{3} \boxed{4} \\ + \quad \quad \boxed{3} \boxed{7} \boxed{6} \\ \hline \quad \boxed{9} \boxed{1} \boxed{0} \end{array}$$



17.
$$\begin{array}{r} \boxed{1} \boxed{1} \boxed{2} \boxed{7} \\ - \quad \boxed{2} \boxed{4} \boxed{2} \\ \hline \quad \boxed{8} \boxed{8} \boxed{5} \end{array}$$



18.
$$\begin{array}{r} \quad \boxed{4} \boxed{3} \boxed{9} \\ + \quad \quad \boxed{1} \boxed{7} \boxed{0} \\ \hline \quad \boxed{6} \boxed{0} \boxed{9} \end{array}$$



19.
$$\begin{array}{r} \boxed{1} \boxed{5} \boxed{6} \boxed{6} \\ - \quad \boxed{6} \boxed{7} \boxed{1} \\ \hline \quad \boxed{8} \boxed{9} \boxed{5} \end{array}$$



20.
$$\begin{array}{r} \boxed{1} \boxed{7} \boxed{8} \\ - \quad \quad \boxed{1} \boxed{4} \boxed{7} \\ \hline \quad \quad \boxed{3} \boxed{1} \end{array}$$



DIGITOS FANTASMAS, SUMA Y RESTA (Q)

Nombre: _____

Fecha: _____

Puntuación: _____

Reemplace los dígitos que han desaparecido misteriosamente.

1.
$$\begin{array}{r} 52\Box \\ + 1\Box7 \\ \hline \Box03 \end{array}$$



2.
$$\begin{array}{r} \Box409 \\ - \Box\Box\Box \\ \hline 759 \end{array}$$



3.
$$\begin{array}{r} 6\Box3 \\ + 10 \\ \hline \Box4\Box \end{array}$$



4.
$$\begin{array}{r} 981 \\ - 8\Box \\ \hline \Box\Box7 \end{array}$$



5.
$$\begin{array}{r} 557 \\ + \Box4\Box \\ \hline 8\Box4 \end{array}$$



6.
$$\begin{array}{r} \Box\Box4 \\ + 412 \\ \hline 93\Box \end{array}$$



7.
$$\begin{array}{r} \Box\Box9\Box \\ - 672 \\ \hline 5\Box3 \end{array}$$



8.
$$\begin{array}{r} \Box\Box\Box\Box \\ - 112 \\ \hline 985 \end{array}$$



9.
$$\begin{array}{r} \Box69\Box \\ - 876 \\ \hline \Box\Box6 \end{array}$$



10.
$$\begin{array}{r} 7\Box5 \\ + 167 \\ \hline \Box9\Box \end{array}$$



11.
$$\begin{array}{r} 178 \\ + \Box\Box\Box \\ \hline 412 \end{array}$$



12.
$$\begin{array}{r} \Box008 \\ - \Box\Box \\ \hline \Box51 \end{array}$$



13.
$$\begin{array}{r} 739 \\ + \Box0\Box \\ \hline \Box0\Box7 \end{array}$$



14.
$$\begin{array}{r} 714 \\ + 22 \\ \hline \Box\Box\Box \end{array}$$



15.
$$\begin{array}{r} \Box\Box\Box \\ - 91 \\ \hline 308 \end{array}$$



16.
$$\begin{array}{r} \Box7\Box \\ - 426 \\ \hline \Box9 \end{array}$$



17.
$$\begin{array}{r} 8\Box\Box \\ + 210 \\ \hline \Box\Box03 \end{array}$$



18.
$$\begin{array}{r} \Box83 \\ - 1\Box\Box \\ \hline 530 \end{array}$$



19.
$$\begin{array}{r} 984 \\ - 4\Box0 \\ \hline \Box0\Box \end{array}$$



20.
$$\begin{array}{r} 7\Box\Box \\ + \Box44 \\ \hline \Box249 \end{array}$$



DIGITOS FANTASMAS, SUMA Y RESTA (Q) RESPUESTAS

Nombre: _____

Fecha: _____

Puntuación: _____

Reemplace los dígitos que han desaparecido misteriosamente.

$$\begin{array}{r} 1. \quad 52\boxed{6} \\ + \quad 1\boxed{7}7 \\ \hline \quad \boxed{7}03 \end{array}$$



$$\begin{array}{r} 2. \quad \boxed{1}409 \\ - \quad \boxed{6}\boxed{5}\boxed{0} \\ \hline \quad 759 \end{array}$$



$$\begin{array}{r} 3. \quad 6\boxed{3}3 \\ + \quad 10 \\ \hline \quad \boxed{6}4\boxed{3} \end{array}$$



$$\begin{array}{r} 4. \quad 981 \\ - \quad 8\boxed{4} \\ \hline \quad \boxed{8}97 \end{array}$$



$$\begin{array}{r} 5. \quad 557 \\ + \quad \boxed{2}4\boxed{7} \\ \hline \quad 8\boxed{0}4 \end{array}$$



$$\begin{array}{r} 6. \quad \boxed{5}24 \\ + \quad 412 \\ \hline \quad 93\boxed{6} \end{array}$$



$$\begin{array}{r} 7. \quad \boxed{1}\boxed{1}95 \\ - \quad 672 \\ \hline \quad 5\boxed{2}3 \end{array}$$



$$\begin{array}{r} 8. \quad \boxed{1}097 \\ - \quad 112 \\ \hline \quad 985 \end{array}$$



$$\begin{array}{r} 9. \quad \boxed{1}69\boxed{2} \\ - \quad 876 \\ \hline \quad \boxed{8}\boxed{1}6 \end{array}$$



$$\begin{array}{r} 10. \quad 7\boxed{2}5 \\ + \quad 167 \\ \hline \quad \boxed{8}9\boxed{2} \end{array}$$



$$\begin{array}{r} 11. \quad 178 \\ + \quad \boxed{2}\boxed{3}\boxed{4} \\ \hline \quad 412 \end{array}$$



$$\begin{array}{r} 12. \quad \boxed{1}008 \\ - \quad \boxed{5}7 \\ \hline \quad \boxed{9}51 \end{array}$$



$$\begin{array}{r} 13. \quad 739 \\ + \quad \boxed{3}0\boxed{8} \\ \hline \quad \boxed{1}047 \end{array}$$



$$\begin{array}{r} 14. \quad 714 \\ + \quad 22 \\ \hline \quad \boxed{7}\boxed{3}\boxed{6} \end{array}$$



$$\begin{array}{r} 15. \quad \boxed{3}99 \\ - \quad 91 \\ \hline \quad 308 \end{array}$$



$$\begin{array}{r} 16. \quad \boxed{4}75 \\ - \quad 426 \\ \hline \quad \boxed{4}9 \end{array}$$



$$\begin{array}{r} 17. \quad 8\boxed{9}\boxed{3} \\ + \quad 210 \\ \hline \quad \boxed{1}\boxed{1}03 \end{array}$$



$$\begin{array}{r} 18. \quad \boxed{6}83 \\ - \quad 1\boxed{5}\boxed{3} \\ \hline \quad 530 \end{array}$$



$$\begin{array}{r} 19. \quad 984 \\ - \quad 4\boxed{8}0 \\ \hline \quad \boxed{5}04 \end{array}$$



$$\begin{array}{r} 20. \quad 7\boxed{0}\boxed{5} \\ + \quad \boxed{5}44 \\ \hline \quad \boxed{1}249 \end{array}$$



DIGITOS FANTASMAS, SUMA Y RESTA (H)

Nombre: _____

Fecha: _____

Puntuación: _____

Reemplace los dígitos que han desaparecido misteriosamente.

1.
$$\begin{array}{r} \square 0 \square 6 \\ - 392 \\ \hline \square 0 \square \end{array}$$



2.
$$\begin{array}{r} \square \square \square \square \\ - 492 \\ \hline 709 \end{array}$$



3.
$$\begin{array}{r} \square 5 \square 9 \\ - \square 4 \square \\ \hline 964 \end{array}$$



4.
$$\begin{array}{r} 622 \\ + \square 3 \square \\ \hline \square 4 \square 8 \end{array}$$



5.
$$\begin{array}{r} 359 \\ + 58\square \\ \hline \square \square 3 \end{array}$$



6.
$$\begin{array}{r} \square 589 \\ - \square 2 \square \\ \hline 8 \square 9 \end{array}$$



7.
$$\begin{array}{r} \square 36 \\ + 5 \square 4 \\ \hline 88 \square \end{array}$$



8.
$$\begin{array}{r} 475 \\ + \square \square \square \\ \hline 733 \end{array}$$



9.
$$\begin{array}{r} \square \square 5 \\ - 67 \\ \hline 16 \square \end{array}$$



10.
$$\begin{array}{r} 394 \\ + \square 2 \square \\ \hline 9 \square 1 \end{array}$$



11.
$$\begin{array}{r} 350 \\ + 6 \square 8 \\ \hline \square \square 1 \square \end{array}$$



12.
$$\begin{array}{r} \square 0 2 \square \\ - 2 \square 9 \\ \hline \square 2 7 \end{array}$$



13.
$$\begin{array}{r} \square \square \square 2 \\ - 390 \\ \hline 68 \square \end{array}$$



14.
$$\begin{array}{r} \square 39 \\ + \square 7 \\ \hline 69 \square \end{array}$$



15.
$$\begin{array}{r} \square 30 \\ + 2 \square \square \\ \hline 336 \end{array}$$



16.
$$\begin{array}{r} \square \square 8 \\ - 137 \\ \hline 52 \square \end{array}$$



17.
$$\begin{array}{r} \square 358 \\ - 3 \square \square \\ \hline \square 92 \end{array}$$



18.
$$\begin{array}{r} 8 \square \square \\ - \square 11 \\ \hline 211 \end{array}$$



19.
$$\begin{array}{r} 2 \square \square \\ + \square 17 \\ \hline 449 \end{array}$$



20.
$$\begin{array}{r} 782 \\ + \square \square \square \\ \hline \square 023 \end{array}$$



DIGITOS FANTASMAS, SUMA Y RESTA (H) RESPUESTAS


Nombre: _____

Fecha: _____

Puntuación: _____

Reemplace los dígitos que han desaparecido misteriosamente.

1.
$$\begin{array}{r} \boxed{1} \boxed{0} \boxed{9} \boxed{6} \\ - \quad 3 \quad 9 \quad 2 \\ \hline \boxed{7} \boxed{0} \boxed{4} \end{array}$$



2.
$$\begin{array}{r} \boxed{1} \boxed{2} \boxed{0} \boxed{1} \\ - \quad 4 \quad 9 \quad 2 \\ \hline 7 \quad 0 \quad 9 \end{array}$$



3.
$$\begin{array}{r} \boxed{1} \boxed{5} \boxed{0} \quad 9 \\ - \quad \boxed{5} \boxed{4} \boxed{5} \\ \hline 9 \quad 6 \quad 4 \end{array}$$



4.
$$\begin{array}{r} \quad 6 \quad 2 \quad 2 \\ + \quad \boxed{8} \boxed{3} \boxed{6} \\ \hline \boxed{1} \boxed{4} \boxed{5} \quad 8 \end{array}$$



5.
$$\begin{array}{r} \quad 3 \quad 5 \quad 9 \\ + \quad 5 \quad 8 \quad \boxed{4} \\ \hline \boxed{9} \boxed{4} \quad 3 \end{array}$$



6.
$$\begin{array}{r} \boxed{1} \quad 5 \quad 8 \quad 9 \\ - \quad \boxed{7} \boxed{2} \boxed{0} \\ \hline 8 \quad \boxed{6} \quad 9 \end{array}$$



7.
$$\begin{array}{r} \boxed{3} \quad 3 \quad 6 \\ + \quad 5 \quad 4 \quad 4 \\ \hline 8 \quad 8 \quad \boxed{0} \end{array}$$



8.
$$\begin{array}{r} \quad 4 \quad 7 \quad 5 \\ + \quad \boxed{2} \boxed{5} \boxed{8} \\ \hline 7 \quad 3 \quad 3 \end{array}$$



9.
$$\begin{array}{r} \boxed{2} \boxed{3} \quad 5 \\ - \quad 6 \quad 7 \\ \hline 1 \quad 6 \quad \boxed{8} \end{array}$$



10.
$$\begin{array}{r} \quad 3 \quad 9 \quad 4 \\ + \quad \boxed{5} \boxed{2} \boxed{7} \\ \hline 9 \quad \boxed{2} \quad 1 \end{array}$$



11.
$$\begin{array}{r} \quad 3 \quad 5 \quad 0 \\ + \quad 6 \quad \boxed{6} \quad 8 \\ \hline \boxed{1} \boxed{0} \boxed{1} \quad 8 \end{array}$$



12.
$$\begin{array}{r} \boxed{1} \quad 0 \quad 2 \quad \boxed{6} \\ - \quad 2 \quad \boxed{9} \quad 9 \\ \hline \boxed{7} \quad 2 \quad 7 \end{array}$$



13.
$$\begin{array}{r} \boxed{1} \boxed{0} \boxed{7} \quad 2 \\ - \quad 3 \quad 9 \quad 0 \\ \hline 6 \quad 8 \quad \boxed{2} \end{array}$$



14.
$$\begin{array}{r} \boxed{6} \quad 3 \quad 9 \\ + \quad \boxed{5} \quad 7 \\ \hline 6 \quad 9 \quad \boxed{6} \end{array}$$



15.
$$\begin{array}{r} \boxed{1} \quad 3 \quad 0 \\ + \quad 2 \quad \boxed{0} \boxed{6} \\ \hline 3 \quad 3 \quad 6 \end{array}$$



16.
$$\begin{array}{r} \boxed{6} \boxed{5} \quad 8 \\ - \quad 1 \quad 3 \quad 7 \\ \hline 5 \quad 2 \quad \boxed{1} \end{array}$$



17.
$$\begin{array}{r} \boxed{1} \quad 3 \quad 5 \quad 8 \\ - \quad 3 \quad \boxed{6} \boxed{6} \\ \hline \boxed{9} \quad 9 \quad 2 \end{array}$$



18.
$$\begin{array}{r} 8 \quad \boxed{2} \boxed{2} \\ - \quad \boxed{6} \quad 1 \quad 1 \\ \hline 2 \quad 1 \quad 1 \end{array}$$



19.
$$\begin{array}{r} 2 \quad \boxed{3} \boxed{2} \\ + \quad \boxed{2} \quad 1 \quad 7 \\ \hline 4 \quad 4 \quad 9 \end{array}$$



20.
$$\begin{array}{r} \quad 7 \quad 8 \quad 2 \\ + \quad \boxed{2} \boxed{4} \boxed{1} \\ \hline \boxed{1} \quad 0 \quad 2 \quad 3 \end{array}$$



DIGITOS FANTASMAS, SUMA Y RESTA (I)

Nombre: _____

Fecha: _____

Puntuación: _____

Reemplace los dígitos que han desaparecido misteriosamente.

1.
$$\begin{array}{r} \square 6 \square \\ + 164 \\ \hline 9 \square 8 \end{array}$$



2.
$$\begin{array}{r} \square 27 \\ + 7 \square \square \\ \hline \square 610 \end{array}$$



3.
$$\begin{array}{r} \square 64 \\ + 3 \square \square \\ \hline \square 289 \end{array}$$



4.
$$\begin{array}{r} \square 81 \\ + 8 \square \square \\ \hline \square 811 \end{array}$$



5.
$$\begin{array}{r} 9 \square 8 \\ - 77 \square \\ \hline \square 42 \end{array}$$



6.
$$\begin{array}{r} 30 \\ + \square \square \\ \hline \square 05 \end{array}$$



7.
$$\begin{array}{r} 232 \\ + \square \square 9 \\ \hline 47 \square \end{array}$$



8.
$$\begin{array}{r} \square \square 4 \square \\ - 62 \\ \hline 9 \square 6 \end{array}$$



9.
$$\begin{array}{r} \square 07 \\ + 12 \square \\ \hline 8 \square 9 \end{array}$$



10.
$$\begin{array}{r} \square 110 \\ - 83 \square \\ \hline \square \square 4 \end{array}$$



11.
$$\begin{array}{r} \square 0 \square 6 \\ - 207 \\ \hline \square 2 \square \end{array}$$



12.
$$\begin{array}{r} \square 47 \\ - 72 \\ \hline 7 \square \square \end{array}$$



13.
$$\begin{array}{r} 962 \\ - \square 8 \square \\ \hline \square 0 \end{array}$$



14.
$$\begin{array}{r} \square 94 \\ - 30 \square \\ \hline \square 3 \end{array}$$



15.
$$\begin{array}{r} 897 \\ - \square 9 \square \\ \hline 6 \square 4 \end{array}$$



16.
$$\begin{array}{r} \square 3 \\ + \square 60 \\ \hline 85 \square \end{array}$$



17.
$$\begin{array}{r} 649 \\ + 1 \square \square \\ \hline \square 67 \end{array}$$



18.
$$\begin{array}{r} \square \square \square \\ + 649 \\ \hline 874 \end{array}$$



19.
$$\begin{array}{r} 954 \\ - \square 12 \\ \hline 6 \square \square \end{array}$$



20.
$$\begin{array}{r} 310 \\ - 7 \square \\ \hline \square \square 5 \end{array}$$



DIGITOS FANTASMAS, SUMA Y RESTA (I) RESPUESTAS

Nombre: _____

Fecha: _____

Puntuación: _____

Reemplace los dígitos que han desaparecido misteriosamente.

$$\begin{array}{r} 1. \quad \boxed{7} \boxed{6} \boxed{4} \\ + \quad 1 \boxed{6} \boxed{4} \\ \hline 9 \boxed{2} \boxed{8} \end{array}$$



$$\begin{array}{r} 2. \quad \boxed{8} \boxed{2} \boxed{7} \\ + \quad 7 \boxed{8} \boxed{3} \\ \hline \boxed{1} \boxed{6} \boxed{1} \boxed{0} \end{array}$$



$$\begin{array}{r} 3. \quad \boxed{9} \boxed{6} \boxed{4} \\ + \quad 3 \boxed{2} \boxed{5} \\ \hline \boxed{1} \boxed{2} \boxed{8} \boxed{9} \end{array}$$



$$\begin{array}{r} 4. \quad \boxed{9} \boxed{8} \boxed{1} \\ + \quad 8 \boxed{3} \boxed{0} \\ \hline \boxed{1} \boxed{8} \boxed{1} \boxed{1} \end{array}$$



$$\begin{array}{r} 5. \quad 9 \boxed{1} \boxed{8} \\ - \quad 7 \boxed{7} \boxed{6} \\ \hline \boxed{1} \boxed{4} \boxed{2} \end{array}$$



$$\begin{array}{r} 6. \quad 3 \boxed{0} \\ + \quad \boxed{7} \boxed{5} \\ \hline \boxed{1} \boxed{0} \boxed{5} \end{array}$$



$$\begin{array}{r} 7. \quad 2 \boxed{3} \boxed{2} \\ + \quad \boxed{2} \boxed{3} \boxed{9} \\ \hline 4 \boxed{7} \boxed{1} \end{array}$$



$$\begin{array}{r} 8. \quad \boxed{1} \boxed{0} \boxed{4} \boxed{8} \\ - \quad 6 \boxed{2} \\ \hline 9 \boxed{8} \boxed{6} \end{array}$$



$$\begin{array}{r} 9. \quad \boxed{7} \boxed{0} \boxed{7} \\ + \quad 1 \boxed{2} \boxed{2} \\ \hline 8 \boxed{2} \boxed{9} \end{array}$$



$$\begin{array}{r} 10. \quad \boxed{1} \boxed{1} \boxed{1} \boxed{0} \\ - \quad 8 \boxed{3} \boxed{6} \\ \hline \boxed{2} \boxed{7} \boxed{4} \end{array}$$



$$\begin{array}{r} 11. \quad \boxed{1} \boxed{0} \boxed{3} \boxed{6} \\ - \quad 2 \boxed{0} \boxed{7} \\ \hline \boxed{8} \boxed{2} \boxed{9} \end{array}$$



$$\begin{array}{r} 12. \quad \boxed{8} \boxed{4} \boxed{7} \\ - \quad 7 \boxed{2} \\ \hline 7 \boxed{7} \boxed{5} \end{array}$$



$$\begin{array}{r} 13. \quad 9 \boxed{6} \boxed{2} \\ - \quad \boxed{8} \boxed{8} \boxed{2} \\ \hline \boxed{8} \boxed{0} \end{array}$$



$$\begin{array}{r} 14. \quad \boxed{3} \boxed{9} \boxed{4} \\ - \quad 3 \boxed{0} \boxed{1} \\ \hline \boxed{9} \boxed{3} \end{array}$$



$$\begin{array}{r} 15. \quad 8 \boxed{9} \boxed{7} \\ - \quad \boxed{2} \boxed{9} \boxed{3} \\ \hline 6 \boxed{0} \boxed{4} \end{array}$$



$$\begin{array}{r} 16. \quad \boxed{9} \boxed{3} \\ + \quad \boxed{7} \boxed{6} \boxed{0} \\ \hline 8 \boxed{5} \boxed{3} \end{array}$$



$$\begin{array}{r} 17. \quad 6 \boxed{4} \boxed{9} \\ + \quad 1 \boxed{1} \boxed{8} \\ \hline \boxed{7} \boxed{6} \boxed{7} \end{array}$$



$$\begin{array}{r} 18. \quad \boxed{2} \boxed{2} \boxed{5} \\ + \quad 6 \boxed{4} \boxed{9} \\ \hline 8 \boxed{7} \boxed{4} \end{array}$$



$$\begin{array}{r} 19. \quad 9 \boxed{5} \boxed{4} \\ - \quad \boxed{3} \boxed{1} \boxed{2} \\ \hline 6 \boxed{4} \boxed{2} \end{array}$$



$$\begin{array}{r} 20. \quad 3 \boxed{1} \boxed{0} \\ - \quad 7 \boxed{5} \\ \hline \boxed{2} \boxed{3} \boxed{5} \end{array}$$



DIGITOS FANTASMAS, SUMA Y RESTA (J)

Nombre: _____

Fecha: _____

Puntuación: _____

Reemplace los dígitos que han desaparecido misteriosamente.

$$\begin{array}{r} \square 070 \\ - \square 8\square \\ \hline 3\square 3 \end{array}$$



$$\begin{array}{r} 65\square \\ + 7\square 9 \\ \hline \square\square 63 \end{array}$$



$$\begin{array}{r} \square\square 31 \\ - 928 \\ \hline 8\square\square \end{array}$$



$$\begin{array}{r} 11\square \\ + \square 02 \\ \hline 5\square 5 \end{array}$$



$$\begin{array}{r} \square 66 \\ + 3\square 2 \\ \hline 75\square \end{array}$$



$$\begin{array}{r} 727 \\ - \square\square 2 \\ \hline 53\square \end{array}$$




$$\begin{array}{r} \square 0\square 9 \\ - 16\square \\ \hline \square 49 \end{array}$$



$$\begin{array}{r} 722 \\ + \square\square 5 \\ \hline \square 13\square \end{array}$$



$$\begin{array}{r} \square 72 \\ + 99\square \\ \hline \square 9\square 6 \end{array}$$



$$\begin{array}{r} \square 74 \\ + 7\square\square \\ \hline \square 200 \end{array}$$



$$\begin{array}{r} \square 56\square \\ - 830 \\ \hline \square\square 6 \end{array}$$



$$\begin{array}{r} \square 46 \\ - 4\square\square \\ \hline 515 \end{array}$$



$$\begin{array}{r} \square\square\square \\ + 924 \\ \hline \square 605 \end{array}$$



$$\begin{array}{r} \square 2\square \\ - 167 \\ \hline 5\square 0 \end{array}$$



$$\begin{array}{r} 66\square \\ - 1\square 7 \\ \hline \square 93 \end{array}$$



$$\begin{array}{r} \square\square 0 \\ + 678 \\ \hline \square 24\square \end{array}$$



$$\begin{array}{r} \square 3\square \\ + 7\square 0 \\ \hline 955 \end{array}$$



$$\begin{array}{r} \square 0\square 0 \\ - 67\square \\ \hline \square 89 \end{array}$$



$$\begin{array}{r} 9\square\square \\ + 954 \\ \hline \square\square 10 \end{array}$$



$$\begin{array}{r} 9\square 0 \\ - \square 59 \\ \hline 57\square \end{array}$$



DIGITOS FANTASMAS, SUMA Y RESTA (J) RESPUESTAS

Nombre: _____

Fecha: _____

Puntuación: _____

Reemplace los dígitos que han desaparecido misteriosamente.

$$\begin{array}{r} 1. \quad \boxed{1}070 \\ - \quad \boxed{6}8\boxed{7} \\ \hline \quad \boxed{3}8\boxed{3} \end{array}$$



$$\begin{array}{r} 2. \quad 65\boxed{4} \\ + \quad 7\boxed{0}9 \\ \hline \boxed{1}363 \end{array}$$



$$\begin{array}{r} 3. \quad \boxed{1}731 \\ - \quad 928 \\ \hline \quad 80\boxed{3} \end{array}$$



$$\begin{array}{r} 4. \quad 11\boxed{3} \\ + \quad \boxed{4}02 \\ \hline \quad 515 \end{array}$$



$$\begin{array}{r} 5. \quad \boxed{3}66 \\ + \quad 392 \\ \hline \quad 75\boxed{8} \end{array}$$



$$\begin{array}{r} 6. \quad 727 \\ - \quad \boxed{1}92 \\ \hline \quad 53\boxed{5} \end{array}$$




$$\begin{array}{r} 7. \quad \boxed{1}009 \\ - \quad 160 \\ \hline \quad 849 \end{array}$$



$$\begin{array}{r} 8. \quad 722 \\ + \quad \boxed{4}15 \\ \hline \boxed{1}137 \end{array}$$



$$\begin{array}{r} 9. \quad \boxed{9}72 \\ + \quad 99\boxed{4} \\ \hline \boxed{1}966 \end{array}$$



$$\begin{array}{r} 10. \quad \boxed{4}74 \\ + \quad 72\boxed{6} \\ \hline \boxed{1}200 \end{array}$$



$$\begin{array}{r} 11. \quad \boxed{1}566 \\ - \quad 830 \\ \hline \quad 736 \end{array}$$



$$\begin{array}{r} 12. \quad \boxed{9}46 \\ - \quad 43\boxed{1} \\ \hline \quad 515 \end{array}$$



$$\begin{array}{r} 13. \quad \boxed{6}81 \\ + \quad 924 \\ \hline \boxed{1}605 \end{array}$$



$$\begin{array}{r} 14. \quad \boxed{7}27 \\ - \quad 167 \\ \hline \quad 560 \end{array}$$



$$\begin{array}{r} 15. \quad 660 \\ - \quad 167 \\ \hline \quad 493 \end{array}$$



$$\begin{array}{r} 16. \quad \boxed{5}70 \\ + \quad 678 \\ \hline \boxed{1}248 \end{array}$$



$$\begin{array}{r} 17. \quad \boxed{2}35 \\ + \quad 720 \\ \hline \quad 955 \end{array}$$



$$\begin{array}{r} 18. \quad \boxed{1}060 \\ - \quad 671 \\ \hline \quad 389 \end{array}$$



$$\begin{array}{r} 19. \quad 956 \\ + \quad 954 \\ \hline \boxed{1}910 \end{array}$$



$$\begin{array}{r} 20. \quad 930 \\ - \quad 359 \\ \hline \quad 571 \end{array}$$

