

# DIGITOS FANTASMAS, SUMA (A)

Nombre: \_\_\_\_\_

Fecha: \_\_\_\_\_

Puntuación: \_\_\_\_\_

Reemplace los dígitos que han desaparecido misteriosamente.

1. 
$$\begin{array}{r} 9 \square 0 \\ + \square 1 0 \\ \hline \square 2 8 \square \end{array}$$



2. 
$$\begin{array}{r} 4 1 \square \\ + 8 4 0 \\ \hline \square \square \square 1 \end{array}$$



3. 
$$\begin{array}{r} \square 6 \square \\ + 4 \square 3 \\ \hline \square 2 5 9 \end{array}$$



4. 
$$\begin{array}{r} \square 1 \square \\ + 4 3 7 \\ \hline 5 \square 2 \end{array}$$



5. 
$$\begin{array}{r} 3 \square 2 \\ + 5 2 3 \\ \hline \square 4 \square \end{array}$$



6. 
$$\begin{array}{r} \square \square 5 \\ + 2 0 8 \\ \hline \square 1 6 \square \end{array}$$



7. 
$$\begin{array}{r} 1 3 5 \\ + \square 5 8 \\ \hline 3 \square \square \end{array}$$



8. 
$$\begin{array}{r} \square \square 4 \\ + 9 1 \square \\ \hline \square 5 4 5 \end{array}$$



9. 
$$\begin{array}{r} \square 0 \square \\ + 2 4 1 \\ \hline 3 \square 3 \end{array}$$



10. 
$$\begin{array}{r} 1 2 8 \\ + 6 \square \square \\ \hline \square 3 2 \end{array}$$



11. 
$$\begin{array}{r} 6 7 \square \\ + \square 6 2 \\ \hline \square 3 \square 9 \end{array}$$



12. 
$$\begin{array}{r} \square 9 0 \\ + 9 \square 9 \\ \hline \square 4 8 \square \end{array}$$



13. 
$$\begin{array}{r} 2 9 4 \\ + 8 0 9 \\ \hline \square \square \square \square \end{array}$$



14. 
$$\begin{array}{r} 3 \square 4 \\ + \square 9 9 \\ \hline \square 0 9 \square \end{array}$$



15. 
$$\begin{array}{r} 9 3 3 \\ + \square \square \square \\ \hline \square 8 7 3 \end{array}$$



16. 
$$\begin{array}{r} \square 9 0 \\ + 1 0 5 \\ \hline 4 \square \square \end{array}$$



17. 
$$\begin{array}{r} \square \square 3 \\ + 9 1 9 \\ \hline \square 5 3 \square \end{array}$$



18. 
$$\begin{array}{r} 6 7 \square \\ + \square \square 8 \\ \hline \square 4 0 5 \end{array}$$



19. 
$$\begin{array}{r} 5 7 \square \\ + 2 \square 0 \\ \hline \square 4 6 \end{array}$$



20. 
$$\begin{array}{r} 9 6 2 \\ + \square \square \square \\ \hline \square 8 9 9 \end{array}$$



# DIGITOS FANTASMAS, SUMA (A) RESPUESTAS

Nombre: \_\_\_\_\_

Fecha: \_\_\_\_\_

Puntuación: \_\_\_\_\_

Reemplace los dígitos que han desaparecido misteriosamente.

$$\begin{array}{r} 9 \boxed{7} 0 \\ + \boxed{3} 1 0 \\ \hline \boxed{1} \boxed{2} 8 \boxed{0} \end{array}$$



$$\begin{array}{r} 4 1 \boxed{1} \\ + 8 4 0 \\ \hline \boxed{1} \boxed{2} \boxed{5} 1 \end{array}$$



$$\begin{array}{r} \boxed{7} \boxed{6} \boxed{6} \\ + 4 \boxed{9} 3 \\ \hline \boxed{1} 2 5 9 \end{array}$$



$$\begin{array}{r} \boxed{1} \boxed{1} \boxed{5} \\ + 4 3 7 \\ \hline 5 \boxed{5} 2 \end{array}$$



$$\begin{array}{r} 3 \boxed{2} 2 \\ + 5 2 3 \\ \hline \boxed{8} \boxed{4} \boxed{5} \end{array}$$



$$\begin{array}{r} \boxed{9} \boxed{5} 5 \\ + 2 0 8 \\ \hline \boxed{1} \boxed{1} \boxed{6} \boxed{3} \end{array}$$



$$\begin{array}{r} 1 3 5 \\ + \boxed{2} \boxed{5} 8 \\ \hline 3 \boxed{9} \boxed{3} \end{array}$$



$$\begin{array}{r} \boxed{6} \boxed{3} 4 \\ + 9 1 \boxed{1} \\ \hline \boxed{1} 5 4 5 \end{array}$$



$$\begin{array}{r} \boxed{1} \boxed{0} \boxed{2} \\ + 2 4 1 \\ \hline 3 \boxed{4} 3 \end{array}$$



$$\begin{array}{r} 1 2 8 \\ + \boxed{6} \boxed{0} \boxed{4} \\ \hline \boxed{7} 3 2 \end{array}$$



$$\begin{array}{r} 6 7 \boxed{7} \\ + \boxed{6} 6 2 \\ \hline \boxed{1} 3 \boxed{3} 9 \end{array}$$



$$\begin{array}{r} \boxed{4} 9 0 \\ + 9 \boxed{9} 9 \\ \hline \boxed{1} 4 8 \boxed{9} \end{array}$$



$$\begin{array}{r} 2 9 4 \\ + 8 0 9 \\ \hline \boxed{1} \boxed{1} \boxed{0} \boxed{3} \end{array}$$



$$\begin{array}{r} 3 \boxed{9} 4 \\ + \boxed{6} 9 9 \\ \hline \boxed{1} 0 9 \boxed{3} \end{array}$$



$$\begin{array}{r} 9 3 3 \\ + \boxed{9} \boxed{4} \boxed{0} \\ \hline \boxed{1} 8 7 3 \end{array}$$



$$\begin{array}{r} \boxed{3} 9 0 \\ + 1 0 5 \\ \hline 4 \boxed{9} \boxed{5} \end{array}$$



$$\begin{array}{r} \boxed{6} \boxed{1} 3 \\ + 9 1 9 \\ \hline \boxed{1} 5 3 \boxed{2} \end{array}$$



$$\begin{array}{r} 6 7 \boxed{7} \\ + \boxed{7} \boxed{2} 8 \\ \hline \boxed{1} 4 0 5 \end{array}$$



$$\begin{array}{r} 5 7 \boxed{6} \\ + 2 \boxed{7} 0 \\ \hline \boxed{8} 4 6 \end{array}$$



$$\begin{array}{r} 9 6 2 \\ + \boxed{9} \boxed{3} \boxed{7} \\ \hline \boxed{1} 8 9 9 \end{array}$$



# DIGITOS FANTASMAS, SUMA (B)

Nombre: \_\_\_\_\_

Fecha: \_\_\_\_\_

Puntuación: \_\_\_\_\_

Reemplace los dígitos que han desaparecido misteriosamente.

1. 
$$\begin{array}{r} \square 9 5 \\ + 8 \square 1 \\ \hline \square 5 9 \square \end{array}$$



2. 
$$\begin{array}{r} \square 8 1 \\ + 1 7 \square \\ \hline 5 \square 3 \end{array}$$



3. 
$$\begin{array}{r} \square \square 3 \\ + 9 1 \square \\ \hline \square 0 7 2 \end{array}$$



4. 
$$\begin{array}{r} \square 3 6 \\ + 8 1 \\ \hline 6 \square \square \end{array}$$



5. 
$$\begin{array}{r} \square \square \square \\ + 5 4 5 \\ \hline \square 1 9 0 \end{array}$$



6. 
$$\begin{array}{r} 6 2 4 \\ + \square 3 \square \\ \hline 8 \square 9 \end{array}$$



7. 
$$\begin{array}{r} 2 5 5 \\ + 7 5 \square \\ \hline \square \square \square 1 \end{array}$$



8. 
$$\begin{array}{r} 9 4 \square \\ + \square \square 5 \\ \hline \square 4 6 0 \end{array}$$



9. 
$$\begin{array}{r} 6 4 0 \\ + \square 5 \square \\ \hline \square 0 \square 7 \end{array}$$



10. 
$$\begin{array}{r} 6 1 \\ + \square 9 \square \\ \hline 4 \square 4 \end{array}$$



11. 
$$\begin{array}{r} 3 2 6 \\ + \square \square \square \\ \hline 6 0 2 \end{array}$$



12. 
$$\begin{array}{r} \square 5 7 \\ + 7 \square \square \\ \hline \square 2 3 7 \end{array}$$



13. 
$$\begin{array}{r} 7 4 \square \\ + 3 4 0 \\ \hline \square \square \square 6 \end{array}$$



14. 
$$\begin{array}{r} 1 6 2 \\ + 9 \square \square \\ \hline \square \square 2 1 \end{array}$$



15. 
$$\begin{array}{r} \square 4 \\ + 1 3 \square \\ \hline \square 8 3 \end{array}$$



16. 
$$\begin{array}{r} 4 \square 2 \\ + \square 4 0 \\ \hline 7 2 \square \end{array}$$



17. 
$$\begin{array}{r} 2 2 \square \\ + \square 1 4 \\ \hline 8 \square 6 \end{array}$$



18. 
$$\begin{array}{r} 8 0 0 \\ + 1 \square \square \\ \hline \square 7 4 \end{array}$$



19. 
$$\begin{array}{r} 8 \square \square \\ + 9 6 7 \\ \hline \square \square 2 8 \end{array}$$



20. 
$$\begin{array}{r} 9 8 \square \\ + \square \square 4 \\ \hline \square 2 1 5 \end{array}$$



# DIGITOS FANTASMAS, SUMA (B) RESPUESTAS

Nombre: \_\_\_\_\_

Fecha: \_\_\_\_\_

Puntuación: \_\_\_\_\_

Reemplace los dígitos que han desaparecido misteriosamente.

1. 
$$\begin{array}{r} \boxed{7} \boxed{9} \boxed{5} \\ + \quad \boxed{8} \boxed{0} \boxed{1} \\ \hline \boxed{1} \boxed{5} \boxed{9} \boxed{6} \end{array}$$



2. 
$$\begin{array}{r} \boxed{3} \boxed{8} \boxed{1} \\ + \quad \boxed{1} \boxed{7} \boxed{2} \\ \hline \boxed{5} \boxed{5} \boxed{3} \end{array}$$



3. 
$$\begin{array}{r} \boxed{1} \boxed{5} \boxed{3} \\ + \quad \boxed{9} \boxed{1} \boxed{9} \\ \hline \boxed{1} \boxed{0} \boxed{7} \boxed{2} \end{array}$$



4. 
$$\begin{array}{r} \boxed{5} \boxed{3} \boxed{6} \\ + \quad \boxed{8} \boxed{1} \\ \hline \boxed{6} \boxed{1} \boxed{7} \end{array}$$




5. 
$$\begin{array}{r} \boxed{6} \boxed{4} \boxed{5} \\ + \quad \boxed{5} \boxed{4} \boxed{5} \\ \hline \boxed{1} \boxed{1} \boxed{9} \boxed{0} \end{array}$$



6. 
$$\begin{array}{r} \quad \boxed{6} \boxed{2} \boxed{4} \\ + \quad \boxed{2} \boxed{3} \boxed{5} \\ \hline \quad \boxed{8} \boxed{5} \boxed{9} \end{array}$$



7. 
$$\begin{array}{r} \quad \boxed{2} \boxed{5} \boxed{5} \\ + \quad \boxed{7} \boxed{5} \boxed{6} \\ \hline \boxed{1} \boxed{0} \boxed{1} \boxed{1} \end{array}$$



8. 
$$\begin{array}{r} \quad \boxed{9} \boxed{4} \boxed{5} \\ + \quad \boxed{5} \boxed{1} \boxed{5} \\ \hline \boxed{1} \boxed{4} \boxed{6} \boxed{0} \end{array}$$



9. 
$$\begin{array}{r} \quad \boxed{6} \boxed{4} \boxed{0} \\ + \quad \boxed{4} \boxed{5} \boxed{7} \\ \hline \boxed{1} \boxed{0} \boxed{9} \boxed{7} \end{array}$$



10. 
$$\begin{array}{r} \quad \quad \boxed{6} \boxed{1} \\ + \quad \boxed{3} \boxed{9} \boxed{3} \\ \hline \quad \quad \boxed{4} \boxed{5} \boxed{4} \end{array}$$



11. 
$$\begin{array}{r} \quad \boxed{3} \boxed{2} \boxed{6} \\ + \quad \boxed{2} \boxed{7} \boxed{6} \\ \hline \quad \boxed{6} \boxed{0} \boxed{2} \end{array}$$



12. 
$$\begin{array}{r} \quad \boxed{4} \boxed{5} \boxed{7} \\ + \quad \boxed{7} \boxed{8} \boxed{0} \\ \hline \boxed{1} \boxed{2} \boxed{3} \boxed{7} \end{array}$$



13. 
$$\begin{array}{r} \quad \boxed{7} \boxed{4} \boxed{6} \\ + \quad \boxed{3} \boxed{4} \boxed{0} \\ \hline \boxed{1} \boxed{0} \boxed{8} \boxed{6} \end{array}$$



14. 
$$\begin{array}{r} \quad \boxed{1} \boxed{6} \boxed{2} \\ + \quad \boxed{9} \boxed{5} \boxed{9} \\ \hline \boxed{1} \boxed{1} \boxed{2} \boxed{1} \end{array}$$



15. 
$$\begin{array}{r} \quad \boxed{4} \boxed{4} \\ + \quad \boxed{1} \boxed{3} \boxed{9} \\ \hline \boxed{1} \boxed{8} \boxed{3} \end{array}$$



16. 
$$\begin{array}{r} \quad \boxed{4} \boxed{8} \boxed{2} \\ + \quad \boxed{2} \boxed{4} \boxed{0} \\ \hline \quad \boxed{7} \boxed{2} \boxed{2} \end{array}$$



17. 
$$\begin{array}{r} \quad \boxed{2} \boxed{2} \boxed{2} \\ + \quad \boxed{6} \boxed{1} \boxed{4} \\ \hline \quad \boxed{8} \boxed{3} \boxed{6} \end{array}$$



18. 
$$\begin{array}{r} \quad \boxed{8} \boxed{0} \boxed{0} \\ + \quad \boxed{1} \boxed{7} \boxed{4} \\ \hline \quad \boxed{9} \boxed{7} \boxed{4} \end{array}$$



19. 
$$\begin{array}{r} \quad \boxed{8} \boxed{6} \boxed{1} \\ + \quad \boxed{9} \boxed{6} \boxed{7} \\ \hline \boxed{1} \boxed{8} \boxed{2} \boxed{8} \end{array}$$



20. 
$$\begin{array}{r} \quad \boxed{9} \boxed{8} \boxed{1} \\ + \quad \boxed{2} \boxed{3} \boxed{4} \\ \hline \boxed{1} \boxed{2} \boxed{1} \boxed{5} \end{array}$$



# DIGITOS FANTASMAS, SUMA (C)

Nombre: \_\_\_\_\_

Fecha: \_\_\_\_\_

Puntuación: \_\_\_\_\_

Reemplace los dígitos que han desaparecido misteriosamente.

1. 
$$\begin{array}{r} 4 \square 6 \\ + \square 8 \square \\ \hline \square 3 1 8 \end{array}$$



2. 
$$\begin{array}{r} \square \square \square \\ + 4 9 6 \\ \hline 7 3 5 \end{array}$$



3. 
$$\begin{array}{r} 7 2 4 \\ + \square \square \square \\ \hline \square 6 2 0 \end{array}$$



4. 
$$\begin{array}{r} 2 \square 7 \\ + \square 6 6 \\ \hline 5 3 \square \end{array}$$



5. 
$$\begin{array}{r} 4 6 2 \\ + 2 5 \square \\ \hline \square \square 0 \end{array}$$



6. 
$$\begin{array}{r} \square \square 7 \\ + 1 \square \\ \hline 4 4 8 \end{array}$$



7. 
$$\begin{array}{r} \square \square 9 \\ + 7 3 \square \\ \hline \square 0 6 0 \end{array}$$



8. 
$$\begin{array}{r} \square 5 9 \\ + 5 \square \square \\ \hline \square 0 0 7 \end{array}$$



9. 
$$\begin{array}{r} \square 7 0 \\ + 2 \square \square \\ \hline 6 5 2 \end{array}$$



10. 
$$\begin{array}{r} \square \square 1 \\ + 8 8 \square \\ \hline \square 4 9 0 \end{array}$$



11. 
$$\begin{array}{r} 3 5 4 \\ + \square 0 \square \\ \hline 8 \square 2 \end{array}$$



12. 
$$\begin{array}{r} 2 9 5 \\ + 5 \square 6 \\ \hline \square 4 \square \end{array}$$



13. 
$$\begin{array}{r} 3 \square 0 \\ + 2 \square \\ \hline \square 2 4 \end{array}$$



14. 
$$\begin{array}{r} 6 6 \square \\ + \square \square 1 \\ \hline \square 1 0 0 \end{array}$$



15. 
$$\begin{array}{r} 8 9 \\ + 8 9 1 \\ \hline \square \square \square \end{array}$$



16. 
$$\begin{array}{r} \square 4 \square \\ + 4 7 7 \\ \hline \square 4 \square 2 \end{array}$$



17. 
$$\begin{array}{r} \square 4 6 \\ + 2 \square \square \\ \hline \square 0 9 6 \end{array}$$



18. 
$$\begin{array}{r} 1 0 5 \\ + \square 9 \square \\ \hline 8 \square 8 \end{array}$$



19. 
$$\begin{array}{r} 9 \square \square \\ + \square 4 7 \\ \hline \square 7 8 1 \end{array}$$



20. 
$$\begin{array}{r} \square 5 \square \\ + 4 2 7 \\ \hline \square 3 \square 5 \end{array}$$



# DIGITOS FANTASMAS, SUMA (C) RESPUESTAS

Nombre: \_\_\_\_\_

Fecha: \_\_\_\_\_

Puntuación: \_\_\_\_\_

Reemplace los dígitos que han desaparecido misteriosamente.

1. 
$$\begin{array}{r} 4 \boxed{3} 6 \\ + \boxed{8} \boxed{8} \boxed{2} \\ \hline \boxed{1} 3 1 8 \end{array}$$



2. 
$$\begin{array}{r} \boxed{2} \boxed{3} \boxed{9} \\ + 4 9 6 \\ \hline 7 3 5 \end{array}$$



3. 
$$\begin{array}{r} 7 2 4 \\ + \boxed{8} \boxed{9} \boxed{6} \\ \hline \boxed{1} 6 2 0 \end{array}$$



4. 
$$\begin{array}{r} 2 \boxed{6} 7 \\ + \boxed{2} \boxed{6} 6 \\ \hline 5 3 \boxed{3} \end{array}$$



5. 
$$\begin{array}{r} 4 6 2 \\ + 2 5 \boxed{8} \\ \hline \boxed{7} \boxed{2} 0 \end{array}$$



6. 
$$\begin{array}{r} \boxed{4} \boxed{3} 7 \\ + 1 \boxed{1} \\ \hline 4 4 8 \end{array}$$



7. 
$$\begin{array}{r} \boxed{3} \boxed{2} 9 \\ + 7 3 \boxed{1} \\ \hline \boxed{1} 0 6 0 \end{array}$$



8. 
$$\begin{array}{r} \boxed{4} 5 9 \\ + 5 \boxed{4} \boxed{8} \\ \hline \boxed{1} 0 0 7 \end{array}$$



9. 
$$\begin{array}{r} \boxed{3} 7 0 \\ + 2 \boxed{8} \boxed{2} \\ \hline 6 5 2 \end{array}$$



10. 
$$\begin{array}{r} \boxed{6} \boxed{0} 1 \\ + 8 8 \boxed{9} \\ \hline \boxed{1} 4 9 0 \end{array}$$



11. 
$$\begin{array}{r} 3 5 4 \\ + \boxed{5} \boxed{0} \boxed{8} \\ \hline 8 \boxed{6} 2 \end{array}$$



12. 
$$\begin{array}{r} 2 9 5 \\ + 5 \boxed{4} 6 \\ \hline \boxed{8} \boxed{4} 1 \end{array}$$



13. 
$$\begin{array}{r} 3 \boxed{0} 0 \\ + 2 \boxed{4} \\ \hline \boxed{3} 2 4 \end{array}$$



14. 
$$\begin{array}{r} 6 6 \boxed{9} \\ + \boxed{4} \boxed{3} 1 \\ \hline \boxed{1} 1 0 0 \end{array}$$



15. 
$$\begin{array}{r} 8 9 \\ + 8 9 1 \\ \hline \boxed{9} \boxed{8} 0 \end{array}$$



16. 
$$\begin{array}{r} \boxed{9} \boxed{4} \boxed{5} \\ + 4 7 7 \\ \hline \boxed{1} 4 \boxed{2} 2 \end{array}$$



17. 
$$\begin{array}{r} \boxed{8} 4 6 \\ + 2 \boxed{5} \boxed{0} \\ \hline \boxed{1} 0 9 6 \end{array}$$



18. 
$$\begin{array}{r} 1 0 5 \\ + \boxed{7} \boxed{9} \boxed{3} \\ \hline 8 \boxed{9} 8 \end{array}$$



19. 
$$\begin{array}{r} 9 \boxed{3} \boxed{4} \\ + \boxed{8} 4 7 \\ \hline \boxed{1} 7 8 1 \end{array}$$



20. 
$$\begin{array}{r} \boxed{9} \boxed{5} \boxed{8} \\ + 4 2 7 \\ \hline \boxed{1} 3 \boxed{8} 5 \end{array}$$



# DIGITOS FANTASMAS, SUMA (D)

Nombre: \_\_\_\_\_

Fecha: \_\_\_\_\_

Puntuación: \_\_\_\_\_

Reemplace los dígitos que han desaparecido misteriosamente.

1. 
$$\begin{array}{r} 9 \square \\ + \square \square 7 \\ \hline 304 \end{array}$$



2. 
$$\begin{array}{r} \square 0 4 \\ + 4 \square \square \\ \hline \square 0 8 7 \end{array}$$



3. 
$$\begin{array}{r} 4 5 3 \\ + 2 0 \square \\ \hline \square \square 8 \end{array}$$



4. 
$$\begin{array}{r} \square 5 0 \\ + 4 5 \\ \hline 2 \square \square \end{array}$$



5. 
$$\begin{array}{r} 6 \square \square \\ + \square 7 0 \\ \hline 8 6 2 \end{array}$$



6. 
$$\begin{array}{r} 5 9 \\ + \square 6 \\ \hline \square 5 \square \end{array}$$



7. 
$$\begin{array}{r} 3 5 3 \\ + \square \square \square \\ \hline 8 6 8 \end{array}$$



8. 
$$\begin{array}{r} 7 7 3 \\ + 1 1 \square \\ \hline \square \square 4 \end{array}$$



9. 
$$\begin{array}{r} 4 \square 8 \\ + 2 8 \square \\ \hline \square 3 0 \end{array}$$



10. 
$$\begin{array}{r} \square 9 6 \\ + 6 \square 2 \\ \hline \square 3 5 \square \end{array}$$



11. 
$$\begin{array}{r} 3 5 4 \\ + \square 4 \square \\ \hline 8 \square 3 \end{array}$$



12. 
$$\begin{array}{r} 4 \square 8 \\ + \square 0 8 \\ \hline \square 3 9 \square \end{array}$$



13. 
$$\begin{array}{r} 2 9 \square \\ + 7 9 6 \\ \hline \square \square \square 6 \end{array}$$



14. 
$$\begin{array}{r} 2 \square 0 \\ + \square 8 \square \\ \hline 9 2 7 \end{array}$$



15. 
$$\begin{array}{r} \square 9 \square \\ + 1 \square 6 \\ \hline \square 1 3 6 \end{array}$$



16. 
$$\begin{array}{r} 5 0 1 \\ + \square \square \square \\ \hline 7 9 8 \end{array}$$



17. 
$$\begin{array}{r} \square \square 5 \\ + 1 9 \square \\ \hline 8 9 9 \end{array}$$



18. 
$$\begin{array}{r} 9 \square 3 \\ + \square 4 4 \\ \hline \square 7 1 \square \end{array}$$



19. 
$$\begin{array}{r} 5 0 \square \\ + 3 4 8 \\ \hline \square \square 7 \end{array}$$



20. 
$$\begin{array}{r} 7 8 5 \\ + \square 5 6 \\ \hline \square 0 \square \square \end{array}$$



# DIGITOS FANTASMAS, SUMA (D) RESPUESTAS

Nombre: \_\_\_\_\_

Fecha: \_\_\_\_\_

Puntuación: \_\_\_\_\_

Reemplace los dígitos que han desaparecido misteriosamente.

1. 
$$\begin{array}{r} 97 \\ + 207 \\ \hline 304 \end{array}$$



2. 
$$\begin{array}{r} 604 \\ + 483 \\ \hline 1087 \end{array}$$



3. 
$$\begin{array}{r} 453 \\ + 205 \\ \hline 658 \end{array}$$



4. 
$$\begin{array}{r} 250 \\ + 45 \\ \hline 295 \end{array}$$



5. 
$$\begin{array}{r} 692 \\ + 170 \\ \hline 862 \end{array}$$



6. 
$$\begin{array}{r} 59 \\ + 96 \\ \hline 155 \end{array}$$



7. 
$$\begin{array}{r} 353 \\ + 515 \\ \hline 868 \end{array}$$



8. 
$$\begin{array}{r} 773 \\ + 111 \\ \hline 884 \end{array}$$



9. 
$$\begin{array}{r} 448 \\ + 282 \\ \hline 730 \end{array}$$



10. 
$$\begin{array}{r} 696 \\ + 662 \\ \hline 1358 \end{array}$$



11. 
$$\begin{array}{r} 354 \\ + 449 \\ \hline 803 \end{array}$$



12. 
$$\begin{array}{r} 488 \\ + 908 \\ \hline 1396 \end{array}$$



13. 
$$\begin{array}{r} 290 \\ + 796 \\ \hline 1086 \end{array}$$



14. 
$$\begin{array}{r} 240 \\ + 687 \\ \hline 927 \end{array}$$



15. 
$$\begin{array}{r} 990 \\ + 146 \\ \hline 1136 \end{array}$$



16. 
$$\begin{array}{r} 501 \\ + 297 \\ \hline 798 \end{array}$$



17. 
$$\begin{array}{r} 705 \\ + 194 \\ \hline 899 \end{array}$$



18. 
$$\begin{array}{r} 973 \\ + 744 \\ \hline 1717 \end{array}$$



19. 
$$\begin{array}{r} 509 \\ + 348 \\ \hline 857 \end{array}$$



20. 
$$\begin{array}{r} 785 \\ + 256 \\ \hline 1041 \end{array}$$





# DIGITOS FANTASMAS, SUMA (E)

Nombre: \_\_\_\_\_

Fecha: \_\_\_\_\_

Puntuación: \_\_\_\_\_

Reemplace los dígitos que han desaparecido misteriosamente.

1. 
$$\begin{array}{r} 73\Box \\ + 27 \\ \hline \Box\Box5 \end{array}$$



2. 
$$\begin{array}{r} \Box2\Box \\ + \Box7 \\ \hline 899 \end{array}$$



3. 
$$\begin{array}{r} 9\Box0 \\ + 68\Box \\ \hline \Box\Box38 \end{array}$$



4. 
$$\begin{array}{r} \Box68 \\ + 9\Box7 \\ \hline \Box36\Box \end{array}$$



5. 
$$\begin{array}{r} 1\Box3 \\ + \Box3\Box \\ \hline 651 \end{array}$$



6. 
$$\begin{array}{r} \Box\Box4 \\ + 67\Box \\ \hline 774 \end{array}$$



7. 
$$\begin{array}{r} 9\Box\Box \\ + \Box02 \\ \hline \Box800 \end{array}$$



8. 
$$\begin{array}{r} \Box5\Box \\ + 594 \\ \hline \Box2\Box6 \end{array}$$



9. 
$$\begin{array}{r} \Box8 \\ + \Box1\Box \\ \hline 389 \end{array}$$



10. 
$$\begin{array}{r} \Box6 \\ + \Box65 \\ \hline 20\Box \end{array}$$



11. 
$$\begin{array}{r} \Box32 \\ + 326 \\ \hline 6\Box\Box \end{array}$$



12. 
$$\begin{array}{r} 268 \\ + 5\Box0 \\ \hline \Box1\Box \end{array}$$



13. 
$$\begin{array}{r} \Box4\Box \\ + 5\Box1 \\ \hline \Box337 \end{array}$$



14. 
$$\begin{array}{r} 731 \\ + \Box\Box \\ \hline \Box19 \end{array}$$



15. 
$$\begin{array}{r} 9\Box5 \\ + \Box61 \\ \hline \Box27\Box \end{array}$$



16. 
$$\begin{array}{r} \Box\Box9 \\ + 89\Box \\ \hline \Box374 \end{array}$$



17. 
$$\begin{array}{r} 278 \\ + \Box0\Box \\ \hline \Box1\Box5 \end{array}$$



18. 
$$\begin{array}{r} 2\Box2 \\ + \Box22 \\ \hline \Box11\Box \end{array}$$



19. 
$$\begin{array}{r} 492 \\ + \Box\Box8 \\ \hline \Box49\Box \end{array}$$



20. 
$$\begin{array}{r} 299 \\ + \Box\Box0 \\ \hline 98\Box \end{array}$$



# DIGITOS FANTASMAS, SUMA (E) RESPUESTAS

Nombre: \_\_\_\_\_

Fecha: \_\_\_\_\_

Puntuación: \_\_\_\_\_

Reemplace los dígitos que han desaparecido misteriosamente.

$$\begin{array}{r} 73\boxed{8} \\ + 27 \\ \hline \boxed{7}\boxed{6}5 \end{array}$$



$$\begin{array}{r} \boxed{8}2\boxed{2} \\ + \boxed{7}7 \\ \hline 899 \end{array}$$



$$\begin{array}{r} 9\boxed{5}0 \\ + 68\boxed{8} \\ \hline \boxed{1}\boxed{6}38 \end{array}$$



$$\begin{array}{r} \boxed{3}68 \\ + 9\boxed{9}7 \\ \hline \boxed{1}3\boxed{6}5 \end{array}$$



$$\begin{array}{r} 1\boxed{1}3 \\ + \boxed{5}3\boxed{8} \\ \hline 651 \end{array}$$



$$\begin{array}{r} \boxed{1}04 \\ + 67\boxed{0} \\ \hline 774 \end{array}$$



$$\begin{array}{r} 9\boxed{9}8 \\ + \boxed{8}02 \\ \hline \boxed{1}800 \end{array}$$



$$\begin{array}{r} \boxed{6}5\boxed{2} \\ + 594 \\ \hline \boxed{1}2\boxed{4}6 \end{array}$$



$$\begin{array}{r} \boxed{7}8 \\ + \boxed{3}1\boxed{1} \\ \hline 389 \end{array}$$



$$\begin{array}{r} \boxed{3}6 \\ + \boxed{1}65 \\ \hline 20\boxed{1} \end{array}$$



$$\begin{array}{r} \boxed{3}32 \\ + 326 \\ \hline 6\boxed{5}8 \end{array}$$



$$\begin{array}{r} 268 \\ + 5\boxed{5}0 \\ \hline \boxed{8}1\boxed{8} \end{array}$$



$$\begin{array}{r} \boxed{7}4\boxed{6} \\ + 5\boxed{9}1 \\ \hline \boxed{1}337 \end{array}$$



$$\begin{array}{r} 731 \\ + \boxed{8}8 \\ \hline \boxed{8}19 \end{array}$$



$$\begin{array}{r} 9\boxed{1}5 \\ + \boxed{3}61 \\ \hline \boxed{1}27\boxed{6} \end{array}$$



$$\begin{array}{r} \boxed{4}79 \\ + 89\boxed{5} \\ \hline \boxed{1}374 \end{array}$$



$$\begin{array}{r} 278 \\ + \boxed{9}0\boxed{7} \\ \hline \boxed{1}1\boxed{8}5 \end{array}$$



$$\begin{array}{r} 2\boxed{9}2 \\ + \boxed{8}22 \\ \hline \boxed{1}11\boxed{4} \end{array}$$



$$\begin{array}{r} 492 \\ + \boxed{9}98 \\ \hline \boxed{1}49\boxed{0} \end{array}$$



$$\begin{array}{r} 299 \\ + \boxed{6}90 \\ \hline 989 \end{array}$$



# DIGITOS FANTASMAS, SUMA (F)

Nombre: \_\_\_\_\_

Fecha: \_\_\_\_\_

Puntuación: \_\_\_\_\_

Reemplace los dígitos que han desaparecido misteriosamente.

1. 
$$\begin{array}{r} 1 \square \square \\ + 926 \\ \hline \square \square 43 \end{array}$$



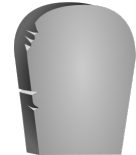
2. 
$$\begin{array}{r} \square 3 \square \\ + 708 \\ \hline \square 6 \square 3 \end{array}$$



3. 
$$\begin{array}{r} 27\square \\ + 5\square 9 \\ \hline \square 88 \end{array}$$



4. 
$$\begin{array}{r} \square 9 \square \\ + 933 \\ \hline \square 2 \square 8 \end{array}$$



5. 
$$\begin{array}{r} 42\square \\ + 8\square 1 \\ \hline \square \square 91 \end{array}$$



6. 
$$\begin{array}{r} \square 08 \\ + 2\square 2 \\ \hline 93\square \end{array}$$



7. 
$$\begin{array}{r} 917 \\ + \square \square 2 \\ \hline \square 02\square \end{array}$$



8. 
$$\begin{array}{r} 7\square 4 \\ + 31\square \\ \hline \square \square 41 \end{array}$$



9. 
$$\begin{array}{r} 9\square 1 \\ + 866 \\ \hline \square \square 3\square \end{array}$$



10. 
$$\begin{array}{r} 637 \\ + \square \square \square \\ \hline 966 \end{array}$$



11. 
$$\begin{array}{r} 1\square \square \\ + \square 24 \\ \hline 497 \end{array}$$



12. 
$$\begin{array}{r} 44\square \\ + 576 \\ \hline \square \square \square 2 \end{array}$$



13. 
$$\begin{array}{r} \square 89 \\ + 5\square \square \\ \hline 715 \end{array}$$



14. 
$$\begin{array}{r} 6\square \\ + 533 \\ \hline \square \square 3 \end{array}$$



15. 
$$\begin{array}{r} 8\square 8 \\ + 21\square \\ \hline \square \square 38 \end{array}$$



16. 
$$\begin{array}{r} 6\square 2 \\ + 933 \\ \hline \square \square 1\square \end{array}$$



17. 
$$\begin{array}{r} \square \square 7 \\ + 409 \\ \hline \square 39\square \end{array}$$



18. 
$$\begin{array}{r} 5\square \square \\ + 180 \\ \hline \square 07 \end{array}$$



19. 
$$\begin{array}{r} 25\square \\ + 6\square 7 \\ \hline \square 73 \end{array}$$



20. 
$$\begin{array}{r} 5\square \\ + 714 \\ \hline \square \square 9 \end{array}$$



# DIGITOS FANTASMAS, SUMA (F) RESPUESTAS


Nombre: \_\_\_\_\_

Fecha: \_\_\_\_\_

Puntuación: \_\_\_\_\_

Reemplace los dígitos que han desaparecido misteriosamente.

$$\begin{array}{r} 1. \quad 1 \boxed{1} \boxed{7} \\ + \quad 9 \ 2 \ 6 \\ \hline \boxed{1} \boxed{0} \ 4 \ 3 \end{array}$$



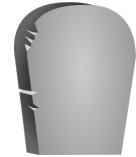
$$\begin{array}{r} 2. \quad \boxed{9} \ 3 \ \boxed{5} \\ + \quad 7 \ 0 \ 8 \\ \hline \boxed{1} \ \boxed{6} \ \boxed{4} \ 3 \end{array}$$



$$\begin{array}{r} 3. \quad 2 \ 7 \ \boxed{9} \\ + \quad 5 \ \boxed{0} \ 9 \\ \hline \boxed{7} \ 8 \ 8 \end{array}$$



$$\begin{array}{r} 4. \quad \boxed{2} \ \boxed{9} \ \boxed{5} \\ + \quad 9 \ 3 \ 3 \\ \hline \boxed{1} \ \boxed{2} \ \boxed{2} \ 8 \end{array}$$



$$\begin{array}{r} 5. \quad 4 \ 2 \ \boxed{0} \\ + \quad 8 \ \boxed{7} \ 1 \\ \hline \boxed{1} \ \boxed{2} \ 9 \ 1 \end{array}$$



$$\begin{array}{r} 6. \quad \boxed{7} \ 0 \ 8 \\ + \quad 2 \ \boxed{2} \ 2 \\ \hline 9 \ 3 \ \boxed{0} \end{array}$$



$$\begin{array}{r} 7. \quad 9 \ 1 \ 7 \\ + \quad \boxed{1} \ \boxed{1} \ 2 \\ \hline \boxed{1} \ \boxed{0} \ 2 \ \boxed{9} \end{array}$$



$$\begin{array}{r} 8. \quad 7 \ \boxed{2} \ 4 \\ + \quad 3 \ 1 \ \boxed{7} \\ \hline \boxed{1} \ \boxed{0} \ 4 \ 1 \end{array}$$



$$\begin{array}{r} 9. \quad 9 \ \boxed{7} \ 1 \\ + \quad 8 \ 6 \ 6 \\ \hline \boxed{1} \ \boxed{8} \ 3 \ \boxed{7} \end{array}$$



$$\begin{array}{r} 10. \quad 6 \ 3 \ 7 \\ + \quad \boxed{3} \ \boxed{2} \ \boxed{9} \\ \hline 9 \ 6 \ 6 \end{array}$$



$$\begin{array}{r} 11. \quad 1 \ \boxed{7} \ \boxed{3} \\ + \quad \boxed{3} \ 2 \ 4 \\ \hline 4 \ 9 \ 7 \end{array}$$



$$\begin{array}{r} 12. \quad 4 \ 4 \ \boxed{6} \\ + \quad 5 \ 7 \ 6 \\ \hline \boxed{1} \ \boxed{0} \ \boxed{2} \ 2 \end{array}$$



$$\begin{array}{r} 13. \quad \boxed{1} \ 8 \ 9 \\ + \quad 5 \ \boxed{2} \ \boxed{6} \\ \hline 7 \ 1 \ 5 \end{array}$$



$$\begin{array}{r} 14. \quad 6 \ \boxed{0} \\ + \quad 5 \ 3 \ 3 \\ \hline \boxed{5} \ \boxed{9} \ 3 \end{array}$$



$$\begin{array}{r} 15. \quad 8 \ \boxed{2} \ 8 \\ + \quad 2 \ 1 \ \boxed{0} \\ \hline \boxed{1} \ \boxed{0} \ 3 \ 8 \end{array}$$



$$\begin{array}{r} 16. \quad 6 \ \boxed{8} \ 2 \\ + \quad 9 \ 3 \ 3 \\ \hline \boxed{1} \ \boxed{6} \ \boxed{1} \ \boxed{5} \end{array}$$



$$\begin{array}{r} 17. \quad \boxed{9} \ \boxed{8} \ 7 \\ + \quad 4 \ 0 \ 9 \\ \hline \boxed{1} \ \boxed{3} \ 9 \ \boxed{6} \end{array}$$



$$\begin{array}{r} 18. \quad 5 \ \boxed{2} \ \boxed{7} \\ + \quad 1 \ 8 \ 0 \\ \hline \boxed{7} \ \boxed{0} \ 7 \end{array}$$



$$\begin{array}{r} 19. \quad 2 \ 5 \ \boxed{6} \\ + \quad 6 \ \boxed{1} \ 7 \\ \hline \boxed{8} \ 7 \ 3 \end{array}$$



$$\begin{array}{r} 20. \quad 5 \ \boxed{5} \\ + \quad 7 \ 1 \ 4 \\ \hline \boxed{7} \ \boxed{6} \ 9 \end{array}$$



# DIGITOS FANTASMAS, SUMA (Q)

Nombre: \_\_\_\_\_

Fecha: \_\_\_\_\_

Puntuación: \_\_\_\_\_

Reemplace los dígitos que han desaparecido misteriosamente.

1. 
$$\begin{array}{r} \square 5 \square \\ + 2 \square 0 \\ \hline 7 2 6 \end{array}$$



2. 
$$\begin{array}{r} \phantom{0} 8 9 \\ + \phantom{0} \square \square \square \\ \hline \square 0 5 2 \end{array}$$



3. 
$$\begin{array}{r} 5 \square 7 \\ + 1 6 \square \\ \hline \square 6 0 \end{array}$$



4. 
$$\begin{array}{r} 2 8 4 \\ + \square 0 \square \\ \hline 6 \square 1 \end{array}$$



5. 
$$\begin{array}{r} 2 9 6 \\ + \square \square \square \\ \hline \square 5 6 \end{array}$$



6. 
$$\begin{array}{r} \square \square 5 \\ + 6 9 5 \\ \hline \square 0 9 \square \end{array}$$




7. 
$$\begin{array}{r} 9 3 \\ + \square \square 3 \\ \hline 7 8 \square \end{array}$$



8. 
$$\begin{array}{r} 2 5 3 \\ + \square \square \square \\ \hline 9 4 6 \end{array}$$



9. 
$$\begin{array}{r} \square 0 1 \\ + 2 7 \square \\ \hline \square 0 \square 0 \end{array}$$



10. 
$$\begin{array}{r} 4 9 \square \\ + \square \square 0 \\ \hline \square 3 5 2 \end{array}$$



11. 
$$\begin{array}{r} 6 0 \\ + 2 \square 3 \\ \hline \square 9 \square \end{array}$$



12. 
$$\begin{array}{r} \square 0 7 \\ + 2 2 \\ \hline 5 \square \square \end{array}$$



13. 
$$\begin{array}{r} \square 9 3 \\ + 4 3 7 \\ \hline 6 \square \square \end{array}$$



14. 
$$\begin{array}{r} 2 9 9 \\ + \square 3 \\ \hline \square 3 \square \end{array}$$



15. 
$$\begin{array}{r} 5 4 1 \\ + \square 8 9 \\ \hline 8 \square \square \end{array}$$



16. 
$$\begin{array}{r} \square 0 6 \\ + \square 7 \\ \hline 4 5 \square \end{array}$$



17. 
$$\begin{array}{r} 9 8 \square \\ + 8 \square 9 \\ \hline \square \square 0 7 \end{array}$$



18. 
$$\begin{array}{r} 6 0 9 \\ + \square \square 3 \\ \hline 9 7 \square \end{array}$$



19. 
$$\begin{array}{r} 3 3 8 \\ + 2 6 \square \\ \hline \square \square 4 \end{array}$$



20. 
$$\begin{array}{r} 1 2 \square \\ + 3 7 9 \\ \hline \square \square 2 \end{array}$$



# DIGITOS FANTASMAS, SUMA (Q) RESPUESTAS

Nombre: \_\_\_\_\_

Fecha: \_\_\_\_\_

Puntuación: \_\_\_\_\_

Reemplace los dígitos que han desaparecido misteriosamente.

1. 
$$\begin{array}{r} \boxed{4} \boxed{5} \boxed{6} \\ + 2 \boxed{7} 0 \\ \hline 7 \boxed{2} \boxed{6} \end{array}$$



2. 
$$\begin{array}{r} 8 \boxed{9} \\ + \boxed{9} \boxed{6} \boxed{3} \\ \hline \boxed{1} 0 \boxed{5} 2 \end{array}$$



3. 
$$\begin{array}{r} 5 \boxed{9} 7 \\ + 1 \boxed{6} \boxed{3} \\ \hline \boxed{7} \boxed{6} 0 \end{array}$$



4. 
$$\begin{array}{r} 2 \boxed{8} 4 \\ + \boxed{4} 0 \boxed{7} \\ \hline 6 \boxed{9} 1 \end{array}$$



5. 
$$\begin{array}{r} 2 \boxed{9} \boxed{6} \\ + \boxed{6} 0 \\ \hline \boxed{3} \boxed{5} \boxed{6} \end{array}$$



6. 
$$\begin{array}{r} \boxed{3} \boxed{9} 5 \\ + 6 \boxed{9} 5 \\ \hline \boxed{1} 0 \boxed{9} 0 \end{array}$$



7. 
$$\begin{array}{r} 9 \boxed{3} \\ + \boxed{6} \boxed{9} \boxed{3} \\ \hline 7 \boxed{8} \boxed{6} \end{array}$$



8. 
$$\begin{array}{r} 2 \boxed{5} 3 \\ + \boxed{6} \boxed{9} \boxed{3} \\ \hline 9 \boxed{4} \boxed{6} \end{array}$$



9. 
$$\begin{array}{r} \boxed{8} 0 1 \\ + 2 \boxed{7} \boxed{9} \\ \hline \boxed{1} 0 \boxed{8} 0 \end{array}$$



10. 
$$\begin{array}{r} 4 \boxed{9} \boxed{2} \\ + \boxed{8} \boxed{6} 0 \\ \hline \boxed{1} \boxed{3} \boxed{5} 2 \end{array}$$



11. 
$$\begin{array}{r} 6 0 \\ + 2 \boxed{3} 3 \\ \hline \boxed{2} \boxed{9} \boxed{3} \end{array}$$



12. 
$$\begin{array}{r} \boxed{5} 0 7 \\ + 2 2 \\ \hline 5 \boxed{2} \boxed{9} \end{array}$$



13. 
$$\begin{array}{r} \boxed{1} 9 3 \\ + 4 \boxed{3} 7 \\ \hline 6 \boxed{3} 0 \end{array}$$



14. 
$$\begin{array}{r} 2 \boxed{9} 9 \\ + \boxed{3} 3 \\ \hline \boxed{3} \boxed{3} \boxed{2} \end{array}$$



15. 
$$\begin{array}{r} 5 \boxed{4} 1 \\ + \boxed{2} \boxed{8} 9 \\ \hline 8 \boxed{3} 0 \end{array}$$



16. 
$$\begin{array}{r} \boxed{4} 0 6 \\ + \boxed{4} 7 \\ \hline 4 \boxed{5} \boxed{3} \end{array}$$



17. 
$$\begin{array}{r} 9 \boxed{8} \boxed{8} \\ + 8 \boxed{1} 9 \\ \hline \boxed{1} \boxed{8} 0 7 \end{array}$$



18. 
$$\begin{array}{r} 6 0 9 \\ + \boxed{3} \boxed{6} \boxed{3} \\ \hline 9 \boxed{7} \boxed{2} \end{array}$$



19. 
$$\begin{array}{r} 3 \boxed{3} 8 \\ + 2 \boxed{6} \boxed{6} \\ \hline \boxed{6} 0 4 \end{array}$$



20. 
$$\begin{array}{r} 1 \boxed{2} \boxed{3} \\ + 3 \boxed{7} 9 \\ \hline \boxed{5} 0 2 \end{array}$$



# DIGITOS FANTASMAS, SUMA (HD)

Nombre: \_\_\_\_\_

Fecha: \_\_\_\_\_

Puntuación: \_\_\_\_\_

Reemplace los dígitos que han desaparecido misteriosamente.

1. 
$$\begin{array}{r} \square 1 \square \\ + 672 \\ \hline \square 5 \square 1 \end{array}$$



2. 
$$\begin{array}{r} 5 \square 3 \\ + 355 \\ \hline \square 0 \square \end{array}$$



3. 
$$\begin{array}{r} 5 \square \square \\ + \square 57 \\ \hline \square 088 \end{array}$$



4. 
$$\begin{array}{r} 562 \\ + 7 \square \square \\ \hline \square \square 40 \end{array}$$



5. 
$$\begin{array}{r} \square \square \square \\ + 684 \\ \hline \square 030 \end{array}$$



6. 
$$\begin{array}{r} 866 \\ + 23 \square \\ \hline \square \square \square 9 \end{array}$$



7. 
$$\begin{array}{r} 61 \square \\ + \square 36 \\ \hline 9 \square 2 \end{array}$$



8. 
$$\begin{array}{r} \square \square \\ + \square 66 \\ \hline 457 \end{array}$$



9. 
$$\begin{array}{r} 672 \\ + 12 \square \\ \hline \square \square 1 \end{array}$$




10. 
$$\begin{array}{r} \square 02 \\ + \square \square \\ \hline 980 \end{array}$$



11. 
$$\begin{array}{r} 49 \square \\ + 8 \square 1 \\ \hline \square \square 08 \end{array}$$



12. 
$$\begin{array}{r} \square \square \square \\ + 228 \\ \hline 702 \end{array}$$



13. 
$$\begin{array}{r} 1 \square 5 \\ + 78 \square \\ \hline \square 14 \end{array}$$



14. 
$$\begin{array}{r} \square 26 \\ + 45 \square \\ \hline 7 \square 8 \end{array}$$



15. 
$$\begin{array}{r} 136 \\ + 74 \square \\ \hline \square \square 8 \end{array}$$



16. 
$$\begin{array}{r} \square 53 \\ + 4 \square \square \\ \hline \square 218 \end{array}$$



17. 
$$\begin{array}{r} 72 \square \\ + 3 \square 9 \\ \hline \square \square 09 \end{array}$$



18. 
$$\begin{array}{r} \square 69 \\ + 566 \\ \hline \square 5 \square \square \end{array}$$



19. 
$$\begin{array}{r} 63 \\ + 55 \square \\ \hline \square \square 3 \end{array}$$



20. 
$$\begin{array}{r} \square 68 \\ + 8 \square \\ \hline 4 \square 8 \end{array}$$



# DIGITOS FANTASMAS, SUMA (H) RESPUESTAS

Nombre: \_\_\_\_\_

Fecha: \_\_\_\_\_

Puntuación: \_\_\_\_\_

Reemplace los dígitos que han desaparecido misteriosamente.

$$\begin{array}{r} 919 \\ + 672 \\ \hline 1591 \end{array}$$



$$\begin{array}{r} 553 \\ + 355 \\ \hline 908 \end{array}$$



$$\begin{array}{r} 531 \\ + 557 \\ \hline 1088 \end{array}$$



$$\begin{array}{r} 562 \\ + 778 \\ \hline 1340 \end{array}$$



$$\begin{array}{r} 346 \\ + 684 \\ \hline 1030 \end{array}$$



$$\begin{array}{r} 866 \\ + 233 \\ \hline 1099 \end{array}$$



$$\begin{array}{r} 616 \\ + 336 \\ \hline 952 \end{array}$$



$$\begin{array}{r} 91 \\ + 366 \\ \hline 457 \end{array}$$



$$\begin{array}{r} 672 \\ + 129 \\ \hline 801 \end{array}$$




$$\begin{array}{r} 902 \\ + 78 \\ \hline 980 \end{array}$$



$$\begin{array}{r} 497 \\ + 811 \\ \hline 1308 \end{array}$$



$$\begin{array}{r} 474 \\ + 228 \\ \hline 702 \end{array}$$



$$\begin{array}{r} 125 \\ + 789 \\ \hline 914 \end{array}$$



$$\begin{array}{r} 326 \\ + 452 \\ \hline 778 \end{array}$$



$$\begin{array}{r} 136 \\ + 742 \\ \hline 878 \end{array}$$



$$\begin{array}{r} 753 \\ + 465 \\ \hline 1218 \end{array}$$



$$\begin{array}{r} 720 \\ + 389 \\ \hline 1109 \end{array}$$



$$\begin{array}{r} 969 \\ + 566 \\ \hline 1535 \end{array}$$



$$\begin{array}{r} 63 \\ + 550 \\ \hline 613 \end{array}$$



$$\begin{array}{r} 368 \\ + 80 \\ \hline 448 \end{array}$$





# DIGITOS FANTASMAS, SUMA (1)

Nombre: \_\_\_\_\_

Fecha: \_\_\_\_\_

Puntuación: \_\_\_\_\_

Reemplace los dígitos que han desaparecido misteriosamente.

1. 
$$\begin{array}{r} \square 9 \\ + \square 2 \square \\ \hline 951 \end{array}$$



2. 
$$\begin{array}{r} 698 \\ + 540 \\ \hline \square\square\square\square \end{array}$$



3. 
$$\begin{array}{r} 4\square 6 \\ + \square 24 \\ \hline 62\square \end{array}$$



4. 
$$\begin{array}{r} \square\square 4 \\ + 82\square \\ \hline \square 291 \end{array}$$



5. 
$$\begin{array}{r} 26 \\ + 9\square 5 \\ \hline \square\square 1\square \end{array}$$



6. 
$$\begin{array}{r} 47\square \\ + 7\square 5 \\ \hline \square\square 16 \end{array}$$



7. 
$$\begin{array}{r} 475 \\ + 7\square\square \\ \hline \square\square 91 \end{array}$$



8. 
$$\begin{array}{r} \square 5 \\ + \square 2\square \\ \hline 564 \end{array}$$



9. 
$$\begin{array}{r} 2\square\square \\ + \square 41 \\ \hline 628 \end{array}$$



10. 
$$\begin{array}{r} 7\square\square \\ + \square 06 \\ \hline \square 407 \end{array}$$



11. 
$$\begin{array}{r} \square\square\square \\ + 874 \\ \hline \square 600 \end{array}$$



12. 
$$\begin{array}{r} \square\square 1 \\ + 110 \\ \hline 57\square \end{array}$$



13. 
$$\begin{array}{r} \square 90 \\ + 896 \\ \hline \square 7\square\square \end{array}$$



14. 
$$\begin{array}{r} 64\square \\ + \square 41 \\ \hline \square 2\square 5 \end{array}$$



15. 
$$\begin{array}{r} 32 \\ + \square\square\square \\ \hline 217 \end{array}$$



16. 
$$\begin{array}{r} \square\square\square \\ + 720 \\ \hline \square 404 \end{array}$$



17. 
$$\begin{array}{r} 8\square\square \\ + 752 \\ \hline \square\square 22 \end{array}$$



18. 
$$\begin{array}{r} 5\square 9 \\ + \square 17 \\ \hline \square 43\square \end{array}$$



19. 
$$\begin{array}{r} \square 9\square \\ + 743 \\ \hline \square 2\square 7 \end{array}$$



20. 
$$\begin{array}{r} \square 92 \\ + 6\square\square \\ \hline 973 \end{array}$$



# DIGITOS FANTASMAS, SUMA (Y) RESPUESTAS

Nombre: \_\_\_\_\_

Fecha: \_\_\_\_\_

Puntuación: \_\_\_\_\_

Reemplace los dígitos que han desaparecido misteriosamente.

$$\begin{array}{r} \phantom{+} \phantom{9} \phantom{2} \phantom{2} \\ + \phantom{9} \phantom{2} \phantom{2} \phantom{2} \\ \hline 9 \phantom{5} \phantom{1} \end{array}$$



$$\begin{array}{r} \phantom{+} \phantom{6} \phantom{9} \phantom{8} \\ + \phantom{+} \phantom{5} \phantom{4} \phantom{0} \\ \hline \phantom{1} \phantom{2} \phantom{3} \phantom{8} \end{array}$$



$$\begin{array}{r} \phantom{+} \phantom{4} \phantom{9} \phantom{6} \\ + \phantom{+} \phantom{1} \phantom{2} \phantom{4} \\ \hline \phantom{6} \phantom{2} \phantom{0} \end{array}$$



$$\begin{array}{r} \phantom{+} \phantom{4} \phantom{6} \phantom{4} \\ + \phantom{+} \phantom{8} \phantom{2} \phantom{7} \\ \hline \phantom{1} \phantom{2} \phantom{9} \phantom{1} \end{array}$$



$$\begin{array}{r} \phantom{+} \phantom{2} \phantom{6} \\ + \phantom{+} \phantom{9} \phantom{8} \phantom{5} \\ \hline \phantom{1} \phantom{0} \phantom{1} \phantom{1} \end{array}$$



$$\begin{array}{r} \phantom{+} \phantom{4} \phantom{7} \phantom{1} \\ + \phantom{+} \phantom{7} \phantom{4} \phantom{5} \\ \hline \phantom{1} \phantom{2} \phantom{1} \phantom{6} \end{array}$$



$$\begin{array}{r} \phantom{+} \phantom{4} \phantom{7} \phantom{5} \\ + \phantom{+} \phantom{7} \phantom{1} \phantom{6} \\ \hline \phantom{1} \phantom{1} \phantom{9} \phantom{1} \end{array}$$



$$\begin{array}{r} \phantom{+} \phantom{3} \phantom{5} \\ + \phantom{+} \phantom{5} \phantom{2} \phantom{9} \\ \hline \phantom{5} \phantom{6} \phantom{4} \end{array}$$



$$\begin{array}{r} \phantom{+} \phantom{2} \phantom{8} \phantom{7} \\ + \phantom{+} \phantom{3} \phantom{4} \phantom{1} \\ \hline \phantom{6} \phantom{2} \phantom{8} \end{array}$$



$$\begin{array}{r} \phantom{+} \phantom{7} \phantom{0} \phantom{1} \\ + \phantom{+} \phantom{7} \phantom{0} \phantom{6} \\ \hline \phantom{1} \phantom{4} \phantom{0} \phantom{7} \end{array}$$



$$\begin{array}{r} \phantom{+} \phantom{7} \phantom{2} \phantom{6} \\ + \phantom{+} \phantom{8} \phantom{7} \phantom{4} \\ \hline \phantom{1} \phantom{6} \phantom{0} \phantom{0} \end{array}$$



$$\begin{array}{r} \phantom{+} \phantom{4} \phantom{6} \phantom{1} \\ + \phantom{+} \phantom{1} \phantom{1} \phantom{0} \\ \hline \phantom{5} \phantom{7} \phantom{1} \end{array}$$



$$\begin{array}{r} \phantom{+} \phantom{8} \phantom{9} \phantom{0} \\ + \phantom{+} \phantom{8} \phantom{9} \phantom{6} \\ \hline \phantom{1} \phantom{7} \phantom{8} \phantom{6} \end{array}$$



$$\begin{array}{r} \phantom{+} \phantom{6} \phantom{4} \phantom{4} \\ + \phantom{+} \phantom{6} \phantom{4} \phantom{1} \\ \hline \phantom{1} \phantom{2} \phantom{8} \phantom{5} \end{array}$$



$$\begin{array}{r} \phantom{+} \phantom{3} \phantom{2} \\ + \phantom{+} \phantom{1} \phantom{8} \phantom{5} \\ \hline \phantom{2} \phantom{1} \phantom{7} \end{array}$$



$$\begin{array}{r} \phantom{+} \phantom{6} \phantom{8} \phantom{4} \\ + \phantom{+} \phantom{7} \phantom{2} \phantom{0} \\ \hline \phantom{1} \phantom{4} \phantom{0} \phantom{4} \end{array}$$



$$\begin{array}{r} \phantom{+} \phantom{8} \phantom{7} \phantom{0} \\ + \phantom{+} \phantom{7} \phantom{5} \phantom{2} \\ \hline \phantom{1} \phantom{6} \phantom{2} \phantom{2} \end{array}$$



$$\begin{array}{r} \phantom{+} \phantom{5} \phantom{1} \phantom{9} \\ + \phantom{+} \phantom{9} \phantom{1} \phantom{7} \\ \hline \phantom{1} \phantom{4} \phantom{3} \phantom{6} \end{array}$$



$$\begin{array}{r} \phantom{+} \phantom{4} \phantom{9} \phantom{4} \\ + \phantom{+} \phantom{7} \phantom{4} \phantom{3} \\ \hline \phantom{1} \phantom{2} \phantom{3} \phantom{7} \end{array}$$



$$\begin{array}{r} \phantom{+} \phantom{2} \phantom{9} \phantom{2} \\ + \phantom{+} \phantom{6} \phantom{8} \phantom{1} \\ \hline \phantom{9} \phantom{7} \phantom{3} \end{array}$$



# DIGITOS FANTASMAS, SUMA (J)

Nombre: \_\_\_\_\_

Fecha: \_\_\_\_\_

Puntuación: \_\_\_\_\_

Reemplace los dígitos que han desaparecido misteriosamente.

1. 
$$\begin{array}{r} \square\square \\ + \square 0 8 \\ \hline 8 7 2 \end{array}$$



2. 
$$\begin{array}{r} 7 4 \square \\ + \square\square 3 \\ \hline \square 2 8 3 \end{array}$$



3. 
$$\begin{array}{r} 8 \square 5 \\ + 5 2 \square \\ \hline \square\square 8 2 \end{array}$$



4. 
$$\begin{array}{r} \square 0 \square \\ + 9 \square 0 \\ \hline \square 3 5 3 \end{array}$$



5. 
$$\begin{array}{r} 2 9 \square \\ + \square 0 6 \\ \hline 5 \square 4 \end{array}$$



6. 
$$\begin{array}{r} \square 7 2 \\ + 1 \square 8 \\ \hline 6 3 \square \end{array}$$



7. 
$$\begin{array}{r} 8 4 0 \\ + 2 \square\square \\ \hline \square\square 4 1 \end{array}$$



8. 
$$\begin{array}{r} 7 6 3 \\ + \square\square 2 \\ \hline \square 1 1 \square \end{array}$$



9. 
$$\begin{array}{r} 8 \square 4 \\ + 5 4 \square \\ \hline \square\square 4 8 \end{array}$$



10. 
$$\begin{array}{r} 6 \square 7 \\ + \square 3 5 \\ \hline \square 0 8 \square \end{array}$$



11. 
$$\begin{array}{r} \square\square\square \\ + 5 5 2 \\ \hline \square 0 0 6 \end{array}$$



12. 
$$\begin{array}{r} 1 1 \square \\ + 3 \square 8 \\ \hline \square 4 8 \end{array}$$



13. 
$$\begin{array}{r} \square 1 \\ + 5 0 \\ \hline \square 1 \square \end{array}$$



14. 
$$\begin{array}{r} \square 5 8 \\ + 2 \square 3 \\ \hline 8 6 \square \end{array}$$



15. 
$$\begin{array}{r} \square 6 5 \\ + 6 \square\square \\ \hline \square 1 5 0 \end{array}$$



16. 
$$\begin{array}{r} 3 2 2 \\ + 4 1 3 \\ \hline \square\square\square \end{array}$$



17. 
$$\begin{array}{r} \square 9 7 \\ + 5 0 7 \\ \hline \square 2 \square\square \end{array}$$



18. 
$$\begin{array}{r} 6 \square\square \\ + \square 9 6 \\ \hline \square 0 9 0 \end{array}$$



19. 
$$\begin{array}{r} 7 \square\square \\ + 4 5 8 \\ \hline \square\square 0 1 \end{array}$$



20. 
$$\begin{array}{r} 8 \square 7 \\ + 2 6 7 \\ \hline \square\square 3 \square \end{array}$$



# DIGITOS FANTASMAS, SUMA (J) RESPUESTAS

Nombre: \_\_\_\_\_

Fecha: \_\_\_\_\_

Puntuación: \_\_\_\_\_

Reemplace los dígitos que han desaparecido misteriosamente.

$$\begin{array}{r} 64 \\ + 808 \\ \hline 872 \end{array}$$



$$\begin{array}{r} 740 \\ + 543 \\ \hline 1283 \end{array}$$



$$\begin{array}{r} 855 \\ + 527 \\ \hline 1382 \end{array}$$



$$\begin{array}{r} 403 \\ + 950 \\ \hline 1353 \end{array}$$



$$\begin{array}{r} 298 \\ + 206 \\ \hline 504 \end{array}$$



$$\begin{array}{r} 472 \\ + 158 \\ \hline 630 \end{array}$$



$$\begin{array}{r} 840 \\ + 201 \\ \hline 1041 \end{array}$$



$$\begin{array}{r} 763 \\ + 352 \\ \hline 1115 \end{array}$$



$$\begin{array}{r} 804 \\ + 544 \\ \hline 1348 \end{array}$$



$$\begin{array}{r} 647 \\ + 435 \\ \hline 1082 \end{array}$$



$$\begin{array}{r} 454 \\ + 552 \\ \hline 1006 \end{array}$$



$$\begin{array}{r} 110 \\ + 338 \\ \hline 448 \end{array}$$



$$\begin{array}{r} 61 \\ + 50 \\ \hline 111 \end{array}$$



$$\begin{array}{r} 658 \\ + 203 \\ \hline 861 \end{array}$$



$$\begin{array}{r} 465 \\ + 685 \\ \hline 1150 \end{array}$$



$$\begin{array}{r} 322 \\ + 413 \\ \hline 735 \end{array}$$



$$\begin{array}{r} 697 \\ + 507 \\ \hline 1204 \end{array}$$



$$\begin{array}{r} 694 \\ + 396 \\ \hline 1090 \end{array}$$



$$\begin{array}{r} 743 \\ + 458 \\ \hline 1201 \end{array}$$



$$\begin{array}{r} 867 \\ + 267 \\ \hline 1134 \end{array}$$

