

DIGITOS FANTASMAS, MULTIPLICACION (A)

Nombre: _____

Fecha: _____

Puntuación: _____

Reemplace los dígitos que han desaparecido misteriosamente.

1.
$$\begin{array}{r} 9 \\ \times \square \\ \hline 27 \end{array}$$



2.
$$\begin{array}{r} \square \\ \times 8 \\ \hline 24 \end{array}$$



3.
$$\begin{array}{r} 1\square \\ \times 2 \\ \hline 22 \end{array}$$



4.
$$\begin{array}{r} 4 \\ \times 6 \\ \hline 2\square \end{array}$$



5.
$$\begin{array}{r} 10 \\ \times 1\square \\ \hline \square 10 \end{array}$$



6.
$$\begin{array}{r} \square \\ \times 3 \\ \hline 21 \end{array}$$



7.
$$\begin{array}{r} 7 \\ \times 9 \\ \hline 6\square \end{array}$$



8.
$$\begin{array}{r} 11 \\ \times \square \\ \hline 88 \end{array}$$



9.
$$\begin{array}{r} 9 \\ \times 9 \\ \hline 8\square \end{array}$$



10.
$$\begin{array}{r} \square \\ \times 12 \\ \hline \square 08 \end{array}$$



11.
$$\begin{array}{r} 2 \\ \times \square \\ \hline 4 \end{array}$$



12.
$$\begin{array}{r} 4 \\ \times \square \\ \hline 16 \end{array}$$



13.
$$\begin{array}{r} 1\square \\ \times 3 \\ \hline 36 \end{array}$$



14.
$$\begin{array}{r} 8 \\ \times \square \\ \hline 64 \end{array}$$



15.
$$\begin{array}{r} 1\square \\ \times 2 \\ \hline 24 \end{array}$$



16.
$$\begin{array}{r} 12 \\ \times 6 \\ \hline 7\square \end{array}$$



17.
$$\begin{array}{r} 1\square \\ \times 10 \\ \hline \square 00 \end{array}$$



18.
$$\begin{array}{r} \square \\ \times 12 \\ \hline 24 \end{array}$$



19.
$$\begin{array}{r} 12 \\ \times 6 \\ \hline 7\square \end{array}$$



20.
$$\begin{array}{r} 7 \\ \times \square \\ \hline 35 \end{array}$$



DIGITOS FANTASMAS, MULTIPLICACION (A) RESPUESTAS

Nombre: _____

Fecha: _____

Puntuación: _____

Reemplace los dígitos que han desaparecido misteriosamente.

1.
$$\begin{array}{r} 9 \\ \times 3 \\ \hline 27 \end{array}$$



2.
$$\begin{array}{r} 3 \\ \times 8 \\ \hline 24 \end{array}$$



3.
$$\begin{array}{r} 11 \\ \times 2 \\ \hline 22 \end{array}$$



4.
$$\begin{array}{r} 4 \\ \times 6 \\ \hline 24 \end{array}$$



5.
$$\begin{array}{r} 10 \\ \times 11 \\ \hline 110 \end{array}$$



6.
$$\begin{array}{r} 7 \\ \times 3 \\ \hline 21 \end{array}$$



7.
$$\begin{array}{r} 7 \\ \times 9 \\ \hline 63 \end{array}$$



8.
$$\begin{array}{r} 11 \\ \times 8 \\ \hline 88 \end{array}$$



9.
$$\begin{array}{r} 9 \\ \times 9 \\ \hline 81 \end{array}$$



10.
$$\begin{array}{r} 9 \\ \times 12 \\ \hline 108 \end{array}$$



11.
$$\begin{array}{r} 2 \\ \times 2 \\ \hline 4 \end{array}$$



12.
$$\begin{array}{r} 4 \\ \times 4 \\ \hline 16 \end{array}$$



13.
$$\begin{array}{r} 12 \\ \times 3 \\ \hline 36 \end{array}$$



14.
$$\begin{array}{r} 8 \\ \times 8 \\ \hline 64 \end{array}$$



15.
$$\begin{array}{r} 12 \\ \times 2 \\ \hline 24 \end{array}$$



16.
$$\begin{array}{r} 12 \\ \times 6 \\ \hline 72 \end{array}$$



17.
$$\begin{array}{r} 10 \\ \times 10 \\ \hline 100 \end{array}$$



18.
$$\begin{array}{r} 2 \\ \times 12 \\ \hline 24 \end{array}$$



19.
$$\begin{array}{r} 12 \\ \times 6 \\ \hline 72 \end{array}$$



20.
$$\begin{array}{r} 7 \\ \times 5 \\ \hline 35 \end{array}$$



DIGITOS FANTASMAS, MULTIPLICACION (B)

Nombre: _____

Fecha: _____

Puntuación: _____

Reemplace los digitos que han desaparecido misteriosamente.

1.
$$\begin{array}{r} 11 \\ \times 7 \\ \hline 7 \square \end{array}$$



2.
$$\begin{array}{r} \square \\ \times 11 \\ \hline 88 \end{array}$$



3.
$$\begin{array}{r} \square \\ \times 5 \\ \hline 20 \end{array}$$



4.
$$\begin{array}{r} 6 \\ \times 4 \\ \hline 2 \square \end{array}$$



5.
$$\begin{array}{r} \square \\ \times 10 \\ \hline 20 \end{array}$$



6.
$$\begin{array}{r} 5 \\ \times 11 \\ \hline 5 \square \end{array}$$



7.
$$\begin{array}{r} 12 \\ \times \square \\ \hline \square 08 \end{array}$$



8.
$$\begin{array}{r} 6 \\ \times 7 \\ \hline 4 \square \end{array}$$



9.
$$\begin{array}{r} 4 \\ \times 7 \\ \hline 2 \square \end{array}$$



10.
$$\begin{array}{r} 2 \\ \times 6 \\ \hline 1 \square \end{array}$$



11.
$$\begin{array}{r} \square \\ \times 8 \\ \hline 56 \end{array}$$



12.
$$\begin{array}{r} 7 \\ \times 1 \square \\ \hline 84 \end{array}$$



13.
$$\begin{array}{r} 12 \\ \times 4 \\ \hline 4 \square \end{array}$$



14.
$$\begin{array}{r} 2 \\ \times 12 \\ \hline 2 \square \end{array}$$



15.
$$\begin{array}{r} \square \\ \times 3 \\ \hline 24 \end{array}$$



16.
$$\begin{array}{r} 7 \\ \times 4 \\ \hline 2 \square \end{array}$$



17.
$$\begin{array}{r} 7 \\ \times 1 \square \\ \hline 77 \end{array}$$



18.
$$\begin{array}{r} 9 \\ \times 4 \\ \hline 3 \square \end{array}$$



19.
$$\begin{array}{r} 2 \\ \times 11 \\ \hline 2 \square \end{array}$$



20.
$$\begin{array}{r} 4 \\ \times \square \\ \hline 24 \end{array}$$



DIGITOS FANTASMAS, MULTIPLICACION (B) RESPUESTAS

Nombre: _____

Fecha: _____

Puntuación: _____

Reemplace los dígitos que han desaparecido misteriosamente.

1.
$$\begin{array}{r} 11 \\ \times 7 \\ \hline 77 \end{array}$$



2.
$$\begin{array}{r} \boxed{8} \\ \times 11 \\ \hline 88 \end{array}$$



3.
$$\begin{array}{r} \boxed{4} \\ \times 5 \\ \hline 20 \end{array}$$



4.
$$\begin{array}{r} 6 \\ \times 4 \\ \hline 24 \end{array}$$



5.
$$\begin{array}{r} \boxed{2} \\ \times 10 \\ \hline 20 \end{array}$$



6.
$$\begin{array}{r} 5 \\ \times 11 \\ \hline 55 \end{array}$$



7.
$$\begin{array}{r} 12 \\ \times \boxed{9} \\ \hline 108 \end{array}$$



8.
$$\begin{array}{r} 6 \\ \times 7 \\ \hline 42 \end{array}$$



9.
$$\begin{array}{r} 4 \\ \times 7 \\ \hline 28 \end{array}$$



10.
$$\begin{array}{r} 2 \\ \times 6 \\ \hline 12 \end{array}$$



11.
$$\begin{array}{r} \boxed{7} \\ \times 8 \\ \hline 56 \end{array}$$



12.
$$\begin{array}{r} 7 \\ \times 12 \\ \hline 84 \end{array}$$



13.
$$\begin{array}{r} 12 \\ \times 4 \\ \hline 48 \end{array}$$



14.
$$\begin{array}{r} 2 \\ \times 12 \\ \hline 24 \end{array}$$



15.
$$\begin{array}{r} \boxed{8} \\ \times 3 \\ \hline 24 \end{array}$$



16.
$$\begin{array}{r} 7 \\ \times 4 \\ \hline 28 \end{array}$$



17.
$$\begin{array}{r} 7 \\ \times 11 \\ \hline 77 \end{array}$$



18.
$$\begin{array}{r} 9 \\ \times 4 \\ \hline 36 \end{array}$$



19.
$$\begin{array}{r} 2 \\ \times 11 \\ \hline 22 \end{array}$$



20.
$$\begin{array}{r} 4 \\ \times 6 \\ \hline 24 \end{array}$$



DIGITOS FANTASMAS, MULTIPLICACION (C)

Nombre: _____

Fecha: _____

Puntuación: _____

Reemplace los dígitos que han desaparecido misteriosamente.

1.
$$\begin{array}{r} 12 \\ \times \square \\ \hline 60 \end{array}$$



2.
$$\begin{array}{r} 3 \\ \times \square \\ \hline 6 \end{array}$$



3.
$$\begin{array}{r} 11 \\ \times \square \\ \hline 66 \end{array}$$



4.
$$\begin{array}{r} 10 \\ \times \square \\ \hline 20 \end{array}$$



5.
$$\begin{array}{r} 8 \\ \times 2 \\ \hline 1\square \end{array}$$



6.
$$\begin{array}{r} 12 \\ \times 1\square \\ \hline \square 20 \end{array}$$



7.
$$\begin{array}{r} \square \\ \times 7 \\ \hline 28 \end{array}$$



8.
$$\begin{array}{r} \square \\ \times 4 \\ \hline 32 \end{array}$$



9.
$$\begin{array}{r} \square \\ \times 8 \\ \hline 24 \end{array}$$



10.
$$\begin{array}{r} 5 \\ \times \square \\ \hline 30 \end{array}$$



11.
$$\begin{array}{r} 10 \\ \times 10 \\ \hline \square 0 \square \end{array}$$



12.
$$\begin{array}{r} 11 \\ \times 1\square \\ \hline \square 21 \end{array}$$



13.
$$\begin{array}{r} 8 \\ \times \square \\ \hline 40 \end{array}$$



14.
$$\begin{array}{r} 2 \\ \times 11 \\ \hline 2\square \end{array}$$



15.
$$\begin{array}{r} 4 \\ \times \square \\ \hline 32 \end{array}$$



16.
$$\begin{array}{r} 11 \\ \times 6 \\ \hline 6\square \end{array}$$



17.
$$\begin{array}{r} 6 \\ \times 12 \\ \hline 7\square \end{array}$$




18.
$$\begin{array}{r} 8 \\ \times 4 \\ \hline 3\square \end{array}$$



19.
$$\begin{array}{r} 1\square \\ \times 4 \\ \hline 44 \end{array}$$



20.
$$\begin{array}{r} 1\square \\ \times 2 \\ \hline 24 \end{array}$$



DIGITOS FANTASMAS, MULTIPLICACION (C) RESPUESTAS

Nombre: _____

Fecha: _____

Puntuación: _____

Reemplace los dígitos que han desaparecido misteriosamente.

1.
$$\begin{array}{r} 12 \\ \times 5 \\ \hline 60 \end{array}$$



2.
$$\begin{array}{r} 3 \\ \times 2 \\ \hline 6 \end{array}$$



3.
$$\begin{array}{r} 11 \\ \times 6 \\ \hline 66 \end{array}$$



4.
$$\begin{array}{r} 10 \\ \times 2 \\ \hline 20 \end{array}$$



5.
$$\begin{array}{r} 8 \\ \times 2 \\ \hline 16 \end{array}$$



6.
$$\begin{array}{r} 12 \\ \times 10 \\ \hline 120 \end{array}$$



7.
$$\begin{array}{r} 4 \\ \times 7 \\ \hline 28 \end{array}$$



8.
$$\begin{array}{r} 8 \\ \times 4 \\ \hline 32 \end{array}$$



9.
$$\begin{array}{r} 3 \\ \times 8 \\ \hline 24 \end{array}$$



10.
$$\begin{array}{r} 5 \\ \times 6 \\ \hline 30 \end{array}$$



11.
$$\begin{array}{r} 10 \\ \times 10 \\ \hline 100 \end{array}$$



12.
$$\begin{array}{r} 11 \\ \times 11 \\ \hline 121 \end{array}$$



13.
$$\begin{array}{r} 8 \\ \times 5 \\ \hline 40 \end{array}$$



14.
$$\begin{array}{r} 2 \\ \times 11 \\ \hline 22 \end{array}$$



15.
$$\begin{array}{r} 4 \\ \times 8 \\ \hline 32 \end{array}$$



16.
$$\begin{array}{r} 11 \\ \times 6 \\ \hline 66 \end{array}$$



17.
$$\begin{array}{r} 6 \\ \times 12 \\ \hline 72 \end{array}$$




18.
$$\begin{array}{r} 8 \\ \times 4 \\ \hline 32 \end{array}$$



19.
$$\begin{array}{r} 11 \\ \times 4 \\ \hline 44 \end{array}$$



20.
$$\begin{array}{r} 12 \\ \times 2 \\ \hline 24 \end{array}$$



DIGITOS FANTASMAS, MULTIPLICACION (D)

Nombre: _____

Fecha: _____

Puntuación: _____

Reemplace los dígitos que han desaparecido misteriosamente.

1.
$$\begin{array}{r} 4 \\ \times 8 \\ \hline 3 \square \end{array}$$



2.
$$\begin{array}{r} 2 \\ \times \square \\ \hline 6 \end{array}$$



3.
$$\begin{array}{r} 6 \\ \times 12 \\ \hline 7 \square \end{array}$$



4.
$$\begin{array}{r} 1 \square \\ \times 6 \\ \hline 66 \end{array}$$



5.
$$\begin{array}{r} \square \\ \times 2 \\ \hline 12 \end{array}$$



6.
$$\begin{array}{r} \square \\ \times 5 \\ \hline 15 \end{array}$$



7.
$$\begin{array}{r} 4 \\ \times 6 \\ \hline 2 \square \end{array}$$



8.
$$\begin{array}{r} 9 \\ \times \square \\ \hline 45 \end{array}$$



9.
$$\begin{array}{r} 5 \\ \times 10 \\ \hline 5 \square \end{array}$$



10.
$$\begin{array}{r} 12 \\ \times 7 \\ \hline 8 \square \end{array}$$



11.
$$\begin{array}{r} 3 \\ \times 1 \square \\ \hline 30 \end{array}$$



12.
$$\begin{array}{r} 7 \\ \times 10 \\ \hline 7 \square \end{array}$$



13.
$$\begin{array}{r} 10 \\ \times \square \\ \hline 50 \end{array}$$



14.
$$\begin{array}{r} 8 \\ \times 7 \\ \hline 5 \square \end{array}$$



15.
$$\begin{array}{r} 1 \square \\ \times 7 \\ \hline 70 \end{array}$$



16.
$$\begin{array}{r} 11 \\ \times 8 \\ \hline 8 \square \end{array}$$



17.
$$\begin{array}{r} \square \\ \times 5 \\ \hline 35 \end{array}$$



18.
$$\begin{array}{r} 11 \\ \times 1 \square \\ \hline \square 10 \end{array}$$



19.
$$\begin{array}{r} 6 \\ \times 10 \\ \hline 6 \square \end{array}$$



20.
$$\begin{array}{r} 9 \\ \times \square \\ \hline 81 \end{array}$$



DIGITOS FANTASMAS, MULTIPLICACION (D) RESPUESTAS

Nombre: _____

Fecha: _____

Puntuación: _____

Reemplace los dígitos que han desaparecido misteriosamente.

1.
$$\begin{array}{r} 4 \\ \times 8 \\ \hline 3 \square \end{array}$$



2.
$$\begin{array}{r} 2 \\ \times \square 3 \\ \hline 6 \end{array}$$



3.
$$\begin{array}{r} 6 \\ \times 12 \\ \hline 7 \square \end{array}$$



4.
$$\begin{array}{r} 1 \square \\ \times 6 \\ \hline 66 \end{array}$$



5.
$$\begin{array}{r} \square 6 \\ \times 2 \\ \hline 12 \end{array}$$



6.
$$\begin{array}{r} \square 3 \\ \times 5 \\ \hline 15 \end{array}$$



7.
$$\begin{array}{r} 4 \\ \times 6 \\ \hline 2 \square \end{array}$$



8.
$$\begin{array}{r} 9 \\ \times \square 5 \\ \hline 45 \end{array}$$



9.
$$\begin{array}{r} 5 \\ \times 10 \\ \hline 5 \square \end{array}$$



10.
$$\begin{array}{r} 12 \\ \times 7 \\ \hline 8 \square \end{array}$$



11.
$$\begin{array}{r} 3 \\ \times 1 \square \\ \hline 30 \end{array}$$



12.
$$\begin{array}{r} 7 \\ \times 10 \\ \hline 7 \square \end{array}$$



13.
$$\begin{array}{r} 10 \\ \times \square 5 \\ \hline 50 \end{array}$$



14.
$$\begin{array}{r} 8 \\ \times 7 \\ \hline 5 \square \end{array}$$



15.
$$\begin{array}{r} 1 \square \\ \times 7 \\ \hline 70 \end{array}$$



16.
$$\begin{array}{r} 11 \\ \times 8 \\ \hline 8 \square \end{array}$$



17.
$$\begin{array}{r} \square 7 \\ \times 5 \\ \hline 35 \end{array}$$



18.
$$\begin{array}{r} 11 \\ \times 1 \square \\ \hline \square 10 \end{array}$$



19.
$$\begin{array}{r} 6 \\ \times 10 \\ \hline 6 \square \end{array}$$



20.
$$\begin{array}{r} 9 \\ \times \square 9 \\ \hline 81 \end{array}$$



DIGITOS FANTASMAS, MULTIPLICACION (E)

Nombre: _____

Fecha: _____

Puntuación: _____

Reemplace los dígitos que han desaparecido misteriosamente.

1.
$$\begin{array}{r} 9 \\ \times 12 \\ \hline \square 0 \square \end{array}$$



2.
$$\begin{array}{r} 6 \\ \times 1\square \\ \hline 60 \end{array}$$



3.
$$\begin{array}{r} 7 \\ \times 7 \\ \hline 4\square \end{array}$$



4.
$$\begin{array}{r} 2 \\ \times \square \\ \hline 12 \end{array}$$



5.
$$\begin{array}{r} \square \\ \times 9 \\ \hline 81 \end{array}$$



6.
$$\begin{array}{r} 4 \\ \times \square \\ \hline 24 \end{array}$$



7.
$$\begin{array}{r} 10 \\ \times 7 \\ \hline 7\square \end{array}$$



8.
$$\begin{array}{r} 6 \\ \times 1\square \\ \hline 72 \end{array}$$



9.
$$\begin{array}{r} \square \\ \times 7 \\ \hline 21 \end{array}$$



10.
$$\begin{array}{r} 12 \\ \times 2 \\ \hline 2\square \end{array}$$



11.
$$\begin{array}{r} \square \\ \times 2 \\ \hline 18 \end{array}$$



12.
$$\begin{array}{r} 5 \\ \times 2 \\ \hline 1\square \end{array}$$



13.
$$\begin{array}{r} \square \\ \times 7 \\ \hline 21 \end{array}$$



14.
$$\begin{array}{r} 4 \\ \times 1\square \\ \hline 44 \end{array}$$



15.
$$\begin{array}{r} 5 \\ \times 11 \\ \hline 5\square \end{array}$$



16.
$$\begin{array}{r} 9 \\ \times 1\square \\ \hline 99 \end{array}$$



17.
$$\begin{array}{r} 6 \\ \times 8 \\ \hline 4\square \end{array}$$



18.
$$\begin{array}{r} \square \\ \times 8 \\ \hline 72 \end{array}$$



19.
$$\begin{array}{r} 4 \\ \times 1\square \\ \hline 40 \end{array}$$



20.
$$\begin{array}{r} 3 \\ \times \square \\ \hline 9 \end{array}$$



DIGITOS FANTASMAS, MULTIPLICACION (E) RESPUESTAS

Nombre: _____

Fecha: _____

Puntuación: _____

Reemplace los dígitos que han desaparecido misteriosamente.

1.
$$\begin{array}{r} 9 \\ \times 12 \\ \hline 108 \end{array}$$



2.
$$\begin{array}{r} 6 \\ \times 10 \\ \hline 60 \end{array}$$



3.
$$\begin{array}{r} 7 \\ \times 7 \\ \hline 49 \end{array}$$



4.
$$\begin{array}{r} 2 \\ \times 6 \\ \hline 12 \end{array}$$



5.
$$\begin{array}{r} 9 \\ \times 9 \\ \hline 81 \end{array}$$



6.
$$\begin{array}{r} 4 \\ \times 6 \\ \hline 24 \end{array}$$



7.
$$\begin{array}{r} 10 \\ \times 7 \\ \hline 70 \end{array}$$



8.
$$\begin{array}{r} 6 \\ \times 12 \\ \hline 72 \end{array}$$



9.
$$\begin{array}{r} 3 \\ \times 7 \\ \hline 21 \end{array}$$



10.
$$\begin{array}{r} 12 \\ \times 2 \\ \hline 24 \end{array}$$



11.
$$\begin{array}{r} 9 \\ \times 2 \\ \hline 18 \end{array}$$



12.
$$\begin{array}{r} 5 \\ \times 2 \\ \hline 10 \end{array}$$




13.
$$\begin{array}{r} 3 \\ \times 7 \\ \hline 21 \end{array}$$



14.
$$\begin{array}{r} 4 \\ \times 11 \\ \hline 44 \end{array}$$



15.
$$\begin{array}{r} 5 \\ \times 11 \\ \hline 55 \end{array}$$



16.
$$\begin{array}{r} 9 \\ \times 11 \\ \hline 99 \end{array}$$



17.
$$\begin{array}{r} 6 \\ \times 8 \\ \hline 48 \end{array}$$



18.
$$\begin{array}{r} 9 \\ \times 8 \\ \hline 72 \end{array}$$



19.
$$\begin{array}{r} 4 \\ \times 10 \\ \hline 40 \end{array}$$



20.
$$\begin{array}{r} 3 \\ \times 3 \\ \hline 9 \end{array}$$



DIGITOS FANTASMAS, MULTIPLICACION (F)

Nombre: _____

Fecha: _____

Puntuación: _____

Reemplace los dígitos que han desaparecido misteriosamente.

1.
$$\begin{array}{r} \square \\ \times 3 \\ \hline 21 \end{array}$$



2.
$$\begin{array}{r} \square \\ \times 7 \\ \hline 28 \end{array}$$



3.
$$\begin{array}{r} 4 \\ \times 1\square \\ \hline 48 \end{array}$$



4.
$$\begin{array}{r} 4 \\ \times 6 \\ \hline 2\square \end{array}$$



5.
$$\begin{array}{r} 7 \\ \times \square \\ \hline 21 \end{array}$$



6.
$$\begin{array}{r} 8 \\ \times \square \\ \hline 16 \end{array}$$



7.
$$\begin{array}{r} 6 \\ \times \square \\ \hline 48 \end{array}$$



8.
$$\begin{array}{r} \square \\ \times 8 \\ \hline 48 \end{array}$$



9.
$$\begin{array}{r} 3 \\ \times 1\square \\ \hline 30 \end{array}$$




10.
$$\begin{array}{r} 11 \\ \times 12 \\ \hline \square 3 \square \end{array}$$



11.
$$\begin{array}{r} 5 \\ \times 6 \\ \hline 3\square \end{array}$$



12.
$$\begin{array}{r} \square \\ \times 4 \\ \hline 8 \end{array}$$



13.
$$\begin{array}{r} 6 \\ \times \square \\ \hline 18 \end{array}$$



14.
$$\begin{array}{r} 3 \\ \times 4 \\ \hline 1\square \end{array}$$



15.
$$\begin{array}{r} 3 \\ \times 6 \\ \hline 1\square \end{array}$$



16.
$$\begin{array}{r} \square \\ \times 6 \\ \hline 36 \end{array}$$



17.
$$\begin{array}{r} 1\square \\ \times 4 \\ \hline 44 \end{array}$$



18.
$$\begin{array}{r} 1\square \\ \times 9 \\ \hline 99 \end{array}$$



19.
$$\begin{array}{r} 1\square \\ \times 12 \\ \hline \square 20 \end{array}$$



20.
$$\begin{array}{r} 5 \\ \times 6 \\ \hline 3\square \end{array}$$



DIGITOS FANTASMAS, MULTIPLICACION (F) RESPUESTAS

Nombre: _____

Fecha: _____

Puntuación: _____

Reemplace los dígitos que han desaparecido misteriosamente.

1.
$$\begin{array}{r} 7 \\ \times 3 \\ \hline 21 \end{array}$$



2.
$$\begin{array}{r} 4 \\ \times 7 \\ \hline 28 \end{array}$$



3.
$$\begin{array}{r} 4 \\ \times 12 \\ \hline 48 \end{array}$$



4.
$$\begin{array}{r} 4 \\ \times 6 \\ \hline 24 \end{array}$$



5.
$$\begin{array}{r} 7 \\ \times 3 \\ \hline 21 \end{array}$$



6.
$$\begin{array}{r} 8 \\ \times 2 \\ \hline 16 \end{array}$$



7.
$$\begin{array}{r} 6 \\ \times 8 \\ \hline 48 \end{array}$$



8.
$$\begin{array}{r} 6 \\ \times 8 \\ \hline 48 \end{array}$$



9.
$$\begin{array}{r} 3 \\ \times 10 \\ \hline 30 \end{array}$$



10.
$$\begin{array}{r} 11 \\ \times 12 \\ \hline 132 \end{array}$$



11.
$$\begin{array}{r} 5 \\ \times 6 \\ \hline 30 \end{array}$$



12.
$$\begin{array}{r} 2 \\ \times 4 \\ \hline 8 \end{array}$$



13.
$$\begin{array}{r} 6 \\ \times 3 \\ \hline 18 \end{array}$$



14.
$$\begin{array}{r} 3 \\ \times 4 \\ \hline 12 \end{array}$$



15.
$$\begin{array}{r} 3 \\ \times 6 \\ \hline 18 \end{array}$$



16.
$$\begin{array}{r} 6 \\ \times 6 \\ \hline 36 \end{array}$$



17.
$$\begin{array}{r} 11 \\ \times 4 \\ \hline 44 \end{array}$$



18.
$$\begin{array}{r} 11 \\ \times 9 \\ \hline 99 \end{array}$$



19.
$$\begin{array}{r} 10 \\ \times 12 \\ \hline 120 \end{array}$$



20.
$$\begin{array}{r} 5 \\ \times 6 \\ \hline 30 \end{array}$$



DIGITOS FANTASMAS, MULTIPLICACION (Q)

Nombre: _____

Fecha: _____

Puntuación: _____

Reemplace los dígitos que han desaparecido misteriosamente.

1.
$$\begin{array}{r} 7 \\ \times 10 \\ \hline 7 \square \end{array}$$



2.
$$\begin{array}{r} 8 \\ \times 7 \\ \hline 5 \square \end{array}$$



3.
$$\begin{array}{r} 1 \square \\ \times 9 \\ \hline 99 \end{array}$$



4.
$$\begin{array}{r} 6 \\ \times 11 \\ \hline 6 \square \end{array}$$



5.
$$\begin{array}{r} 8 \\ \times 1 \square \\ \hline 96 \end{array}$$



6.
$$\begin{array}{r} 4 \\ \times \square \\ \hline 12 \end{array}$$



7.
$$\begin{array}{r} 8 \\ \times \square \\ \hline 56 \end{array}$$



8.
$$\begin{array}{r} 8 \\ \times 6 \\ \hline 4 \square \end{array}$$



9.
$$\begin{array}{r} \square \\ \times 3 \\ \hline 24 \end{array}$$



10.
$$\begin{array}{r} \square \\ \times 9 \\ \hline 45 \end{array}$$



11.
$$\begin{array}{r} 11 \\ \times 6 \\ \hline 6 \square \end{array}$$



12.
$$\begin{array}{r} 3 \\ \times 7 \\ \hline 2 \square \end{array}$$



13.
$$\begin{array}{r} 11 \\ \times 6 \\ \hline 6 \square \end{array}$$



14.
$$\begin{array}{r} \square \\ \times 5 \\ \hline 40 \end{array}$$



15.
$$\begin{array}{r} 5 \\ \times 10 \\ \hline 5 \square \end{array}$$



16.
$$\begin{array}{r} \square \\ \times 12 \\ \hline \square 08 \end{array}$$



17.
$$\begin{array}{r} \square \\ \times 3 \\ \hline 9 \end{array}$$



18.
$$\begin{array}{r} \square \\ \times 11 \\ \hline 33 \end{array}$$



19.
$$\begin{array}{r} 10 \\ \times 6 \\ \hline 6 \square \end{array}$$



20.
$$\begin{array}{r} 9 \\ \times 7 \\ \hline 6 \square \end{array}$$



DIGITOS FANTASMAS, MULTIPLICACION (9) RESPUESTAS

Nombre: _____

Fecha: _____

Puntuación: _____

Reemplace los dígitos que han desaparecido misteriosamente.

1.
$$\begin{array}{r} 7 \\ \times 10 \\ \hline 70 \end{array}$$



2.
$$\begin{array}{r} 8 \\ \times 7 \\ \hline 56 \end{array}$$



3.
$$\begin{array}{r} 11 \\ \times 9 \\ \hline 99 \end{array}$$



4.
$$\begin{array}{r} 6 \\ \times 11 \\ \hline 66 \end{array}$$



5.
$$\begin{array}{r} 8 \\ \times 12 \\ \hline 96 \end{array}$$



6.
$$\begin{array}{r} 4 \\ \times 3 \\ \hline 12 \end{array}$$



7.
$$\begin{array}{r} 8 \\ \times 7 \\ \hline 56 \end{array}$$



8.
$$\begin{array}{r} 8 \\ \times 6 \\ \hline 48 \end{array}$$



9.
$$\begin{array}{r} 8 \\ \times 3 \\ \hline 24 \end{array}$$



10.
$$\begin{array}{r} 5 \\ \times 9 \\ \hline 45 \end{array}$$



11.
$$\begin{array}{r} 11 \\ \times 6 \\ \hline 66 \end{array}$$



12.
$$\begin{array}{r} 3 \\ \times 7 \\ \hline 21 \end{array}$$



13.
$$\begin{array}{r} 11 \\ \times 6 \\ \hline 66 \end{array}$$



14.
$$\begin{array}{r} 8 \\ \times 5 \\ \hline 40 \end{array}$$



15.
$$\begin{array}{r} 5 \\ \times 10 \\ \hline 50 \end{array}$$



16.
$$\begin{array}{r} 9 \\ \times 12 \\ \hline 108 \end{array}$$



17.
$$\begin{array}{r} 3 \\ \times 3 \\ \hline 9 \end{array}$$



18.
$$\begin{array}{r} 3 \\ \times 11 \\ \hline 33 \end{array}$$



19.
$$\begin{array}{r} 10 \\ \times 6 \\ \hline 60 \end{array}$$



20.
$$\begin{array}{r} 9 \\ \times 7 \\ \hline 63 \end{array}$$



DIGITOS FANTASMAS, MULTIPLICACION (H)

Nombre: _____

Fecha: _____

Puntuación: _____

Reemplace los digitos que han desaparecido misteriosamente.

1.
$$\begin{array}{r} \square \\ \times 6 \\ \hline 12 \end{array}$$



2.
$$\begin{array}{r} 4 \\ \times 7 \\ \hline 2\square \end{array}$$



3.
$$\begin{array}{r} 12 \\ \times 1\square \\ \hline \square 20 \end{array}$$



4.
$$\begin{array}{r} 2 \\ \times 8 \\ \hline 1\square \end{array}$$



5.
$$\begin{array}{r} 9 \\ \times 4 \\ \hline 3\square \end{array}$$



6.
$$\begin{array}{r} 4 \\ \times \square \\ \hline 24 \end{array}$$



7.
$$\begin{array}{r} 11 \\ \times 9 \\ \hline 9\square \end{array}$$



8.
$$\begin{array}{r} 12 \\ \times 7 \\ \hline 8\square \end{array}$$



9.
$$\begin{array}{r} \square \\ \times 10 \\ \hline 90 \end{array}$$



10.
$$\begin{array}{r} \square \\ \times 4 \\ \hline 32 \end{array}$$



11.
$$\begin{array}{r} 9 \\ \times 7 \\ \hline 6\square \end{array}$$



12.
$$\begin{array}{r} 12 \\ \times 7 \\ \hline 8\square \end{array}$$



13.
$$\begin{array}{r} 4 \\ \times 7 \\ \hline 2\square \end{array}$$



14.
$$\begin{array}{r} 7 \\ \times 12 \\ \hline 8\square \end{array}$$



15.
$$\begin{array}{r} \square \\ \times 9 \\ \hline 27 \end{array}$$



16.
$$\begin{array}{r} 4 \\ \times 1\square \\ \hline 48 \end{array}$$



17.
$$\begin{array}{r} 11 \\ \times 7 \\ \hline 7\square \end{array}$$



18.
$$\begin{array}{r} 7 \\ \times \square \\ \hline 56 \end{array}$$



19.
$$\begin{array}{r} 1\square \\ \times 6 \\ \hline 72 \end{array}$$



20.
$$\begin{array}{r} 3 \\ \times \square \\ \hline 12 \end{array}$$



DIGITOS FANTASMAS, MULTIPLICACION (H) RESPUESTAS

Nombre: _____

Fecha: _____

Puntuación: _____

Reemplace los dígitos que han desaparecido misteriosamente.

1.
$$\begin{array}{r} 2 \\ \times 6 \\ \hline 12 \end{array}$$



2.
$$\begin{array}{r} 4 \\ \times 7 \\ \hline 28 \end{array}$$



3.
$$\begin{array}{r} 12 \\ \times 10 \\ \hline 120 \end{array}$$



4.
$$\begin{array}{r} 2 \\ \times 8 \\ \hline 16 \end{array}$$



5.
$$\begin{array}{r} 9 \\ \times 4 \\ \hline 36 \end{array}$$



6.
$$\begin{array}{r} 4 \\ \times 6 \\ \hline 24 \end{array}$$



7.
$$\begin{array}{r} 11 \\ \times 9 \\ \hline 99 \end{array}$$



8.
$$\begin{array}{r} 12 \\ \times 7 \\ \hline 84 \end{array}$$



9.
$$\begin{array}{r} 9 \\ \times 10 \\ \hline 90 \end{array}$$



10.
$$\begin{array}{r} 8 \\ \times 4 \\ \hline 32 \end{array}$$



11.
$$\begin{array}{r} 9 \\ \times 7 \\ \hline 63 \end{array}$$



12.
$$\begin{array}{r} 12 \\ \times 7 \\ \hline 84 \end{array}$$



13.
$$\begin{array}{r} 4 \\ \times 7 \\ \hline 28 \end{array}$$



14.
$$\begin{array}{r} 7 \\ \times 12 \\ \hline 84 \end{array}$$



15.
$$\begin{array}{r} 3 \\ \times 9 \\ \hline 27 \end{array}$$



16.
$$\begin{array}{r} 4 \\ \times 12 \\ \hline 48 \end{array}$$



17.
$$\begin{array}{r} 11 \\ \times 7 \\ \hline 77 \end{array}$$



18.
$$\begin{array}{r} 7 \\ \times 8 \\ \hline 56 \end{array}$$



19.
$$\begin{array}{r} 12 \\ \times 6 \\ \hline 72 \end{array}$$



20.
$$\begin{array}{r} 3 \\ \times 4 \\ \hline 12 \end{array}$$



DIGITOS FANTASMAS, MULTIPLICACION (1)

Nombre: _____

Fecha: _____

Puntuación: _____

Reemplace los dígitos que han desaparecido misteriosamente.

1.
$$\begin{array}{r} \square \\ \times 2 \\ \hline 6 \end{array}$$



2.
$$\begin{array}{r} 10 \\ \times 1\square \\ \hline \square 10 \end{array}$$



3.
$$\begin{array}{r} 4 \\ \times 4 \\ \hline 1\square \end{array}$$



4.
$$\begin{array}{r} 1\square \\ \times 9 \\ \hline 99 \end{array}$$



5.
$$\begin{array}{r} 9 \\ \times 8 \\ \hline 7\square \end{array}$$



6.
$$\begin{array}{r} 4 \\ \times \square \\ \hline 24 \end{array}$$



7.
$$\begin{array}{r} \square \\ \times 5 \\ \hline 30 \end{array}$$



8.
$$\begin{array}{r} 6 \\ \times \square \\ \hline 18 \end{array}$$



9.
$$\begin{array}{r} \square \\ \times 12 \\ \hline 36 \end{array}$$



10.
$$\begin{array}{r} 1\square \\ \times 2 \\ \hline 20 \end{array}$$



11.
$$\begin{array}{r} \square \\ \times 6 \\ \hline 12 \end{array}$$



12.
$$\begin{array}{r} 5 \\ \times 1\square \\ \hline 55 \end{array}$$



13.
$$\begin{array}{r} 8 \\ \times \square \\ \hline 24 \end{array}$$



14.
$$\begin{array}{r} 9 \\ \times 3 \\ \hline 2\square \end{array}$$



15.
$$\begin{array}{r} \square \\ \times 4 \\ \hline 20 \end{array}$$



16.
$$\begin{array}{r} 11 \\ \times 1\square \\ \hline \square 10 \end{array}$$



17.
$$\begin{array}{r} \square \\ \times 9 \\ \hline 27 \end{array}$$



18.
$$\begin{array}{r} 12 \\ \times 1\square \\ \hline \square 32 \end{array}$$



19.
$$\begin{array}{r} 5 \\ \times 1\square \\ \hline 60 \end{array}$$



20.
$$\begin{array}{r} 6 \\ \times \square \\ \hline 18 \end{array}$$



DIGITOS FANTASMAS, MULTIPLICACION (1) RESPUESTAS

Nombre: _____

Fecha: _____

Puntuación: _____

Reemplace los dígitos que han desaparecido misteriosamente.

1.
$$\begin{array}{r} \boxed{3} \\ \times 2 \\ \hline 6 \end{array}$$



2.
$$\begin{array}{r} 10 \\ \times 1\boxed{1} \\ \hline \boxed{1}10 \end{array}$$



3.
$$\begin{array}{r} 4 \\ \times 4 \\ \hline 1\boxed{6} \end{array}$$



4.
$$\begin{array}{r} 1\boxed{1} \\ \times 9 \\ \hline 99 \end{array}$$



5.
$$\begin{array}{r} 9 \\ \times 8 \\ \hline 7\boxed{2} \end{array}$$



6.
$$\begin{array}{r} 4 \\ \times \boxed{6} \\ \hline 24 \end{array}$$



7.
$$\begin{array}{r} \boxed{6} \\ \times 5 \\ \hline 30 \end{array}$$



8.
$$\begin{array}{r} 6 \\ \times \boxed{3} \\ \hline 18 \end{array}$$



9.
$$\begin{array}{r} \boxed{3} \\ \times 12 \\ \hline 36 \end{array}$$



10.
$$\begin{array}{r} 1\boxed{0} \\ \times 2 \\ \hline 20 \end{array}$$



11.
$$\begin{array}{r} \boxed{2} \\ \times 6 \\ \hline 12 \end{array}$$



12.
$$\begin{array}{r} 5 \\ \times 1\boxed{1} \\ \hline 55 \end{array}$$



13.
$$\begin{array}{r} 8 \\ \times \boxed{3} \\ \hline 24 \end{array}$$



14.
$$\begin{array}{r} 9 \\ \times 3 \\ \hline 2\boxed{7} \end{array}$$



15.
$$\begin{array}{r} \boxed{5} \\ \times 4 \\ \hline 20 \end{array}$$



16.
$$\begin{array}{r} 11 \\ \times 1\boxed{0} \\ \hline \boxed{1}10 \end{array}$$



17.
$$\begin{array}{r} \boxed{3} \\ \times 9 \\ \hline 27 \end{array}$$



18.
$$\begin{array}{r} 12 \\ \times 1\boxed{1} \\ \hline \boxed{1}32 \end{array}$$



19.
$$\begin{array}{r} 5 \\ \times 1\boxed{2} \\ \hline 60 \end{array}$$



20.
$$\begin{array}{r} 6 \\ \times \boxed{3} \\ \hline 18 \end{array}$$



DIGITOS FANTASMAS, MULTIPLICACION (J)

Nombre: _____

Fecha: _____

Puntuación: _____

Reemplace los dígitos que han desaparecido misteriosamente.

1.
$$\begin{array}{r} \square \\ \times 7 \\ \hline 63 \end{array}$$



2.
$$\begin{array}{r} 11 \\ \times 1\square \\ \hline \square 32 \end{array}$$



3.
$$\begin{array}{r} 3 \\ \times 2 \\ \hline \square \end{array}$$



4.
$$\begin{array}{r} 10 \\ \times 5 \\ \hline 5\square \end{array}$$



5.
$$\begin{array}{r} 1\square \\ \times 10 \\ \hline \square 20 \end{array}$$



6.
$$\begin{array}{r} \square \\ \times 8 \\ \hline 72 \end{array}$$



7.
$$\begin{array}{r} 10 \\ \times 7 \\ \hline 7\square \end{array}$$



8.
$$\begin{array}{r} 3 \\ \times 2 \\ \hline \square \end{array}$$



9.
$$\begin{array}{r} 2 \\ \times 4 \\ \hline \square \end{array}$$



10.
$$\begin{array}{r} 6 \\ \times \square \\ \hline 48 \end{array}$$



11.
$$\begin{array}{r} \square \\ \times 11 \\ \hline 22 \end{array}$$



12.
$$\begin{array}{r} 7 \\ \times 10 \\ \hline 7\square \end{array}$$



13.
$$\begin{array}{r} 10 \\ \times \square \\ \hline 80 \end{array}$$



14.
$$\begin{array}{r} 6 \\ \times \square \\ \hline 42 \end{array}$$



15.
$$\begin{array}{r} 4 \\ \times \square \\ \hline 36 \end{array}$$



16.
$$\begin{array}{r} 6 \\ \times 6 \\ \hline 3\square \end{array}$$



17.
$$\begin{array}{r} 5 \\ \times 5 \\ \hline 2\square \end{array}$$



18.
$$\begin{array}{r} 3 \\ \times \square \\ \hline 12 \end{array}$$



19.
$$\begin{array}{r} 6 \\ \times 10 \\ \hline 6\square \end{array}$$



20.
$$\begin{array}{r} \square \\ \times 9 \\ \hline 36 \end{array}$$



DIGITOS FANTASMAS, MULTIPLICACION (J) RESPUESTAS

Nombre: _____

Fecha: _____

Puntuación: _____

Reemplace los dígitos que han desaparecido misteriosamente.

1.
$$\begin{array}{r} 9 \\ \times 7 \\ \hline 63 \end{array}$$



2.
$$\begin{array}{r} 11 \\ \times 12 \\ \hline 132 \end{array}$$



3.
$$\begin{array}{r} 3 \\ \times 2 \\ \hline 6 \end{array}$$



4.
$$\begin{array}{r} 10 \\ \times 5 \\ \hline 50 \end{array}$$



5.
$$\begin{array}{r} 12 \\ \times 10 \\ \hline 120 \end{array}$$



6.
$$\begin{array}{r} 9 \\ \times 8 \\ \hline 72 \end{array}$$



7.
$$\begin{array}{r} 10 \\ \times 7 \\ \hline 70 \end{array}$$



8.
$$\begin{array}{r} 3 \\ \times 2 \\ \hline 6 \end{array}$$



9.
$$\begin{array}{r} 2 \\ \times 4 \\ \hline 8 \end{array}$$



10.
$$\begin{array}{r} 6 \\ \times 8 \\ \hline 48 \end{array}$$



11.
$$\begin{array}{r} 2 \\ \times 11 \\ \hline 22 \end{array}$$



12.
$$\begin{array}{r} 7 \\ \times 10 \\ \hline 70 \end{array}$$



13.
$$\begin{array}{r} 10 \\ \times 8 \\ \hline 80 \end{array}$$



14.
$$\begin{array}{r} 6 \\ \times 7 \\ \hline 42 \end{array}$$



15.
$$\begin{array}{r} 4 \\ \times 9 \\ \hline 36 \end{array}$$



16.
$$\begin{array}{r} 6 \\ \times 6 \\ \hline 36 \end{array}$$



17.
$$\begin{array}{r} 5 \\ \times 5 \\ \hline 25 \end{array}$$



18.
$$\begin{array}{r} 3 \\ \times 4 \\ \hline 12 \end{array}$$



19.
$$\begin{array}{r} 6 \\ \times 10 \\ \hline 60 \end{array}$$



20.
$$\begin{array}{r} 4 \\ \times 9 \\ \hline 36 \end{array}$$

