

# DIGITOS FANTASMAS, TODAS LAS OPERACIONES (A)

Nombre: \_\_\_\_\_

Fecha: \_\_\_\_\_

Puntuación: \_\_\_\_\_

Reemplace los dígitos que han desaparecido misteriosamente.

1. 
$$\begin{array}{r} \square \\ \times 11 \\ \hline 44 \end{array}$$



2. 
$$\begin{array}{r} \square 50 \square \\ - 708 \\ \hline \square \square 0 \end{array}$$



3. 
$$\begin{array}{r} 4 \square \square \\ + \square 66 \\ \hline \square 085 \end{array}$$



4. 
$$\begin{array}{r} 9 \\ 6 \overline{) 5 \square} \end{array}$$



5. 
$$\begin{array}{r} 3 \\ \square \overline{) 18} \end{array}$$



6. 
$$\begin{array}{r} 676 \\ + 7 \square 4 \\ \hline \square \square 7 \square \end{array}$$



7. 
$$\begin{array}{r} 8 \\ \times 5 \\ \hline 4 \square \end{array}$$



8. 
$$\begin{array}{r} \square 15 \square \\ - \square \square 9 \\ \hline 906 \end{array}$$



9. 
$$\begin{array}{r} \square 2 \square \square \\ - \square 74 \\ \hline 787 \end{array}$$



10. 
$$\begin{array}{r} 247 \\ + 2 \square 1 \\ \hline \square 5 \square \end{array}$$



11. 
$$\begin{array}{r} \square \square \square \\ + 94 \\ \hline 256 \end{array}$$



12. 
$$\begin{array}{r} 5 \\ 10 \overline{) 5 \square} \end{array}$$



13. 
$$\begin{array}{r} 2 \square 9 \\ + 18 \square \\ \hline \square 94 \end{array}$$



14. 
$$\begin{array}{r} 8 \\ \square \overline{) 32} \end{array}$$



15. 
$$\begin{array}{r} \square 82 \\ - 3 \square 8 \\ \hline 66 \square \end{array}$$



16. 
$$\begin{array}{r} 3 \\ \times 4 \\ \hline 1 \square \end{array}$$



17. 
$$\begin{array}{r} 68 \square \\ - 2 \square 5 \\ \hline \square 26 \end{array}$$



18. 
$$\begin{array}{r} \square \\ \times 7 \\ \hline 28 \end{array}$$



19. 
$$\begin{array}{r} \square \\ \times 10 \\ \hline 30 \end{array}$$



20. 
$$\begin{array}{r} \square \\ 6 \overline{) 18} \end{array}$$



# DIGITOS FANTASMAS, TODAS LAS OPERACIONES (A) RESPUESTAS

Nombre: \_\_\_\_\_

Fecha: \_\_\_\_\_

Puntuación: \_\_\_\_\_

Reemplace los dígitos que han desaparecido misteriosamente.

1. 
$$\begin{array}{r} \phantom{0}4 \\ \times 11 \\ \hline 44 \end{array}$$



2. 
$$\begin{array}{r} 1508 \\ - 708 \\ \hline 800 \end{array}$$



3. 
$$\begin{array}{r} 419 \\ + 666 \\ \hline 1085 \end{array}$$



4. 
$$\begin{array}{r} 9 \\ 6 \overline{) 54} \end{array}$$



5. 
$$\begin{array}{r} 3 \\ 6 \overline{) 18} \end{array}$$



6. 
$$\begin{array}{r} 676 \\ + 794 \\ \hline 1470 \end{array}$$



7. 
$$\begin{array}{r} 8 \\ \times 5 \\ \hline 40 \end{array}$$



8. 
$$\begin{array}{r} 1155 \\ - 249 \\ \hline 906 \end{array}$$



9. 
$$\begin{array}{r} 1261 \\ - 474 \\ \hline 787 \end{array}$$



10. 
$$\begin{array}{r} 247 \\ + 211 \\ \hline 458 \end{array}$$



11. 
$$\begin{array}{r} 162 \\ + 94 \\ \hline 256 \end{array}$$



12. 
$$\begin{array}{r} 5 \\ 10 \overline{) 50} \end{array}$$



13. 
$$\begin{array}{r} 209 \\ + 185 \\ \hline 394 \end{array}$$



14. 
$$\begin{array}{r} 8 \\ 4 \overline{) 32} \end{array}$$



15. 
$$\begin{array}{r} 982 \\ - 318 \\ \hline 664 \end{array}$$



16. 
$$\begin{array}{r} 3 \\ \times 4 \\ \hline 12 \end{array}$$



17. 
$$\begin{array}{r} 681 \\ - 255 \\ \hline 426 \end{array}$$



18. 
$$\begin{array}{r} 4 \\ \times 7 \\ \hline 28 \end{array}$$



19. 
$$\begin{array}{r} 3 \\ \times 10 \\ \hline 30 \end{array}$$



20. 
$$\begin{array}{r} 3 \\ 6 \overline{) 18} \end{array}$$



# DIGITOS FANTASMAS, TODAS LAS OPERACIONES (B)

Nombre: \_\_\_\_\_

Fecha: \_\_\_\_\_

Puntuación: \_\_\_\_\_

Reemplace los dígitos que han desaparecido misteriosamente.

1. 
$$\begin{array}{r} 986 \\ + \square\square \\ \hline \square\square56 \end{array}$$



2. 
$$\begin{array}{r} 8 \\ \square) 72 \end{array}$$



3. 
$$\begin{array}{r} 11 \\ \times \square \\ \hline 55 \end{array}$$



4. 
$$\begin{array}{r} 11 \\ \times 8 \\ \hline 8\square \end{array}$$



5. 
$$\begin{array}{r} \square \\ \times 8 \\ \hline 16 \end{array}$$



6. 
$$\begin{array}{r} \square48 \\ - 439 \\ \hline 5\square\square \end{array}$$



7. 
$$\begin{array}{r} 695 \\ + 3\square5 \\ \hline \square\square2\square \end{array}$$



8. 
$$\begin{array}{r} 7\square\square \\ + 433 \\ \hline \square\square25 \end{array}$$



9. 
$$\begin{array}{r} 52\square \\ + \square\square8 \\ \hline 810 \end{array}$$



10. 
$$\begin{array}{r} 5 \\ \times \square \\ \hline 15 \end{array}$$



11. 
$$\begin{array}{r} 42\square \\ - 1\square2 \\ \hline \square32 \end{array}$$



12. 
$$\begin{array}{r} 12 \\ \square) 36 \end{array}$$



13. 
$$\begin{array}{r} 3 \\ \square) 15 \end{array}$$



14. 
$$\begin{array}{r} \square457 \\ - \square7\square \\ \hline 7\square1 \end{array}$$



15. 
$$\begin{array}{r} 144 \\ + 6\square2 \\ \hline \square7\square \end{array}$$



16. 
$$\begin{array}{r} 5 \\ \square) 25 \end{array}$$



17. 
$$\begin{array}{r} \square20 \\ - 7\square\square \\ \hline 177 \end{array}$$



18. 
$$\begin{array}{r} 1\square \\ 3) 36 \end{array}$$



19. 
$$\begin{array}{r} \square0\square \\ - 221 \\ \hline 5\square5 \end{array}$$



20. 
$$\begin{array}{r} 10 \\ \times 1\square \\ \hline \square10 \end{array}$$



# DIGITOS FANTASMAS, TODAS LAS OPERACIONES (B) RESPUESTAS

Nombre: \_\_\_\_\_

Fecha: \_\_\_\_\_

Puntuación: \_\_\_\_\_

Reemplace los dígitos que han desaparecido misteriosamente.

1. 
$$\begin{array}{r} 986 \\ + \quad \boxed{7}\boxed{0} \\ \hline \boxed{1}\boxed{0}56 \end{array}$$



2. 
$$\begin{array}{r} 8 \\ \boxed{9} \overline{) 72} \end{array}$$



3. 
$$\begin{array}{r} 11 \\ \times \quad \boxed{5} \\ \hline 55 \end{array}$$



4. 
$$\begin{array}{r} 11 \\ \times \quad 8 \\ \hline 8\boxed{8} \end{array}$$



5. 
$$\begin{array}{r} \quad \boxed{2} \\ \times \quad 8 \\ \hline 16 \end{array}$$



6. 
$$\begin{array}{r} \boxed{9}48 \\ - 439 \\ \hline 5\boxed{0}\boxed{9} \end{array}$$



7. 
$$\begin{array}{r} 695 \\ + \quad 3\boxed{2}5 \\ \hline \boxed{1}\boxed{0}\boxed{2}\boxed{0} \end{array}$$



8. 
$$\begin{array}{r} 7\boxed{9}\boxed{2} \\ + \quad 433 \\ \hline \boxed{1}\boxed{2}\boxed{2}5 \end{array}$$



9. 
$$\begin{array}{r} 52\boxed{2} \\ + \quad \boxed{2}\boxed{8}8 \\ \hline 810 \end{array}$$



10. 
$$\begin{array}{r} 5 \\ \times \quad \boxed{3} \\ \hline 15 \end{array}$$



11. 
$$\begin{array}{r} 42\boxed{4} \\ - 1\boxed{9}2 \\ \hline \boxed{2}32 \end{array}$$



12. 
$$\begin{array}{r} 12 \\ \boxed{3} \overline{) 36} \end{array}$$



13. 
$$\begin{array}{r} 3 \\ \boxed{5} \overline{) 15} \end{array}$$



14. 
$$\begin{array}{r} \boxed{1}457 \\ - \quad \boxed{6}\boxed{7}\boxed{6} \\ \hline 7\boxed{8}1 \end{array}$$



15. 
$$\begin{array}{r} 144 \\ + \quad 6\boxed{3}2 \\ \hline \boxed{7}\boxed{7}\boxed{6} \end{array}$$



16. 
$$\begin{array}{r} 5 \\ \boxed{5} \overline{) 25} \end{array}$$



17. 
$$\begin{array}{r} \boxed{9}20 \\ - \quad 7\boxed{4}\boxed{3} \\ \hline 177 \end{array}$$



18. 
$$\begin{array}{r} 1\boxed{2} \\ 3 \overline{) 36} \end{array}$$



19. 
$$\begin{array}{r} \boxed{8}0\boxed{6} \\ - \quad 221 \\ \hline 5\boxed{8}5 \end{array}$$



20. 
$$\begin{array}{r} 10 \\ \times \quad 1\boxed{1} \\ \hline \boxed{1}10 \end{array}$$



# DIGITOS FANTASMAS, TODAS LAS OPERACIONES (0)

Nombre: \_\_\_\_\_

Fecha: \_\_\_\_\_

Puntuación: \_\_\_\_\_

Reemplace los dígitos que han desaparecido misteriosamente.

1. 
$$\begin{array}{r} 5 \square 4 \\ - \square 3 1 \\ \hline 3 8 \square \end{array}$$



2. 
$$\begin{array}{r} 3 \\ \times 1 2 \\ \hline 3 \square \end{array}$$



3. 
$$\begin{array}{r} 1 \square \\ 1 0 \overline{) \square 1 0} \end{array}$$



4. 
$$\begin{array}{r} 2 \\ 9 \overline{) 1 \square} \end{array}$$



5. 
$$\begin{array}{r} 8 \\ \times 8 \\ \hline 6 \square \end{array}$$



6. 
$$\begin{array}{r} 1 8 \square \\ + 2 0 4 \\ \hline \square \square 6 \end{array}$$



7. 
$$\begin{array}{r} \square 9 \square \square \\ - 9 8 5 \\ \hline \square 4 5 \end{array}$$



8. 
$$\begin{array}{r} \square 7 5 4 \\ - 9 6 6 \\ \hline \square \square \square \end{array}$$



9. 
$$\begin{array}{r} 8 4 \square \\ - \square \square 6 \\ \hline 5 7 8 \end{array}$$



10. 
$$\begin{array}{r} 9 2 1 \\ - \square \square 2 \\ \hline 5 1 \square \end{array}$$



11. 
$$\begin{array}{r} 5 \\ 1 0 \overline{) 5 \square} \end{array}$$



12. 
$$\begin{array}{r} 9 \\ \times \square \\ \hline 8 1 \end{array}$$



13. 
$$\begin{array}{r} 9 \\ \square \overline{) 6 3} \end{array}$$



14. 
$$\begin{array}{r} \square \\ \times 2 \\ \hline 8 \end{array}$$



15. 
$$\begin{array}{r} \square \square 5 \\ + 6 3 \square \\ \hline \square 5 9 3 \end{array}$$



16. 
$$\begin{array}{r} 8 1 \square \\ + \square \square 2 \\ \hline \square 5 7 6 \end{array}$$



17. 
$$\begin{array}{r} 1 2 \\ \times 1 2 \\ \hline \square 4 \square \end{array}$$



18. 
$$\begin{array}{r} 4 9 3 \\ + 6 \square 0 \\ \hline \square \square 7 \square \end{array}$$



19. 
$$\begin{array}{r} 4 \square 9 \\ + 1 0 \square \\ \hline \square 7 0 \end{array}$$



20. 
$$\begin{array}{r} \square \\ 2 \overline{) 1 8} \end{array}$$



# DIGITOS FANTASMAS, TODAS LAS OPERACIONES (C) RESPUESTAS

Nombre: \_\_\_\_\_

Fecha: \_\_\_\_\_

Puntuación: \_\_\_\_\_

Reemplace los dígitos que han desaparecido misteriosamente.

1. 
$$\begin{array}{r} 5 \square 4 \\ - \square 3 1 \\ \hline 3 8 \square \end{array}$$



2. 
$$\begin{array}{r} 3 \\ \times 1 2 \\ \hline 3 \square \end{array}$$



3. 
$$\begin{array}{r} 1 \square \\ 1 0 \overline{) 1 1 0} \end{array}$$



4. 
$$\begin{array}{r} 2 \\ 9 \overline{) 1 8} \end{array}$$



5. 
$$\begin{array}{r} 8 \\ \times 8 \\ \hline 6 \square \end{array}$$



6. 
$$\begin{array}{r} 1 8 \square \\ + 2 0 4 \\ \hline \square \square 6 \end{array}$$



7. 
$$\begin{array}{r} \square 9 \square 0 \\ - 9 8 5 \\ \hline \square 4 5 \end{array}$$



8. 
$$\begin{array}{r} \square 7 5 4 \\ - 9 6 6 \\ \hline \square \square \square \end{array}$$



9. 
$$\begin{array}{r} 8 4 \square \\ - \square 6 6 \\ \hline 5 7 8 \end{array}$$



10. 
$$\begin{array}{r} 9 2 1 \\ - \square 0 \square \\ \hline 5 1 \square \end{array}$$



11. 
$$\begin{array}{r} 5 \\ 1 0 \overline{) 5 0} \end{array}$$



12. 
$$\begin{array}{r} 9 \\ \times \square \\ \hline 8 1 \end{array}$$



13. 
$$\begin{array}{r} 9 \\ \square \overline{) 6 3} \end{array}$$



14. 
$$\begin{array}{r} \square \\ \times 2 \\ \hline 8 \end{array}$$



15. 
$$\begin{array}{r} \square \square \square \\ + 6 3 8 \\ \hline \square 5 9 3 \end{array}$$



16. 
$$\begin{array}{r} 8 1 \square \\ + \square \square \square \\ \hline \square 5 7 6 \end{array}$$



17. 
$$\begin{array}{r} 1 2 \\ \times 1 2 \\ \hline \square \square \square \end{array}$$



18. 
$$\begin{array}{r} 4 9 3 \\ + 6 \square 0 \\ \hline \square \square \square \square \end{array}$$



19. 
$$\begin{array}{r} 4 \square 9 \\ + 1 0 \square \\ \hline \square 7 0 \end{array}$$



20. 
$$\begin{array}{r} \square \\ 2 \overline{) 1 8} \end{array}$$



# DIGITOS FANTASMAS, TODAS LAS OPERACIONES (D)

Nombre: \_\_\_\_\_

Fecha: \_\_\_\_\_

Puntuación: \_\_\_\_\_

Reemplace los digitos que han desaparecido misteriosamente.

1. 
$$\begin{array}{r} 9 \\ \times \square \\ \hline 63 \end{array}$$



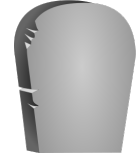
2. 
$$\begin{array}{r} 44\square \\ - \square 3 \\ \hline \square 84 \end{array}$$



3. 
$$\begin{array}{r} \square 0 \square \\ + 400 \\ \hline 6\square 1 \end{array}$$



4. 
$$\begin{array}{r} \square \\ \times 5 \\ \hline 15 \end{array}$$



5. 
$$\begin{array}{r} 7 \\ \times 1\square \\ \hline 77 \end{array}$$



6. 
$$\begin{array}{r} 857 \\ + 78\square \\ \hline \square\square\square 4 \end{array}$$



7. 
$$\begin{array}{r} \square \\ \times 9 \\ \hline 63 \end{array}$$



8. 
$$\begin{array}{r} 3 \\ \square \overline{) 6} \end{array}$$



9. 
$$\begin{array}{r} 355 \\ + 927 \\ \hline \square\square\square\square \end{array}$$



10. 
$$8 \overline{) 6\square}$$



11. 
$$\begin{array}{r} 11 \\ + 2\square 6 \\ \hline \square 4 \square \end{array}$$



12. 
$$8 \overline{) 11}$$



13. 
$$\begin{array}{r} \square\square 4 \\ - 475 \\ \hline 40\square \end{array}$$




14. 
$$\begin{array}{r} \square 4 \square 5 \\ - 62\square \\ \hline \square 27 \end{array}$$



15. 
$$\begin{array}{r} 975 \\ - \square\square \\ \hline \square 24 \end{array}$$



16. 
$$\begin{array}{r} 229 \\ - 127 \\ \hline \square\square\square \end{array}$$



17. 
$$\begin{array}{r} 65\square \\ + \square 65 \\ \hline \square 2\square 3 \end{array}$$



18. 
$$\square \overline{) 9}$$



19. 
$$2 \overline{) 1\square}$$



20. 
$$\begin{array}{r} 9 \\ \times \square \\ \hline 45 \end{array}$$



# DIGITOS FANTASMAS, TODAS LAS OPERACIONES (D) RESPUESTAS

Nombre: \_\_\_\_\_

Fecha: \_\_\_\_\_

Puntuación: \_\_\_\_\_

Reemplace los dígitos que han desaparecido misteriosamente.

1. 
$$\begin{array}{r} 9 \\ \times 7 \\ \hline 63 \end{array}$$



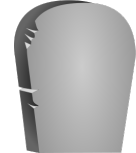
2. 
$$\begin{array}{r} 447 \\ - 63 \\ \hline 384 \end{array}$$



3. 
$$\begin{array}{r} 201 \\ + 400 \\ \hline 601 \end{array}$$



4. 
$$\begin{array}{r} 3 \\ \times 5 \\ \hline 15 \end{array}$$



5. 
$$\begin{array}{r} 7 \\ \times 11 \\ \hline 77 \end{array}$$



6. 
$$\begin{array}{r} 857 \\ + 787 \\ \hline 1644 \end{array}$$



7. 
$$\begin{array}{r} 7 \\ \times 9 \\ \hline 63 \end{array}$$



8. 
$$\begin{array}{r} 3 \\ 2 \overline{)6} \end{array}$$



9. 
$$\begin{array}{r} 355 \\ + 927 \\ \hline 1282 \end{array}$$



10. 
$$\begin{array}{r} 8 \\ 8 \overline{)64} \end{array}$$



11. 
$$\begin{array}{r} 11 \\ + 236 \\ \hline 247 \end{array}$$



12. 
$$\begin{array}{r} 11 \\ 8 \overline{)88} \end{array}$$



13. 
$$\begin{array}{r} 884 \\ - 475 \\ \hline 409 \end{array}$$




14. 
$$\begin{array}{r} 1455 \\ - 628 \\ \hline 827 \end{array}$$



15. 
$$\begin{array}{r} 975 \\ - 51 \\ \hline 924 \end{array}$$



16. 
$$\begin{array}{r} 229 \\ - 127 \\ \hline 102 \end{array}$$



17. 
$$\begin{array}{r} 658 \\ + 565 \\ \hline 1223 \end{array}$$



18. 
$$\begin{array}{r} 9 \\ 8 \overline{)72} \end{array}$$



19. 
$$\begin{array}{r} 6 \\ 2 \overline{)12} \end{array}$$



20. 
$$\begin{array}{r} 9 \\ \times 5 \\ \hline 45 \end{array}$$





# DIGITOS FANTASMAS, TODAS LAS OPERACIONES (E)

Nombre: \_\_\_\_\_

Fecha: \_\_\_\_\_

Puntuación: \_\_\_\_\_

Reemplace los dígitos que han desaparecido misteriosamente.

1. 
$$\begin{array}{r} 32 \\ + \square 0 \square \\ \hline 6 \square 3 \end{array}$$



2. 
$$\begin{array}{r} \square \square 0 \square \\ - 5 \square 4 \\ \hline 982 \end{array}$$



3. 
$$\begin{array}{r} 10 \\ \times \square \\ \hline 80 \end{array}$$



4. 
$$\begin{array}{r} 8 \\ \square \overline{) 64} \end{array}$$



5. 
$$\begin{array}{r} \square 00 \\ + 2 \square 6 \\ \hline 64 \square \end{array}$$



6. 
$$\begin{array}{r} 8 \square 6 \\ - 59 \square \\ \hline \square 50 \end{array}$$



7. 
$$\begin{array}{r} 6 \square 5 \\ + 7 \square \\ \hline \square 22 \end{array}$$



8. 
$$\begin{array}{r} 6 \square 9 \\ - \square 3 \square \\ \hline 420 \end{array}$$



9. 
$$\begin{array}{r} 25 \square \\ + \square \square 9 \\ \hline 435 \end{array}$$



10. 
$$\begin{array}{r} 5 \square 1 \\ - 195 \\ \hline \square 5 \square \end{array}$$



11. 
$$\begin{array}{r} 9 \square 1 \\ + 456 \\ \hline \square \square 8 \square \end{array}$$



12. 
$$\begin{array}{r} 8 \\ 1 \square \overline{) 88} \end{array}$$



13. 
$$\begin{array}{r} 9 \\ \times 8 \\ \hline 7 \square \end{array}$$



14. 
$$\begin{array}{r} 12 \\ \times 7 \\ \hline 8 \square \end{array}$$



15. 
$$\begin{array}{r} 1 \square \\ \times 9 \\ \hline 99 \end{array}$$



16. 
$$\begin{array}{r} 5 \\ 10 \overline{) 5 \square} \end{array}$$



17. 
$$\begin{array}{r} 11 \\ \times \square \\ \hline 88 \end{array}$$



18. 
$$\begin{array}{r} \square 376 \\ - 454 \\ \hline \square \square \square \end{array}$$



19. 
$$\begin{array}{r} 3 \\ 9 \overline{) 2 \square} \end{array}$$



20. 
$$\begin{array}{r} 8 \\ \square \overline{) 32} \end{array}$$



# DIGITOS FANTASMAS, TODAS LAS OPERACIONES (E) RESPUESTAS

Nombre: \_\_\_\_\_

Fecha: \_\_\_\_\_


Puntuación: \_\_\_\_\_

Reemplace los dígitos que han desaparecido misteriosamente.

1. 
$$\begin{array}{r} 32 \\ + 601 \\ \hline 633 \end{array}$$



2. 
$$\begin{array}{r} 1506 \\ - 524 \\ \hline 982 \end{array}$$



3. 
$$\begin{array}{r} 10 \\ \times 8 \\ \hline 80 \end{array}$$



4. 
$$\begin{array}{r} 8 \\ 8 \overline{) 64} \end{array}$$



5. 
$$\begin{array}{r} 400 \\ + 246 \\ \hline 646 \end{array}$$



6. 
$$\begin{array}{r} 846 \\ - 596 \\ \hline 250 \end{array}$$



7. 
$$\begin{array}{r} 645 \\ + 77 \\ \hline 722 \end{array}$$



8. 
$$\begin{array}{r} 659 \\ - 239 \\ \hline 420 \end{array}$$



9. 
$$\begin{array}{r} 256 \\ + 179 \\ \hline 435 \end{array}$$



10. 
$$\begin{array}{r} 551 \\ - 195 \\ \hline 356 \end{array}$$



11. 
$$\begin{array}{r} 931 \\ + 456 \\ \hline 1387 \end{array}$$



12. 
$$\begin{array}{r} 8 \\ 11 \overline{) 88} \end{array}$$



13. 
$$\begin{array}{r} 9 \\ \times 8 \\ \hline 72 \end{array}$$



14. 
$$\begin{array}{r} 12 \\ \times 7 \\ \hline 84 \end{array}$$



15. 
$$\begin{array}{r} 11 \\ \times 9 \\ \hline 99 \end{array}$$



16. 
$$\begin{array}{r} 5 \\ 10 \overline{) 50} \end{array}$$



17. 
$$\begin{array}{r} 11 \\ \times 8 \\ \hline 88 \end{array}$$



18. 
$$\begin{array}{r} 1376 \\ - 454 \\ \hline 922 \end{array}$$



19. 
$$\begin{array}{r} 3 \\ 9 \overline{) 27} \end{array}$$



20. 
$$\begin{array}{r} 8 \\ 4 \overline{) 32} \end{array}$$



# DIGITOS FANTASMAS, TODAS LAS OPERACIONES (F)

Nombre: \_\_\_\_\_

Fecha: \_\_\_\_\_

Puntuación: \_\_\_\_\_

Reemplace los dígitos que han desaparecido misteriosamente.

1. 
$$\begin{array}{r} \square\square 1 \\ - 69\square \\ \hline 140 \end{array}$$



2. 
$$\begin{array}{r} 6\square 7 \\ - 344 \\ \hline \square 9\square \end{array}$$



3. 
$$\begin{array}{r} 1\square \\ 7 \overline{) 84} \end{array}$$



4. 
$$\begin{array}{r} 11 \\ \times \square \\ \hline 77 \end{array}$$



5. 
$$\begin{array}{r} 2 \\ \square \overline{) 6} \end{array}$$



6. 
$$\begin{array}{r} \square\square 84 \\ - 7\square 7 \\ \hline 49\square \end{array}$$



7. 
$$\begin{array}{r} 3 \\ \times 2 \\ \hline \square \end{array}$$



8. 
$$\begin{array}{r} \square \\ 9 \overline{) 81} \end{array}$$



9. 
$$\begin{array}{r} \square \\ 4 \overline{) 8} \end{array}$$



10. 
$$\begin{array}{r} \square\square 3\square \\ - 7\square 6 \\ \hline 727 \end{array}$$



11. 
$$\begin{array}{r} \square \\ 3 \overline{) 12} \end{array}$$



12. 
$$\begin{array}{r} \square\square\square 8 \\ - 538 \\ \hline 60\square \end{array}$$



13. 
$$\begin{array}{r} 139 \\ + 865 \\ \hline \square\square\square\square \end{array}$$



14. 
$$\begin{array}{r} \square\square 5 \\ + 541 \\ \hline \square 21\square \end{array}$$



15. 
$$\begin{array}{r} \square\square\square \\ + 342 \\ \hline 905 \end{array}$$



16. 
$$\begin{array}{r} 3 \\ \times 9 \\ \hline 2\square \end{array}$$



17. 
$$\begin{array}{r} 981 \\ + \square 0\square \\ \hline \square 3\square 0 \end{array}$$



18. 
$$\begin{array}{r} 11 \\ \times 4 \\ \hline 4\square \end{array}$$



19. 
$$\begin{array}{r} 8 \\ \times \square \\ \hline 64 \end{array}$$



20. 
$$\begin{array}{r} \square 60 \\ + 4\square\square \\ \hline \square 009 \end{array}$$



# DIGITOS FANTASMAS, TODAS LAS OPERACIONES (F) RESPUESTAS

Nombre: \_\_\_\_\_

Fecha: \_\_\_\_\_

Puntuación: \_\_\_\_\_

Reemplace los dígitos que han desaparecido misteriosamente.

1. 
$$\begin{array}{r} \boxed{8} \boxed{3} 1 \\ - 69 \boxed{1} \\ \hline 140 \end{array}$$



2. 
$$\begin{array}{r} 6 \boxed{3} 7 \\ - 344 \\ \hline \boxed{2} \boxed{9} \boxed{3} \end{array}$$



3. 
$$\begin{array}{r} 1 \boxed{2} \\ 7 \overline{) 84} \end{array}$$



4. 
$$\begin{array}{r} 11 \\ \times \boxed{7} \\ \hline 77 \end{array}$$



5. 
$$\begin{array}{r} 2 \\ \boxed{3} \overline{) 6} \end{array}$$



6. 
$$\begin{array}{r} \boxed{1} \boxed{2} 84 \\ - 7 \boxed{8} 7 \\ \hline 49 \boxed{7} \end{array}$$



7. 
$$\begin{array}{r} 3 \\ \times 2 \\ \hline \boxed{6} \end{array}$$



8. 
$$\begin{array}{r} \boxed{9} \\ 9 \overline{) 81} \end{array}$$



9. 
$$\begin{array}{r} \boxed{2} \\ 4 \overline{) 8} \end{array}$$



10. 
$$\begin{array}{r} \boxed{1} \boxed{4} \boxed{3} \boxed{3} \\ - 7 \boxed{0} 6 \\ \hline 727 \end{array}$$



11. 
$$\begin{array}{r} \boxed{4} \\ 3 \overline{) 12} \end{array}$$



12. 
$$\begin{array}{r} \boxed{1} \boxed{1} \boxed{3} 8 \\ - 538 \\ \hline 60 \boxed{0} \end{array}$$



13. 
$$\begin{array}{r} 139 \\ + 865 \\ \hline \boxed{1} \boxed{0} \boxed{0} \boxed{4} \end{array}$$



14. 
$$\begin{array}{r} \boxed{6} \boxed{7} 5 \\ + 541 \\ \hline \boxed{1} \boxed{2} \boxed{1} \boxed{6} \end{array}$$



15. 
$$\begin{array}{r} \boxed{5} \boxed{6} \boxed{3} \\ + 342 \\ \hline 905 \end{array}$$



16. 
$$\begin{array}{r} 3 \\ \times 9 \\ \hline 2 \boxed{7} \end{array}$$



17. 
$$\begin{array}{r} 981 \\ + \boxed{4} \boxed{0} \boxed{9} \\ \hline \boxed{1} \boxed{3} \boxed{9} 0 \end{array}$$



18. 
$$\begin{array}{r} 11 \\ \times 4 \\ \hline 4 \boxed{4} \end{array}$$



19. 
$$\begin{array}{r} 8 \\ \times \boxed{8} \\ \hline 64 \end{array}$$



20. 
$$\begin{array}{r} \boxed{5} 60 \\ + \boxed{4} \boxed{4} \boxed{9} \\ \hline \boxed{1} 009 \end{array}$$



# DIGITOS FANTASMAS, TODAS LAS OPERACIONES (Q)

Nombre: \_\_\_\_\_

Fecha: \_\_\_\_\_

Puntuación: \_\_\_\_\_

Reemplace los dígitos que han desaparecido misteriosamente.

1. 
$$\begin{array}{r} \square\square\square \\ + 119 \\ \hline 652 \end{array}$$



2. 
$$\begin{array}{r} 160 \\ + 6\square \\ \hline \square\square6 \end{array}$$



3. 
$$\begin{array}{r} 745 \\ + \square4\square \\ \hline \square6\square3 \end{array}$$



4. 
$$\begin{array}{r} \square \\ 2 \overline{) 10} \end{array}$$



5. 
$$\begin{array}{r} 3 \\ 6 \overline{) 1\square} \end{array}$$



6. 
$$\begin{array}{r} 4 \\ \times 10 \\ \hline 4\square \end{array}$$



7. 
$$\begin{array}{r} \square7\square9 \\ - \square5\square \\ \hline 772 \end{array}$$



8. 
$$\begin{array}{r} \square\square\square9 \\ - 966 \\ \hline 41\square \end{array}$$



9. 
$$\begin{array}{r} 7 \\ 2 \overline{) 1\square} \end{array}$$



10. 
$$\begin{array}{r} 363 \\ + 810 \\ \hline \square\square\square \end{array}$$



11. 
$$\begin{array}{r} \square1\square3 \\ - 52\square \\ \hline \square82 \end{array}$$



12. 
$$\begin{array}{r} \square81 \\ + 30 \\ \hline \square0\square \end{array}$$



13. 
$$\begin{array}{r} 3 \\ \times 4 \\ \hline 1\square \end{array}$$



14. 
$$\begin{array}{r} \square \\ 4 \overline{) 24} \end{array}$$



15. 
$$\begin{array}{r} 3 \\ 7 \overline{) 2\square} \end{array}$$



16. 
$$\begin{array}{r} 9 \\ \times 1\square \\ \hline 90 \end{array}$$



17. 
$$\begin{array}{r} \square\square9\square \\ - 4\square0 \\ \hline 740 \end{array}$$



18. 
$$\begin{array}{r} 1\square \\ \times 5 \\ \hline 55 \end{array}$$



19. 
$$\begin{array}{r} \square3\square\square \\ - 842 \\ \hline \square51 \end{array}$$



20. 
$$\begin{array}{r} 5 \\ \times \square \\ \hline 30 \end{array}$$



# DIGITOS FANTASMAS, TODAS LAS OPERACIONES (Q) RESPUESTAS

Nombre: \_\_\_\_\_

Fecha: \_\_\_\_\_

Puntuación: \_\_\_\_\_

Reemplace los dígitos que han desaparecido misteriosamente.

1. 
$$\begin{array}{r} \boxed{5} \boxed{3} \boxed{3} \\ + 119 \\ \hline 652 \end{array}$$



2. 
$$\begin{array}{r} 160 \\ + 6\boxed{6} \\ \hline \boxed{2} \boxed{2} 6 \end{array}$$



3. 
$$\begin{array}{r} 745 \\ + \boxed{9} \boxed{4} \boxed{8} \\ \hline \boxed{1} \boxed{6} \boxed{9} 3 \end{array}$$



4. 
$$\begin{array}{r} \boxed{5} \\ 2 \overline{) 10} \end{array}$$



5. 
$$\begin{array}{r} 3 \\ 6 \overline{) 18} \end{array}$$



6. 
$$\begin{array}{r} 4 \\ \times 10 \\ \hline 4\boxed{0} \end{array}$$



7. 
$$\begin{array}{r} \boxed{1} \boxed{7} \boxed{2} 9 \\ - \boxed{9} \boxed{5} \boxed{7} \\ \hline 772 \end{array}$$



8. 
$$\begin{array}{r} \boxed{1} \boxed{3} \boxed{7} 9 \\ - 966 \\ \hline 41\boxed{3} \end{array}$$



9. 
$$\begin{array}{r} 7 \\ 2 \overline{) 14} \end{array}$$



10. 
$$\begin{array}{r} 363 \\ + 810 \\ \hline \boxed{1} \boxed{1} \boxed{7} \boxed{3} \end{array}$$



11. 
$$\begin{array}{r} \boxed{1} \boxed{1} \boxed{0} 3 \\ - 52\boxed{1} \\ \hline \boxed{5} 8 2 \end{array}$$



12. 
$$\begin{array}{r} \boxed{9} 8 1 \\ + 30 \\ \hline \boxed{1} \boxed{0} \boxed{1} \boxed{1} \end{array}$$



13. 
$$\begin{array}{r} 3 \\ \times 4 \\ \hline 1\boxed{2} \end{array}$$



14. 
$$\begin{array}{r} \boxed{6} \\ 4 \overline{) 24} \end{array}$$



15. 
$$\begin{array}{r} 3 \\ 7 \overline{) 21} \end{array}$$



16. 
$$\begin{array}{r} 9 \\ \times 1\boxed{0} \\ \hline 90 \end{array}$$



17. 
$$\begin{array}{r} \boxed{1} \boxed{1} 9 \boxed{0} \\ - 4\boxed{5} 0 \\ \hline 740 \end{array}$$



18. 
$$\begin{array}{r} 1\boxed{1} \\ \times 5 \\ \hline 55 \end{array}$$



19. 
$$\begin{array}{r} \boxed{1} \boxed{3} \boxed{9} \boxed{3} \\ - 842 \\ \hline \boxed{5} 5 1 \end{array}$$



20. 
$$\begin{array}{r} 5 \\ \times \boxed{6} \\ \hline 30 \end{array}$$



# DIGITOS FANTASMAS, TODAS LAS OPERACIONES (H)


Nombre: \_\_\_\_\_

Fecha: \_\_\_\_\_

Puntuación: \_\_\_\_\_

Reemplace los dígitos que han desaparecido misteriosamente.

1. 
$$\begin{array}{r} 1 \square \\ \times 2 \\ \hline 22 \end{array}$$



2. 
$$\begin{array}{r} \square 43 \square \\ - \square 97 \\ \hline 7 \square 5 \end{array}$$



3. 
$$\begin{array}{r} \square \\ \times 7 \\ \hline 21 \end{array}$$



4. 
$$\begin{array}{r} \square 18 \square \\ - 5 \square 2 \\ \hline \square 99 \end{array}$$



5. 
$$\begin{array}{r} 2 \\ 2 \overline{) \square} \end{array}$$



6. 
$$\begin{array}{r} \square 64 \\ - 302 \\ \hline 4 \square \square \end{array}$$



7. 
$$\begin{array}{r} \square 59 \\ + 1 \square \\ \hline 7 \square 3 \end{array}$$



8. 
$$\begin{array}{r} 12 \\ \times \square \\ \hline 60 \end{array}$$



9. 
$$\begin{array}{r} 5 \square 4 \\ + \square 8 \square \\ \hline 713 \end{array}$$



10. 
$$\begin{array}{r} \square 11 \\ + 7 \square 9 \\ \hline \square 70 \square \end{array}$$



11. 
$$\begin{array}{r} \square 9 \\ \times 4 \\ \hline 3 \square \end{array}$$



12. 
$$\begin{array}{r} \square \square 98 \\ - 97 \square \\ \hline 2 \square 7 \end{array}$$



13. 
$$\begin{array}{r} 3 \\ \square \overline{) 27} \end{array}$$



14. 
$$\begin{array}{r} \square \square 0 \\ + 61 \square \\ \hline 950 \end{array}$$



15. 
$$\begin{array}{r} \square \\ 12 \overline{) 96} \end{array}$$



16. 
$$\begin{array}{r} 9 \square 9 \\ - 505 \\ \hline \square 4 \square \end{array}$$



17. 
$$\begin{array}{r} \square \\ 3 \overline{) 9} \end{array}$$



18. 
$$\begin{array}{r} 12 \\ \square \overline{) 96} \end{array}$$



19. 
$$\begin{array}{r} \square \\ \times 5 \\ \hline 20 \end{array}$$



20. 
$$\begin{array}{r} 5 \square \square \\ + 343 \\ \hline \square 11 \end{array}$$



# DIGITOS FANTASMAS, TODAS LAS OPERACIONES (H) RESPUESTAS

Nombre: \_\_\_\_\_

Fecha: \_\_\_\_\_

Puntuación: \_\_\_\_\_

Reemplace los dígitos que han desaparecido misteriosamente.

1. 
$$\begin{array}{r} 1 \square \\ \times 2 \\ \hline 22 \end{array}$$



2. 
$$\begin{array}{r} \square 4 3 \square \\ - \square 9 7 \\ \hline 7 \square 5 \end{array}$$



3. 
$$\begin{array}{r} \square \\ \times 7 \\ \hline 21 \end{array}$$



4. 
$$\begin{array}{r} \square 1 8 \square \\ - 5 \square 2 \\ \hline \square 9 9 \end{array}$$



5. 
$$\begin{array}{r} 2 \\ 2 \overline{) 4} \end{array}$$



6. 
$$\begin{array}{r} \square 6 4 \\ - 3 0 2 \\ \hline 4 \square \square \end{array}$$



7. 
$$\begin{array}{r} \square 5 9 \\ + \square 4 \\ \hline 7 \square 3 \end{array}$$



8. 
$$\begin{array}{r} 1 2 \\ \times \square \\ \hline 6 0 \end{array}$$



9. 
$$\begin{array}{r} 5 \square 4 \\ + \square 8 \square \\ \hline 7 1 3 \end{array}$$



10. 
$$\begin{array}{r} \square 1 1 \\ + 7 \square 9 \\ \hline \square 7 0 0 \end{array}$$



11. 
$$\begin{array}{r} 9 \\ \times 4 \\ \hline 3 \square \end{array}$$



12. 
$$\begin{array}{r} \square \square 9 8 \\ - 9 7 \square \\ \hline 2 \square 7 \end{array}$$



13. 
$$\begin{array}{r} 3 \\ \square \overline{) 27} \end{array}$$



14. 
$$\begin{array}{r} \square \square 0 \\ + 6 1 \square \\ \hline 9 5 0 \end{array}$$



15. 
$$\begin{array}{r} \square \\ 1 2 \overline{) 96} \end{array}$$



16. 
$$\begin{array}{r} 9 \square 9 \\ - 5 0 5 \\ \hline \square \square \square \end{array}$$



17. 
$$\begin{array}{r} \square \\ 3 \overline{) 9} \end{array}$$



18. 
$$\begin{array}{r} 1 2 \\ \square \overline{) 96} \end{array}$$



19. 
$$\begin{array}{r} \square \\ \times 5 \\ \hline 2 0 \end{array}$$



20. 
$$\begin{array}{r} 5 \square \square \\ + 3 4 3 \\ \hline \square 1 1 \end{array}$$





# DIGITOS FANTASMAS, TODAS LAS OPERACIONES (1)

Nombre: \_\_\_\_\_

Fecha: \_\_\_\_\_

Puntuación: \_\_\_\_\_

Reemplace los digitos que han desaparecido misteriosamente.

1. 
$$\begin{array}{r} 8 \\ 11 \overline{) 8 \square} \end{array}$$



2. 
$$\begin{array}{r} 12 \\ \times 3 \\ \hline 3 \square \end{array}$$



3. 
$$\begin{array}{r} 6 \\ 6 \overline{) 3 \square} \end{array}$$



4. 
$$\begin{array}{r} 12 \\ \times \square \\ \hline 48 \end{array}$$



5. 
$$\begin{array}{r} 711 \\ + \square 38 \\ \hline \square 3 \square \square \end{array}$$



6. 
$$\begin{array}{r} 9 \square 3 \\ - \square 7 \square \\ \hline 233 \end{array}$$



7. 
$$\begin{array}{r} \square 28 \square \\ - \square \square 0 \\ \hline 910 \end{array}$$



8. 
$$\begin{array}{r} 109 \\ + \square \square 3 \\ \hline 34 \square \end{array}$$



9. 
$$\begin{array}{r} \square \square \square \\ - 119 \\ \hline 560 \end{array}$$



10. 
$$\begin{array}{r} 43 \\ + \square \square \\ \hline \square 22 \end{array}$$



11. 
$$\begin{array}{r} 519 \\ + \square \square \square \\ \hline \square 133 \end{array}$$



12. 
$$\begin{array}{r} 1 \square \\ 3 \overline{) 33} \end{array}$$



13. 
$$\begin{array}{r} 12 \\ \square \overline{) 36} \end{array}$$



14. 
$$\begin{array}{r} 6 \\ \times 8 \\ \hline 4 \square \end{array}$$



15. 
$$\begin{array}{r} \square \\ \times 5 \\ \hline 20 \end{array}$$



16. 
$$\begin{array}{r} 70 \square \\ + \square \square 0 \\ \hline \square 302 \end{array}$$



17. 
$$\begin{array}{r} \square 0 \square \square \\ - 828 \\ \hline \square 38 \end{array}$$



18. 
$$\begin{array}{r} 10 \\ \times 1 \square \\ \hline \square 10 \end{array}$$



19. 
$$\begin{array}{r} 11 \\ \square \overline{) 33} \end{array}$$



20. 
$$\begin{array}{r} 576 \\ - \square \square \square \\ \hline 390 \end{array}$$



# DIGITOS FANTASMAS, TODAS LAS OPERACIONES (1) RESPUESTAS

Nombre: \_\_\_\_\_

Fecha: \_\_\_\_\_

Puntuación: \_\_\_\_\_

Reemplace los dígitos que han desaparecido misteriosamente.

1. 
$$\begin{array}{r} 8 \\ 11 \overline{) 88} \end{array}$$



2. 
$$\begin{array}{r} 12 \\ \times 3 \\ \hline 36 \end{array}$$



3. 
$$\begin{array}{r} 6 \\ 6 \overline{) 36} \end{array}$$



4. 
$$\begin{array}{r} 12 \\ \times 4 \\ \hline 48 \end{array}$$



5. 
$$\begin{array}{r} 711 \\ + 638 \\ \hline 1349 \end{array}$$



6. 
$$\begin{array}{r} 903 \\ - 670 \\ \hline 233 \end{array}$$



7. 
$$\begin{array}{r} 1280 \\ - 370 \\ \hline 910 \end{array}$$



8. 
$$\begin{array}{r} 109 \\ + 233 \\ \hline 342 \end{array}$$



9. 
$$\begin{array}{r} 679 \\ - 119 \\ \hline 560 \end{array}$$



10. 
$$\begin{array}{r} 43 \\ + 79 \\ \hline 122 \end{array}$$



11. 
$$\begin{array}{r} 519 \\ + 614 \\ \hline 1133 \end{array}$$



12. 
$$\begin{array}{r} 11 \\ 3 \overline{) 33} \end{array}$$



13. 
$$\begin{array}{r} 12 \\ 3 \overline{) 36} \end{array}$$



14. 
$$\begin{array}{r} 6 \\ \times 8 \\ \hline 48 \end{array}$$



15. 
$$\begin{array}{r} 4 \\ \times 5 \\ \hline 20 \end{array}$$



16. 
$$\begin{array}{r} 702 \\ + 600 \\ \hline 1302 \end{array}$$



17. 
$$\begin{array}{r} 1066 \\ - 828 \\ \hline 238 \end{array}$$



18. 
$$\begin{array}{r} 10 \\ \times 11 \\ \hline 110 \end{array}$$



19. 
$$\begin{array}{r} 11 \\ 3 \overline{) 33} \end{array}$$



20. 
$$\begin{array}{r} 576 \\ - 186 \\ \hline 390 \end{array}$$



# DIGITOS FANTASMAS, TODAS LAS OPERACIONES (J)

Nombre: \_\_\_\_\_

Fecha: \_\_\_\_\_

Puntuación: \_\_\_\_\_

Reemplace los dígitos que han desaparecido misteriosamente.

1. 
$$\begin{array}{r} \square 17 \\ + 2\square\square \\ \hline 989 \end{array}$$



2. 
$$\begin{array}{r} 36\square \\ - 65 \\ \hline \square\square 1 \end{array}$$



3. 
$$\begin{array}{r} 2\square 4 \\ + 3\square \\ \hline \square 72 \end{array}$$



4. 
$$\begin{array}{r} 25\square \\ + 231 \\ \hline \square\square 4 \end{array}$$



5. 
$$\begin{array}{r} 8 \\ \times 10 \\ \hline 8\square \end{array}$$



6. 
$$\begin{array}{r} 4 \\ \times \square \\ \hline 20 \end{array}$$



7. 
$$\begin{array}{r} 8 \\ \times \square \\ \hline 56 \end{array}$$



8. 
$$\begin{array}{r} \square\square\square 5 \\ - 59\square \\ \hline 538 \end{array}$$



9. 
$$4 \overline{) 2\square}$$



10. 
$$\begin{array}{r} 8 \\ \times 11 \\ \hline 8\square \end{array}$$



11. 
$$\square \overline{) 11}$$



12. 
$$2 \overline{) 1\square}$$



13. 
$$6 \overline{) 3\square}$$



14. 
$$\begin{array}{r} 56\square \\ - \square 37 \\ \hline \square 4 \end{array}$$



15. 
$$\begin{array}{r} 6 \\ \times 10 \\ \hline 6\square \end{array}$$



16. 
$$\begin{array}{r} 702 \\ + 413 \\ \hline \square\square\square \end{array}$$



17. 
$$\begin{array}{r} \square 5 \\ + \square 5\square \\ \hline 953 \end{array}$$



18. 
$$\begin{array}{r} \square 2\square\square \\ - 763 \\ \hline \square 48 \end{array}$$



19. 
$$\begin{array}{r} \square\square 9 \\ - 368 \\ \hline 60\square \end{array}$$



20. 
$$1\square \overline{) 48}$$



# DIGITOS FANTASMAS, TODAS LAS OPERACIONES (J) RESPUESTAS

Nombre: \_\_\_\_\_

Fecha: \_\_\_\_\_

Puntuación: \_\_\_\_\_

Reemplace los dígitos que han desaparecido misteriosamente.

1. 
$$\begin{array}{r} \boxed{7} \boxed{1} \boxed{7} \\ + \quad \boxed{2} \boxed{7} \boxed{2} \\ \hline 9 \ 8 \ 9 \end{array}$$



2. 
$$\begin{array}{r} 3 \ 6 \ \boxed{6} \\ - \quad 6 \ 5 \\ \hline \boxed{3} \ \boxed{0} \ 1 \end{array}$$



3. 
$$\begin{array}{r} 2 \ \boxed{3} \ 4 \\ + \quad 3 \ \boxed{8} \\ \hline \boxed{2} \ 7 \ 2 \end{array}$$



4. 
$$\begin{array}{r} 2 \ 5 \ \boxed{3} \\ + \quad 2 \ 3 \ 1 \\ \hline \boxed{4} \ \boxed{8} \ 4 \end{array}$$



5. 
$$\begin{array}{r} 8 \\ \times \quad 1 \ 0 \\ \hline 8 \ \boxed{0} \end{array}$$



6. 
$$\begin{array}{r} 4 \\ \times \quad \boxed{5} \\ \hline 2 \ 0 \end{array}$$



7. 
$$\begin{array}{r} 8 \\ \times \quad \boxed{7} \\ \hline 5 \ 6 \end{array}$$



8. 
$$\begin{array}{r} \boxed{1} \ \boxed{1} \ \boxed{3} \ 5 \\ - \quad 5 \ 9 \ \boxed{7} \\ \hline 5 \ 3 \ 8 \end{array}$$



9. 
$$\begin{array}{r} 7 \\ 4 \overline{) 2 \ \boxed{8}} \end{array}$$



10. 
$$\begin{array}{r} 8 \\ \times \quad 1 \ 1 \\ \hline 8 \ \boxed{8} \end{array}$$



11. 
$$\begin{array}{r} 1 \ 1 \\ \boxed{6} \overline{) 6 \ 6} \end{array}$$



12. 
$$\begin{array}{r} 1 \ \boxed{1} \\ 2 \overline{) 2 \ 2} \end{array}$$



13. 
$$\begin{array}{r} 6 \\ 6 \overline{) 3 \ \boxed{6}} \end{array}$$



14. 
$$\begin{array}{r} 5 \ 6 \ \boxed{1} \\ - \quad \boxed{5} \ 3 \ 7 \\ \hline \quad \boxed{2} \ 4 \end{array}$$



15. 
$$\begin{array}{r} 6 \\ \times \quad 1 \ 0 \\ \hline 6 \ \boxed{0} \end{array}$$



16. 
$$\begin{array}{r} 7 \ 0 \ 2 \\ + \quad 4 \ 1 \ 3 \\ \hline \boxed{1} \ \boxed{1} \ \boxed{1} \ 5 \end{array}$$



17. 
$$\begin{array}{r} \boxed{9} \ 5 \\ + \quad \boxed{8} \ \boxed{5} \ \boxed{8} \\ \hline 9 \ 5 \ 3 \end{array}$$



18. 
$$\begin{array}{r} \boxed{1} \ \boxed{2} \ \boxed{1} \ \boxed{1} \\ - \quad 7 \ 6 \ 3 \\ \hline \quad \boxed{4} \ 4 \ 8 \end{array}$$



19. 
$$\begin{array}{r} \boxed{9} \ \boxed{6} \ 9 \\ - \quad 3 \ 6 \ 8 \\ \hline 6 \ 0 \ \boxed{1} \end{array}$$



20. 
$$\begin{array}{r} 4 \\ 1 \ \boxed{2} \overline{) 4 \ 8} \end{array}$$

