


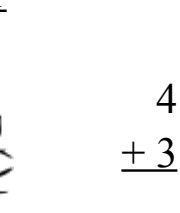
Por el Bosque Oscuro (D)

Calcula cada suma para hallar tu camino por el bosque



1

$$\begin{array}{r} +1 \\ \hline \end{array}$$



4

$$\begin{array}{r} +3 \\ \hline \end{array}$$



9

$$\begin{array}{r} +1 \\ \hline \end{array}$$



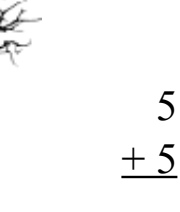
3

$$\begin{array}{r} +7 \\ \hline \end{array}$$



9

$$\begin{array}{r} +7 \\ \hline \end{array}$$



6

$$\begin{array}{r} +3 \\ \hline \end{array}$$



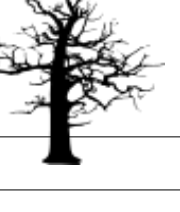
5

$$\begin{array}{r} +5 \\ \hline \end{array}$$




8

$$\begin{array}{r} +9 \\ \hline \end{array}$$



1

$$\begin{array}{r} +9 \\ \hline \end{array}$$



4

$$\begin{array}{r} +7 \\ \hline \end{array}$$



4

$$\begin{array}{r} +5 \\ \hline \end{array}$$



4

$$\begin{array}{r} +7 \\ \hline \end{array}$$



1

$$\begin{array}{r} +4 \\ \hline \end{array}$$



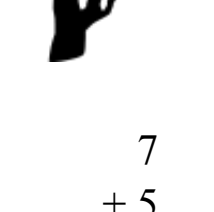
1

$$\begin{array}{r} +7 \\ \hline \end{array}$$



5

$$\begin{array}{r} +4 \\ \hline \end{array}$$



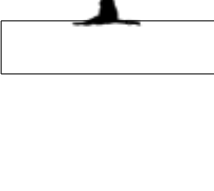
7

$$\begin{array}{r} +5 \\ \hline \end{array}$$



5

$$\begin{array}{r} +5 \\ \hline \end{array}$$



9

$$\begin{array}{r} +5 \\ \hline \end{array}$$

4

$$\begin{array}{r} +9 \\ \hline \end{array}$$

4

$$\begin{array}{r} +9 \\ \hline \end{array}$$

4

$$\begin{array}{r} +9 \\ \hline \end{array}$$

4

$$\begin{array}{r} +9 \\ \hline \end{array}$$

4

$$\begin{array}{r} +9 \\ \hline \end{array}$$

4

$$\begin{array}{r} +9 \\ \hline \end{array}$$

1

$$\begin{array}{r} +1 \\ \hline \end{array}$$

1

$$\begin{array}{r} +1 \\ \hline \end{array}$$

9

$$\begin{array}{r} +6 \\ \hline \end{array}$$

9

$$\begin{array}{r} +9 \\ \hline \end{array}$$

9

$$\begin{array}{r} +6 \\ \hline \end{array}$$

3

$$\begin{array}{r} +6 \\ \hline \end{array}$$

3

$$\begin{array}{r} +6 \\ \hline \end{array}$$

1

$$\begin{array}{r} +9 \\ \hline \end{array}$$

1

$$\begin{array}{r} +9 \\ \hline \end{array}$$