


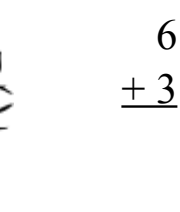
# Por el Bosque Oscuro (H)

Calcula cada suma para hallar tu camino por el bosque



1

$$\begin{array}{r} +9 \\ \hline \end{array}$$

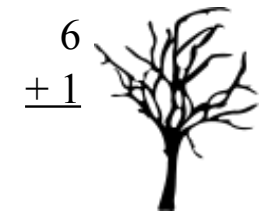


6

$$\begin{array}{r} +3 \\ \hline \end{array}$$



$$\begin{array}{r} 1 \\ +1 \\ \hline \end{array}$$



$$\begin{array}{r} 6 \\ +1 \\ \hline \end{array}$$



$$\begin{array}{r} 3 \\ +9 \\ \hline \end{array}$$



$$\begin{array}{r} 3 \\ +3 \\ \hline \end{array}$$

$$\begin{array}{r} 5 \\ +7 \\ \hline \end{array}$$



$$\begin{array}{r} 5 \\ +1 \\ \hline \end{array}$$



$$\begin{array}{r} 3 \\ +4 \\ \hline \end{array}$$



$$\begin{array}{r} 6 \\ +9 \\ \hline \end{array}$$

$$\begin{array}{r} 4 \\ +2 \\ \hline \end{array}$$



$$\begin{array}{r} 3 \\ +1 \\ \hline \end{array}$$



$$\begin{array}{r} 7 \\ +5 \\ \hline \end{array}$$

$$\begin{array}{r} 4 \\ +8 \\ \hline \end{array}$$



$$\begin{array}{r} 2 \\ +3 \\ \hline \end{array}$$



$$\begin{array}{r} 3 \\ +2 \\ \hline \end{array}$$



$$\begin{array}{r} 9 \\ +1 \\ \hline \end{array}$$

$$\begin{array}{r} 9 \\ +5 \\ \hline \end{array}$$

$$\begin{array}{r} 6 \\ +3 \\ \hline \end{array}$$



$$\begin{array}{r} 5 \\ +1 \\ \hline \end{array}$$



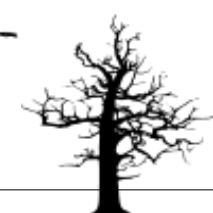
$$\begin{array}{r} 8 \\ +4 \\ \hline \end{array}$$



$$\begin{array}{r} 1 \\ +8 \\ \hline \end{array}$$



$$\begin{array}{r} 6 \\ +6 \\ \hline \end{array}$$



# Por el Bosque Oscuro (H) Respuestas

Calcula cada suma para hallar tu camino por el bosque

5  
 $\begin{array}{r} 5 \\ +5 \\ \hline 10 \end{array}$

1  
 $\begin{array}{r} 1 \\ +1 \\ \hline 2 \end{array}$

1  
 $\begin{array}{r} 1 \\ +9 \\ \hline 10 \end{array}$

3  
 $\begin{array}{r} 3 \\ +9 \\ \hline 12 \end{array}$

6  
 $\begin{array}{r} 6 \\ +1 \\ \hline 7 \end{array}$

6  
 $\begin{array}{r} 6 \\ +3 \\ \hline 9 \end{array}$

3  
 $\begin{array}{r} 3 \\ +3 \\ \hline 6 \end{array}$

5  
 $\begin{array}{r} 5 \\ +7 \\ \hline 12 \end{array}$

3  
 $\begin{array}{r} 3 \\ +4 \\ \hline 7 \end{array}$

5  
 $\begin{array}{r} 5 \\ +1 \\ \hline 6 \end{array}$

6  
 $\begin{array}{r} 6 \\ +2 \\ \hline 8 \end{array}$

3  
 $\begin{array}{r} 3 \\ +1 \\ \hline 4 \end{array}$

6  
 $\begin{array}{r} 6 \\ +9 \\ \hline 15 \end{array}$

4  
 $\begin{array}{r} 4 \\ +2 \\ \hline 6 \end{array}$

3  
 $\begin{array}{r} 3 \\ +1 \\ \hline 4 \end{array}$

7  
 $\begin{array}{r} 7 \\ +8 \\ \hline 15 \end{array}$

4  
 $\begin{array}{r} 4 \\ +8 \\ \hline 12 \end{array}$

8  
 $\begin{array}{r} 8 \\ +2 \\ \hline 10 \end{array}$

2  
 $\begin{array}{r} 2 \\ +3 \\ \hline 5 \end{array}$

1  
 $\begin{array}{r} 1 \\ +6 \\ \hline 7 \end{array}$

4  
 $\begin{array}{r} 4 \\ +5 \\ \hline 9 \end{array}$

9  
 $\begin{array}{r} 9 \\ +3 \\ \hline 12 \end{array}$

3  
 $\begin{array}{r} 3 \\ +2 \\ \hline 5 \end{array}$

9  
 $\begin{array}{r} 9 \\ +5 \\ \hline 14 \end{array}$

6  
 $\begin{array}{r} 6 \\ +3 \\ \hline 9 \end{array}$

5  
 $\begin{array}{r} 5 \\ +1 \\ \hline 6 \end{array}$

3  
 $\begin{array}{r} 3 \\ +2 \\ \hline 5 \end{array}$

9  
 $\begin{array}{r} 9 \\ +1 \\ \hline 10 \end{array}$

8  
 $\begin{array}{r} 8 \\ +4 \\ \hline 12 \end{array}$

1  
 $\begin{array}{r} 1 \\ +8 \\ \hline 9 \end{array}$

6  
 $\begin{array}{r} 6 \\ +6 \\ \hline 12 \end{array}$