


# Por el Bosque Oscuro (H)

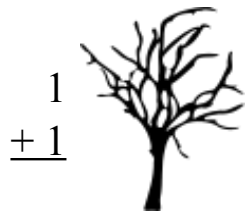
Calcula cada suma para hallar tu camino por el bosque



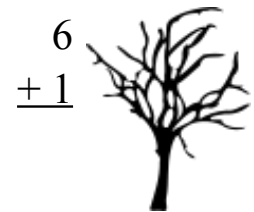
$$\begin{array}{r} 1 \\ +9 \\ \hline \end{array}$$



$$\begin{array}{r} 5 \\ +5 \\ \hline \end{array}$$



$$\begin{array}{r} 1 \\ +1 \\ \hline \end{array}$$



$$\begin{array}{r} 6 \\ +1 \\ \hline \end{array}$$

$$\begin{array}{r} 6 \\ +3 \\ \hline \end{array}$$



$$\begin{array}{r} 3 \\ +9 \\ \hline \end{array}$$



$$\begin{array}{r} 3 \\ +3 \\ \hline \end{array}$$



$$\begin{array}{r} 5 \\ +7 \\ \hline \end{array}$$



$$\begin{array}{r} 3 \\ +4 \\ \hline \end{array}$$



$$\begin{array}{r} 5 \\ +1 \\ \hline \end{array}$$

$$\begin{array}{r} 6 \\ +9 \\ \hline \end{array}$$

$$\begin{array}{r} 4 \\ +2 \\ \hline \end{array}$$



$$\begin{array}{r} 3 \\ +1 \\ \hline \end{array}$$



$$\begin{array}{r} 4 \\ +8 \\ \hline \end{array}$$



$$\begin{array}{r} 2 \\ +3 \\ \hline \end{array}$$



$$\begin{array}{r} 1 \\ +6 \\ \hline \end{array}$$



$$\begin{array}{r} 7 \\ +5 \\ \hline \end{array}$$



$$\begin{array}{r} 9 \\ +5 \\ \hline \end{array}$$

$$\begin{array}{r} 6 \\ +3 \\ \hline \end{array}$$



$$\begin{array}{r} 9 \\ +1 \\ \hline \end{array}$$

$$\begin{array}{r} 5 \\ +1 \\ \hline \end{array}$$



$$\begin{array}{r} 8 \\ +4 \\ \hline \end{array}$$



$$\begin{array}{r} 1 \\ +8 \\ \hline \end{array}$$



$$\begin{array}{r} 6 \\ +6 \\ \hline \end{array}$$

