

Por el Bosque Oscuro (J)

Calcula cada suma para hallar tu camino por el bosque



$$\begin{array}{r} 9 \\ +3 \\ \hline \end{array}$$

$$\begin{array}{r} 5 \\ +7 \\ \hline \end{array}$$

$$\begin{array}{r} 5 \\ +2 \\ \hline \end{array}$$



$$\begin{array}{r} 6 \\ +1 \\ \hline \end{array}$$



$$\begin{array}{r} 9 \\ +7 \\ \hline \end{array}$$



$$\begin{array}{r} 6 \\ +6 \\ \hline \end{array}$$



$$\begin{array}{r} 2 \\ +9 \\ \hline \end{array}$$



$$\begin{array}{r} 9 \\ +8 \\ \hline \end{array}$$



$$\begin{array}{r} 7 \\ +1 \\ \hline \end{array}$$



$$\begin{array}{r} 1 \\ +8 \\ \hline \end{array}$$

$$\begin{array}{r} 4 \\ +1 \\ \hline \end{array}$$

$$\begin{array}{r} 2 \\ +3 \\ \hline \end{array}$$



$$\begin{array}{r} 2 \\ +1 \\ \hline \end{array}$$



$$\begin{array}{r} 6 \\ +6 \\ \hline \end{array}$$



$$\begin{array}{r} 7 \\ +9 \\ \hline \end{array}$$

$$\begin{array}{r} 9 \\ +3 \\ \hline \end{array}$$

$$\begin{array}{r} 9 \\ +2 \\ \hline \end{array}$$



$$\begin{array}{r} 9 \\ +3 \\ \hline \end{array}$$



$$\begin{array}{r} 4 \\ +4 \\ \hline \end{array}$$

$$\begin{array}{r} 6 \\ +8 \\ \hline \end{array}$$

$$\begin{array}{r} 1 \\ +6 \\ \hline \end{array}$$



$$\begin{array}{r} 1 \\ +9 \\ \hline \end{array}$$




$$\begin{array}{r} 4 \\ +9 \\ \hline \end{array}$$



$$\begin{array}{r} 2 \\ +3 \\ \hline \end{array}$$




$$\begin{array}{r} 1 \\ +8 \\ \hline \end{array}$$







Por el Bosque Oscuro (J) Respuestas


Calcula cada suma para hallar tu camino por el bosque



$$\begin{array}{r} 9 \\ +3 \\ \hline 12 \end{array}$$


$$\begin{array}{r} 5 \\ +7 \\ \hline 12 \end{array}$$


$$\begin{array}{r} 5 \\ +2 \\ \hline 7 \end{array}$$
$$\begin{array}{r} 6 \\ +1 \\ \hline 7 \end{array}$$
$$\begin{array}{r} 9 \\ +7 \\ \hline 16 \end{array}$$




$$\begin{array}{r} 6 \\ +6 \\ \hline 12 \end{array}$$





$$\begin{array}{r} 2 \\ +9 \\ \hline 11 \end{array}$$




$$\begin{array}{r} 9 \\ +8 \\ \hline 17 \end{array}$$




$$\begin{array}{r} 7 \\ +1 \\ \hline 8 \end{array}$$


$$\begin{array}{r} 4 \\ +1 \\ \hline 5 \end{array}$$
$$\begin{array}{r} 2 \\ +3 \\ \hline 5 \end{array}$$



$$\begin{array}{r} 2 \\ +1 \\ \hline 3 \end{array}$$


$$\begin{array}{r} 9 \\ +3 \\ \hline 12 \end{array}$$
$$\begin{array}{r} 6 \\ +6 \\ \hline 12 \end{array}$$
$$\begin{array}{r} 9 \\ +2 \\ \hline 11 \end{array}$$



$$\begin{array}{r} 7 \\ +9 \\ \hline 16 \end{array}$$
$$\begin{array}{r} 9 \\ +3 \\ \hline 12 \end{array}$$


$$\begin{array}{r} 4 \\ +3 \\ \hline 7 \end{array}$$
$$\begin{array}{r} 1 \\ +6 \\ \hline 7 \end{array}$$
$$\begin{array}{r} 4 \\ +4 \\ \hline 8 \end{array}$$
$$\begin{array}{r} 6 \\ +8 \\ \hline 14 \end{array}$$

$$\begin{array}{r} 1 \\ +9 \\ \hline 10 \end{array}$$


$$\begin{array}{r} 4 \\ +9 \\ \hline 13 \end{array}$$


$$\begin{array}{r} 2 \\ +3 \\ \hline 5 \end{array}$$


$$\begin{array}{r} 1 \\ +8 \\ \hline 9 \end{array}$$