

Por el Bosque Oscuro (A)

Calcula cada suma para hallar tu camino por el bosque



$$\begin{array}{r} 4 \\ +1 \\ \hline \end{array}$$

$$\begin{array}{r} 9 \\ +3 \\ \hline \end{array}$$

$$\begin{array}{r} 9 \\ +4 \\ \hline \end{array}$$



$$\begin{array}{r} 2 \\ +8 \\ \hline \end{array}$$



$$\begin{array}{r} 7 \\ +1 \\ \hline \end{array}$$



$$\begin{array}{r} 2 \\ +1 \\ \hline \end{array}$$



$$\begin{array}{r} 1 \\ +3 \\ \hline \end{array}$$



$$\begin{array}{r} 5 \\ +8 \\ \hline \end{array}$$



$$\begin{array}{r} 1 \\ +4 \\ \hline \end{array}$$



$$\begin{array}{r} 9 \\ +1 \\ \hline \end{array}$$

$$\begin{array}{r} 4 \\ +3 \\ \hline \end{array}$$

$$\begin{array}{r} 3 \\ +4 \\ \hline \end{array}$$



$$\begin{array}{r} 2 \\ +3 \\ \hline \end{array}$$



$$\begin{array}{r} 5 \\ +9 \\ \hline \end{array}$$



$$\begin{array}{r} 1 \\ +1 \\ \hline \end{array}$$



$$\begin{array}{r} 2 \\ +6 \\ \hline \end{array}$$



$$\begin{array}{r} 9 \\ +9 \\ \hline \end{array}$$



$$\begin{array}{r} 1 \\ +7 \\ \hline \end{array}$$

$$\begin{array}{r} 6 \\ +6 \\ \hline \end{array}$$



$$\begin{array}{r} 9 \\ +3 \\ \hline \end{array}$$

$$\begin{array}{r} 1 \\ +9 \\ \hline \end{array}$$




$$\begin{array}{r} 8 \\ +7 \\ \hline \end{array}$$



$$\begin{array}{r} 1 \\ +7 \\ \hline \end{array}$$



$$\begin{array}{r} 5 \\ +2 \\ \hline \end{array}$$



Por el Bosque Oscuro (A) Respuestas

Calcula cada suma para hallar tu camino por el bosque

4
+1
5

9
+3
12

2
+8
10

9
+4
13

7
+1
8

2
+1
3

1
+3
4

5
+8
13

9
+1
10

2
+3
5

4
+3
7

9
+9
18

5
+1
6

2
+6
8

1
+1
2

2
+2
4

9
+3
12

1
+6
7

2
+7
9

1
+9
10

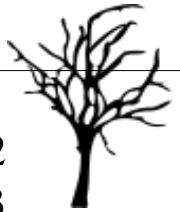
1
+7
8

8
+7
15

5
+2
7

Por el Bosque Oscuro (B)

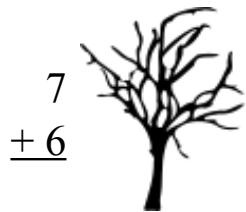
Calcula cada suma para hallar tu camino por el bosque



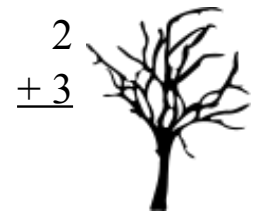
$$\begin{array}{r} 2 \\ +3 \\ \hline \end{array}$$



$$\begin{array}{r} 3 \\ +3 \\ \hline \end{array}$$



$$\begin{array}{r} 7 \\ +6 \\ \hline \end{array}$$



$$\begin{array}{r} 2 \\ +3 \\ \hline \end{array}$$

$$\begin{array}{r} 5 \\ +7 \\ \hline \end{array}$$



$$\begin{array}{r} 5 \\ +9 \\ \hline \end{array}$$



$$\begin{array}{r} 1 \\ +7 \\ \hline \end{array}$$



$$\begin{array}{r} 3 \\ +2 \\ \hline \end{array}$$



$$\begin{array}{r} 6 \\ +6 \\ \hline \end{array}$$



$$\begin{array}{r} 2 \\ +7 \\ \hline \end{array}$$

$$\begin{array}{r} 4 \\ +8 \\ \hline \end{array}$$

$$\begin{array}{r} 5 \\ +6 \\ \hline \end{array}$$



$$\begin{array}{r} 2 \\ +9 \\ \hline \end{array}$$



$$\begin{array}{r} 4 \\ +8 \\ \hline \end{array}$$



$$\begin{array}{r} 5 \\ +9 \\ \hline \end{array}$$



$$\begin{array}{r} 3 \\ +8 \\ \hline \end{array}$$



$$\begin{array}{r} 3 \\ +8 \\ \hline \end{array}$$



$$\begin{array}{r} 7 \\ +3 \\ \hline \end{array}$$

$$\begin{array}{r} 2 \\ +4 \\ \hline \end{array}$$



$$\begin{array}{r} 6 \\ +2 \\ \hline \end{array}$$

$$\begin{array}{r} 2 \\ +9 \\ \hline \end{array}$$



$$\begin{array}{r} 4 \\ +3 \\ \hline \end{array}$$



$$\begin{array}{r} 3 \\ +5 \\ \hline \end{array}$$




$$\begin{array}{r} 6 \\ +1 \\ \hline \end{array}$$







Por el Bosque Oscuro (B) Respuestas


Calcula cada suma para hallar tu camino por el bosque



$$\begin{array}{r} 3 \\ +3 \\ \hline 6 \end{array}$$


$$\begin{array}{r} 7 \\ +6 \\ \hline 13 \end{array}$$


$$\begin{array}{r} 2 \\ +3 \\ \hline 5 \end{array}$$
$$\begin{array}{r} 5 \\ +7 \\ \hline 12 \end{array}$$


$$\begin{array}{r} 5 \\ +9 \\ \hline 14 \end{array}$$




$$\begin{array}{r} 1 \\ +7 \\ \hline 8 \end{array}$$





$$\begin{array}{r} 3 \\ +2 \\ \hline 5 \end{array}$$




$$\begin{array}{r} 6 \\ +6 \\ \hline 12 \end{array}$$




$$\begin{array}{r} 2 \\ +7 \\ \hline 9 \end{array}$$


$$\begin{array}{r} 4 \\ +8 \\ \hline 12 \end{array}$$
$$\begin{array}{r} 5 \\ +6 \\ \hline 11 \end{array}$$


$$\begin{array}{r} 2 \\ +9 \\ \hline 11 \end{array}$$


$$\begin{array}{r} 3 \\ +8 \\ \hline 11 \end{array}$$
$$\begin{array}{r} 4 \\ +8 \\ \hline 12 \end{array}$$
$$\begin{array}{r} 5 \\ +9 \\ \hline 14 \end{array}$$


$$\begin{array}{r} 3 \\ +8 \\ \hline 11 \end{array}$$
$$\begin{array}{r} 4 \\ +7 \\ \hline 11 \end{array}$$


$$\begin{array}{r} 6 \\ +2 \\ \hline 8 \end{array}$$
$$\begin{array}{r} 7 \\ +3 \\ \hline 10 \end{array}$$
$$\begin{array}{r} 2 \\ +4 \\ \hline 6 \end{array}$$

$$\begin{array}{r} 2 \\ +9 \\ \hline 11 \end{array}$$

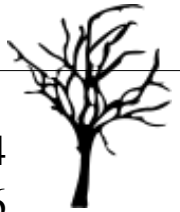

$$\begin{array}{r} 4 \\ +3 \\ \hline 7 \end{array}$$


$$\begin{array}{r} 3 \\ +5 \\ \hline 8 \end{array}$$


$$\begin{array}{r} 6 \\ +1 \\ \hline 7 \end{array}$$

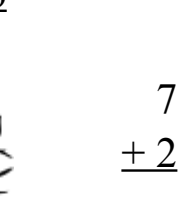
Por el Bosque Oscuro (C)

Calcula cada suma para hallar tu camino por el bosque




4

$$\begin{array}{r} 4 \\ +6 \\ \hline \end{array}$$



7

$$\begin{array}{r} 7 \\ +2 \\ \hline \end{array}$$



9

$$\begin{array}{r} 9 \\ +6 \\ \hline \end{array}$$



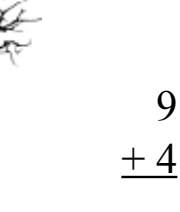
8

$$\begin{array}{r} 8 \\ +3 \\ \hline \end{array}$$




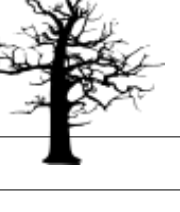
9

$$\begin{array}{r} 9 \\ +4 \\ \hline \end{array}$$



3

$$\begin{array}{r} 3 \\ +8 \\ \hline \end{array}$$



$$\begin{array}{r} 5 \\ +6 \\ \hline \end{array}$$

$$\begin{array}{r} 8 \\ +9 \\ \hline \end{array}$$

$$\begin{array}{r} 9 \\ +2 \\ \hline \end{array}$$

$$\begin{array}{r} 7 \\ +3 \\ \hline \end{array}$$

$$\begin{array}{r} 7 \\ +3 \\ \hline \end{array}$$

$$\begin{array}{r} 2 \\ +6 \\ \hline \end{array}$$

$$\begin{array}{r} 6 \\ +4 \\ \hline \end{array}$$

$$\begin{array}{r} 9 \\ +4 \\ \hline \end{array}$$

$$\begin{array}{r} 7 \\ +2 \\ \hline \end{array}$$

$$\begin{array}{r} 2 \\ +1 \\ \hline \end{array}$$

$$\begin{array}{r} 8 \\ +2 \\ \hline \end{array}$$

$$\begin{array}{r} 2 \\ +6 \\ \hline \end{array}$$

$$\begin{array}{r} 8 \\ +1 \\ \hline \end{array}$$

$$\begin{array}{r} 7 \\ +1 \\ \hline \end{array}$$

$$\begin{array}{r} 2 \\ +2 \\ \hline \end{array}$$

$$\begin{array}{r} 7 \\ +6 \\ \hline \end{array}$$

$$\begin{array}{r} 4 \\ +1 \\ \hline \end{array}$$

$$\begin{array}{r} 2 \\ +5 \\ \hline \end{array}$$

$$\begin{array}{r} 4 \\ +4 \\ \hline \end{array}$$

Por el Bosque Oscuro (C) Respuestas

Calcula cada suma para hallar tu camino por el bosque

$$\begin{array}{r} 5 \\ +6 \\ \hline 11 \end{array}$$

$$\begin{array}{r} 8 \\ +9 \\ \hline 17 \end{array}$$

$$\begin{array}{r} 9 \\ +4 \\ \hline 13 \end{array}$$

$$\begin{array}{r} 4 \\ +6 \\ \hline 10 \end{array}$$

$$\begin{array}{r} 7 \\ +2 \\ \hline 9 \end{array}$$

$$\begin{array}{r} 8 \\ +1 \\ \hline 9 \end{array}$$

$$\begin{array}{r} 9 \\ +2 \\ \hline 11 \end{array}$$

$$\begin{array}{r} 9 \\ +6 \\ \hline 15 \end{array}$$

$$\begin{array}{r} 7 \\ +1 \\ \hline 8 \end{array}$$

$$\begin{array}{r} 8 \\ +3 \\ \hline 11 \end{array}$$

$$\begin{array}{r} 7 \\ +2 \\ \hline 9 \end{array}$$

$$\begin{array}{r} 2 \\ +2 \\ \hline 4 \end{array}$$

$$\begin{array}{r} 7 \\ +3 \\ \hline 10 \end{array}$$

$$\begin{array}{r} 2 \\ +1 \\ \hline 3 \end{array}$$

$$\begin{array}{r} 9 \\ +4 \\ \hline 13 \end{array}$$

$$\begin{array}{r} 7 \\ +6 \\ \hline 13 \end{array}$$

$$\begin{array}{r} 8 \\ +2 \\ \hline 10 \end{array}$$

$$\begin{array}{r} 3 \\ +8 \\ \hline 11 \end{array}$$

$$\begin{array}{r} 2 \\ +5 \\ \hline 7 \end{array}$$

$$\begin{array}{r} 2 \\ +6 \\ \hline 8 \end{array}$$

$$\begin{array}{r} 6 \\ +4 \\ \hline 10 \end{array}$$

$$\begin{array}{r} 4 \\ +1 \\ \hline 5 \end{array}$$

$$\begin{array}{r} 2 \\ +6 \\ \hline 8 \end{array}$$


$$\begin{array}{r} 4 \\ +4 \\ \hline 8 \end{array}$$

$$\begin{array}{r} 2 \\ +2 \\ \hline 4 \end{array}$$

$$\begin{array}{r} 6 \\ +6 \\ \hline 12 \end{array}$$

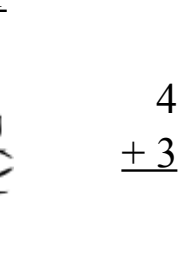
Por el Bosque Oscuro (D)

Calcula cada suma para hallar tu camino por el bosque



1

$$\begin{array}{r} +1 \\ \hline \end{array}$$



4

$$\begin{array}{r} +3 \\ \hline \end{array}$$



9

$$\begin{array}{r} +1 \\ \hline \end{array}$$



3

$$\begin{array}{r} +7 \\ \hline \end{array}$$



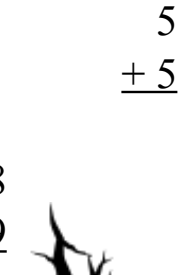
9

$$\begin{array}{r} +7 \\ \hline \end{array}$$



6

$$\begin{array}{r} +3 \\ \hline \end{array}$$



5

$$\begin{array}{r} +5 \\ \hline \end{array}$$



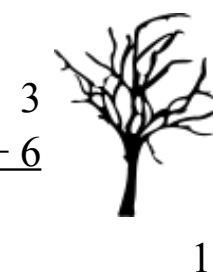
8

$$\begin{array}{r} +9 \\ \hline \end{array}$$



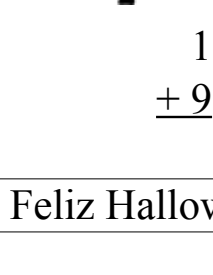
3

$$\begin{array}{r} +6 \\ \hline \end{array}$$



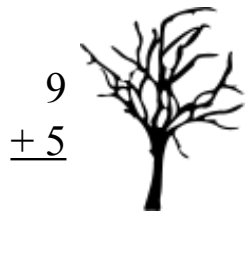
1

$$\begin{array}{r} +9 \\ \hline \end{array}$$



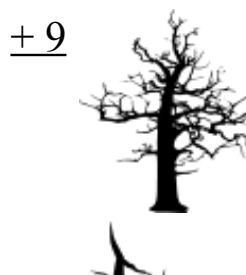
9

$$\begin{array}{r} +5 \\ \hline \end{array}$$



4

$$\begin{array}{r} +9 \\ \hline \end{array}$$



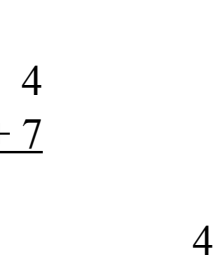
4

$$\begin{array}{r} +9 \\ \hline \end{array}$$



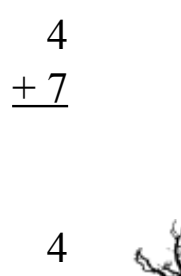
4

$$\begin{array}{r} +7 \\ \hline \end{array}$$



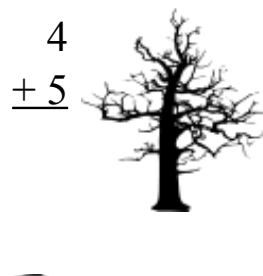
4

$$\begin{array}{r} +7 \\ \hline \end{array}$$



4

$$\begin{array}{r} +5 \\ \hline \end{array}$$



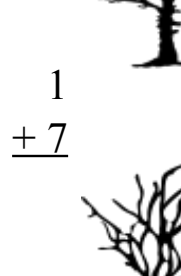
1

$$\begin{array}{r} +4 \\ \hline \end{array}$$



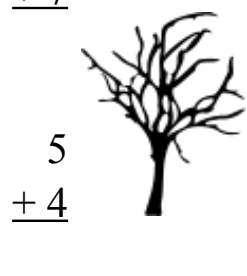
1

$$\begin{array}{r} +7 \\ \hline \end{array}$$



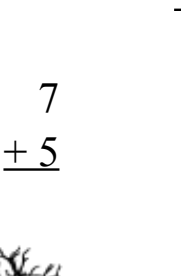
5

$$\begin{array}{r} +4 \\ \hline \end{array}$$



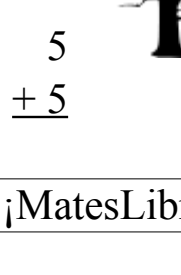
7

$$\begin{array}{r} +5 \\ \hline \end{array}$$



5

$$\begin{array}{r} +5 \\ \hline \end{array}$$



Por el Bosque Oscuro (D) Respuestas

Calcula cada suma para hallar tu camino por el bosque

$$\begin{array}{r} 4 \\ +7 \\ \hline 11 \end{array}$$

$$\begin{array}{r} 9 \\ +5 \\ \hline 14 \end{array}$$

$$\begin{array}{r} 1 \\ +1 \\ \hline 2 \end{array}$$

$$\begin{array}{r} 3 \\ +1 \\ \hline 4 \end{array}$$

$$\begin{array}{r} 4 \\ +3 \\ \hline 7 \end{array}$$

$$\begin{array}{r} 4 \\ +5 \\ \hline 9 \end{array}$$

$$\begin{array}{r} 4 \\ +9 \\ \hline 13 \end{array}$$

$$\begin{array}{r} 9 \\ +1 \\ \hline 10 \end{array}$$

$$\begin{array}{r} 4 \\ +7 \\ \hline 11 \end{array}$$

$$\begin{array}{r} 3 \\ +7 \\ \hline 10 \end{array}$$

$$\begin{array}{r} 4 \\ +9 \\ \hline 13 \end{array}$$

$$\begin{array}{r} 9 \\ +7 \\ \hline 16 \end{array}$$

$$\begin{array}{r} 1 \\ +4 \\ \hline 5 \end{array}$$

$$\begin{array}{r} 1 \\ +9 \\ \hline 10 \end{array}$$

$$\begin{array}{r} 6 \\ +3 \\ \hline 9 \end{array}$$

$$\begin{array}{r} 5 \\ +5 \\ \hline 10 \end{array}$$

$$\begin{array}{r} 1 \\ +7 \\ \hline 8 \end{array}$$

$$\begin{array}{r} 1 \\ +1 \\ \hline 2 \end{array}$$

$$\begin{array}{r} 9 \\ +3 \\ \hline 12 \end{array}$$

$$\begin{array}{r} 9 \\ +9 \\ \hline 18 \end{array}$$

$$\begin{array}{r} 8 \\ +9 \\ \hline 17 \end{array}$$

$$\begin{array}{r} 5 \\ +4 \\ \hline 9 \end{array}$$

$$\begin{array}{r} 9 \\ +6 \\ \hline 15 \end{array}$$

$$\begin{array}{r} 3 \\ +6 \\ \hline 9 \end{array}$$

$$\begin{array}{r} 7 \\ +5 \\ \hline 12 \end{array}$$

$$\begin{array}{r} 5 \\ +4 \\ \hline 9 \end{array}$$

$$\begin{array}{r} 9 \\ +6 \\ \hline 15 \end{array}$$

$$\begin{array}{r} 3 \\ +6 \\ \hline 9 \end{array}$$

$$\begin{array}{r} 5 \\ +5 \\ \hline 10 \end{array}$$

$$\begin{array}{r} 1 \\ +9 \\ \hline 10 \end{array}$$

Por el Bosque Oscuro (E)

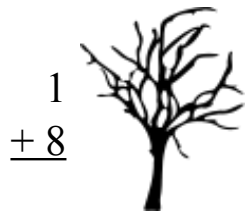
Calcula cada suma para hallar tu camino por el bosque



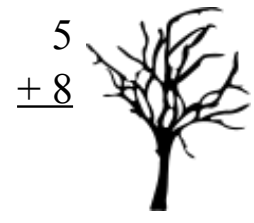
$$\begin{array}{r} 7 \\ +3 \\ \hline \end{array}$$



$$\begin{array}{r} 2 \\ +4 \\ \hline \end{array}$$



$$\begin{array}{r} 1 \\ +8 \\ \hline \end{array}$$



$$\begin{array}{r} 5 \\ +8 \\ \hline \end{array}$$

$$\begin{array}{r} 4 \\ +1 \\ \hline \end{array}$$



$$\begin{array}{r} 6 \\ +2 \\ \hline \end{array}$$



$$\begin{array}{r} 5 \\ +6 \\ \hline \end{array}$$



$$\begin{array}{r} 4 \\ +1 \\ \hline \end{array}$$



$$\begin{array}{r} 1 \\ +5 \\ \hline \end{array}$$



$$\begin{array}{r} 2 \\ +3 \\ \hline \end{array}$$



$$\begin{array}{r} 2 \\ +6 \\ \hline \end{array}$$

$$\begin{array}{r} 5 \\ +9 \\ \hline \end{array}$$



$$\begin{array}{r} 5 \\ +8 \\ \hline \end{array}$$



$$\begin{array}{r} 8 \\ +5 \\ \hline \end{array}$$



$$\begin{array}{r} 1 \\ +4 \\ \hline \end{array}$$



$$\begin{array}{r} 3 \\ +5 \\ \hline \end{array}$$



$$\begin{array}{r} 1 \\ +2 \\ \hline \end{array}$$



$$\begin{array}{r} 3 \\ +1 \\ \hline \end{array}$$

$$\begin{array}{r} 5 \\ +7 \\ \hline \end{array}$$



$$\begin{array}{r} 1 \\ +4 \\ \hline \end{array}$$

$$\begin{array}{r} 6 \\ +7 \\ \hline \end{array}$$



$$\begin{array}{r} 4 \\ +5 \\ \hline \end{array}$$



$$\begin{array}{r} 6 \\ +9 \\ \hline \end{array}$$



$$\begin{array}{r} 4 \\ +6 \\ \hline \end{array}$$



Por el Bosque Oscuro (E) Respuestas

Calcula cada suma para hallar tu camino por el bosque

2
 $\begin{array}{r} 2 \\ +4 \\ \hline 6 \end{array}$

1
 $\begin{array}{r} 1 \\ +8 \\ \hline 9 \end{array}$

7
 $\begin{array}{r} 7 \\ +3 \\ \hline 10 \end{array}$

4
 $\begin{array}{r} 4 \\ +1 \\ \hline 5 \end{array}$

6
 $\begin{array}{r} 6 \\ +2 \\ \hline 8 \end{array}$

5
 $\begin{array}{r} 5 \\ +6 \\ \hline 11 \end{array}$

4
 $\begin{array}{r} 4 \\ +1 \\ \hline 5 \end{array}$

2
 $\begin{array}{r} 2 \\ +3 \\ \hline 5 \end{array}$

1
 $\begin{array}{r} 1 \\ +5 \\ \hline 6 \end{array}$

5
 $\begin{array}{r} 5 \\ +9 \\ \hline 14 \end{array}$

2
 $\begin{array}{r} 2 \\ +6 \\ \hline 8 \end{array}$

5
 $\begin{array}{r} 5 \\ +8 \\ \hline 13 \end{array}$

8
 $\begin{array}{r} 8 \\ +5 \\ \hline 13 \end{array}$

1
 $\begin{array}{r} 1 \\ +4 \\ \hline 5 \end{array}$

3
 $\begin{array}{r} 3 \\ +5 \\ \hline 8 \end{array}$

1
 $\begin{array}{r} 1 \\ +2 \\ \hline 3 \end{array}$

13
 $\begin{array}{r} 13 \\ +2 \\ \hline 15 \end{array}$

3
 $\begin{array}{r} 3 \\ +1 \\ \hline 4 \end{array}$

5
 $\begin{array}{r} 5 \\ +7 \\ \hline 12 \end{array}$

9
 $\begin{array}{r} 9 \\ +4 \\ \hline 13 \end{array}$

1
 $\begin{array}{r} 1 \\ +4 \\ \hline 5 \end{array}$

6
 $\begin{array}{r} 6 \\ +7 \\ \hline 13 \end{array}$

4
 $\begin{array}{r} 4 \\ +5 \\ \hline 9 \end{array}$

3
 $\begin{array}{r} 3 \\ +1 \\ \hline 4 \end{array}$

5
 $\begin{array}{r} 5 \\ +7 \\ \hline 12 \end{array}$


6
 $\begin{array}{r} 6 \\ +9 \\ \hline 15 \end{array}$

4
 $\begin{array}{r} 4 \\ +5 \\ \hline 9 \end{array}$

4
 $\begin{array}{r} 4 \\ +6 \\ \hline 10 \end{array}$

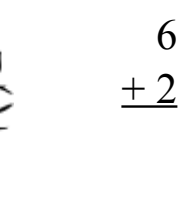
Por el Bosque Oscuro (F)

Calcula cada suma para hallar tu camino por el bosque



2

$$\begin{array}{r} +9 \\ \hline \end{array}$$



6

$$\begin{array}{r} +2 \\ \hline \end{array}$$



8

$$\begin{array}{r} +5 \\ \hline \end{array}$$



1

$$\begin{array}{r} +1 \\ \hline \end{array}$$



1

$$\begin{array}{r} +2 \\ \hline \end{array}$$




6

$$\begin{array}{r} +1 \\ \hline \end{array}$$



5

$$\begin{array}{r} +4 \\ \hline \end{array}$$



6

$$\begin{array}{r} +6 \\ \hline \end{array}$$

$$\begin{array}{r} 5 \\ +5 \\ \hline \end{array}$$



$$\begin{array}{r} 8 \\ +5 \\ \hline \end{array}$$

$$\begin{array}{r} 4 \\ +8 \\ \hline \end{array}$$



$$\begin{array}{r} 8 \\ +5 \\ \hline \end{array}$$

$$\begin{array}{r} 6 \\ +7 \\ \hline \end{array}$$

$$\begin{array}{r} 4 \\ +1 \\ \hline \end{array}$$



$$\begin{array}{r} 9 \\ +6 \\ \hline \end{array}$$

$$\begin{array}{r} 6 \\ +4 \\ \hline \end{array}$$



$$\begin{array}{r} 8 \\ +8 \\ \hline \end{array}$$



$$\begin{array}{r} 5 \\ +2 \\ \hline \end{array}$$

$$\begin{array}{r} 7 \\ +9 \\ \hline \end{array}$$

$$\begin{array}{r} 3 \\ +5 \\ \hline \end{array}$$



$$\begin{array}{r} 2 \\ +6 \\ \hline \end{array}$$

$$\begin{array}{r} 6 \\ +1 \\ \hline \end{array}$$

$$\begin{array}{r} 5 \\ +7 \\ \hline \end{array}$$



$$\begin{array}{r} 8 \\ +6 \\ \hline \end{array}$$



$$\begin{array}{r} 5 \\ +6 \\ \hline \end{array}$$



$$\begin{array}{r} 5 \\ +4 \\ \hline \end{array}$$




$$\begin{array}{r} 9 \\ +9 \\ \hline \end{array}$$







Por el Bosque Oscuro (F) Respuestas


Calcula cada suma para hallar tu camino por el bosque



$$\begin{array}{r} 6 \\ +6 \\ \hline 12 \end{array}$$


$$\begin{array}{r} 5 \\ +5 \\ \hline 10 \end{array}$$


$$\begin{array}{r} 2 \\ +9 \\ \hline 11 \end{array}$$
$$\begin{array}{r} 8 \\ +5 \\ \hline 13 \end{array}$$
$$\begin{array}{r} 6 \\ +2 \\ \hline 8 \end{array}$$




$$\begin{array}{r} 9 \\ +9 \\ \hline 18 \end{array}$$




$$\begin{array}{r} 4 \\ +8 \\ \hline 12 \end{array}$$



$$\begin{array}{r} 8 \\ +5 \\ \hline 13 \end{array}$$

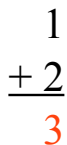


$$\begin{array}{r} 6 \\ +7 \\ \hline 13 \end{array}$$




$$\begin{array}{r} 4 \\ +1 \\ \hline 5 \end{array}$$
$$\begin{array}{r} 9 \\ +6 \\ \hline 15 \end{array}$$




$$\begin{array}{r} 1 \\ +1 \\ \hline 2 \end{array}$$



$$\begin{array}{r} 6 \\ +4 \\ \hline 10 \end{array}$$



$$\begin{array}{r} 8 \\ +8 \\ \hline 16 \end{array}$$
$$\begin{array}{r} 5 \\ +2 \\ \hline 7 \end{array}$$


$$\begin{array}{r} 1 \\ +2 \\ \hline 3 \end{array}$$


$$\begin{array}{r} 7 \\ +9 \\ \hline 16 \end{array}$$



$$\begin{array}{r} 3 \\ +2 \\ \hline 5 \end{array}$$
$$\begin{array}{r} 3 \\ +5 \\ \hline 8 \end{array}$$



$$\begin{array}{r} 6 \\ +1 \\ \hline 7 \end{array}$$

$$\begin{array}{r} 5 \\ +7 \\ \hline 12 \end{array}$$


$$\begin{array}{r} 8 \\ +6 \\ \hline 14 \end{array}$$

$$\begin{array}{r} 8 \\ +6 \\ \hline 14 \end{array}$$



$$\begin{array}{r} 5 \\ +6 \\ \hline 11 \end{array}$$

$$\begin{array}{r} 5 \\ +4 \\ \hline 9 \end{array}$$



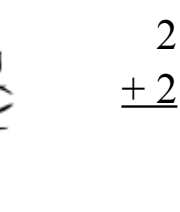
Por el Bosque Oscuro (G)

Calcula cada suma para hallar tu camino por el bosque



6

$$\begin{array}{r} 6 \\ +1 \\ \hline \end{array}$$



2

$$\begin{array}{r} 2 \\ +2 \\ \hline \end{array}$$

4

$$\begin{array}{r} 4 \\ +8 \\ \hline \end{array}$$



3

$$\begin{array}{r} 3 \\ +1 \\ \hline \end{array}$$

1

$$\begin{array}{r} 1 \\ +8 \\ \hline \end{array}$$

9

$$\begin{array}{r} 9 \\ +5 \\ \hline \end{array}$$

7

$$\begin{array}{r} 7 \\ +7 \\ \hline \end{array}$$

2

$$\begin{array}{r} 2 \\ +6 \\ \hline \end{array}$$

6

$$\begin{array}{r} 6 \\ +8 \\ \hline \end{array}$$

2

$$\begin{array}{r} 2 \\ +7 \\ \hline \end{array}$$

1

$$\begin{array}{r} 1 \\ +9 \\ \hline \end{array}$$

4

$$\begin{array}{r} 4 \\ +6 \\ \hline \end{array}$$

1

$$\begin{array}{r} 1 \\ +9 \\ \hline \end{array}$$

6

$$\begin{array}{r} 6 \\ +4 \\ \hline \end{array}$$

5

$$\begin{array}{r} 5 \\ +4 \\ \hline \end{array}$$

6

$$\begin{array}{r} 6 \\ +7 \\ \hline \end{array}$$

6

$$\begin{array}{r} 6 \\ +1 \\ \hline \end{array}$$

1

$$\begin{array}{r} 1 \\ +6 \\ \hline \end{array}$$

8

$$\begin{array}{r} 8 \\ +9 \\ \hline \end{array}$$

8

$$\begin{array}{r} 8 \\ +6 \\ \hline \end{array}$$

8

$$\begin{array}{r} 8 \\ +8 \\ \hline \end{array}$$

2

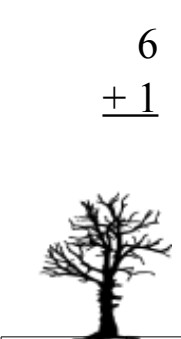

$$\begin{array}{r} 2 \\ +5 \\ \hline \end{array}$$

1

$$\begin{array}{r} 1 \\ +7 \\ \hline \end{array}$$

2

$$\begin{array}{r} 2 \\ +8 \\ \hline \end{array}$$




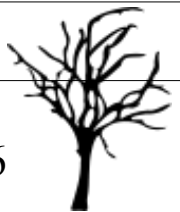

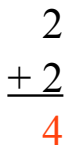
Por el Bosque Oscuro (G) Respuestas



Calcula cada suma para hallar tu camino por el bosque




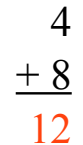

$$\begin{array}{r} 4 \\ +6 \\ \hline 10 \end{array}$$


$$\begin{array}{r} 7 \\ +7 \\ \hline 14 \end{array}$$


$$\begin{array}{r} 6 \\ +1 \\ \hline 7 \end{array}$$

$$\begin{array}{r} 1 \\ +8 \\ \hline 9 \end{array}$$

$$\begin{array}{r} 2 \\ +2 \\ \hline 4 \end{array}$$

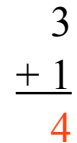

$$\begin{array}{r} 1 \\ +9 \\ \hline 10 \end{array}$$





$$\begin{array}{r} 2 \\ +6 \\ \hline 8 \end{array}$$


$$\begin{array}{r} 4 \\ +8 \\ \hline 12 \end{array}$$



$$\begin{array}{r} 8 \\ +9 \\ \hline 17 \end{array}$$


$$\begin{array}{r} 9 \\ +5 \\ \hline 14 \end{array}$$




$$\begin{array}{r} 3 \\ +1 \\ \hline 4 \end{array}$$




$$\begin{array}{r} 6 \\ +4 \\ \hline 10 \end{array}$$



$$\begin{array}{r} 6 \\ +8 \\ \hline 14 \end{array}$$


$$\begin{array}{r} 8 \\ +6 \\ \hline 14 \end{array}$$



$$\begin{array}{r} 8 \\ +8 \\ \hline 16 \end{array}$$




$$\begin{array}{r} 5 \\ +4 \\ \hline 9 \end{array}$$


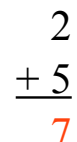


$$\begin{array}{r} 2 \\ +7 \\ \hline 9 \end{array}$$



$$\begin{array}{r} 8 \\ +6 \\ \hline 14 \end{array}$$

$$\begin{array}{r} 2 \\ +5 \\ \hline 7 \end{array}$$


$$\begin{array}{r} 6 \\ +7 \\ \hline 13 \end{array}$$



$$\begin{array}{r} 1 \\ +9 \\ \hline 10 \end{array}$$



$$\begin{array}{r} 2 \\ +5 \\ \hline 7 \end{array}$$


$$\begin{array}{r} 6 \\ +1 \\ \hline 7 \end{array}$$



$$\begin{array}{r} 1 \\ +6 \\ \hline 7 \end{array}$$

$$\begin{array}{r} 1 \\ +7 \\ \hline 8 \end{array}$$


$$\begin{array}{r} 7 \\ +8 \\ \hline 15 \end{array}$$


$$\begin{array}{r} 2 \\ +8 \\ \hline 10 \end{array}$$



$$\begin{array}{r} 1 \\ +6 \\ \hline 7 \end{array}$$


$$\begin{array}{r} 2 \\ +8 \\ \hline 10 \end{array}$$


$$\begin{array}{r} 2 \\ +8 \\ \hline 10 \end{array}$$

Por el Bosque Oscuro (H)

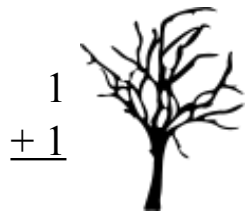
Calcula cada suma para hallar tu camino por el bosque



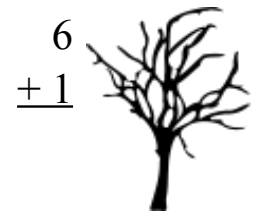
$$\begin{array}{r} 1 \\ +9 \\ \hline \end{array}$$



$$\begin{array}{r} 5 \\ +5 \\ \hline \end{array}$$



$$\begin{array}{r} 1 \\ +1 \\ \hline \end{array}$$



$$\begin{array}{r} 6 \\ +1 \\ \hline \end{array}$$

$$\begin{array}{r} 6 \\ +3 \\ \hline \end{array}$$



$$\begin{array}{r} 3 \\ +9 \\ \hline \end{array}$$



$$\begin{array}{r} 3 \\ +3 \\ \hline \end{array}$$



$$\begin{array}{r} 5 \\ +7 \\ \hline \end{array}$$



$$\begin{array}{r} 3 \\ +4 \\ \hline \end{array}$$



$$\begin{array}{r} 5 \\ +1 \\ \hline \end{array}$$

$$\begin{array}{r} 6 \\ +9 \\ \hline \end{array}$$

$$\begin{array}{r} 4 \\ +2 \\ \hline \end{array}$$



$$\begin{array}{r} 3 \\ +1 \\ \hline \end{array}$$



$$\begin{array}{r} 4 \\ +8 \\ \hline \end{array}$$



$$\begin{array}{r} 2 \\ +3 \\ \hline \end{array}$$



$$\begin{array}{r} 1 \\ +6 \\ \hline \end{array}$$



$$\begin{array}{r} 7 \\ +5 \\ \hline \end{array}$$



$$\begin{array}{r} 9 \\ +5 \\ \hline \end{array}$$

$$\begin{array}{r} 6 \\ +3 \\ \hline \end{array}$$



$$\begin{array}{r} 9 \\ +1 \\ \hline \end{array}$$

$$\begin{array}{r} 5 \\ +1 \\ \hline \end{array}$$



$$\begin{array}{r} 8 \\ +4 \\ \hline \end{array}$$



$$\begin{array}{r} 1 \\ +8 \\ \hline \end{array}$$



$$\begin{array}{r} 6 \\ +6 \\ \hline \end{array}$$



Por el Bosque Oscuro (H) Respuestas

Calcula cada suma para hallar tu camino por el bosque

5
 $\begin{array}{r} 5 \\ +5 \\ \hline 10 \end{array}$

1
 $\begin{array}{r} 1 \\ +1 \\ \hline 2 \end{array}$

1
 $\begin{array}{r} 1 \\ +9 \\ \hline 10 \end{array}$

3
 $\begin{array}{r} 3 \\ +9 \\ \hline 12 \end{array}$

6
 $\begin{array}{r} 6 \\ +1 \\ \hline 7 \end{array}$

6
 $\begin{array}{r} 6 \\ +3 \\ \hline 9 \end{array}$

3
 $\begin{array}{r} 3 \\ +3 \\ \hline 6 \end{array}$

5
 $\begin{array}{r} 5 \\ +7 \\ \hline 12 \end{array}$

3
 $\begin{array}{r} 3 \\ +4 \\ \hline 7 \end{array}$

5
 $\begin{array}{r} 5 \\ +1 \\ \hline 6 \end{array}$

6
 $\begin{array}{r} 6 \\ +2 \\ \hline 8 \end{array}$

3
 $\begin{array}{r} 3 \\ +1 \\ \hline 4 \end{array}$

6
 $\begin{array}{r} 6 \\ +9 \\ \hline 15 \end{array}$

4
 $\begin{array}{r} 4 \\ +2 \\ \hline 6 \end{array}$

3
 $\begin{array}{r} 3 \\ +1 \\ \hline 4 \end{array}$

7
 $\begin{array}{r} 7 \\ +8 \\ \hline 15 \end{array}$

4
 $\begin{array}{r} 4 \\ +8 \\ \hline 12 \end{array}$

2
 $\begin{array}{r} 2 \\ +3 \\ \hline 5 \end{array}$

1
 $\begin{array}{r} 1 \\ +6 \\ \hline 7 \end{array}$

7
 $\begin{array}{r} 7 \\ +5 \\ \hline 12 \end{array}$

9
 $\begin{array}{r} 9 \\ +8 \\ \hline 17 \end{array}$

3
 $\begin{array}{r} 3 \\ +3 \\ \hline 6 \end{array}$

9
 $\begin{array}{r} 9 \\ +5 \\ \hline 14 \end{array}$

6
 $\begin{array}{r} 6 \\ +3 \\ \hline 9 \end{array}$

5
 $\begin{array}{r} 5 \\ +1 \\ \hline 6 \end{array}$

3
 $\begin{array}{r} 3 \\ +2 \\ \hline 5 \end{array}$

9
 $\begin{array}{r} 9 \\ +1 \\ \hline 10 \end{array}$

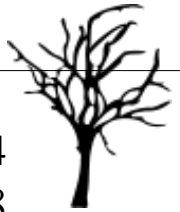
8
 $\begin{array}{r} 8 \\ +4 \\ \hline 12 \end{array}$

1
 $\begin{array}{r} 1 \\ +8 \\ \hline 9 \end{array}$

6
 $\begin{array}{r} 6 \\ +6 \\ \hline 12 \end{array}$

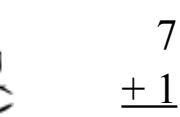
Por el Bosque Oscuro (I)

Calcula cada suma para hallar tu camino por el bosque



4

$$\begin{array}{r} 4 \\ +8 \\ \hline \end{array}$$



7

$$\begin{array}{r} 7 \\ +1 \\ \hline \end{array}$$



$$\begin{array}{r} 7 \\ +5 \\ \hline \end{array}$$



$$\begin{array}{r} 7 \\ +7 \\ \hline \end{array}$$



$$\begin{array}{r} 7 \\ +7 \\ \hline \end{array}$$

$$\begin{array}{r} 5 \\ +6 \\ \hline \end{array}$$



$$\begin{array}{r} 1 \\ +1 \\ \hline \end{array}$$



$$\begin{array}{r} 8 \\ +5 \\ \hline \end{array}$$



$$\begin{array}{r} 6 \\ +2 \\ \hline \end{array}$$



$$\begin{array}{r} 7 \\ +7 \\ \hline \end{array}$$



$$\begin{array}{r} 3 \\ +7 \\ \hline \end{array}$$



$$\begin{array}{r} 4 \\ +4 \\ \hline \end{array}$$



$$\begin{array}{r} 6 \\ +5 \\ \hline \end{array}$$

$$\begin{array}{r} 8 \\ +4 \\ \hline \end{array}$$



$$\begin{array}{r} 3 \\ +2 \\ \hline \end{array}$$



$$\begin{array}{r} 7 \\ +3 \\ \hline \end{array}$$



$$\begin{array}{r} 7 \\ +4 \\ \hline \end{array}$$

$$\begin{array}{r} 9 \\ +3 \\ \hline \end{array}$$

$$\begin{array}{r} 2 \\ +7 \\ \hline \end{array}$$



$$\begin{array}{r} 2 \\ +8 \\ \hline \end{array}$$

$$\begin{array}{r} 8 \\ +6 \\ \hline \end{array}$$



$$\begin{array}{r} 1 \\ +6 \\ \hline \end{array}$$



$$\begin{array}{r} 9 \\ +6 \\ \hline \end{array}$$

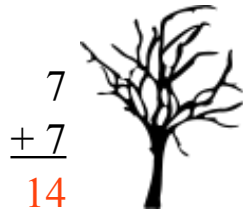


Por el Bosque Oscuro (I) Respuestas


Calcula cada suma para hallar tu camino por el bosque




$$\begin{array}{r} 2 \\ +3 \\ \hline 5 \end{array}$$



$$\begin{array}{r} 7 \\ +7 \\ \hline 14 \end{array}$$



$$\begin{array}{r} 4 \\ +8 \\ \hline 12 \end{array}$$
$$\begin{array}{r} 7 \\ +5 \\ \hline 12 \end{array}$$



$$\begin{array}{r} 7 \\ +1 \\ \hline 8 \end{array}$$



$$\begin{array}{r} 7 \\ +7 \\ \hline 14 \end{array}$$



$$\begin{array}{r} 7 \\ +7 \\ \hline 14 \end{array}$$



$$\begin{array}{r} 5 \\ +6 \\ \hline 11 \end{array}$$



$$\begin{array}{r} 6 \\ +2 \\ \hline 8 \end{array}$$



$$\begin{array}{r} 1 \\ +1 \\ \hline 2 \end{array}$$



$$\begin{array}{r} 3 \\ +7 \\ \hline 10 \end{array}$$



$$\begin{array}{r} 6 \\ +2 \\ \hline 8 \end{array}$$



$$\begin{array}{r} 8 \\ +5 \\ \hline 13 \end{array}$$



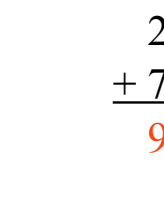
$$\begin{array}{r} 4 \\ +4 \\ \hline 8 \end{array}$$



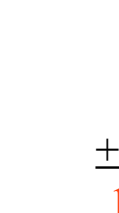
$$\begin{array}{r} 6 \\ +5 \\ \hline 11 \end{array}$$



$$\begin{array}{r} 8 \\ +4 \\ \hline 12 \end{array}$$



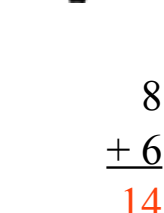
$$\begin{array}{r} 3 \\ +2 \\ \hline 5 \end{array}$$



$$\begin{array}{r} 7 \\ +3 \\ \hline 10 \end{array}$$



$$\begin{array}{r} 7 \\ +4 \\ \hline 11 \end{array}$$



$$\begin{array}{r} 9 \\ +3 \\ \hline 12 \end{array}$$

$$\begin{array}{r} 2 \\ +7 \\ \hline 9 \end{array}$$



$$\begin{array}{r} 9 \\ +6 \\ \hline 15 \end{array}$$

$$\begin{array}{r} 8 \\ +6 \\ \hline 14 \end{array}$$



$$\begin{array}{r} 2 \\ +8 \\ \hline 10 \end{array}$$

$$\begin{array}{r} 1 \\ +6 \\ \hline 7 \end{array}$$



Por el Bosque Oscuro (J)

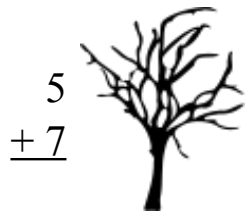
Calcula cada suma para hallar tu camino por el bosque



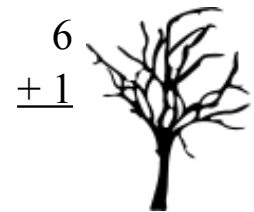
$$\begin{array}{r} 5 \\ +2 \\ \hline \end{array}$$



$$\begin{array}{r} 9 \\ +3 \\ \hline \end{array}$$



$$\begin{array}{r} 5 \\ +7 \\ \hline \end{array}$$



$$\begin{array}{r} 6 \\ +1 \\ \hline \end{array}$$

$$\begin{array}{r} 9 \\ +7 \\ \hline \end{array}$$



$$\begin{array}{r} 6 \\ +6 \\ \hline \end{array}$$



$$\begin{array}{r} 2 \\ +9 \\ \hline \end{array}$$



$$\begin{array}{r} 9 \\ +8 \\ \hline \end{array}$$



$$\begin{array}{r} 1 \\ +8 \\ \hline \end{array}$$



$$\begin{array}{r} 7 \\ +1 \\ \hline \end{array}$$



$$\begin{array}{r} 2 \\ +3 \\ \hline \end{array}$$

$$\begin{array}{r} 4 \\ +1 \\ \hline \end{array}$$



$$\begin{array}{r} 2 \\ +1 \\ \hline \end{array}$$



$$\begin{array}{r} 6 \\ +6 \\ \hline \end{array}$$



$$\begin{array}{r} 9 \\ +2 \\ \hline \end{array}$$



$$\begin{array}{r} 7 \\ +9 \\ \hline \end{array}$$



$$\begin{array}{r} 9 \\ +3 \\ \hline \end{array}$$



$$\begin{array}{r} 4 \\ +4 \\ \hline \end{array}$$

$$\begin{array}{r} 6 \\ +8 \\ \hline \end{array}$$



$$\begin{array}{r} 9 \\ +3 \\ \hline \end{array}$$

$$\begin{array}{r} 1 \\ +6 \\ \hline \end{array}$$



$$\begin{array}{r} 4 \\ +9 \\ \hline \end{array}$$



$$\begin{array}{r} 1 \\ +9 \\ \hline \end{array}$$



$$\begin{array}{r} 2 \\ +3 \\ \hline \end{array}$$



$$\begin{array}{r} 1 \\ +8 \\ \hline \end{array}$$



Por el Bosque Oscuro (J) Respuestas

Calcula cada suma para hallar tu camino por el bosque

9
 $\begin{array}{r} 9 \\ +3 \\ \hline 12 \end{array}$

5
 $\begin{array}{r} 5 \\ +7 \\ \hline 12 \end{array}$

5
 $\begin{array}{r} 5 \\ +2 \\ \hline 7 \end{array}$

6
 $\begin{array}{r} 6 \\ +1 \\ \hline 7 \end{array}$

9
 $\begin{array}{r} 9 \\ +7 \\ \hline 16 \end{array}$

6
 $\begin{array}{r} 6 \\ +6 \\ \hline 12 \end{array}$

2
 $\begin{array}{r} 2 \\ +9 \\ \hline 11 \end{array}$

9
 $\begin{array}{r} 9 \\ +8 \\ \hline 17 \end{array}$

7
 $\begin{array}{r} 7 \\ +1 \\ \hline 8 \end{array}$

1
 $\begin{array}{r} 1 \\ +8 \\ \hline 9 \end{array}$

2
 $\begin{array}{r} 2 \\ +3 \\ \hline 5 \end{array}$

4
 $\begin{array}{r} 4 \\ +1 \\ \hline 5 \end{array}$

2
 $\begin{array}{r} 2 \\ +1 \\ \hline 3 \end{array}$

7
 $\begin{array}{r} 7 \\ +6 \\ \hline 13 \end{array}$

9
 $\begin{array}{r} 9 \\ +6 \\ \hline 15 \end{array}$

9
 $\begin{array}{r} 9 \\ +2 \\ \hline 11 \end{array}$

7
 $\begin{array}{r} 7 \\ +9 \\ \hline 16 \end{array}$

9
 $\begin{array}{r} 9 \\ +3 \\ \hline 12 \end{array}$

4
 $\begin{array}{r} 4 \\ +6 \\ \hline 10 \end{array}$

6
 $\begin{array}{r} 6 \\ +8 \\ \hline 14 \end{array}$

1
 $\begin{array}{r} 1 \\ +9 \\ \hline 10 \end{array}$

1
 $\begin{array}{r} 1 \\ +6 \\ \hline 7 \end{array}$

4
 $\begin{array}{r} 4 \\ +9 \\ \hline 13 \end{array}$

4
 $\begin{array}{r} 4 \\ +4 \\ \hline 8 \end{array}$

6
 $\begin{array}{r} 6 \\ +8 \\ \hline 14 \end{array}$

1
 $\begin{array}{r} 1 \\ +9 \\ \hline 10 \end{array}$

2
 $\begin{array}{r} 2 \\ +3 \\ \hline 5 \end{array}$

1
 $\begin{array}{r} 1 \\ +8 \\ \hline 9 \end{array}$