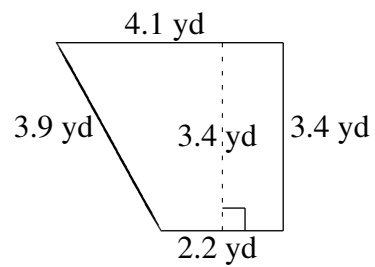
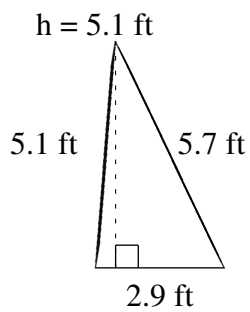
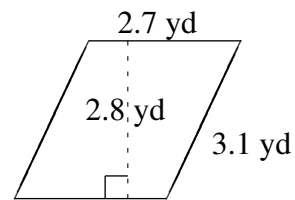
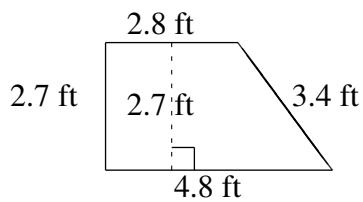
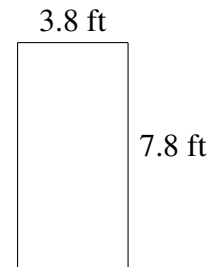
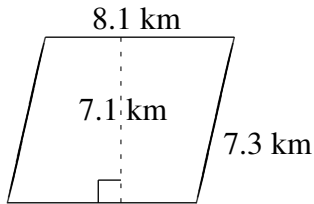


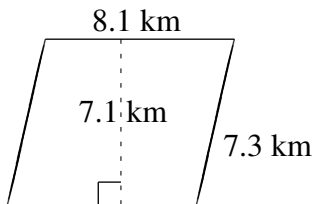
# Área y Perímetro de Formas Varias (B)

Halle el área y el perímetro de cada figura.

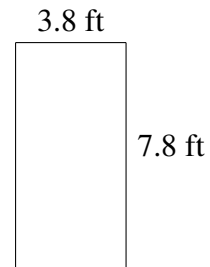


# Área y Perímetro de Formas Varias (B) Respuestas

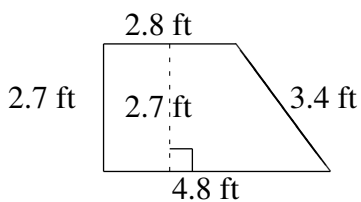
Halle el área y el perímetro de cada figura.



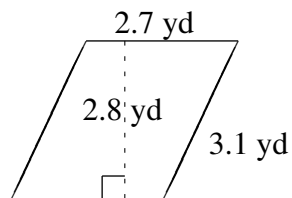
$$A = 57.51 \text{ km}^2$$
$$P = 30.8 \text{ km}$$



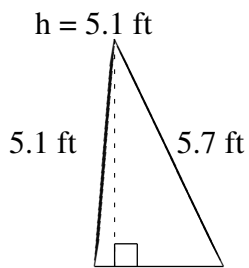
$$A = 29.64 \text{ ft}^2$$
$$P = 23.2 \text{ ft}$$



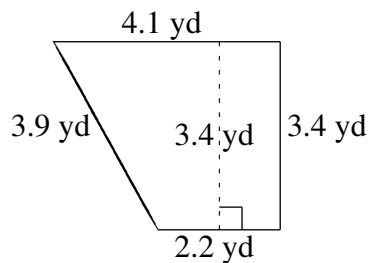
$$A = 10.26 \text{ ft}^2$$
$$P = 13.7 \text{ ft}$$



$$A = 7.56 \text{ yd}^2$$
$$P = 11.6 \text{ yd}$$



$$A = 7.395 \text{ ft}^2$$
$$P = 13.7 \text{ ft}$$



$$A = 10.71 \text{ yd}^2$$
$$P = 13.6 \text{ yd}$$