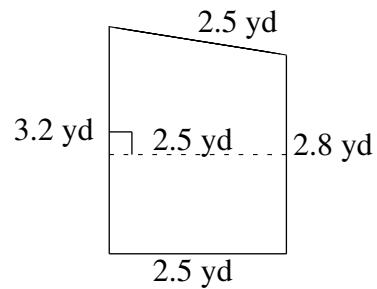
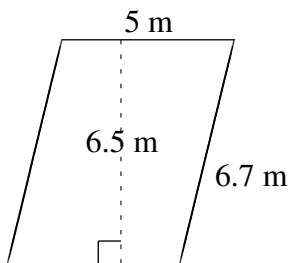
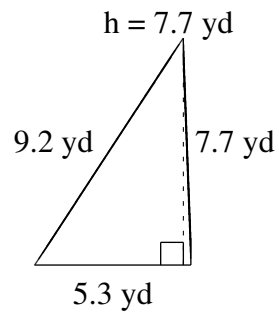
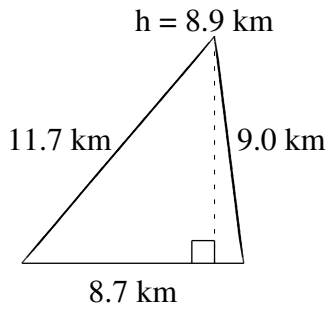
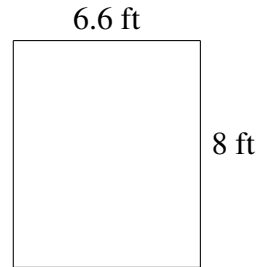
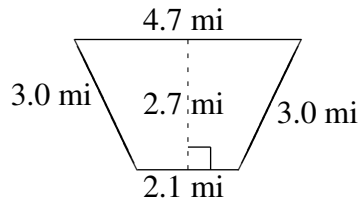


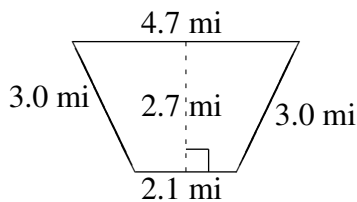
# Área y Perímetro de Formas Varias (C)

Halle el área y el perímetro de cada figura.

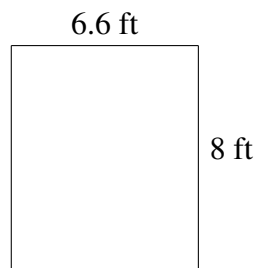


# Área y Perímetro de Formas Varias (C) Respuestas

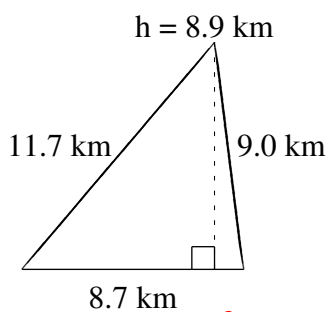
Halle el área y el perímetro de cada figura.



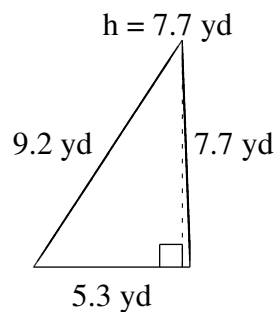
$$A = 9.18 \text{ mi}^2$$
$$P = 12.8 \text{ mi}$$



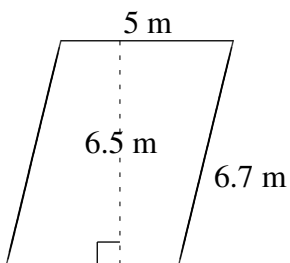
$$A = 52.8 \text{ ft}^2$$
$$P = 29.2 \text{ ft}$$



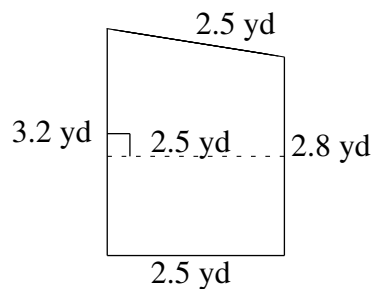
$$A = 38.715 \text{ km}^2$$
$$P = 29.4 \text{ km}$$



$$A = 20.405 \text{ yd}^2$$
$$P = 22.2 \text{ yd}$$



$$A = 32.5 \text{ m}^2$$
$$P = 23.4 \text{ m}$$



$$A = 7.50 \text{ yd}^2$$
$$P = 11.0 \text{ yd}$$