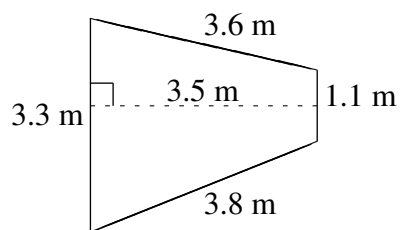
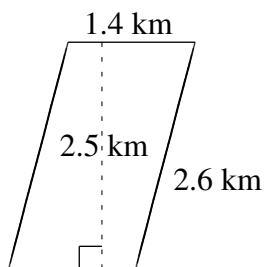
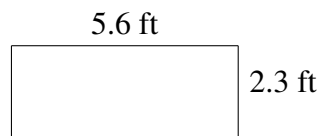
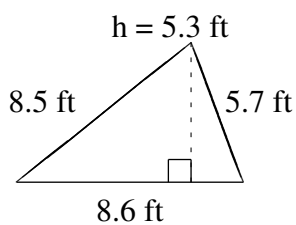
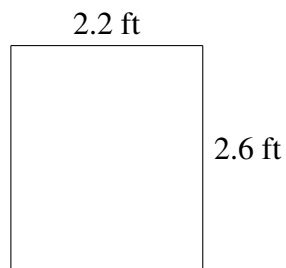
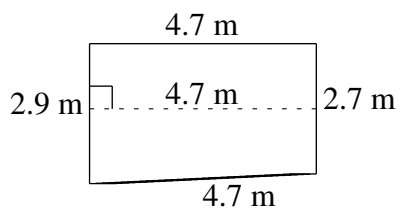


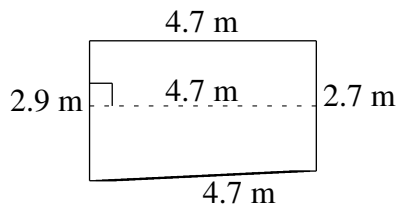
Área y Perímetro de Formas Varias (D)

Halle el área y el perímetro de cada figura.

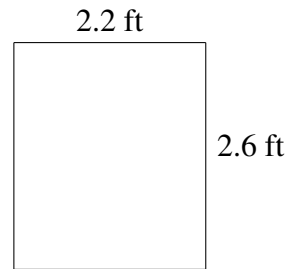


Área y Perímetro de Formas Varias (D) Respuestas

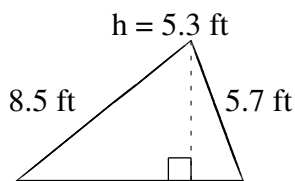
Halle el área y el perímetro de cada figura.




$$A = 13.16 \text{ m}^2$$
$$P = 15.0 \text{ m}$$



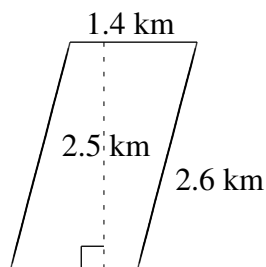
$$A = 5.72 \text{ ft}^2$$
$$P = 9.6 \text{ ft}$$



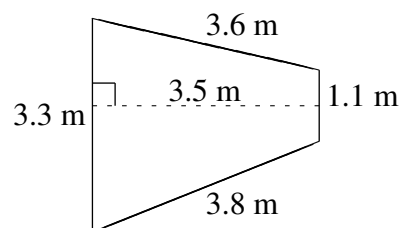
$$A = 22.79 \text{ ft}^2$$
$$P = 22.8 \text{ ft}$$



$$A = 12.88 \text{ ft}^2$$
$$P = 15.8 \text{ ft}$$



$$A = 3.50 \text{ km}^2$$
$$P = 8.0 \text{ km}$$



$$A = 7.70 \text{ m}^2$$
$$P = 11.8 \text{ m}$$