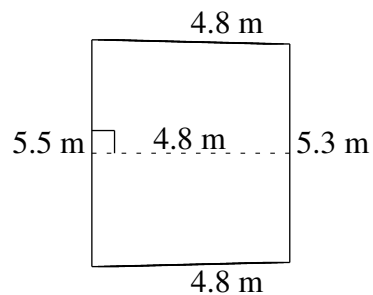
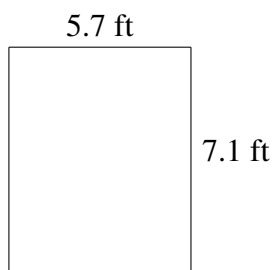
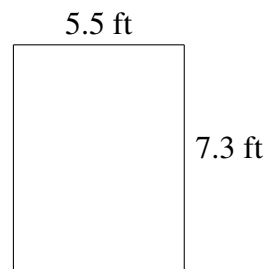
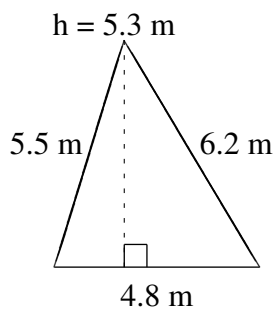
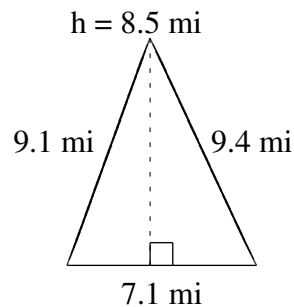
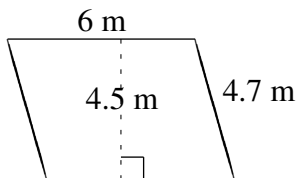


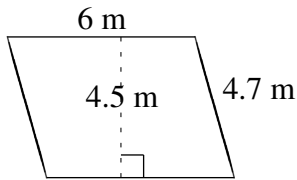
Área y Perímetro de Formas Varias (E)

Halle el área y el perímetro de cada figura.

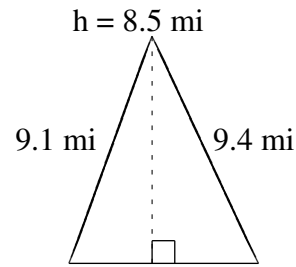


Área y Perímetro de Formas Varias (E) Respuestas

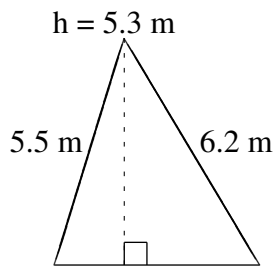
Halle el área y el perímetro de cada figura.



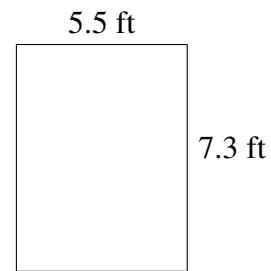
$$A = 27.0 \text{ m}^2$$
$$P = 21.4 \text{ m}$$



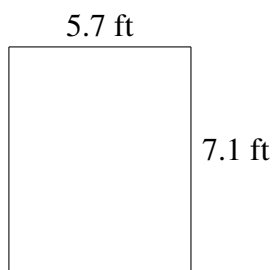
$$A = 30.175 \text{ mi}^2$$
$$P = 25.6 \text{ mi}$$



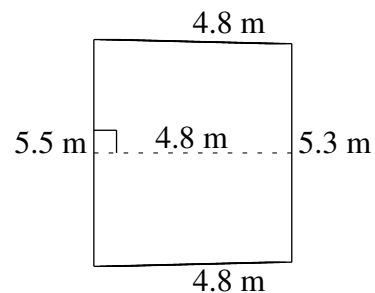
$$A = 12.72 \text{ m}^2$$
$$P = 16.5 \text{ m}$$



$$A = 40.15 \text{ ft}^2$$
$$P = 25.6 \text{ ft}$$



$$A = 40.47 \text{ ft}^2$$
$$P = 25.6 \text{ ft}$$



$$A = 25.92 \text{ m}^2$$
$$P = 20.4 \text{ m}$$