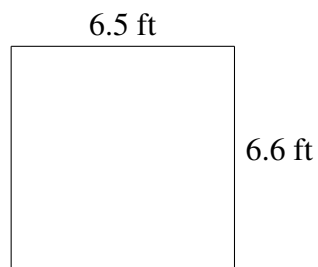
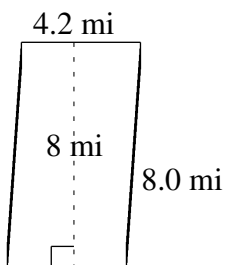
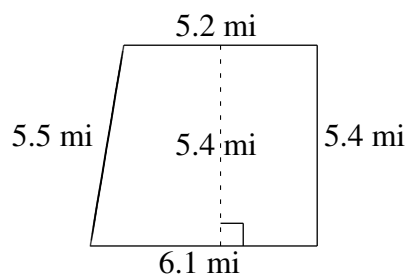
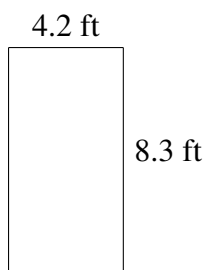
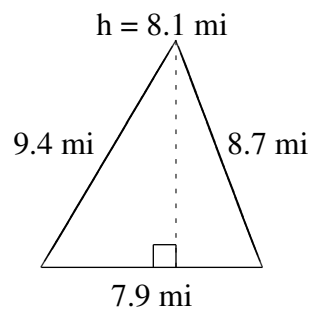
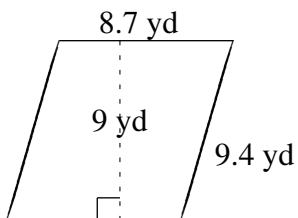


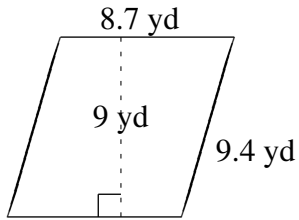
# Área y Perímetro de Formas Varias (F)

Halle el área y el perímetro de cada figura.

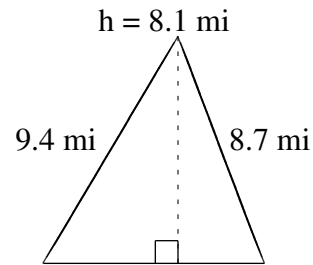


# Área y Perímetro de Formas Varias (F) Respuestas

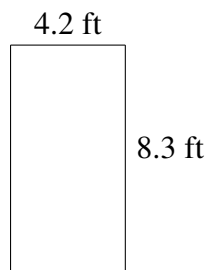
Halle el área y el perímetro de cada figura.



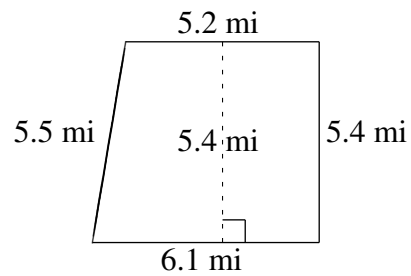
$$A = 78.3 \text{ yd}^2$$
$$P = 36.2 \text{ yd}$$



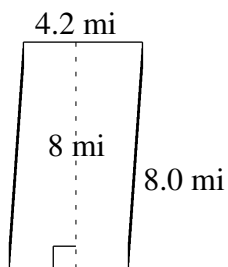
$$A = 31.995 \text{ mi}^2$$
$$P = 26.0 \text{ mi}$$



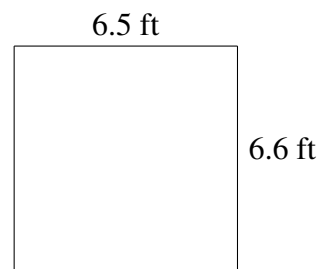
$$A = 34.86 \text{ ft}^2$$
$$P = 25.0 \text{ ft}$$



$$A = 30.51 \text{ mi}^2$$
$$P = 22.2 \text{ mi}$$



$$A = 33.6 \text{ mi}^2$$
$$P = 24.4 \text{ mi}$$



$$A = 42.90 \text{ ft}^2$$
$$P = 26.2 \text{ ft}$$