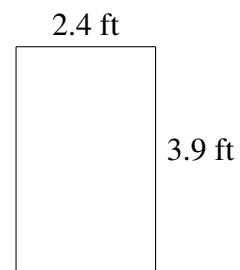
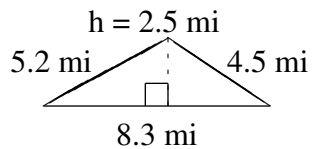
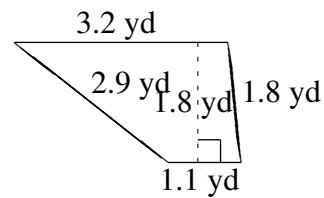
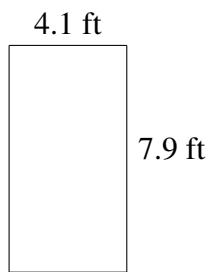
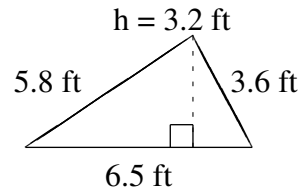
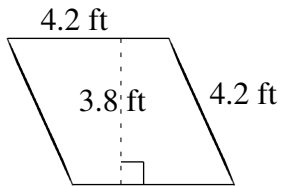


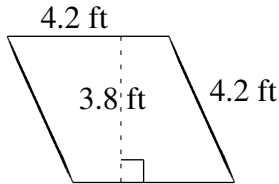
Área y Perímetro de Formas Varias (J)

Halle el área y el perímetro de cada figura.

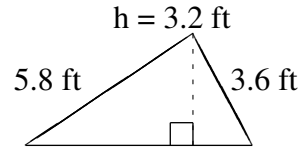


Área y Perímetro de Formas Varias (J) Respuestas

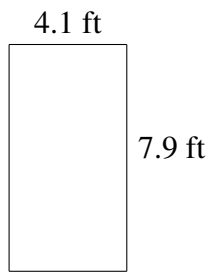
Halle el área y el perímetro de cada figura.



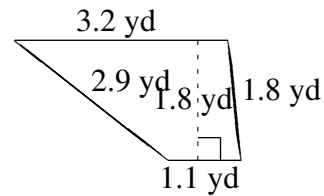
$$A = 15.96 \text{ ft}^2$$
$$P = 16.8 \text{ ft}$$



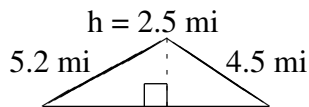
$$A = 10.40 \text{ ft}^2$$
$$P = 15.9 \text{ ft}$$



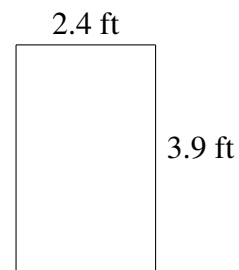
$$A = 32.39 \text{ ft}^2$$
$$P = 24.0 \text{ ft}$$



$$A = 3.87 \text{ yd}^2$$
$$P = 9.0 \text{ yd}$$



$$A = 10.375 \text{ mi}^2$$
$$P = 18.0 \text{ mi}$$



$$A = 9.36 \text{ ft}^2$$
$$P = 12.6 \text{ ft}$$