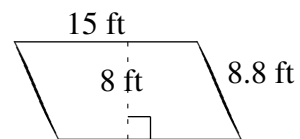
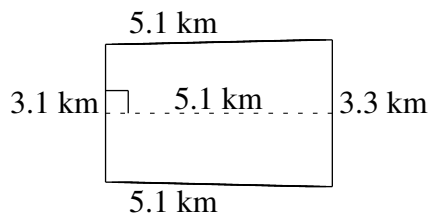
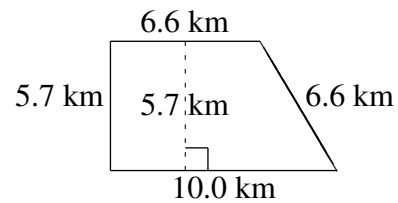
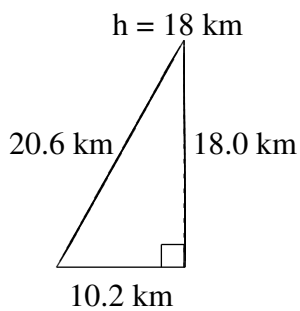
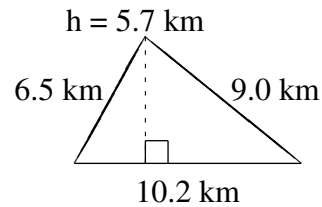
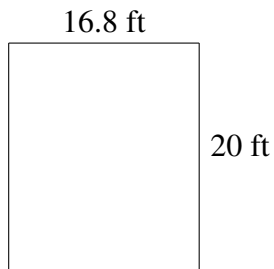


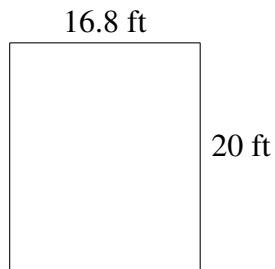
Área y Perímetro de Formas Varias (B)

Halle el área y el perímetro de cada figura.

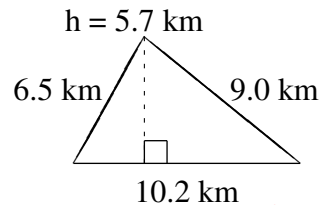


Área y Perímetro de Formas Varias (B) Respuestas

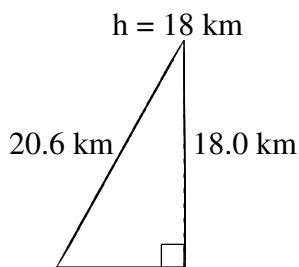
Halle el área y el perímetro de cada figura.



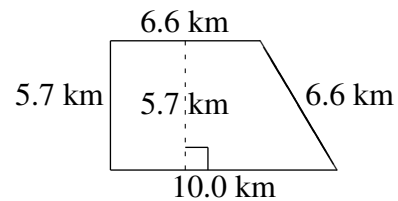
$$A = 336.0 \text{ ft}^2$$
$$P = 73.6 \text{ ft}$$



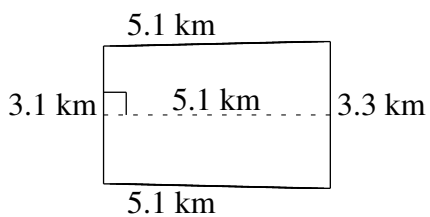
$$A = 29.07 \text{ km}^2$$
$$P = 25.7 \text{ km}$$



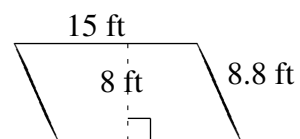
$$A = 91.8 \text{ km}^2$$
$$P = 48.8 \text{ km}$$



$$A = 47.31 \text{ km}^2$$
$$P = 28.9 \text{ km}$$



$$A = 16.32 \text{ km}^2$$
$$P = 16.6 \text{ km}$$



$$A = 120 \text{ ft}^2$$
$$P = 47.6 \text{ ft}$$