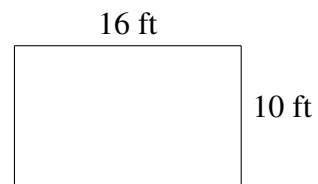
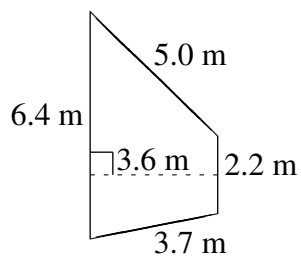
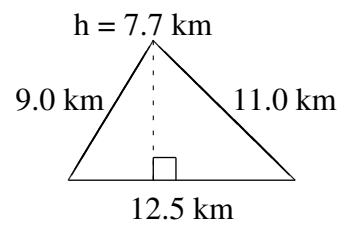
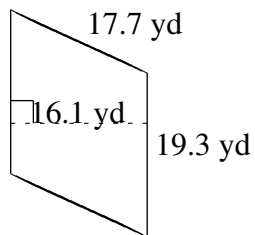
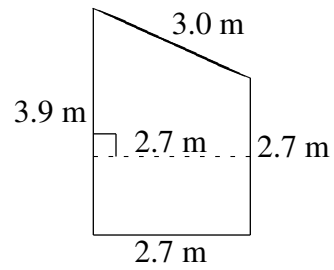
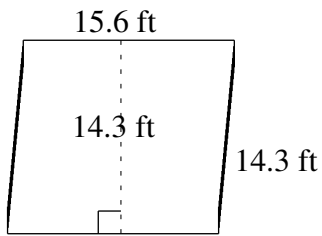


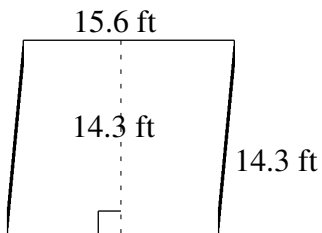
Área y Perímetro de Formas Varias (C)

Halle el área y el perímetro de cada figura.

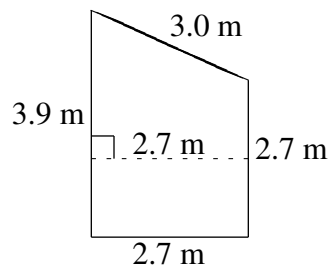


Área y Perímetro de Formas Varias (C) Respuestas

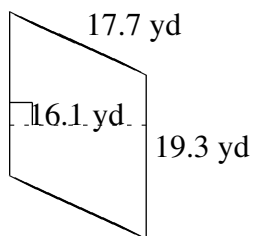
Halle el área y el perímetro de cada figura.



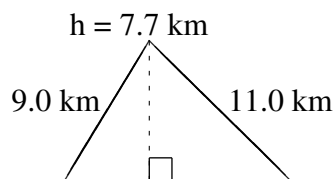
$$A = 223.08 \text{ ft}^2$$
$$P = 59.8 \text{ ft}$$



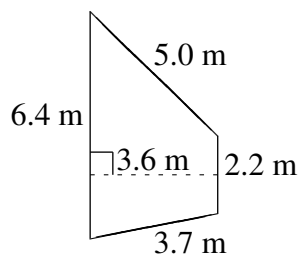
$$A = 8.91 \text{ m}^2$$
$$P = 12.3 \text{ m}$$



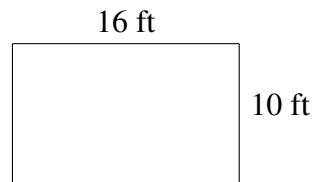
$$A = 310.73 \text{ yd}^2$$
$$P = 74.0 \text{ yd}$$



$$A = 48.125 \text{ km}^2$$
$$P = 32.5 \text{ km}$$



$$A = 15.48 \text{ m}^2$$
$$P = 17.3 \text{ m}$$



$$A = 160 \text{ ft}^2$$
$$P = 52 \text{ ft}$$