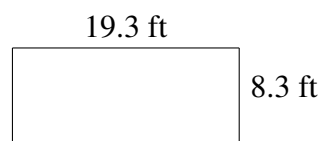
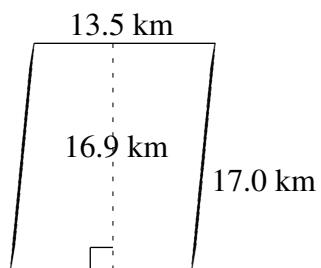
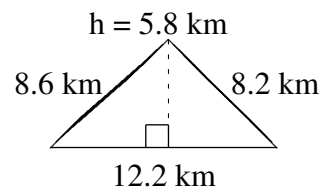
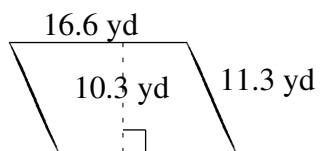
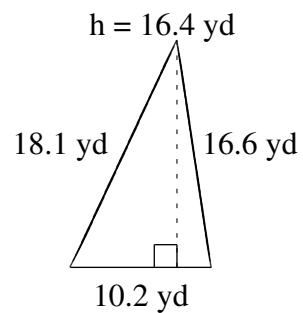
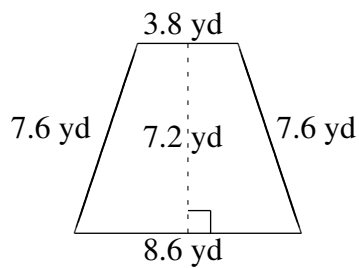


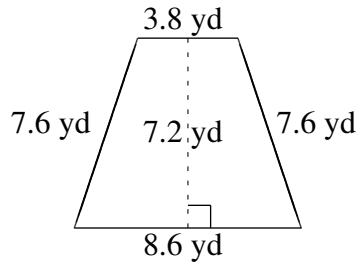
# Área y Perímetro de Formas Varias (D)

Halle el área y el perímetro de cada figura.

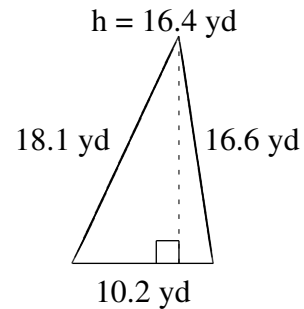


# Área y Perímetro de Formas Varias (D) Respuestas

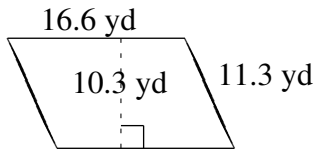
Halle el área y el perímetro de cada figura.



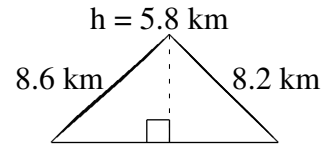
$$A = 44.64 \text{ yd}^2$$
$$P = 27.6 \text{ yd}$$



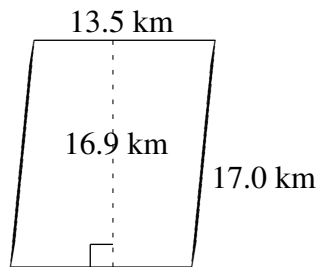
$$A = 83.64 \text{ yd}^2$$
$$P = 44.9 \text{ yd}$$



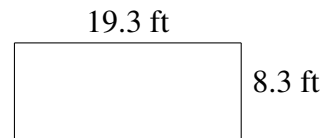
$$A = 170.98 \text{ yd}^2$$
$$P = 55.8 \text{ yd}$$



$$A = 35.38 \text{ km}^2$$
$$P = 29.0 \text{ km}$$



$$A = 228.15 \text{ km}^2$$
$$P = 61.0 \text{ km}$$



$$A = 160.19 \text{ ft}^2$$
$$P = 55.2 \text{ ft}$$