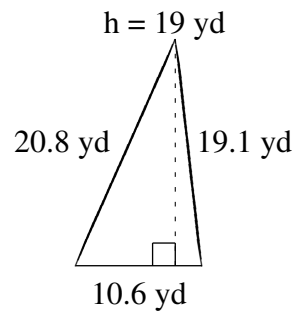
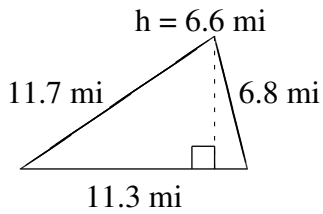
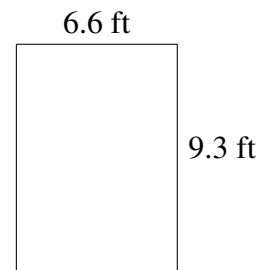
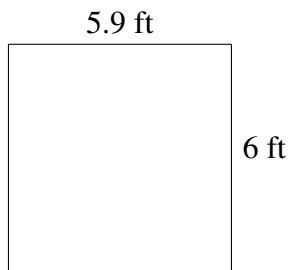
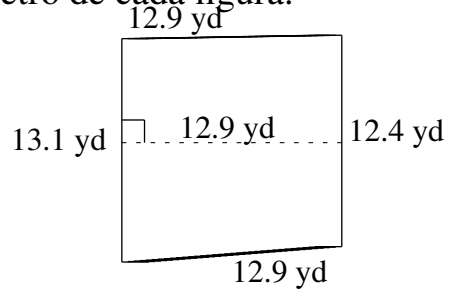
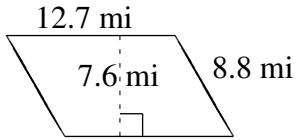


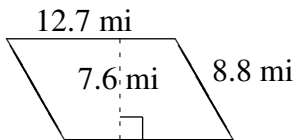
Área y Perímetro de Formas Varias (E)

Halle el área y el perímetro de cada figura.

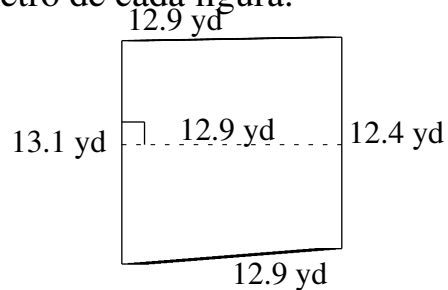


Área y Perímetro de Formas Varias (E) Respuestas

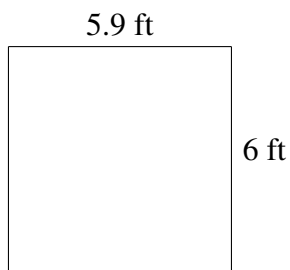
Halle el área y el perímetro de cada figura.



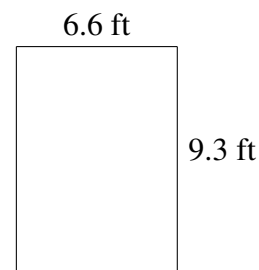
$$A = 96.52 \text{ mi}^2$$
$$P = 43.0 \text{ mi}$$



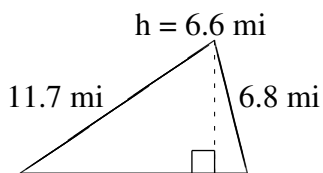
$$A = 164.475 \text{ yd}^2$$
$$P = 51.3 \text{ yd}$$



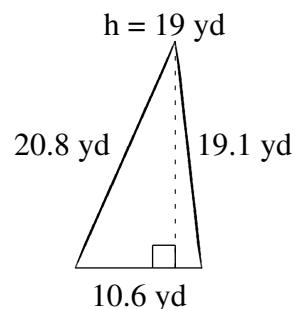
$$A = 35.4 \text{ ft}^2$$
$$P = 23.8 \text{ ft}$$



$$A = 61.38 \text{ ft}^2$$
$$P = 31.8 \text{ ft}$$



$$A = 37.29 \text{ mi}^2$$
$$P = 29.8 \text{ mi}$$



$$A = 100.7 \text{ yd}^2$$
$$P = 50.5 \text{ yd}$$