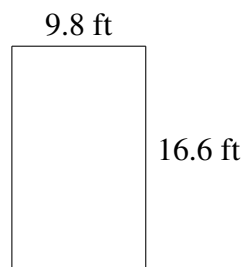
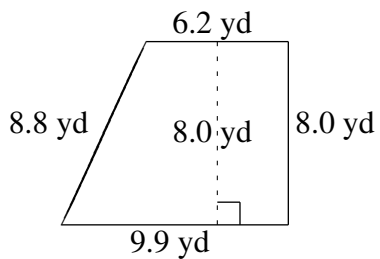
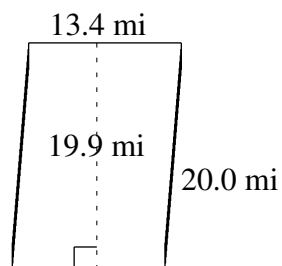
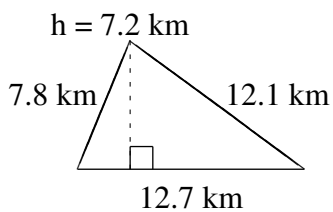
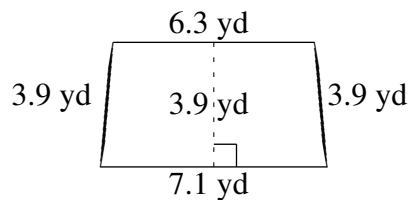
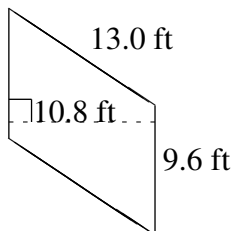


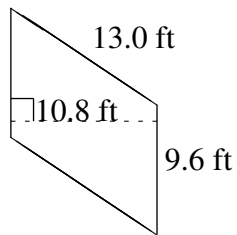
Área y Perímetro de Formas Varias (G)

Halle el área y el perímetro de cada figura.

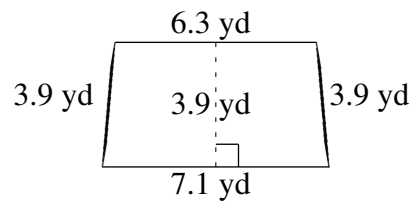


Área y Perímetro de Formas Varias (G) Respuestas

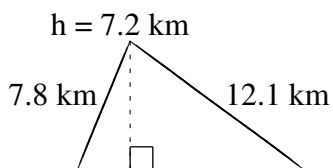
Halle el área y el perímetro de cada figura.



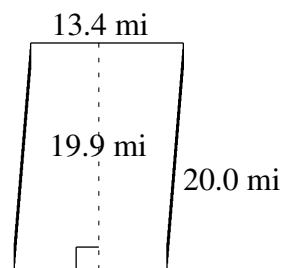
$$A = 103.68 \text{ ft}^2$$
$$P = 45.2 \text{ ft}$$



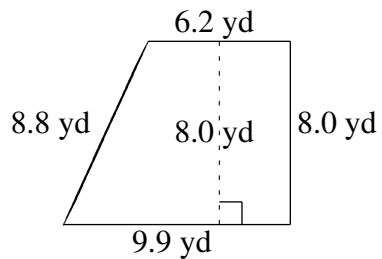
$$A = 26.13 \text{ yd}^2$$
$$P = 21.2 \text{ yd}$$



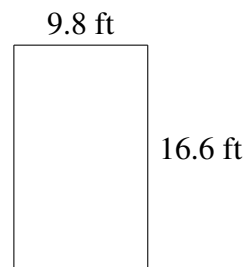
$$A = 45.72 \text{ km}^2$$
$$P = 32.6 \text{ km}$$



$$A = 266.66 \text{ mi}^2$$
$$P = 66.8 \text{ mi}$$



$$A = 64.40 \text{ yd}^2$$
$$P = 32.9 \text{ yd}$$



$$A = 162.68 \text{ ft}^2$$
$$P = 52.8 \text{ ft}$$