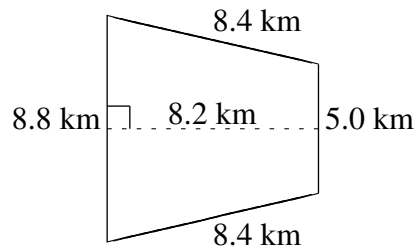
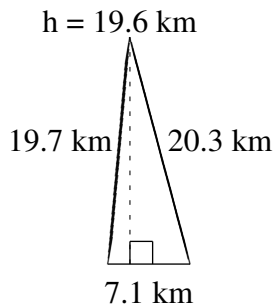
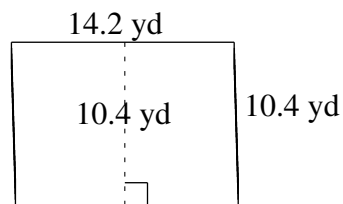
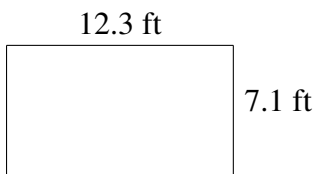
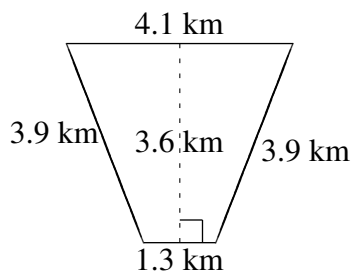
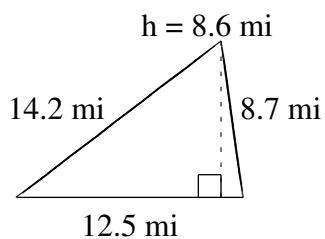


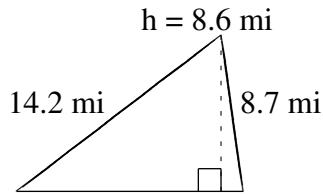
Área y Perímetro de Formas Varias (H)

Halle el área y el perímetro de cada figura.

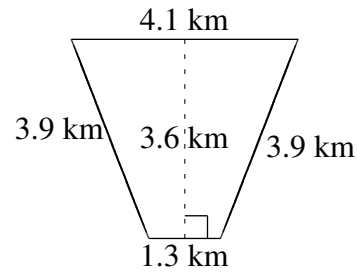


Área y Perímetro de Formas Varias (H) Respuestas

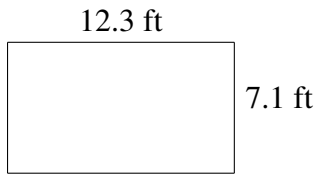
Halle el área y el perímetro de cada figura.



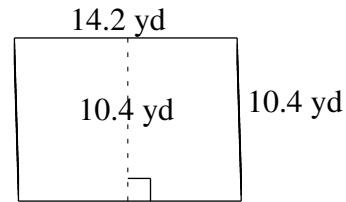
$$A = 53.75 \text{ mi}^2$$
$$P = 35.4 \text{ mi}$$



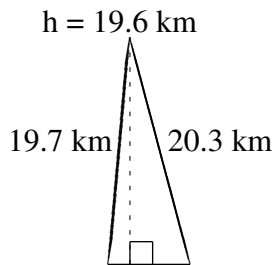
$$A = 9.72 \text{ km}^2$$
$$P = 13.2 \text{ km}$$



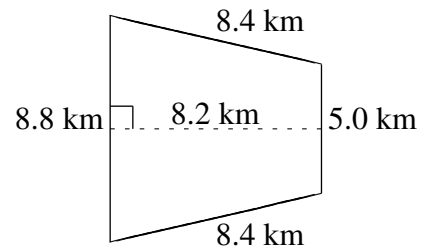
$$A = 87.33 \text{ ft}^2$$
$$P = 38.8 \text{ ft}$$



$$A = 147.68 \text{ yd}^2$$
$$P = 49.2 \text{ yd}$$



$$A = 69.58 \text{ km}^2$$
$$P = 47.1 \text{ km}$$



$$A = 56.58 \text{ km}^2$$
$$P = 30.6 \text{ km}$$