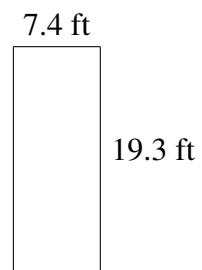
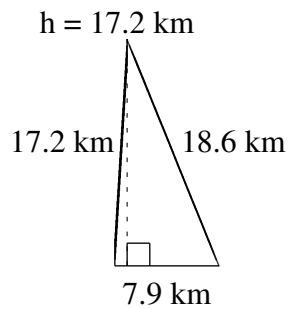
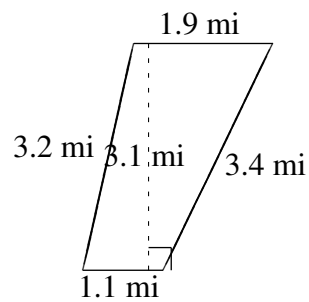
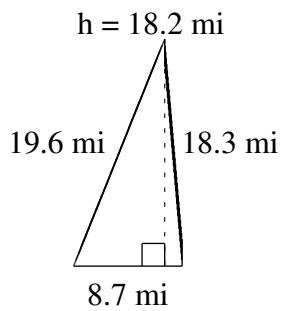
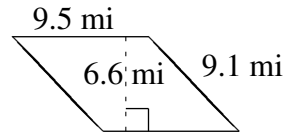
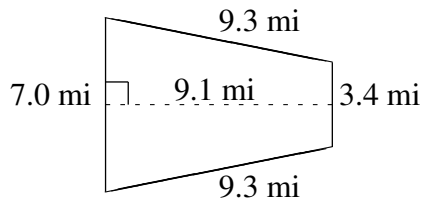


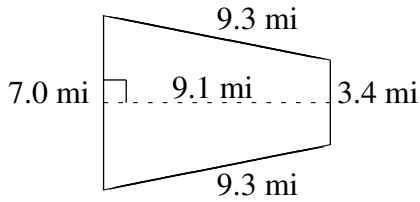
Área y Perímetro de Formas Varias (I)

Halle el área y el perímetro de cada figura.

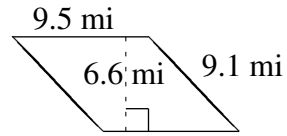


Área y Perímetro de Formas Varias (I) Respuestas

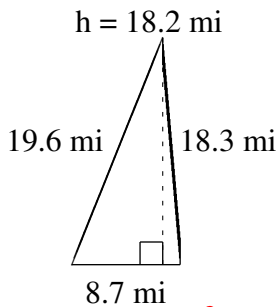
Halle el área y el perímetro de cada figura.



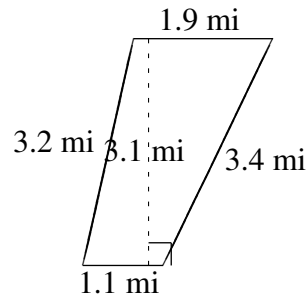
$$A = 47.32 \text{ mi}^2$$
$$P = 29.0 \text{ mi}$$



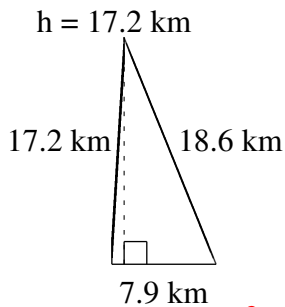
$$A = 62.70 \text{ mi}^2$$
$$P = 37.2 \text{ mi}$$



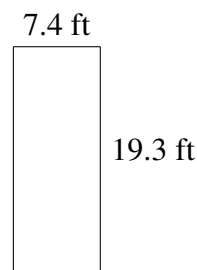
$$A = 79.17 \text{ mi}^2$$
$$P = 46.6 \text{ mi}$$



$$A = 4.65 \text{ mi}^2$$
$$P = 9.6 \text{ mi}$$



$$A = 67.94 \text{ km}^2$$
$$P = 43.7 \text{ km}$$



$$A = 142.82 \text{ ft}^2$$
$$P = 53.4 \text{ ft}$$