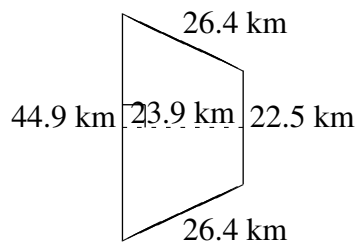
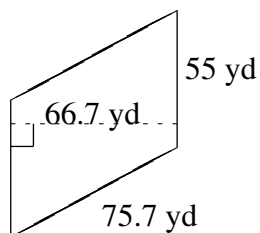
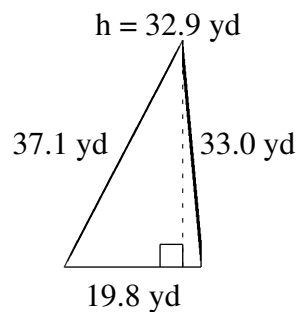
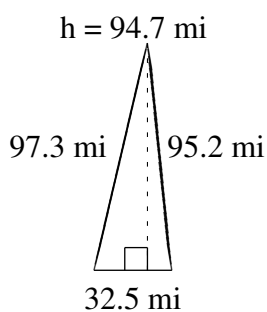
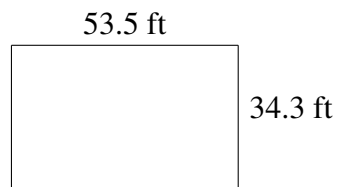
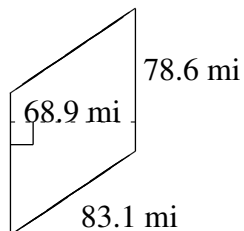


Área y Perímetro de Formas Varias (A)

Halle el área y el perímetro de cada figura.



Área y Perímetro de Formas Varias (A) Respuestas

Halle el área y el perímetro de cada figura.

