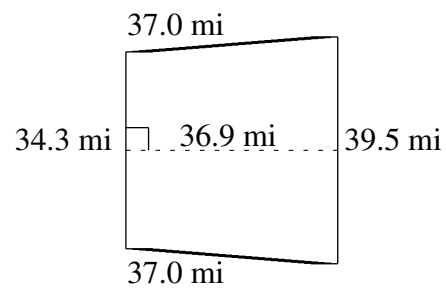
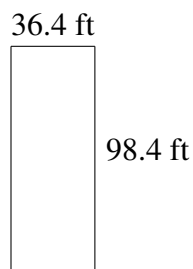
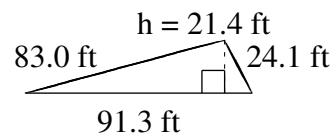
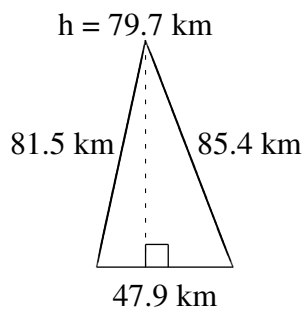
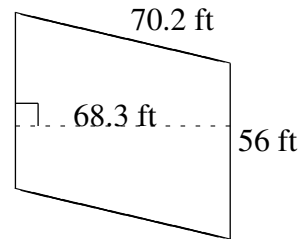
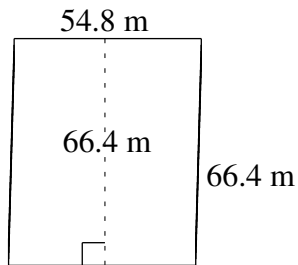


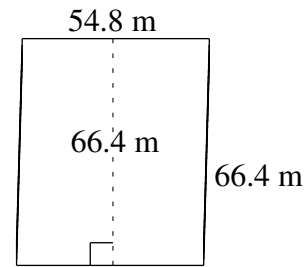
# Área y Perímetro de Formas Varias (J)

Halle el área y el perímetro de cada figura.

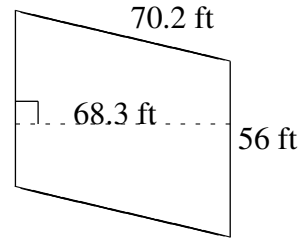


# Área y Perímetro de Formas Varias (J) Respuestas

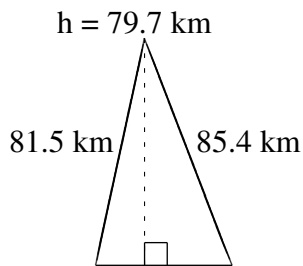
Halle el área y el perímetro de cada figura.



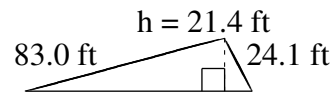
$$A = 3638.72 \text{ m}^2$$
$$P = 242.4 \text{ m}$$



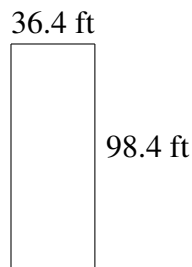
$$A = 3824.8 \text{ ft}^2$$
$$P = 252.4 \text{ ft}$$



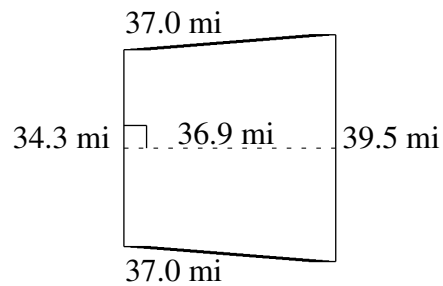
$$47.9 \text{ km}$$
$$A = 1908.815 \text{ km}^2$$
$$P = 214.8 \text{ km}$$



$$91.3 \text{ ft}$$
$$A = 976.91 \text{ ft}^2$$
$$P = 198.4 \text{ ft}$$



$$A = 3581.76 \text{ ft}^2$$
$$P = 269.6 \text{ ft}$$



$$A = 1361.61 \text{ mi}^2$$
$$P = 147.8 \text{ mi}$$