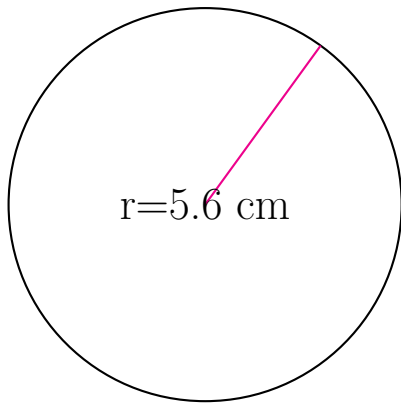


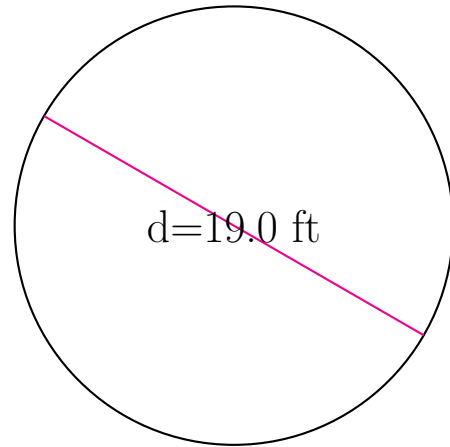
Área y Circunferencia de Círculos (H)

Calcule el área y la circunferencia de cada círculo.



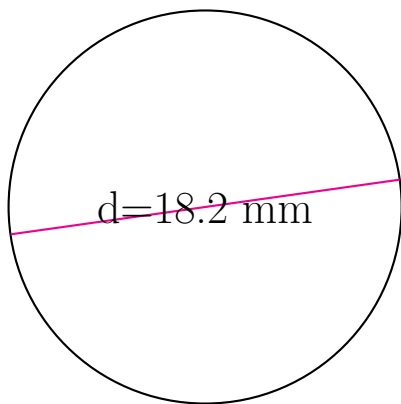
circunferencia = _____

área = _____



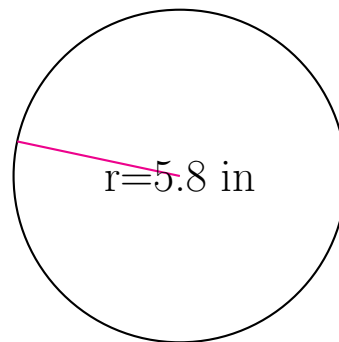
circunferencia = _____

área = _____



circunferencia = _____

área = _____

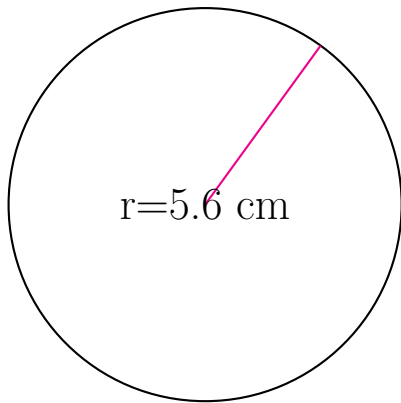


circunferencia = _____

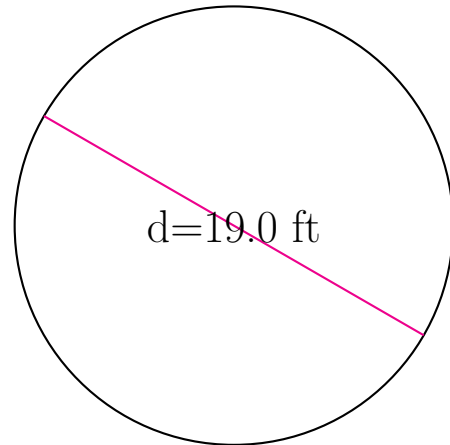
área = _____

Área y Circunferencia de Círculos (H) Respuestas

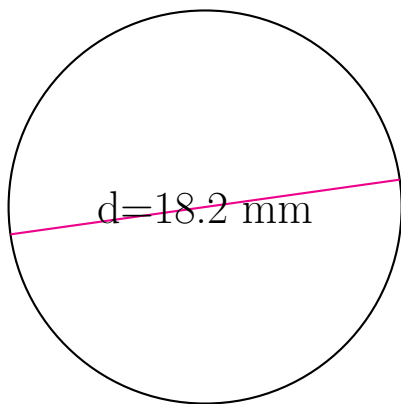
Calcule el área y la circunferencia de cada círculo.



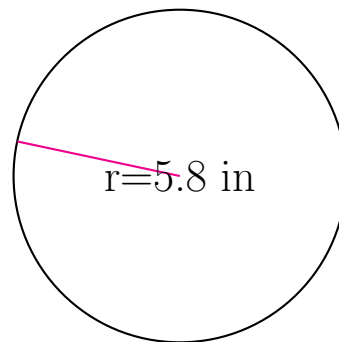
$$\begin{aligned} \text{circunferencia} &= \underline{35.186 \text{ cm}} \\ \text{área} &= \underline{98.52 \text{ cm}^2} \end{aligned}$$



$$\begin{aligned} \text{circunferencia} &= \underline{59.69 \text{ ft}} \\ \text{área} &= \underline{283.529 \text{ ft}^2} \end{aligned}$$



$$\begin{aligned} \text{circunferencia} &= \underline{57.177 \text{ mm}} \\ \text{área} &= \underline{260.155 \text{ mm}^2} \end{aligned}$$



$$\begin{aligned} \text{circunferencia} &= \underline{36.442 \text{ in}} \\ \text{área} &= \underline{105.683 \text{ in}^2} \end{aligned}$$