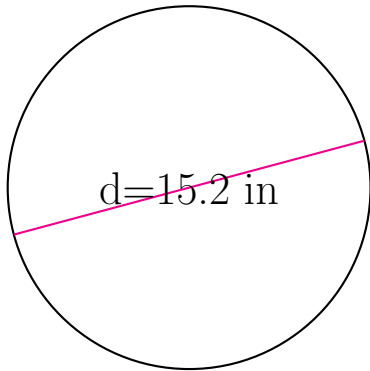


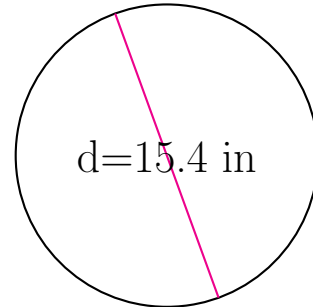
Área y Circunferencia de Círculos (B)

Calcule el área y la circunferencia de cada círculo.



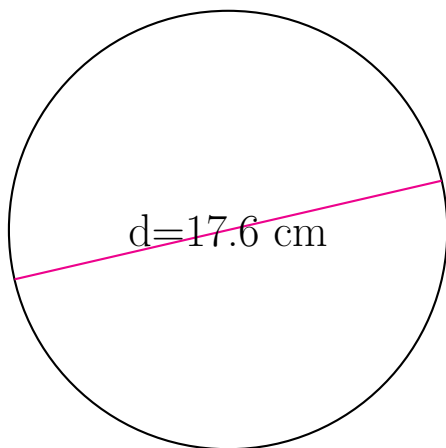
circunferencia = _____

área = _____



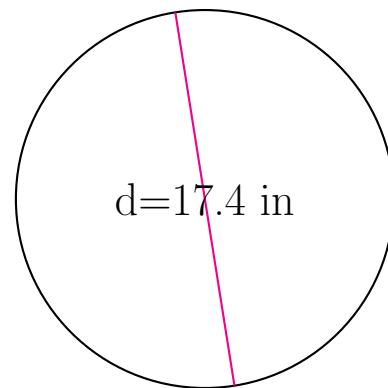
circunferencia = _____

área = _____



circunferencia = _____

área = _____

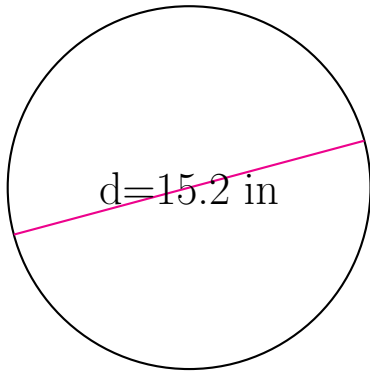


circunferencia = _____

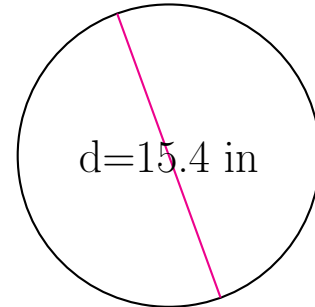
área = _____

Área y Circunferencia de Círculos (B) Respuestas

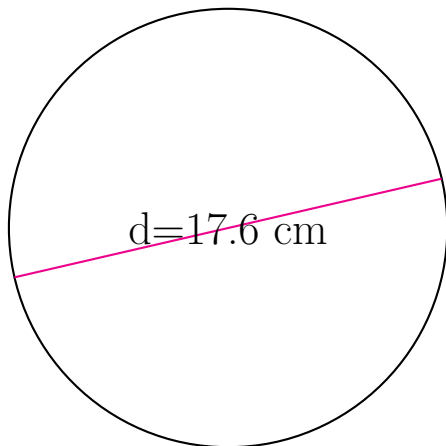
Calcule el área y la circunferencia de cada círculo.



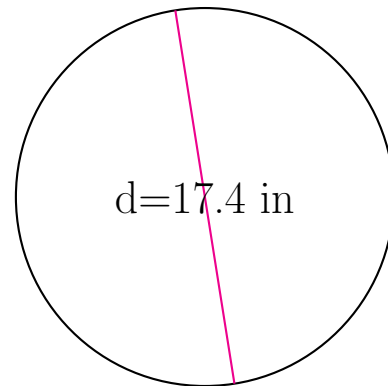
$$\begin{aligned} \text{circunferencia} &= \underline{47.752 \text{ in}} \\ \text{área} &= \underline{181.458 \text{ in}^2} \end{aligned}$$



$$\begin{aligned} \text{circunferencia} &= \underline{48.381 \text{ in}} \\ \text{área} &= \underline{186.265 \text{ in}^2} \end{aligned}$$



$$\begin{aligned} \text{circunferencia} &= \underline{55.292 \text{ cm}} \\ \text{área} &= \underline{243.285 \text{ cm}^2} \end{aligned}$$



$$\begin{aligned} \text{circunferencia} &= \underline{54.664 \text{ in}} \\ \text{área} &= \underline{237.787 \text{ in}^2} \end{aligned}$$