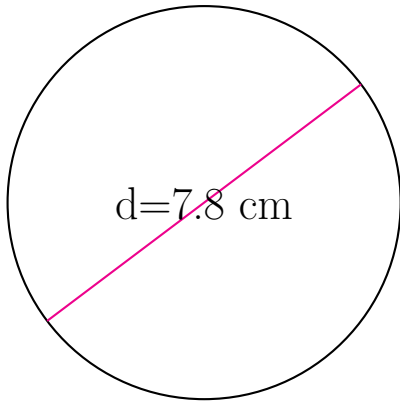


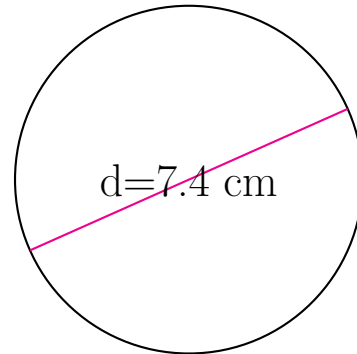
## Área y Circunferencia de Círculos (C)

Calcule el área y la circunferencia de cada círculo.



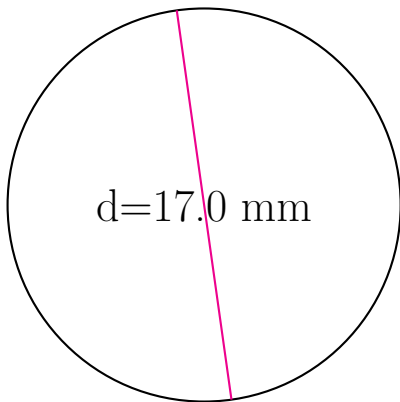
circunferencia = \_\_\_\_\_

área = \_\_\_\_\_



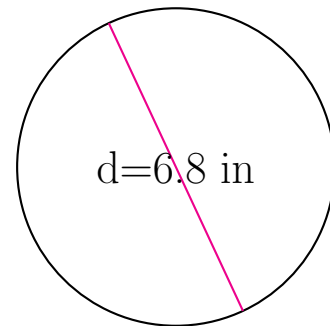
circunferencia = \_\_\_\_\_

área = \_\_\_\_\_



circunferencia = \_\_\_\_\_

área = \_\_\_\_\_



circunferencia = \_\_\_\_\_

área = \_\_\_\_\_