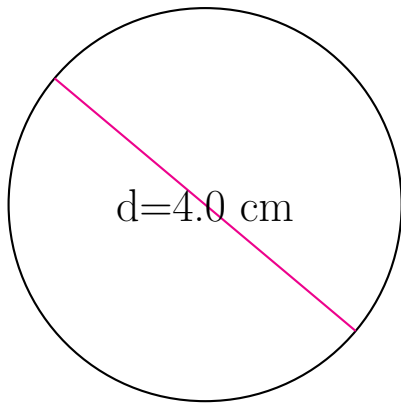


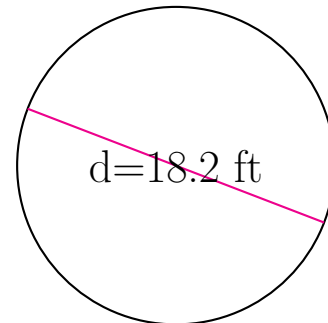
Área y Circunferencia de Círculos (H)

Calcule el área y la circunferencia de cada círculo.



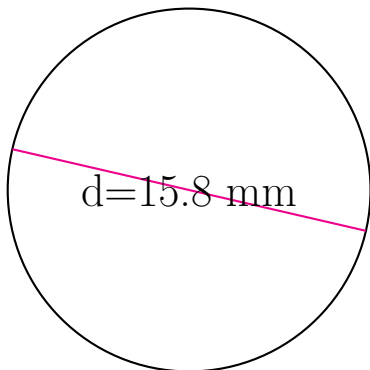
circunferencia = _____

área = _____



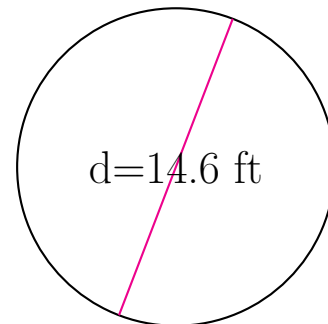
circunferencia = _____

área = _____



circunferencia = _____

área = _____

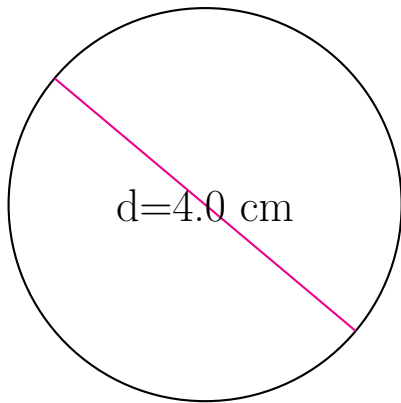


circunferencia = _____

área = _____

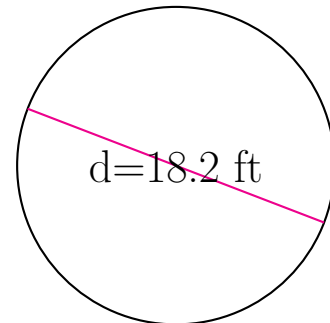
Área y Circunferencia de Círculos (H) Respuestas

Calcule el área y la circunferencia de cada círculo.



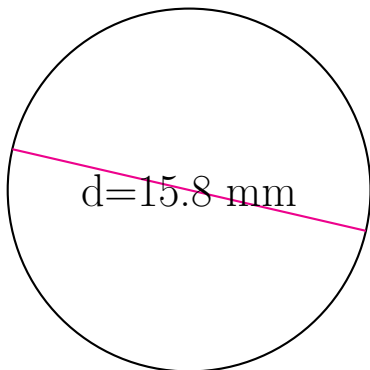
$$\text{circunferencia} = \underline{12.566 \text{ cm}}$$

$$\text{área} = \underline{12.566 \text{ cm}^2}$$



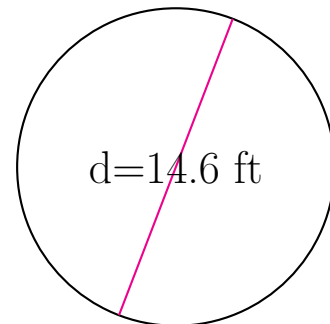
$$\text{circunferencia} = \underline{57.177 \text{ ft}}$$

$$\text{área} = \underline{260.155 \text{ ft}^2}$$



$$\text{circunferencia} = \underline{49.637 \text{ mm}}$$

$$\text{área} = \underline{196.067 \text{ mm}^2}$$



$$\text{circunferencia} = \underline{45.867 \text{ ft}}$$

$$\text{área} = \underline{167.415 \text{ ft}^2}$$