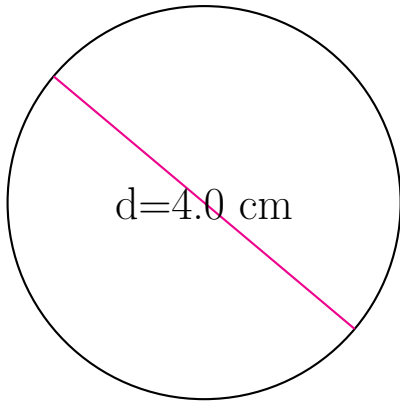


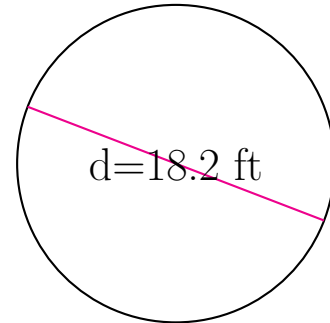
Área y Circunferencia de Círculos (H)

Calcule el área y la circunferencia de cada círculo.



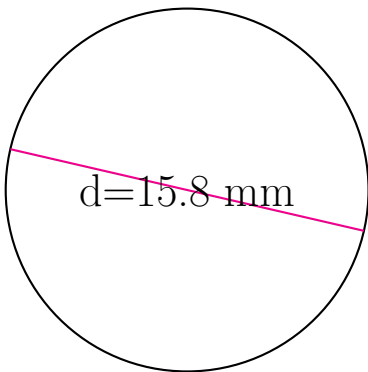
circunferencia = _____

área = _____



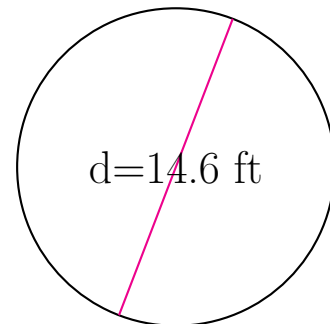
circunferencia = _____

área = _____



circunferencia = _____

área = _____



circunferencia = _____

área = _____