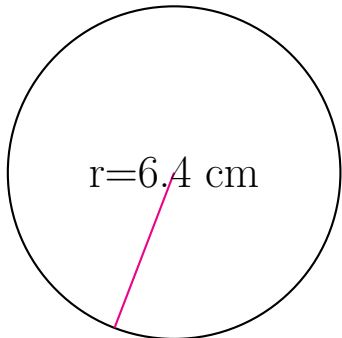


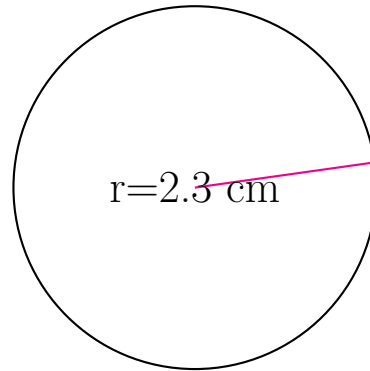
Área y Circunferencia de Círculos (F)

Calcule el área y la circunferencia de cada círculo.



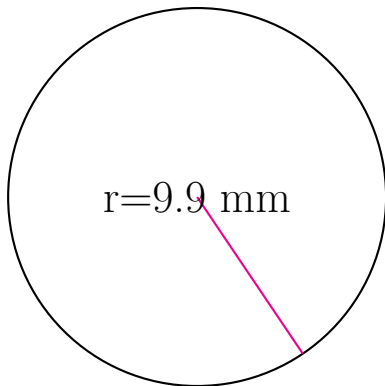
circunferencia = _____

área = _____



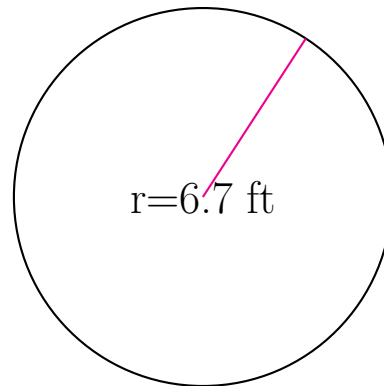
circunferencia = _____

área = _____



circunferencia = _____

área = _____

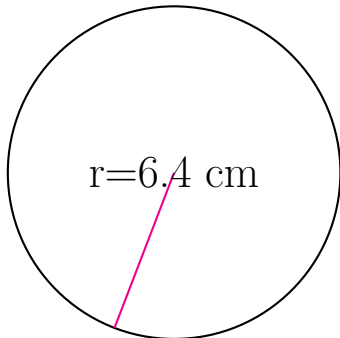


circunferencia = _____

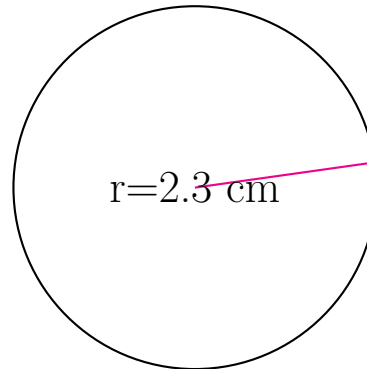
área = _____

Área y Circunferencia de Círculos (F) Respuestas

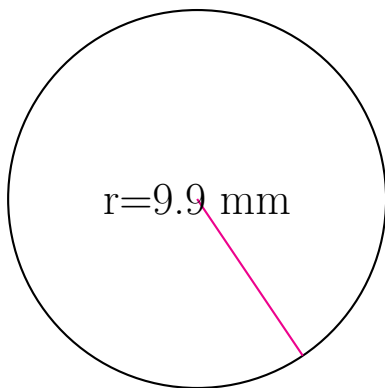
Calcule el área y la circunferencia de cada círculo.



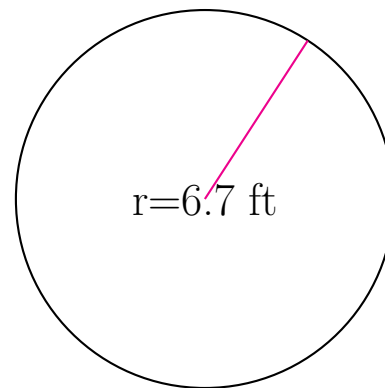
$$\begin{aligned} \text{circunferencia} &= \underline{40.212 \text{ cm}} \\ \text{área} &= \underline{128.68 \text{ cm}^2} \end{aligned}$$



$$\begin{aligned} \text{circunferencia} &= \underline{14.451 \text{ cm}} \\ \text{área} &= \underline{16.619 \text{ cm}^2} \end{aligned}$$



$$\begin{aligned} \text{circunferencia} &= \underline{62.204 \text{ mm}} \\ \text{área} &= \underline{307.907 \text{ mm}^2} \end{aligned}$$



$$\begin{aligned} \text{circunferencia} &= \underline{42.097 \text{ ft}} \\ \text{área} &= \underline{141.026 \text{ ft}^2} \end{aligned}$$