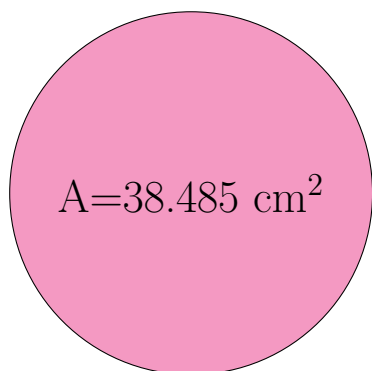
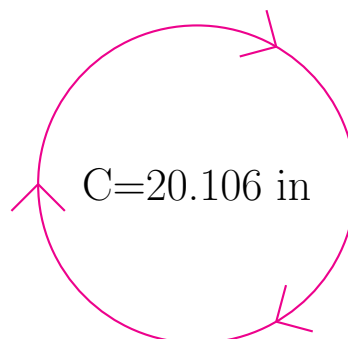


Radio y Diámetro de Círculos (B)

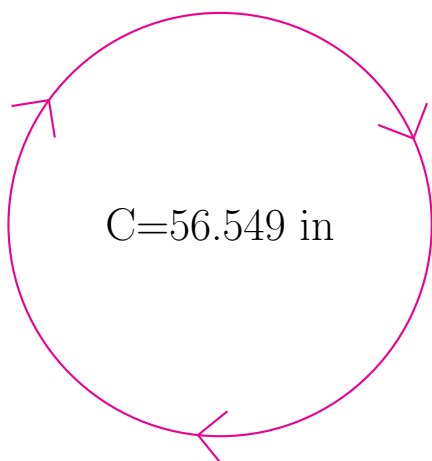
Calcule el radio y el diámetro de cada círculo.



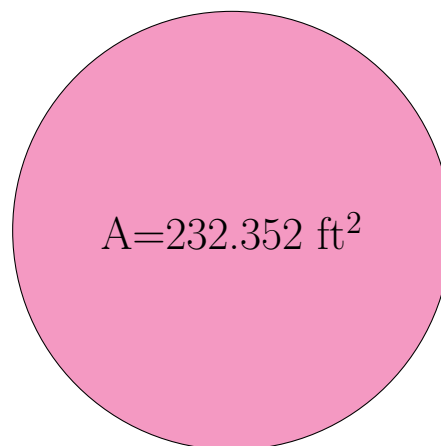
radio = _____
diámetro = _____



radio = _____
diámetro = _____



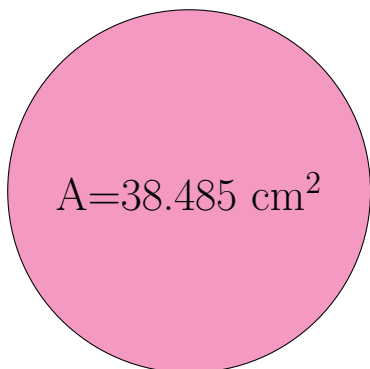
radio = _____
diámetro = _____



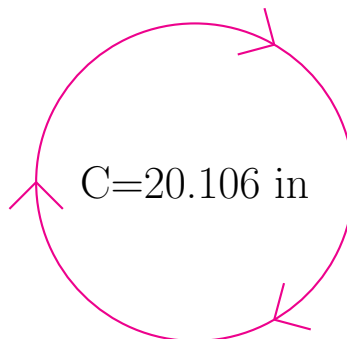
radio = _____
diámetro = _____

Radio y Diámetro de Círculos (B) Respuestas

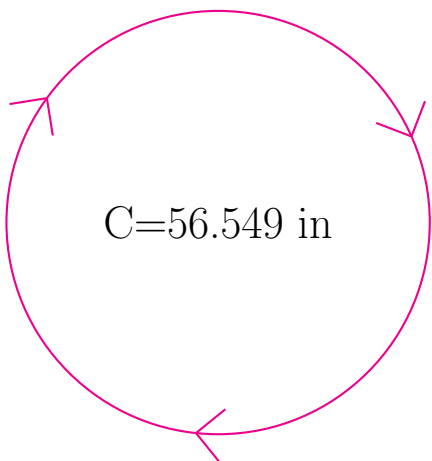
Calcule el radio y el diámetro de cada círculo.



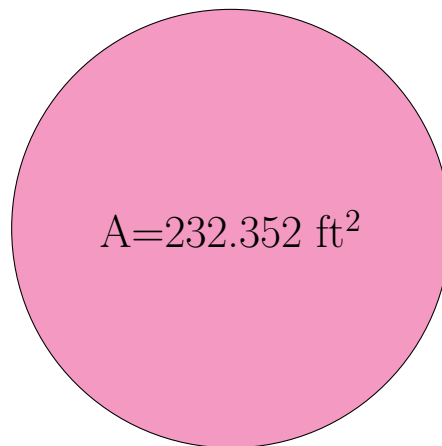
radio = 3.5 cm
diámetro = 7.0 cm



radio = 3.2 in
diámetro = 6.4 in



radio = 9.0 in
diámetro = 18.0 in



radio = 8.6 ft
diámetro = 17.2 ft