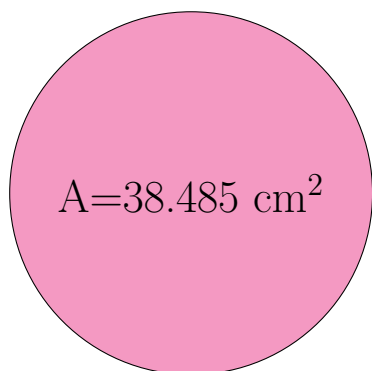
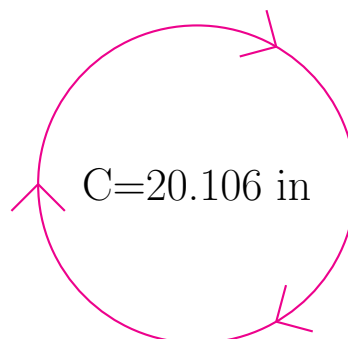


## Radio y Diámetro de Círculos (B)

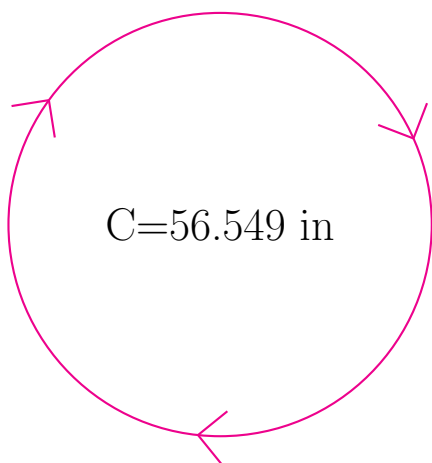
Calcule el radio y el diámetro de cada círculo.



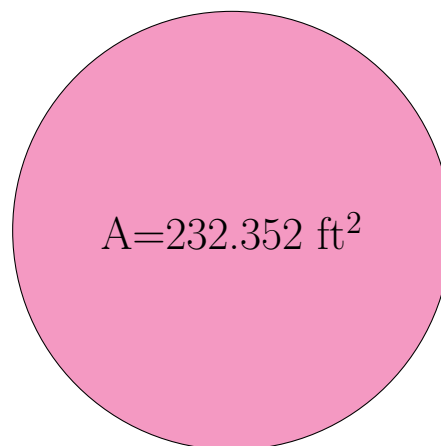
radio = \_\_\_\_\_  
diámetro = \_\_\_\_\_



radio = \_\_\_\_\_  
diámetro = \_\_\_\_\_



radio = \_\_\_\_\_  
diámetro = \_\_\_\_\_



radio = \_\_\_\_\_  
diámetro = \_\_\_\_\_