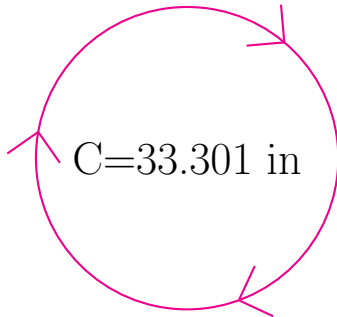
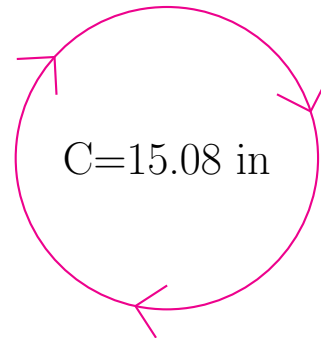


Radio y Diámetro de Círculos (D)

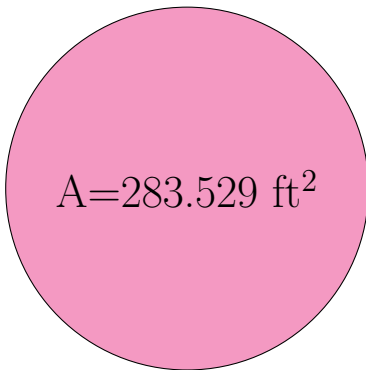
Calcule el radio y el diámetro de cada círculo.



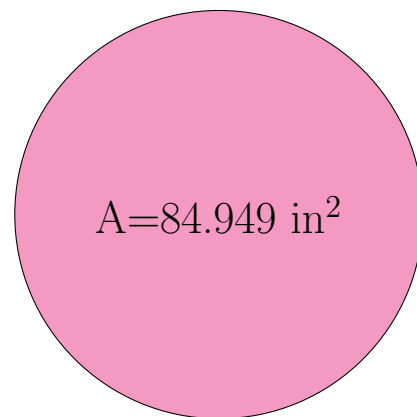
radio = _____
diámetro = _____



radio = _____
diámetro = _____



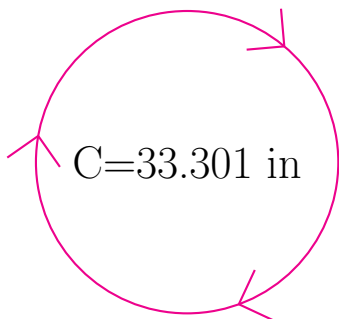
radio = _____
diámetro = _____



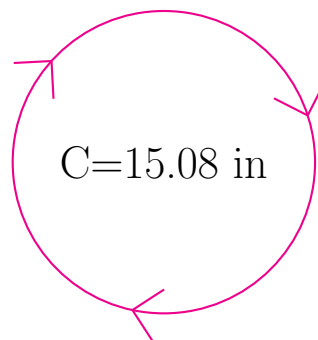
radio = _____
diámetro = _____

Radio y Diámetro de Círculos (D) Respuestas

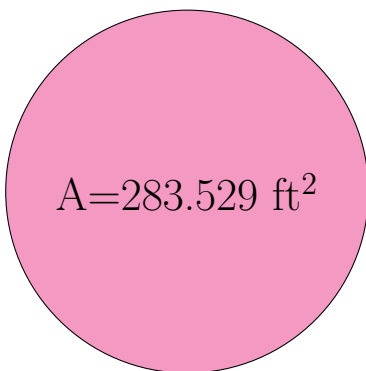
Calcule el radio y el diámetro de cada círculo.



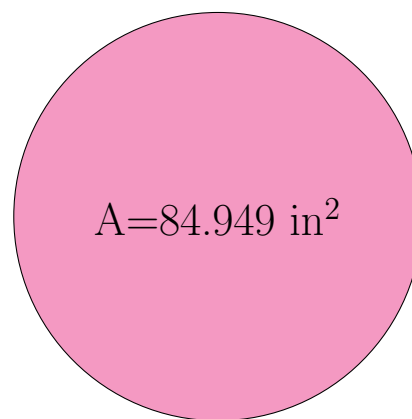
$$\begin{aligned} \text{radio} &= \underline{5.3 \text{ in}} \\ \text{diámetro} &= \underline{10.6 \text{ in}} \end{aligned}$$



$$\begin{aligned} \text{radio} &= \underline{2.4 \text{ in}} \\ \text{diámetro} &= \underline{4.8 \text{ in}} \end{aligned}$$



$$\begin{aligned} \text{radio} &= \underline{9.5 \text{ ft}} \\ \text{diámetro} &= \underline{19.0 \text{ ft}} \end{aligned}$$



$$\begin{aligned} \text{radio} &= \underline{5.2 \text{ in}} \\ \text{diámetro} &= \underline{10.4 \text{ in}} \end{aligned}$$